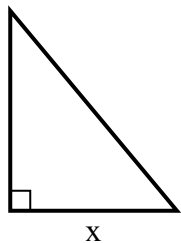


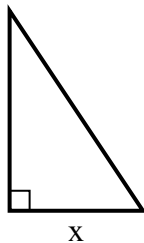


Найдите значение X.

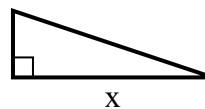
1) площадь = 15 u^2



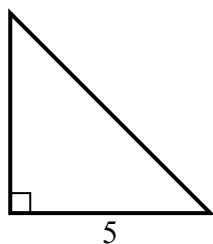
2) площадь = 3 u^2



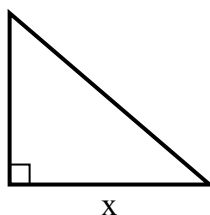
3) площадь = 6 u^2



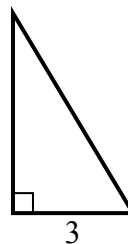
4) площадь = 12.5 u^2



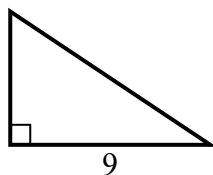
5) площадь = 21 u^2



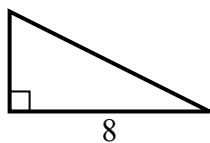
6) площадь = 7.5 u^2



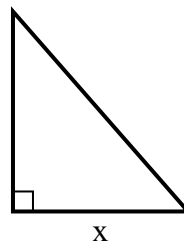
7) площадь = 27 u^2



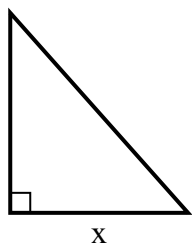
8) площадь = 16 u^2



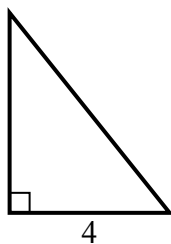
9) площадь = 28 u^2



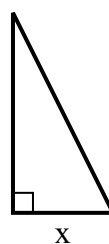
10) площадь = 36 u^2



11) площадь = 10 u^2



12) площадь = 4 u^2



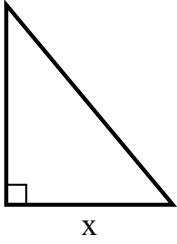
Ответы

1. _____
2. _____
3. _____
4. _____
5. _____
6. _____
7. _____
8. _____
9. _____
10. _____
11. _____
12. _____

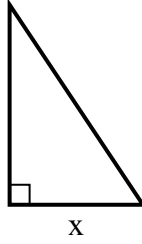


Найдите значение X.

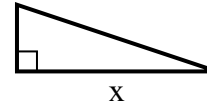
1) площадь = 15 u^2



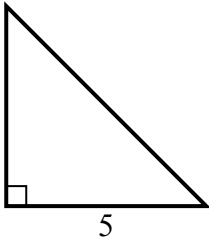
2) площадь = 3 u^2



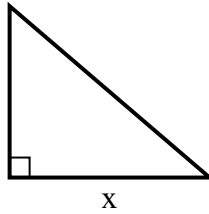
3) площадь = 6 u^2



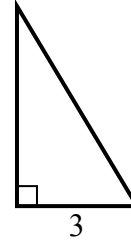
4) площадь = 12.5 u^2



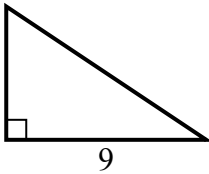
5) площадь = 21 u^2



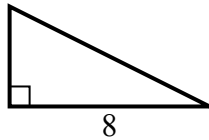
6) площадь = 7.5 u^2



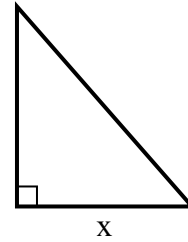
7) площадь = 27 u^2



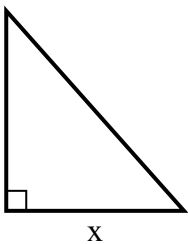
8) площадь = 16 u^2



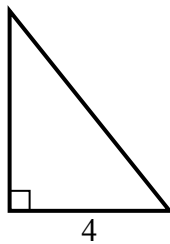
9) площадь = 28 u^2



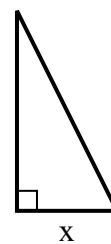
10) площадь = 36 u^2



11) площадь = 10 u^2



12) площадь = 4 u^2



Ответы

1. 5

2. 2

3. 6

4. 5

5. 7

6. 5

7. 6

8. 4

9. 7

10. 8

11. 5

12. 2