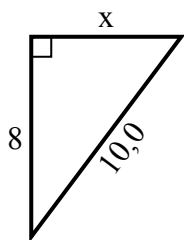


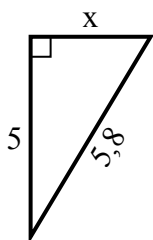


Найдите значение x .

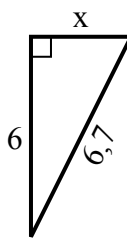
1) Периметр = 24 у



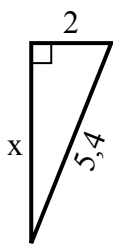
2) Периметр = 13,8 у



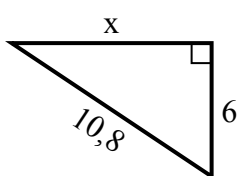
3) Периметр = 15,7 у



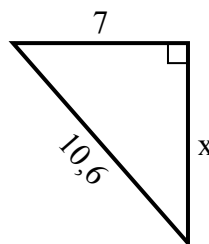
4) Периметр = 12,4 у



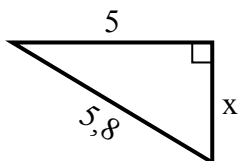
5) Периметр = 25,8 у



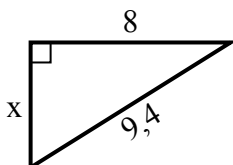
6) Периметр = 25,6 у



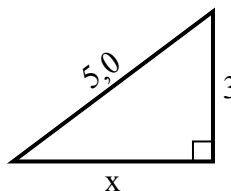
7) Периметр = 13,8 у



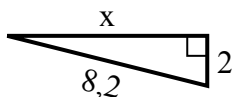
8) Периметр = 22,4 у



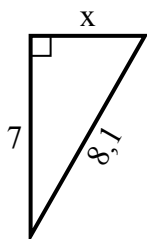
9) Периметр = 12 у



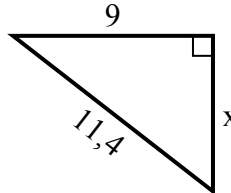
10) Периметр = 18,2 у



11) Периметр = 19,1 у



12) Периметр = 27,4 у



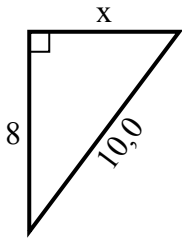
Ответы

1. _____
2. _____
3. _____
4. _____
5. _____
6. _____
7. _____
8. _____
9. _____
10. _____
11. _____
12. _____

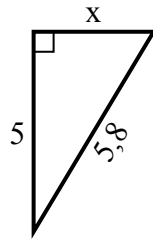


Найдите значение X.

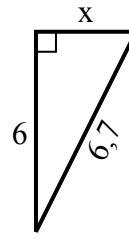
1) Периметр = 24 u



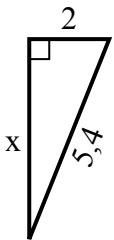
2) Периметр = 13,8 u



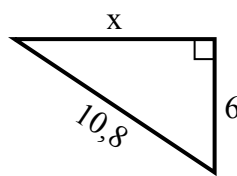
3) Периметр = 15,7 u



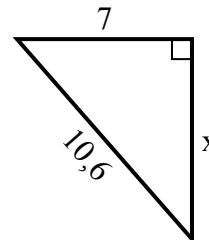
4) Периметр = 12,4 u



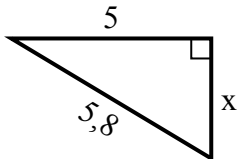
5) Периметр = 25,8 u



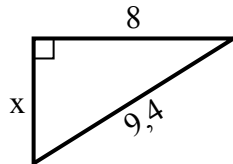
6) Периметр = 25,6 u



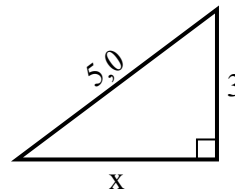
7) Периметр = 13,8 u



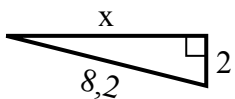
8) Периметр = 22,4 u



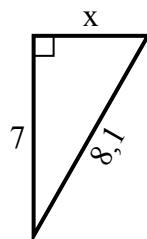
9) Периметр = 12 u



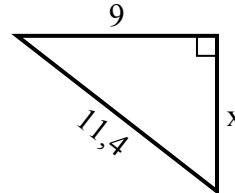
10) Периметр = 18,2 u



11) Периметр = 19,1 u



12) Периметр = 27,4 u

**Ответы**1. 62. 33. 34. 55. 96. 87. 38. 59. 410. 811. 412. 7