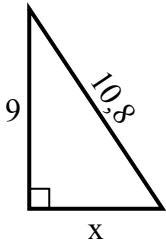


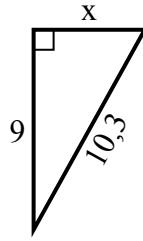


Найдите значение X .

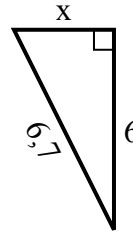
1) Периметр = 25,8 у



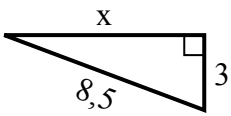
2) Периметр = 24,3 у



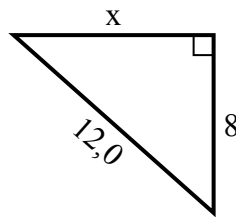
3) Периметр = 15,7 у



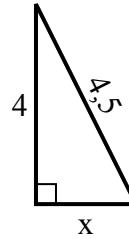
4) Периметр = 19,5 у



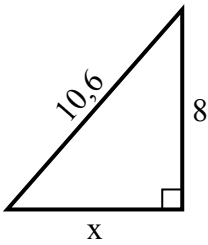
5) Периметр = 29 у



6) Периметр = 10,5 у



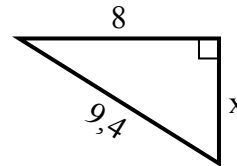
7) Периметр = 25,6 у



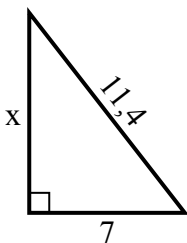
8) Периметр = 14,3 у



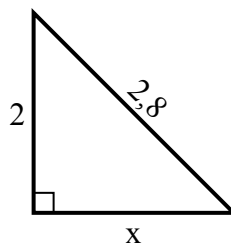
9) Периметр = 22,4 у



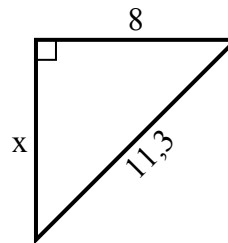
10) Периметр = 27,4 у



11) Периметр = 6,8 у



12) Периметр = 27,3 у



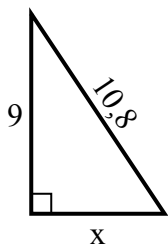
Ответы

1. _____
2. _____
3. _____
4. _____
5. _____
6. _____
7. _____
8. _____
9. _____
10. _____
11. _____
12. _____

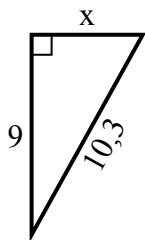


Найдите значение X.

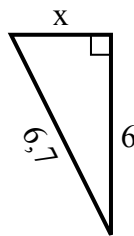
1) Периметр = 25,8 у



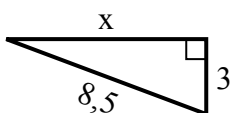
2) Периметр = 24,3 у



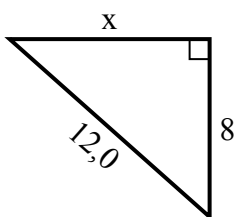
3) Периметр = 15,7 у



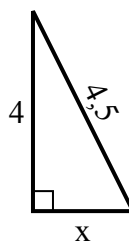
4) Периметр = 19,5 у



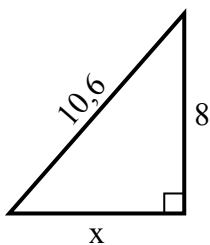
5) Периметр = 29 у



6) Периметр = 10,5 у



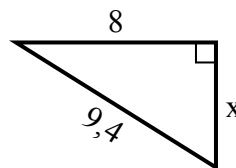
7) Периметр = 25,6 у



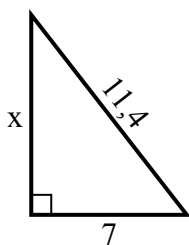
8) Периметр = 14,3 у



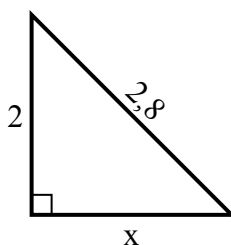
9) Периметр = 22,4 у



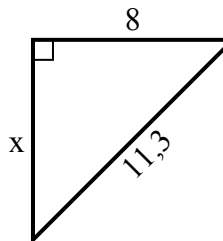
10) Периметр = 27,4 у



11) Периметр = 6,8 у



12) Периметр = 27,3 у

**Ответы**1. 62. 53. 34. 85. 96. 27. 78. 29. 510. 911. 212. 8