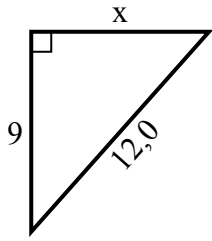


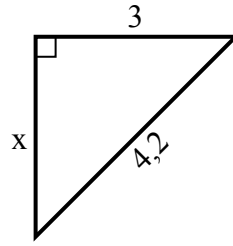


Найдите значение x .

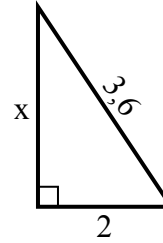
1) Периметр = 29 у



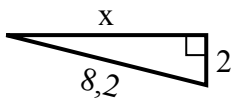
2) Периметр = 10,2 у



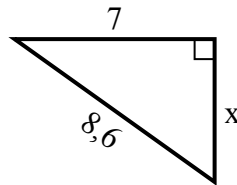
3) Периметр = 8,6 у



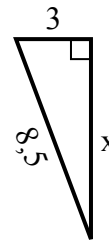
4) Периметр = 18,2 у



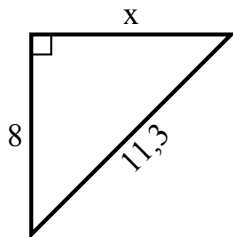
5) Периметр = 20,6 у



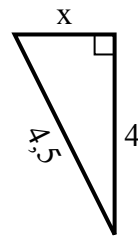
6) Периметр = 19,5 у



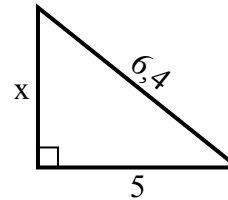
7) Периметр = 27,3 у



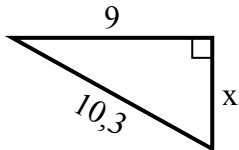
8) Периметр = 10,5 у



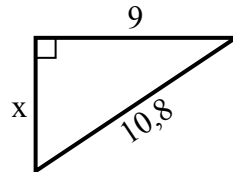
9) Периметр = 15,4 у



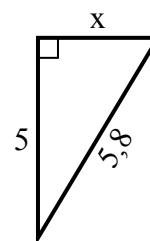
10) Периметр = 24,3 у



11) Периметр = 25,8 у



12) Периметр = 13,8 у

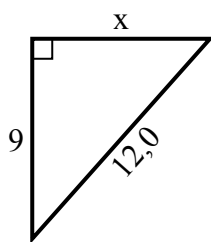


Ответы

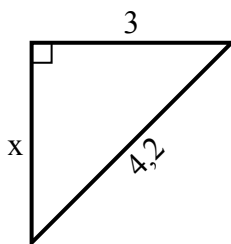
1. _____
2. _____
3. _____
4. _____
5. _____
6. _____
7. _____
8. _____
9. _____
10. _____
11. _____
12. _____

Найдите значение x .

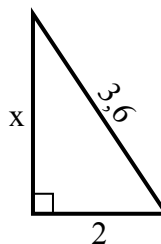
1) Периметр = 29 у



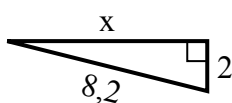
2) Периметр = 10,2 у



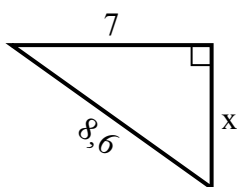
3) Периметр = 8,6 у



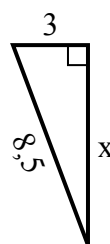
4) Периметр = 18,2 у



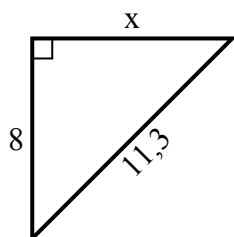
5) Периметр = 20,6 у



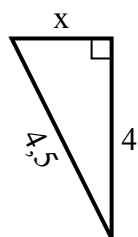
6) Периметр = 19,5 у



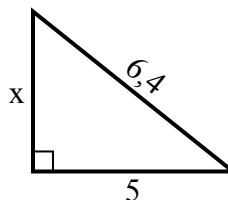
7) Периметр = 27,3 у



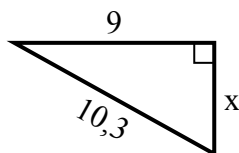
8) Периметр = 10,5 у



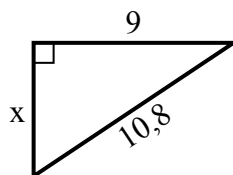
9) Периметр = 15,4 у



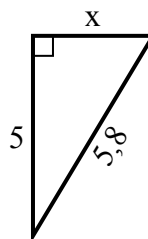
10) Периметр = 24,3 у



11) Периметр = 25,8 у



12) Периметр = 13,8 у

**Ответы**1. 82. 33. 34. 85. 56. 87. 88. 29. 410. 511. 612. 3