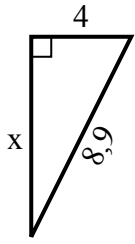


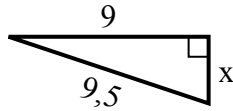


Найдите значение x .

1) Периметр = 20,9 у



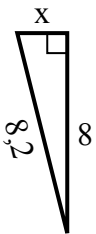
2) Периметр = 21,5 у



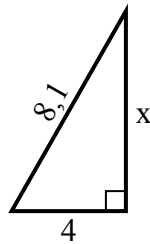
3) Периметр = 14,3 у



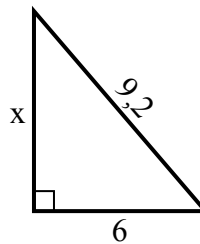
4) Периметр = 18,2 у



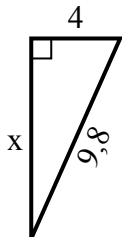
5) Периметр = 19,1 у



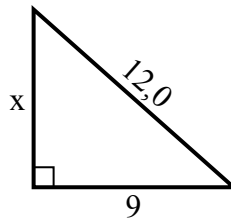
6) Периметр = 22,2 у



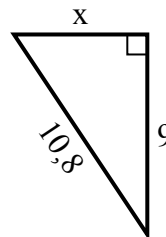
7) Периметр = 22,8 у



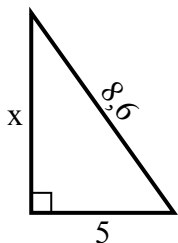
8) Периметр = 29 у



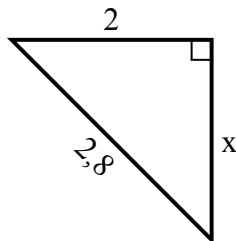
9) Периметр = 25,8 у



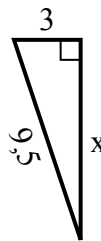
10) Периметр = 20,6 у



11) Периметр = 6,8 у



12) Периметр = 21,5 у

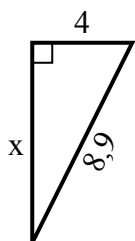


Ответы

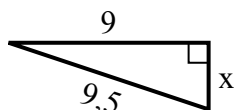
1. _____
2. _____
3. _____
4. _____
5. _____
6. _____
7. _____
8. _____
9. _____
10. _____
11. _____
12. _____

Найдите значение X .

1) Периметр = 20,9 у



2) Периметр = 21,5 у



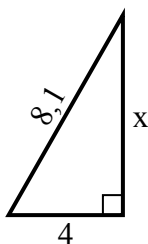
3) Периметр = 14,3 у



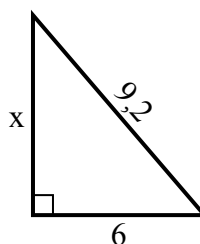
4) Периметр = 18,2 у



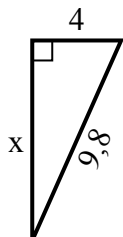
5) Периметр = 19,1 у



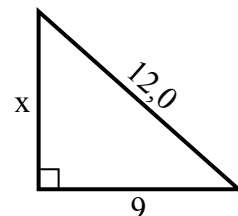
6) Периметр = 22,2 у



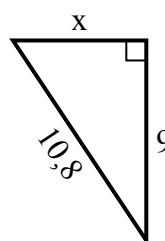
7) Периметр = 22,8 у



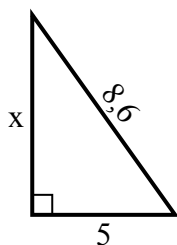
8) Периметр = 29 у



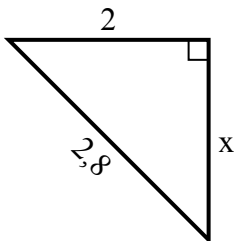
9) Периметр = 25,8 у



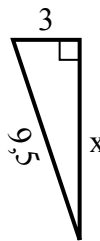
10) Периметр = 20,6 у



11) Периметр = 6,8 у



12) Периметр = 21,5 у

**Ответы**1. 82. 33. 24. 25. 76. 77. 98. 89. 610. 711. 212. 9