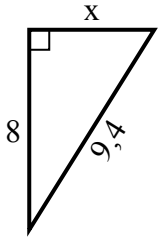


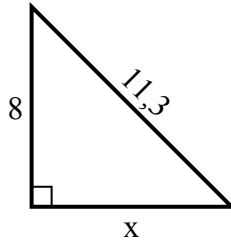


Найдите значение x .

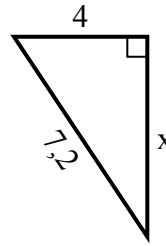
1) Периметр = 22,4 у



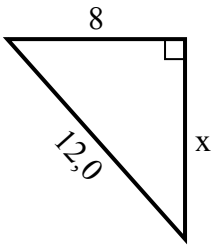
2) Периметр = 27,3 у



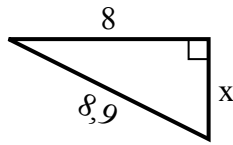
3) Периметр = 17,2 у



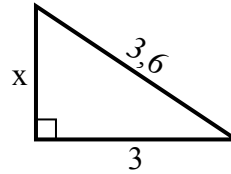
4) Периметр = 29 у



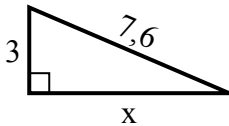
5) Периметр = 20,9 у



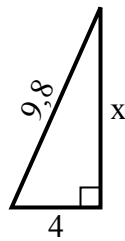
6) Периметр = 8,6 у



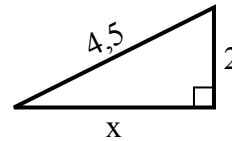
7) Периметр = 17,6 у



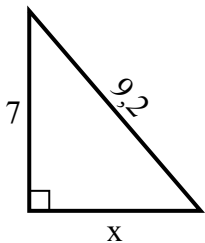
8) Периметр = 22,8 у



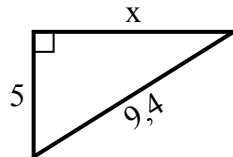
9) Периметр = 10,5 у



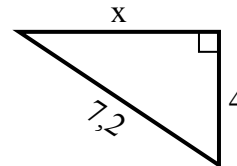
10) Периметр = 22,2 у



11) Периметр = 22,4 у



12) Периметр = 17,2 у

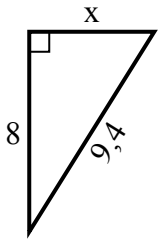


Ответы

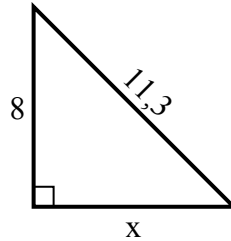
1. _____
2. _____
3. _____
4. _____
5. _____
6. _____
7. _____
8. _____
9. _____
10. _____
11. _____
12. _____

Найдите значение X .

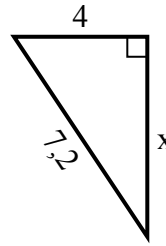
1) Периметр = 22,4 у



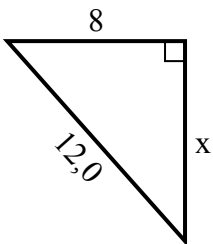
2) Периметр = 27,3 у



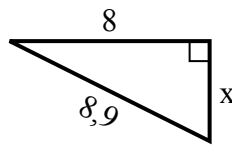
3) Периметр = 17,2 у



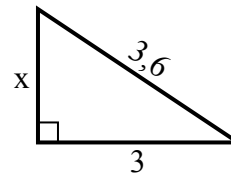
4) Периметр = 29 у



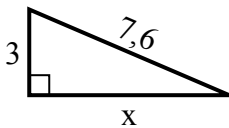
5) Периметр = 20,9 у



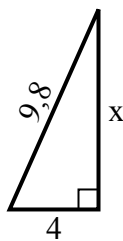
6) Периметр = 8,6 у



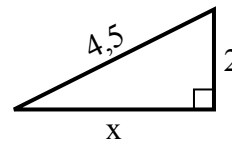
7) Периметр = 17,6 у



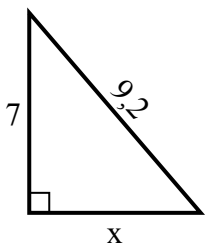
8) Периметр = 22,8 у



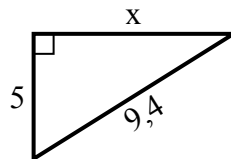
9) Периметр = 10,5 у



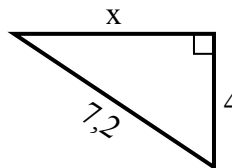
10) Периметр = 22,2 у



11) Периметр = 22,4 у



12) Периметр = 17,2 у

**Ответы**1. 52. 83. 64. 95. 46. 27. 78. 99. 410. 611. 812. 6