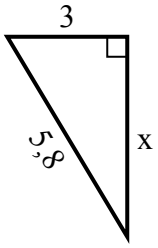


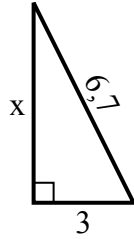


Найдите значение x .

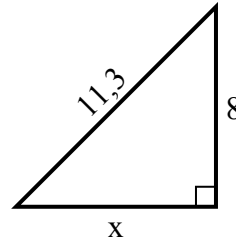
1) Периметр = 13,8 у



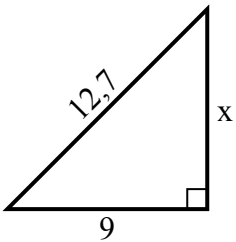
2) Периметр = 15,7 у



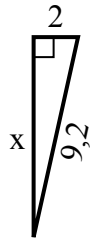
3) Периметр = 27,3 у



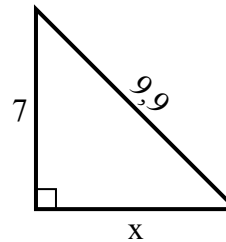
4) Периметр = 30,7 у



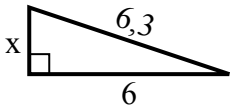
5) Периметр = 20,2 у



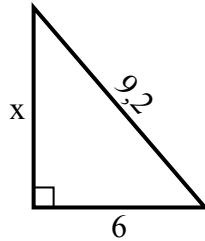
6) Периметр = 23,9 у



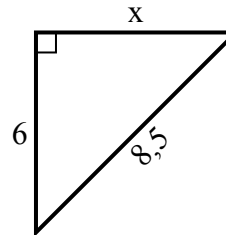
7) Периметр = 14,3 у



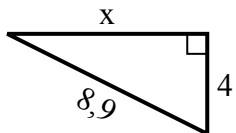
8) Периметр = 22,2 у



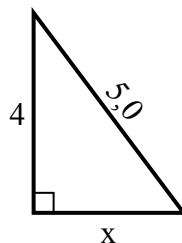
9) Периметр = 20,5 у



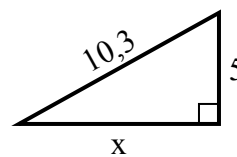
10) Периметр = 20,9 у



11) Периметр = 12 у



12) Периметр = 24,3 у

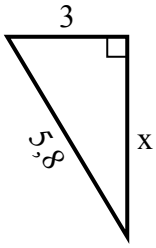


Ответы

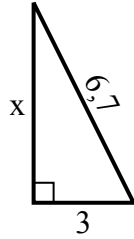
1. _____
2. _____
3. _____
4. _____
5. _____
6. _____
7. _____
8. _____
9. _____
10. _____
11. _____
12. _____

Найдите значение x .

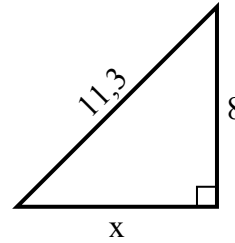
1) Периметр = 13,8 у



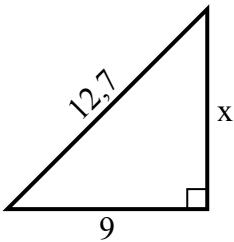
2) Периметр = 15,7 у



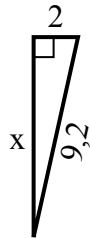
3) Периметр = 27,3 у



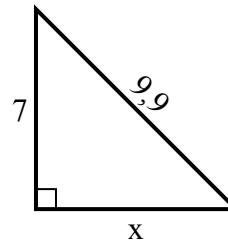
4) Периметр = 30,7 у



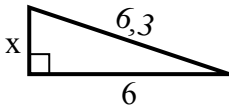
5) Периметр = 20,2 у



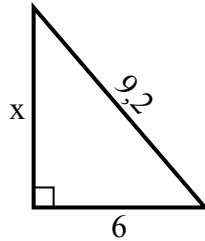
6) Периметр = 23,9 у



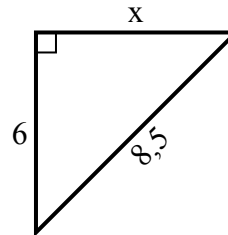
7) Периметр = 14,3 у



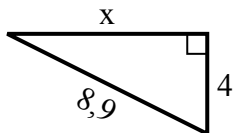
8) Периметр = 22,2 у



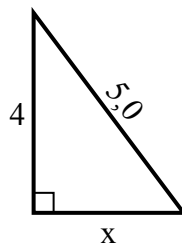
9) Периметр = 20,5 у



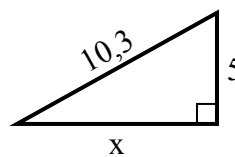
10) Периметр = 20,9 у



11) Периметр = 12 у



12) Периметр = 24,3 у

**Ответы**1. 52. 63. 84. 95. 96. 77. 28. 79. 610. 811. 312. 9