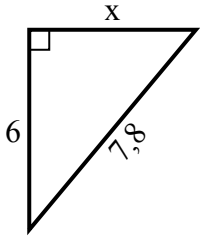


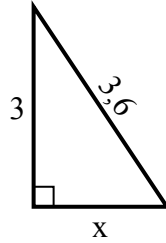


Найдите значение X.

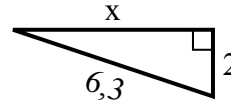
1) Периметр = 18,8 у



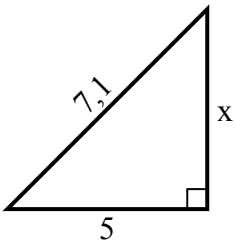
2) Периметр = 8,6 у



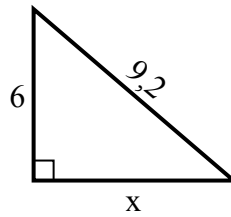
3) Периметр = 14,3 у



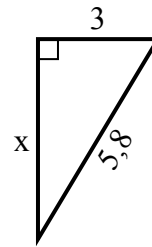
4) Периметр = 17,1 у



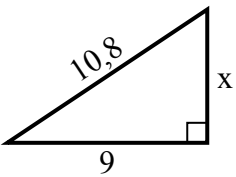
5) Периметр = 22,2 у



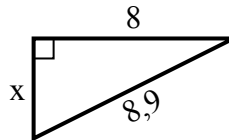
6) Периметр = 13,8 у



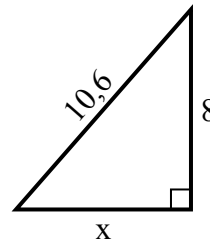
7) Периметр = 25,8 у



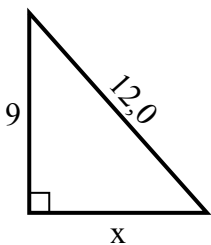
8) Периметр = 20,9 у



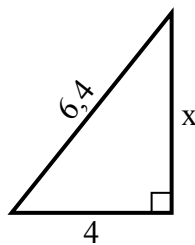
9) Периметр = 25,6 у



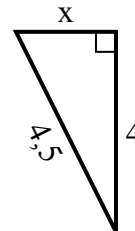
10) Периметр = 29 у



11) Периметр = 15,4 у



12) Периметр = 10,5 у



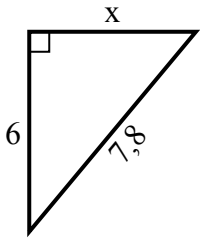
Ответы

1. _____
2. _____
3. _____
4. _____
5. _____
6. _____
7. _____
8. _____
9. _____
10. _____
11. _____
12. _____

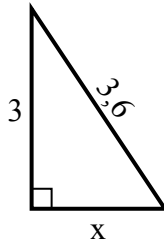


Найдите значение X.

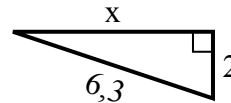
1) Периметр = 18,8 u



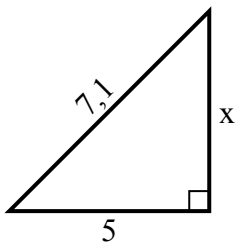
2) Периметр = 8,6 u



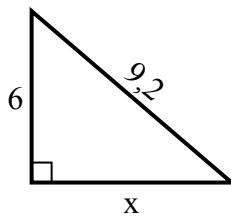
3) Периметр = 14,3 u



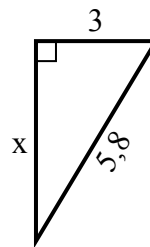
4) Периметр = 17,1 u



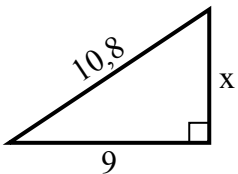
5) Периметр = 22,2 u



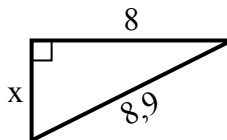
6) Периметр = 13,8 u



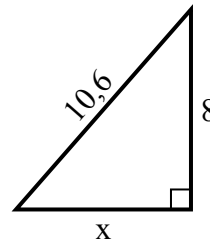
7) Периметр = 25,8 u



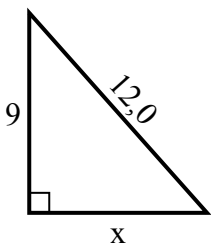
8) Периметр = 20,9 u



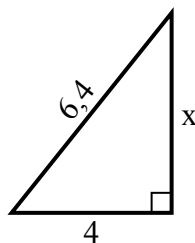
9) Периметр = 25,6 u



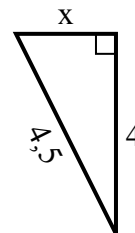
10) Периметр = 29 u



11) Периметр = 15,4 u



12) Периметр = 10,5 u

**Ответы**1. 52. 23. 64. 55. 76. 57. 68. 49. 710. 811. 512. 2