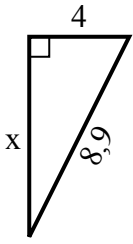


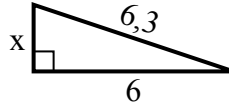


Найдите значение X.

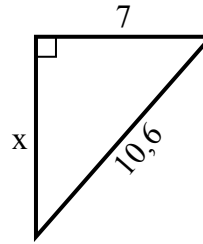
1) Периметр = 20,9 у



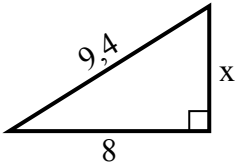
2) Периметр = 14,3 у



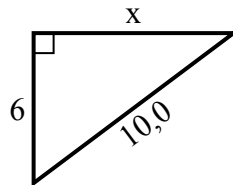
3) Периметр = 25,6 у



4) Периметр = 22,4 у



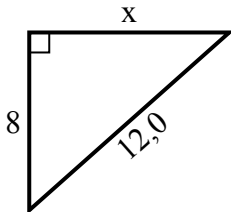
5) Периметр = 24 у



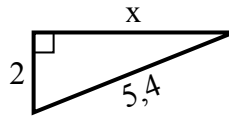
6) Периметр = 20,2 у



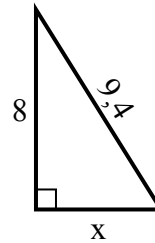
7) Периметр = 29 у



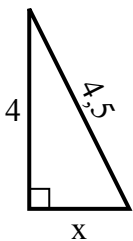
8) Периметр = 12,4 у



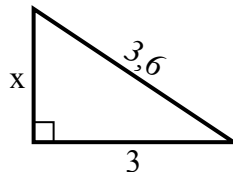
9) Периметр = 22,4 у



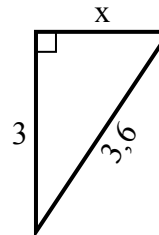
10) Периметр = 10,5 у



11) Периметр = 8,6 у



12) Периметр = 8,6 у



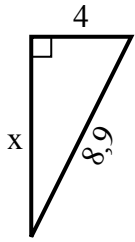
Ответы

1. _____
2. _____
3. _____
4. _____
5. _____
6. _____
7. _____
8. _____
9. _____
10. _____
11. _____
12. _____

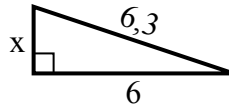


Найдите значение X.

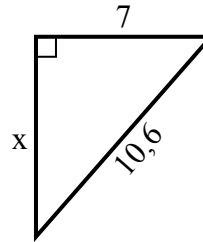
1) Периметр = 20,9 у



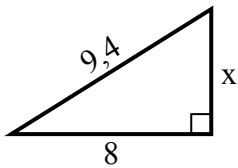
2) Периметр = 14,3 у



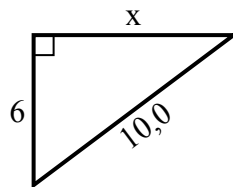
3) Периметр = 25,6 у



4) Периметр = 22,4 у



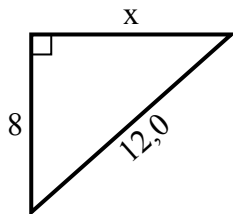
5) Периметр = 24 у



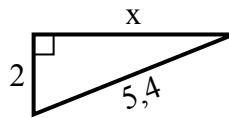
6) Периметр = 20,2 у



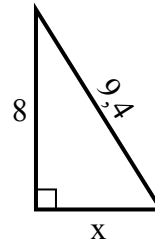
7) Периметр = 29 у



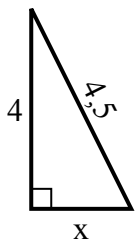
8) Периметр = 12,4 у



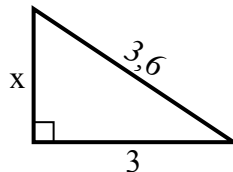
9) Периметр = 22,4 у



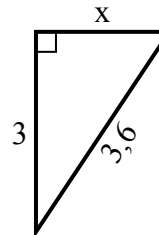
10) Периметр = 10,5 у



11) Периметр = 8,6 у



12) Периметр = 8,6 у

**Ответы**1. 82. 23. 84. 55. 86. 27. 98. 59. 510. 211. 212. 2