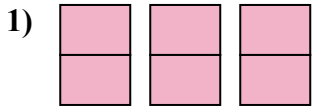


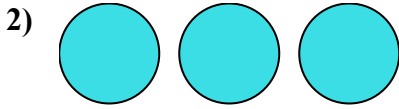


Запишите заштрихованную сумму дробью.

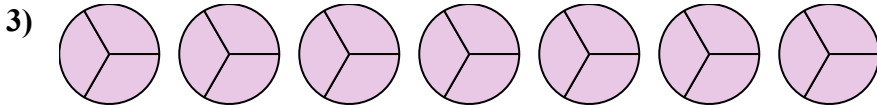
**Ответы**



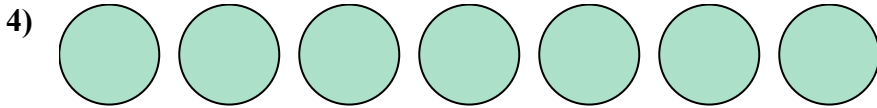
1. \_\_\_\_\_



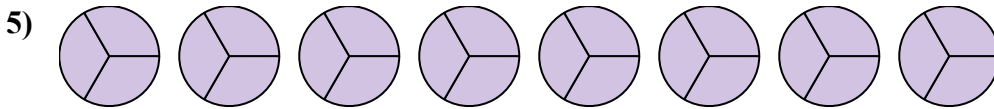
2. \_\_\_\_\_




3. \_\_\_\_\_



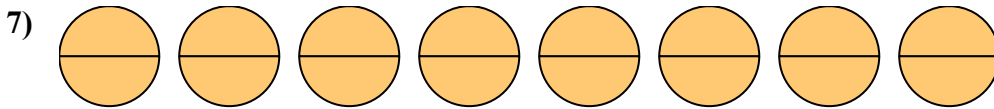
5. \_\_\_\_\_



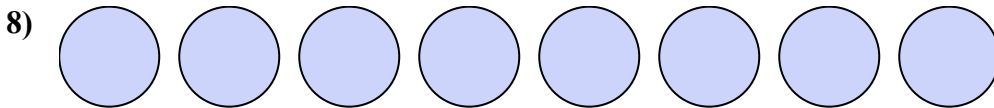
6. \_\_\_\_\_



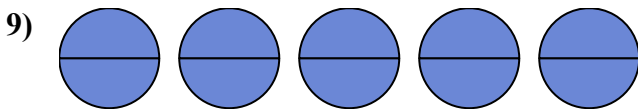
7. \_\_\_\_\_



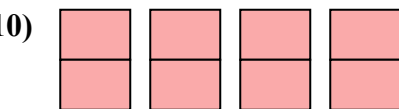
8. \_\_\_\_\_



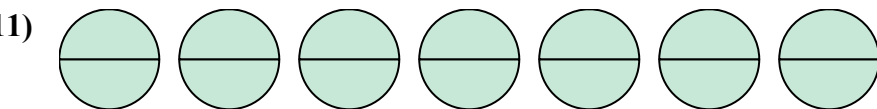
9. \_\_\_\_\_



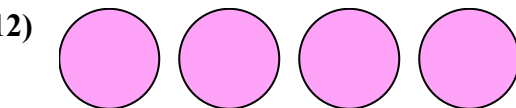
10. \_\_\_\_\_



11. \_\_\_\_\_



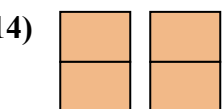
12. \_\_\_\_\_



13. \_\_\_\_\_

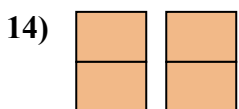
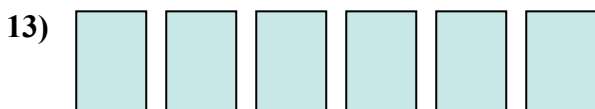
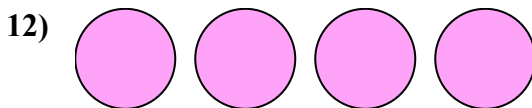
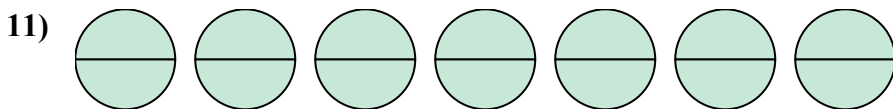
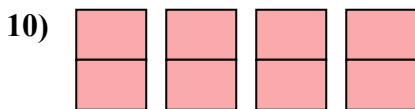
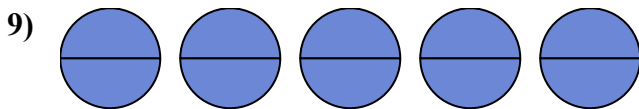
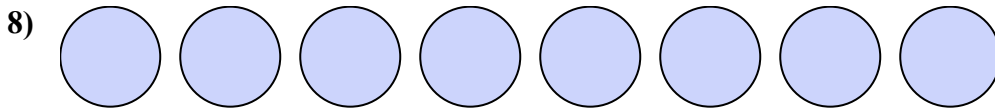
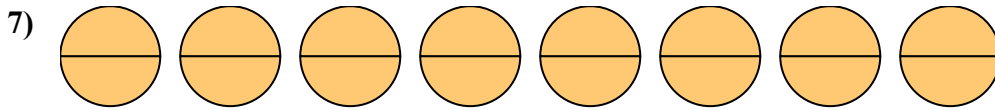

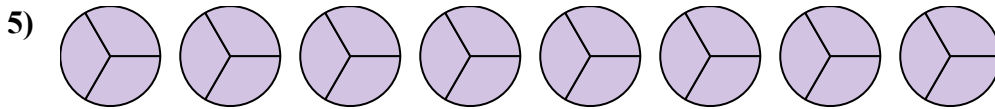
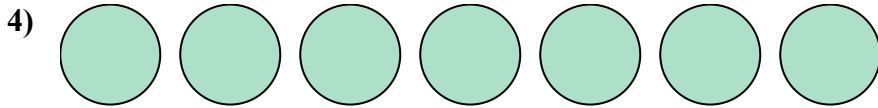
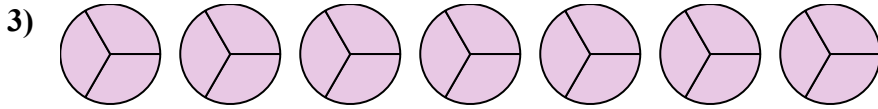

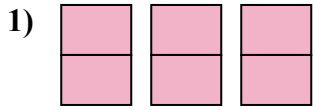


14. \_\_\_\_\_





Запишите заштрихованную сумму дробей.

Ответы

1.  $\frac{6}{2}$

2.  $\frac{3}{1}$

3.  $\frac{21}{3}$

4.  $\frac{7}{1}$

5.  $\frac{24}{3}$

6.  $\frac{12}{3}$

7.  $\frac{16}{2}$

8.  $\frac{8}{1}$

9.  $\frac{10}{2}$

10.  $\frac{8}{2}$

11.  $\frac{14}{2}$

12.  $\frac{4}{1}$

13.  $\frac{6}{1}$

14.  $\frac{4}{2}$