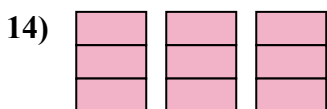
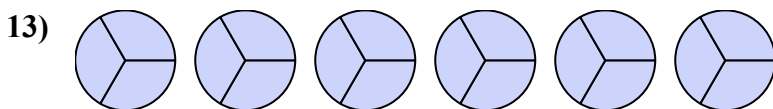
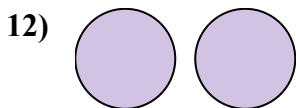
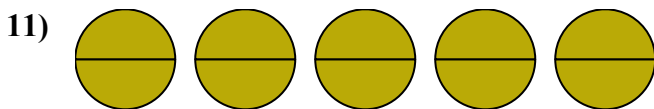
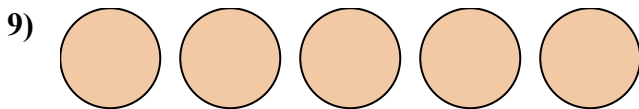
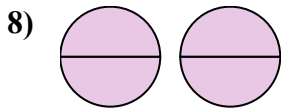
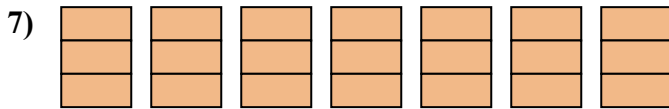
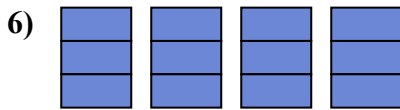
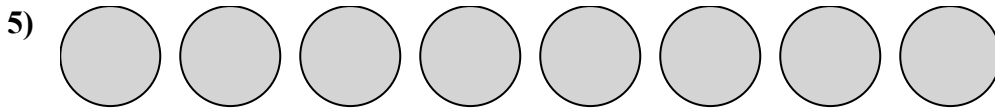
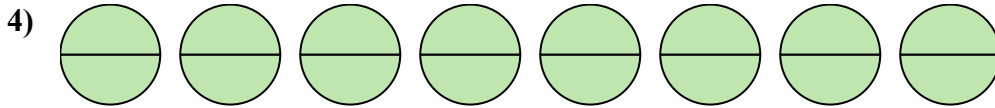

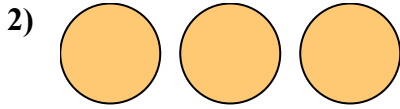
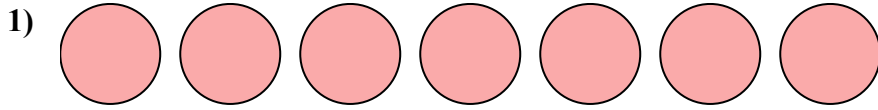




Запишите заштрихованную сумму дробью.



Ответы

1. _____

2. _____

3. _____

4. _____

5. _____

6. _____

7. _____

8. _____

9. _____

10. _____

11. _____

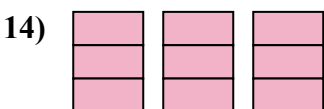
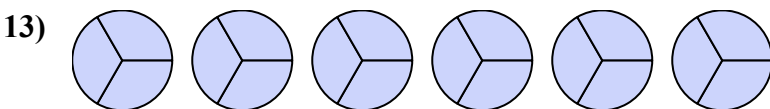
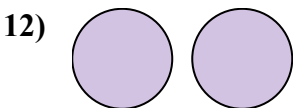
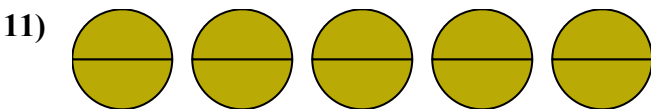
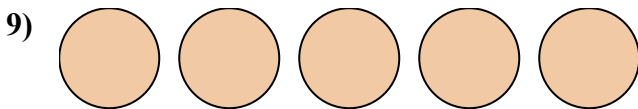
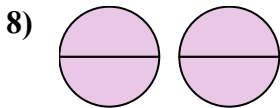
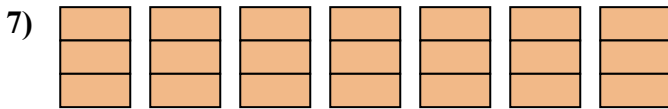
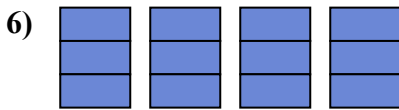
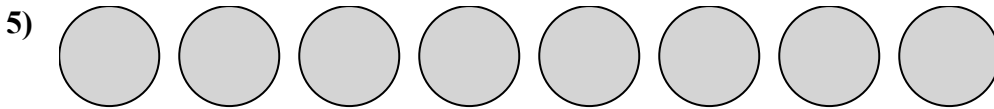
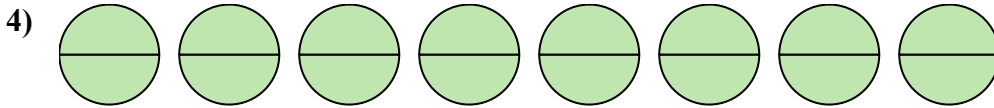

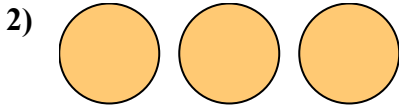
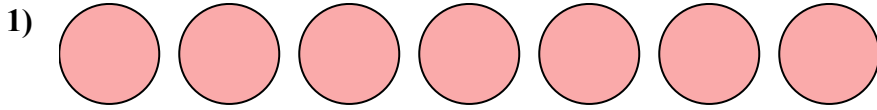
12. _____

13. _____

14. _____



Запишите заштрихованную сумму дробью.

Ответы

1. $\frac{7}{1}$

2. $\frac{3}{1}$

3. $\frac{6}{1}$

4. $\frac{16}{2}$

5. $\frac{8}{1}$

6. $\frac{12}{3}$

7. $\frac{21}{3}$

8. $\frac{4}{2}$

9. $\frac{5}{1}$

10. $\frac{4}{1}$

11. $\frac{10}{2}$

12. $\frac{2}{1}$

13. $\frac{18}{3}$

14. $\frac{9}{3}$