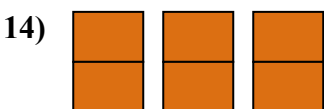
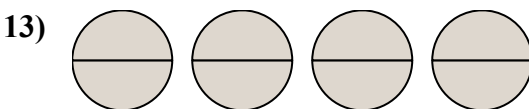
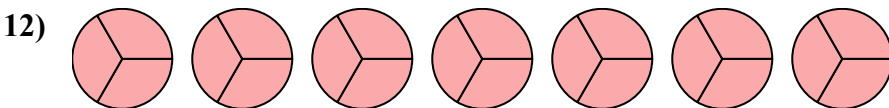
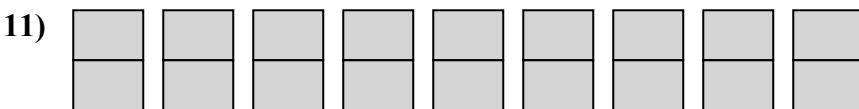
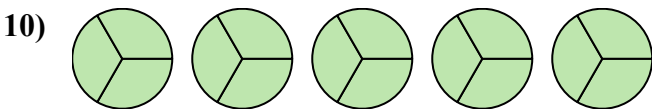
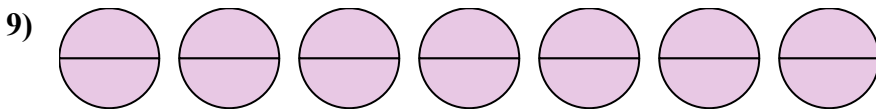
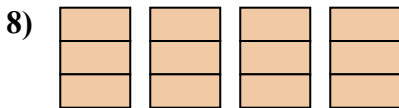
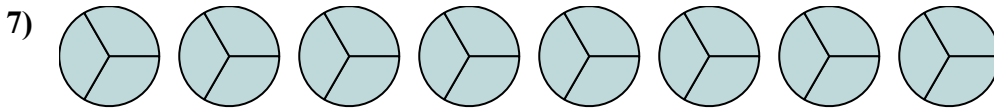
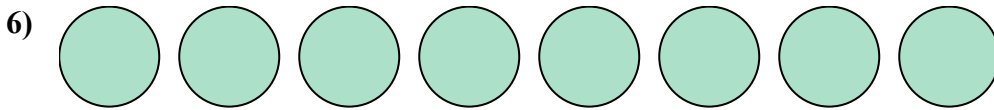
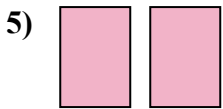

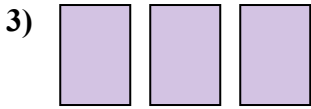
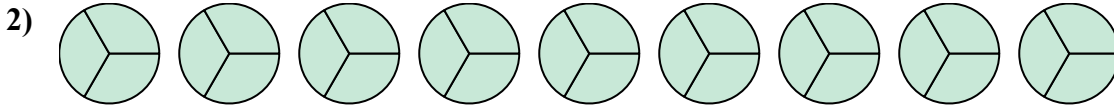
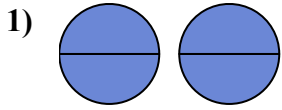




Запишите заштрихованную сумму дробью.

Ответы

1. \_\_\_\_\_

2. \_\_\_\_\_

3. \_\_\_\_\_

4. \_\_\_\_\_

5. \_\_\_\_\_

6. \_\_\_\_\_

7. \_\_\_\_\_

8. \_\_\_\_\_

9. \_\_\_\_\_

10. \_\_\_\_\_

11. \_\_\_\_\_

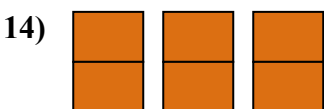
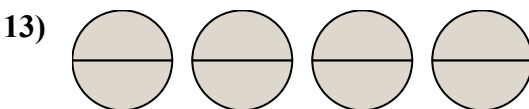
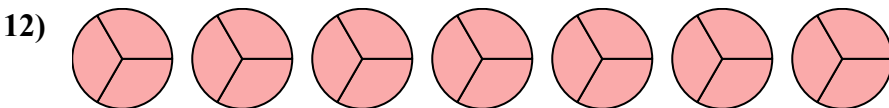
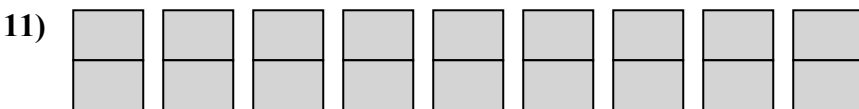
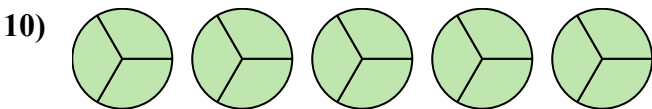
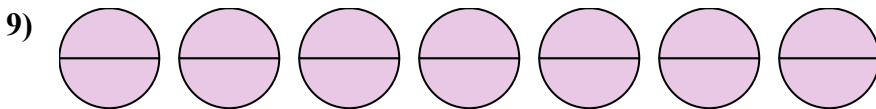
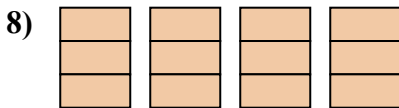
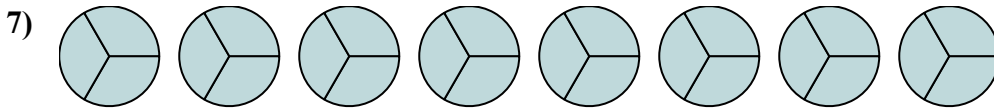
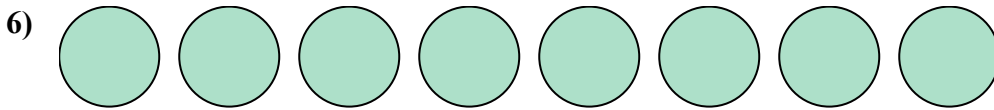
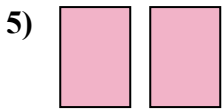

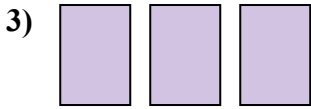
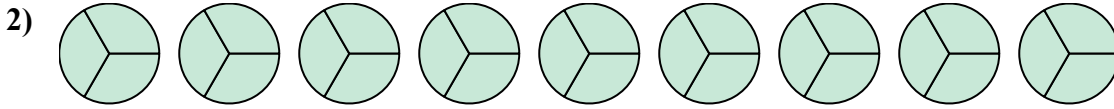
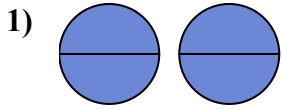
12. \_\_\_\_\_

13. \_\_\_\_\_

14. \_\_\_\_\_



Запишите заштрихованную сумму дробью.

**Ответы**

1.  $\frac{4}{2}$

2.  $\frac{27}{3}$

3.  $\frac{3}{1}$

4.  $\frac{7}{1}$

5.  $\frac{2}{1}$

6.  $\frac{8}{1}$

7.  $\frac{24}{3}$

8.  $\frac{12}{3}$

9.  $\frac{14}{2}$

10.  $\frac{15}{3}$

11.  $\frac{18}{2}$

12.  $\frac{21}{3}$

13.  $\frac{8}{2}$

14.  $\frac{6}{2}$