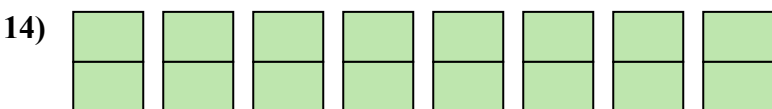
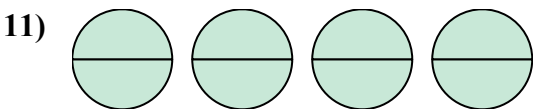
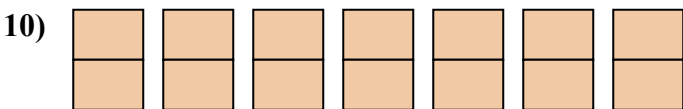
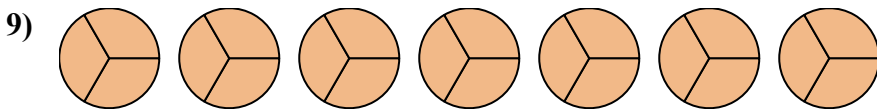
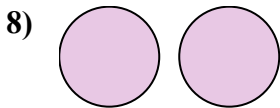
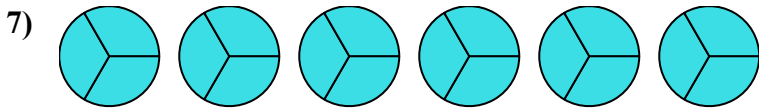
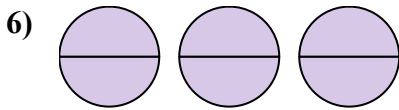
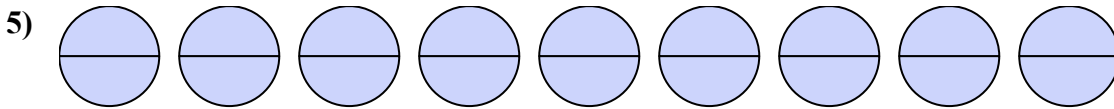
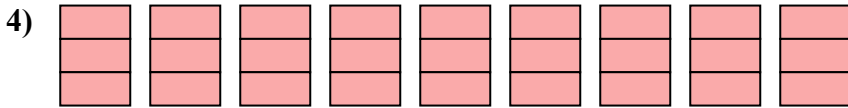
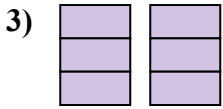
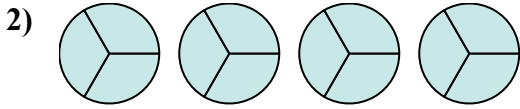
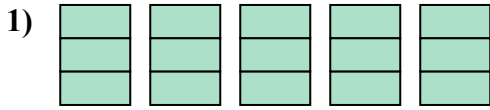




Запишите заштрихованную сумму дробью.

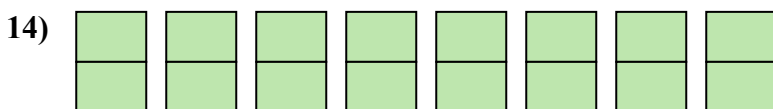
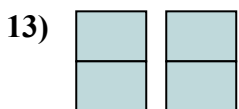
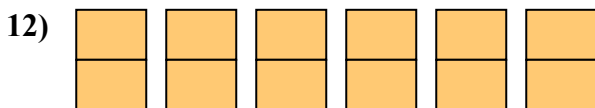
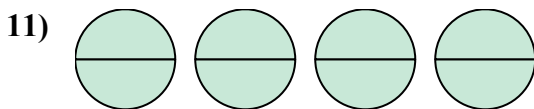
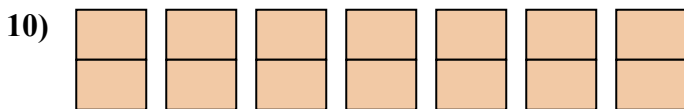
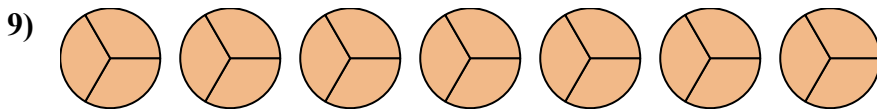
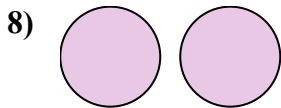
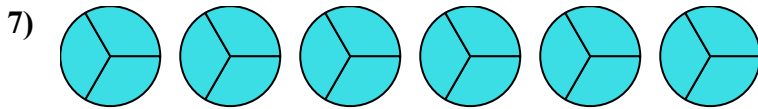
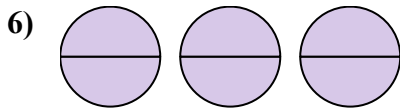
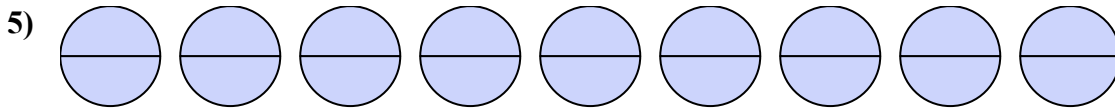
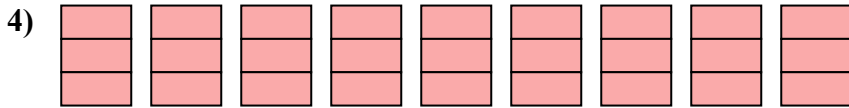
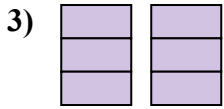
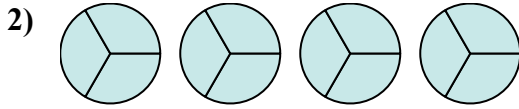
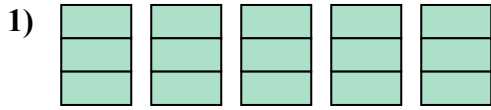
ОТВЕТЫ



1. _____
2. _____
3. _____
4. _____
5. _____
6. _____
7. _____
8. _____
9. _____
10. _____
11. _____
12. _____
13. _____
14. _____



Запишите заштрихованную сумму дробей.

**Ответы**

1. $\frac{15}{3}$

2. $\frac{12}{3}$

3. $\frac{6}{3}$

4. $\frac{27}{3}$

5. $\frac{18}{2}$

6. $\frac{6}{2}$

7. $\frac{18}{3}$

8. $\frac{2}{1}$

9. $\frac{21}{3}$

10. $\frac{14}{2}$

11. $\frac{8}{2}$

12. $\frac{12}{2}$

13. $\frac{4}{2}$

14. $\frac{16}{2}$