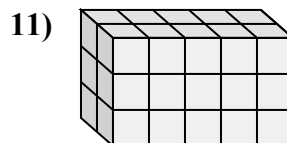
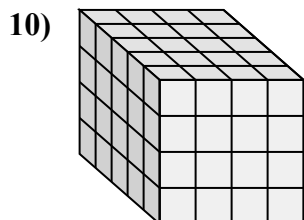
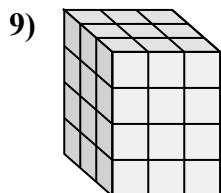
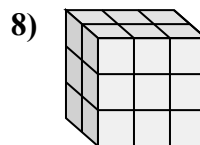
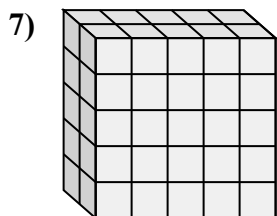
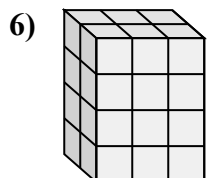
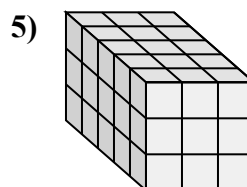
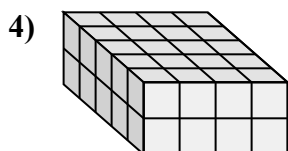
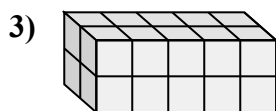
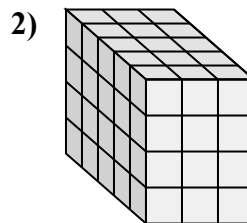
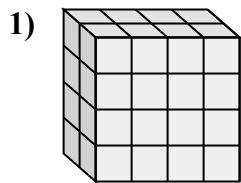
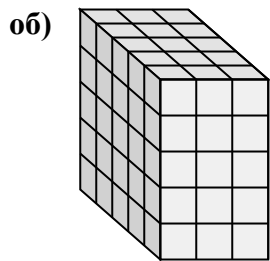




Сопоставьте каждую проблему с уравнением, которое могло бы ее представить.

Ответьте с пропущенным термином и буквой.



ОТВЕТЫ

об. F, 5

1. K, 4

2. B, 4

3. E, 2

4. C, 40

5. A, 5

6. D, 3

7. I, 50

8. L, 18

9. G, 3

10. H, 5

11. J, 3

A. $\underline{\quad} \times 3 \times 3 = 45$

B. $5 \times 3 \times \underline{\quad} = 60$

C. $5 \times 4 \times 2 = \underline{\quad}$

D. $2 \times \underline{\quad} \times 4 = 24$

E. $\underline{\quad} \times 5 \times 2 = 20$

F. $5 \times 3 \times \underline{\quad} = 75$

G. $\underline{\quad} \times 3 \times 4 = 36$

H. $\underline{\quad} \times 4 \times 4 = 80$

I. $2 \times 5 \times 5 = \underline{\quad}$

J. $2 \times 5 \times \underline{\quad} = 30$

K. $2 \times \underline{\quad} \times 4 = 32$

L. $2 \times 3 \times 3 = \underline{\quad}$