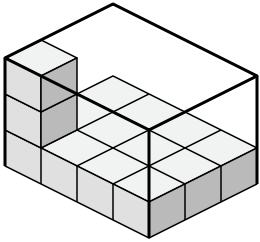




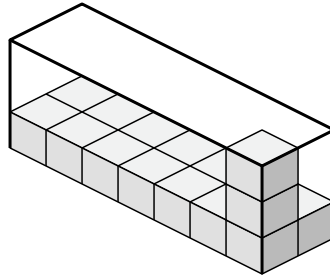
Создайте выражение для определения объема каждой коробки.

Ответы

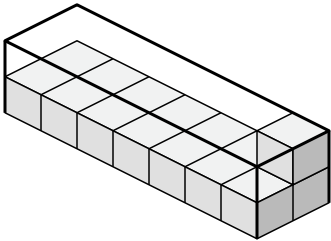
1)



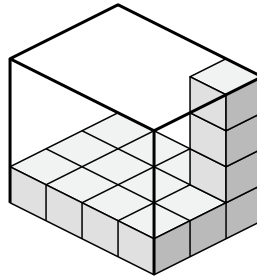
2)



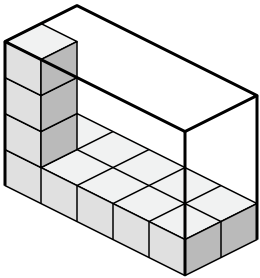
3)



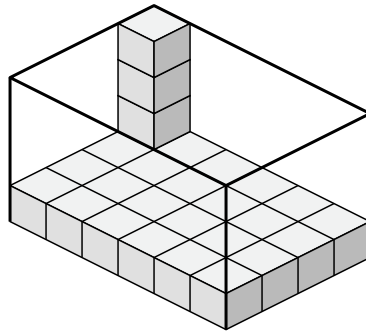
4)



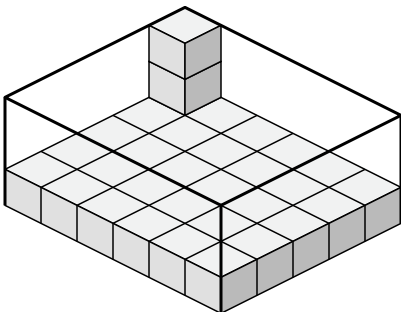
5)



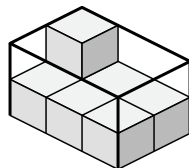
6)



7)



8)

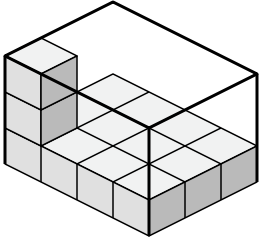


- 1. _____
- 2. _____
- 3. _____
- 4. _____
- 5. _____
- 6. _____
- 7. _____
- 8. _____

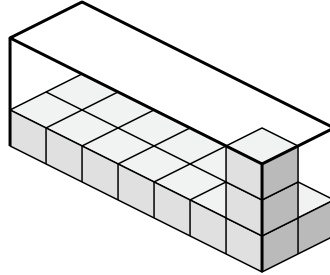


Создайте выражение для определения объема каждой коробки.

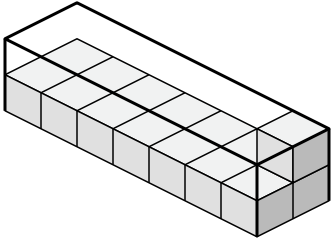
1)



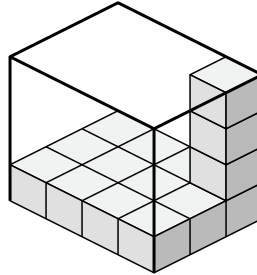
2)



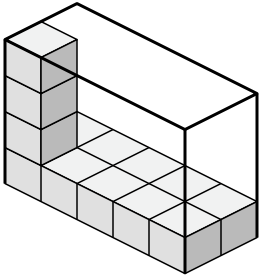
3)



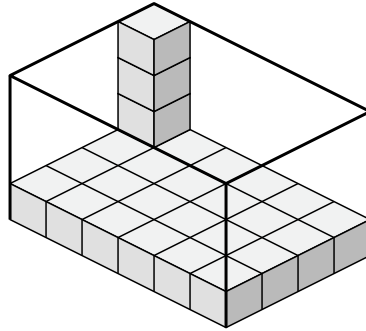
4)



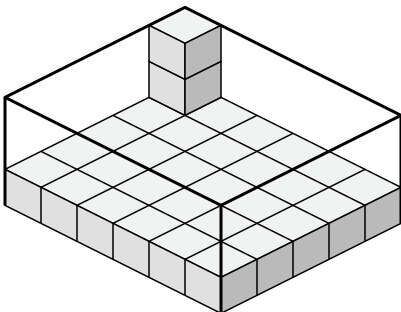
5)



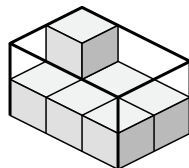
6)



7)



8)

Ответы1. 4×3×32. 7×2×33. 7×2×24. 4×3×45. 5×2×46. 6×4×47. 6×5×38. 3×2×2