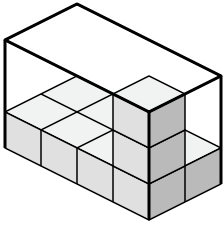




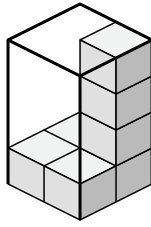
Создайте выражение для определения объема каждой коробки.

Ответы

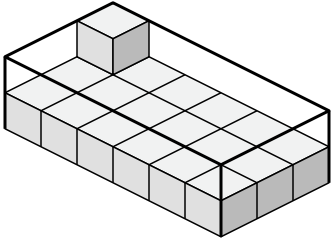
1)



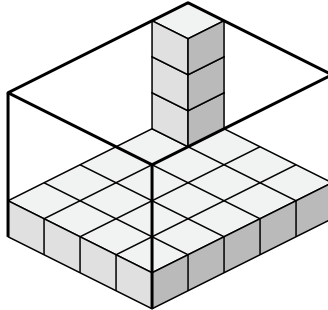
2)



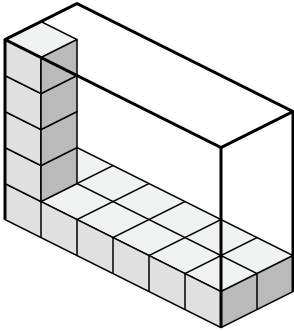
3)



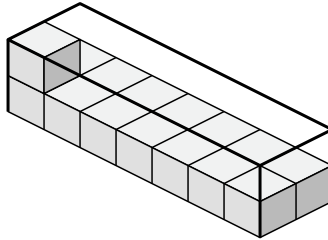
4)



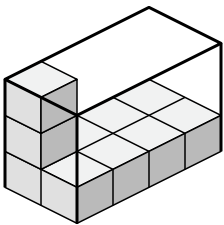
5)



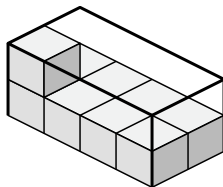
6)



7)



8)

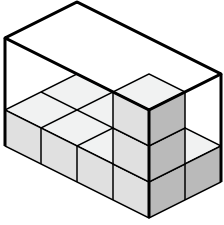


- 1. \_\_\_\_\_
- 2. \_\_\_\_\_
- 3. \_\_\_\_\_
- 4. \_\_\_\_\_
- 5. \_\_\_\_\_
- 6. \_\_\_\_\_
- 7. \_\_\_\_\_
- 8. \_\_\_\_\_

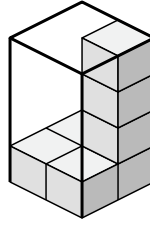


Создайте выражение для определения объема каждой коробки.

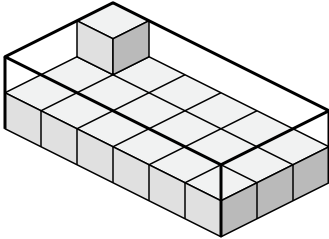
1)



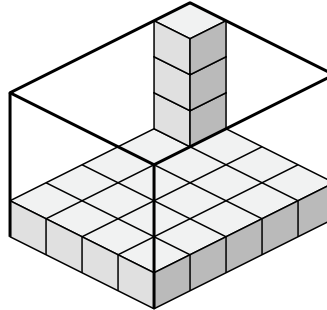
2)



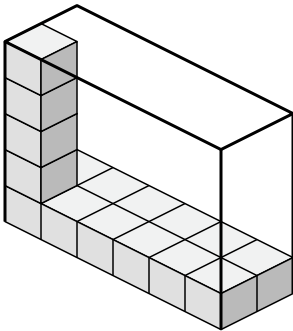
3)



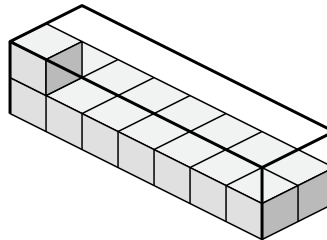
4)



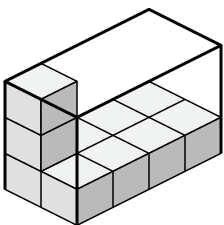
5)



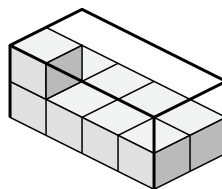
6)



7)



8)

**Ответы**1. 4×2×32. 2×2×43. 6×3×24. 4×5×45. 6×2×56. 7×2×27. 2×4×38. 4×2×2