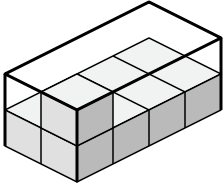


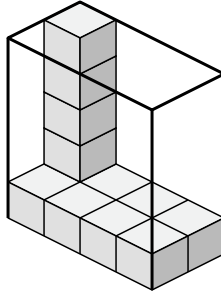


Создайте выражение для определения объема каждой коробки.

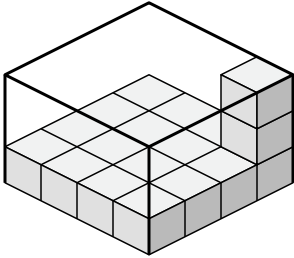
1)



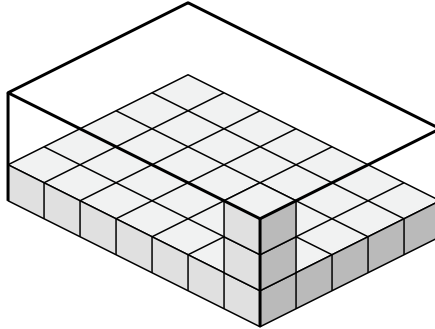
2)



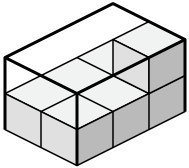
3)



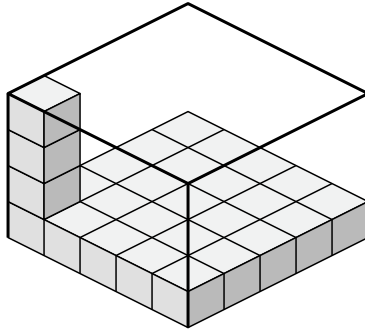
4)



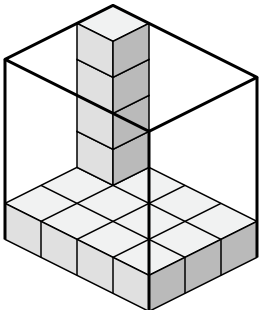
5)



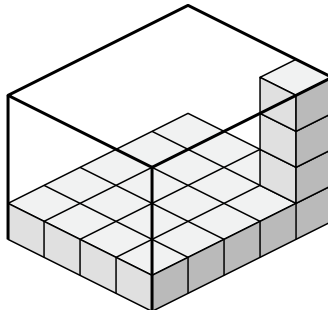
6)



7)



8)



Ответы

1. \_\_\_\_\_

2. \_\_\_\_\_

3. \_\_\_\_\_

4. \_\_\_\_\_

5. \_\_\_\_\_

6. \_\_\_\_\_

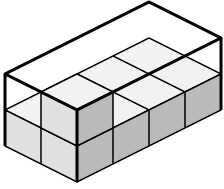
7. \_\_\_\_\_

8. \_\_\_\_\_

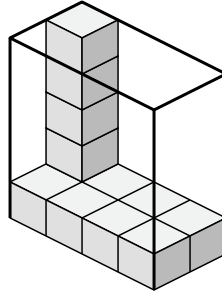


Создайте выражение для определения объема каждой коробки.

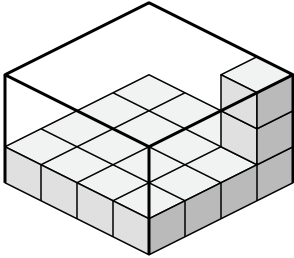
1)



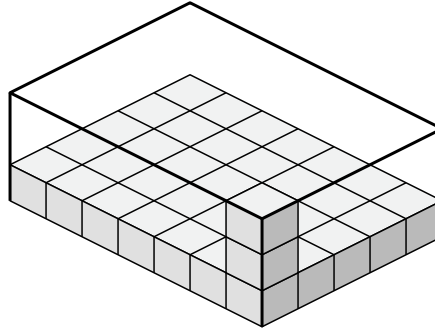
2)



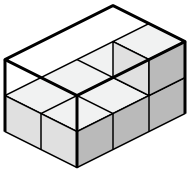
3)



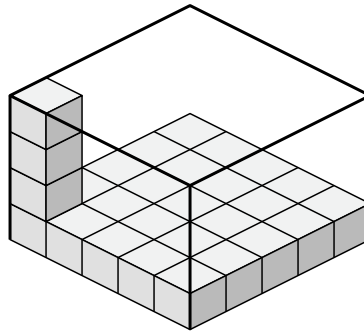
4)



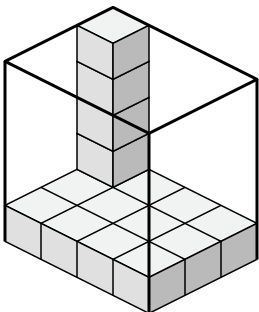
5)



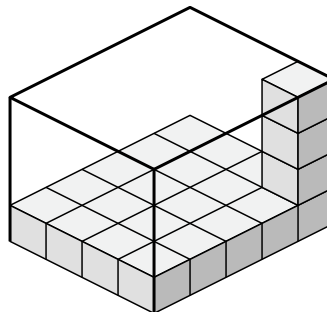
6)



7)



8)

**Отвѣты**

1.  $2 \times 4 \times 2$

2.  $4 \times 2 \times 5$

3.  $4 \times 4 \times 3$

4.  $7 \times 5 \times 3$

5.  $2 \times 3 \times 2$

6.  $5 \times 5 \times 4$

7.  $4 \times 3 \times 5$

8.  $4 \times 5 \times 4$