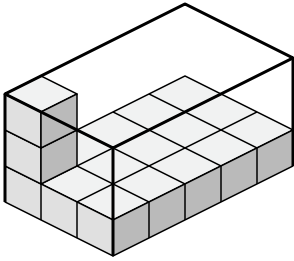




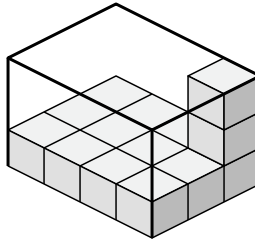
Создайте выражение для определения объема каждой коробки.

Ответы

1)



2)



1. _____

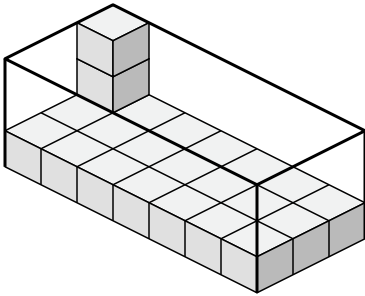
2. _____

3. _____

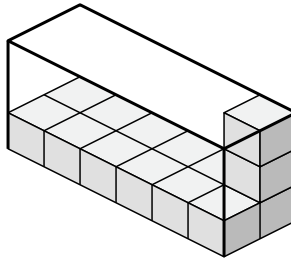
4. _____

5. _____

3)



4)

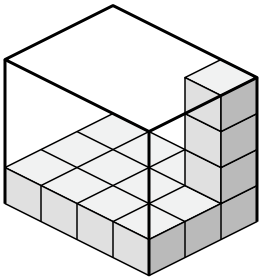


6. _____

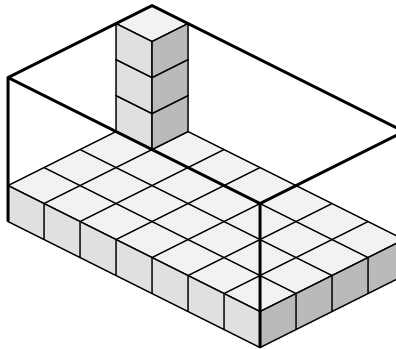
7. _____

8. _____

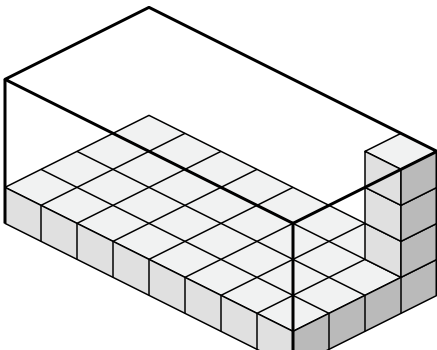
5)



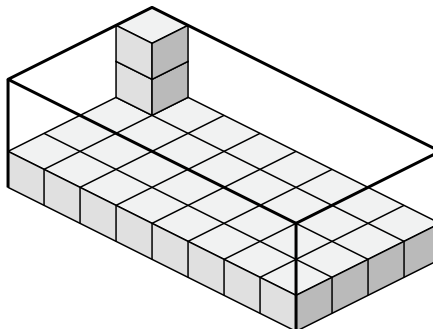
6)



7)



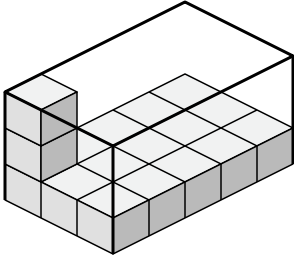
8)



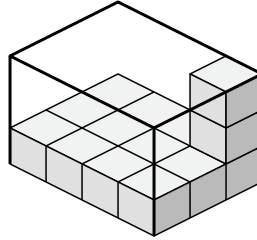


Создайте выражение для определения объема каждой коробки.

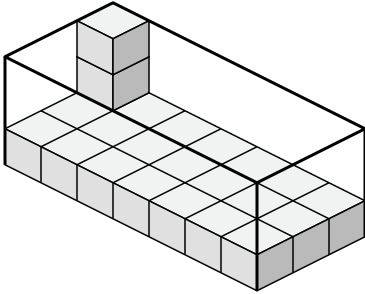
1)



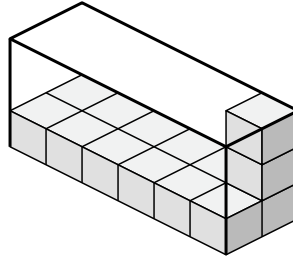
2)



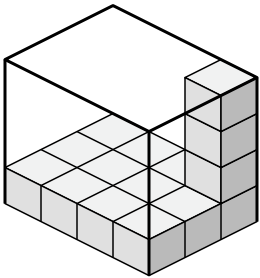
3)



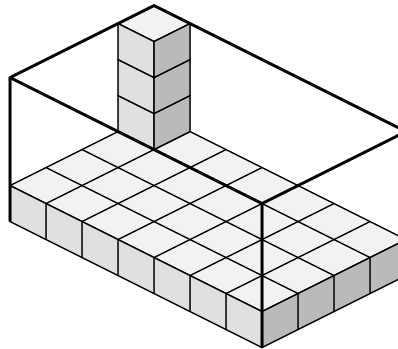
4)



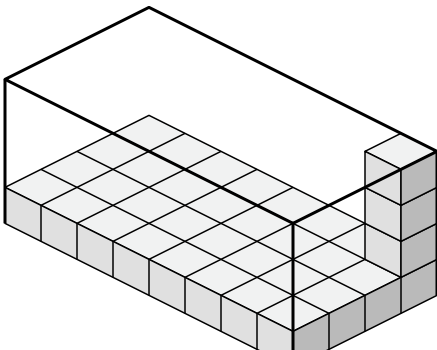
5)



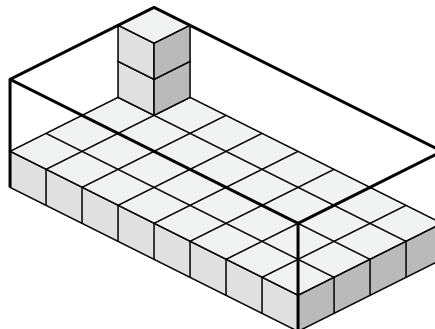
6)



7)



8)

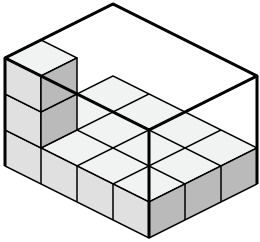
**Ответы**1. 3×5×32. 4×3×33. 7×3×34. 6×2×35. 4×3×46. 7×4×47. 8×4×48. 8×4×3



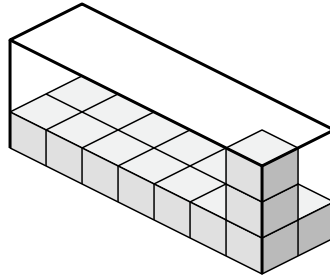
Создайте выражение для определения объема каждой коробки.

Ответы

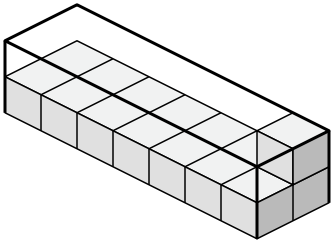
1)



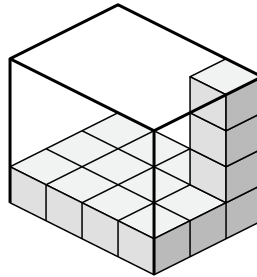
2)



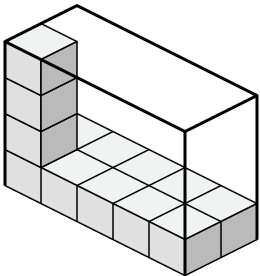
3)



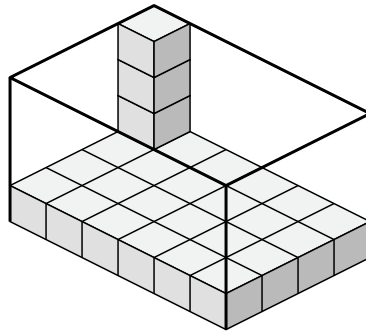
4)



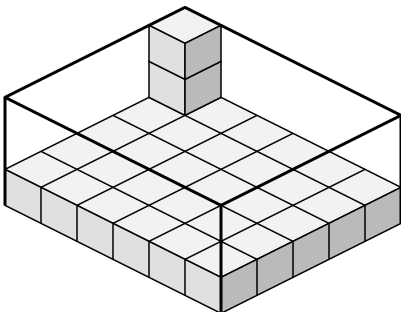
5)



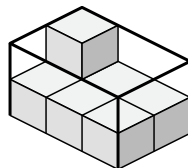
6)



7)



8)

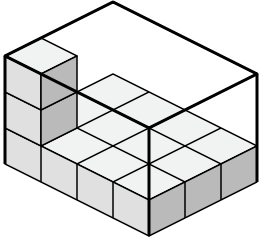


- 1. _____
- 2. _____
- 3. _____
- 4. _____
- 5. _____
- 6. _____
- 7. _____
- 8. _____

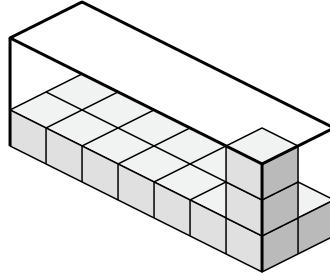


Создайте выражение для определения объема каждой коробки.

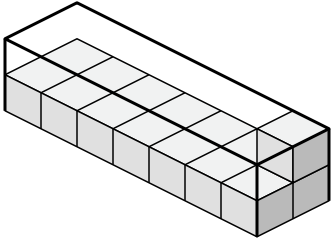
1)



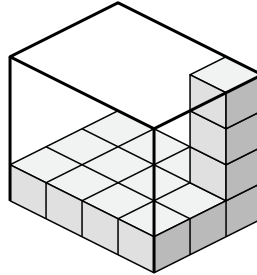
2)



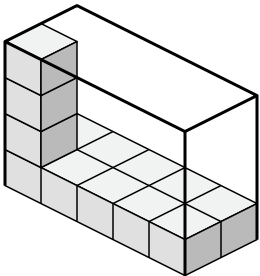
3)



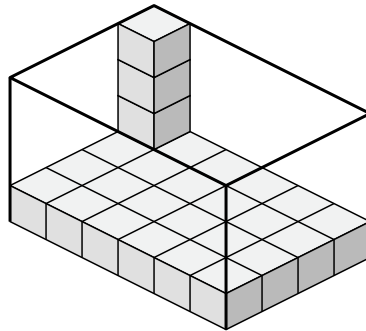
4)



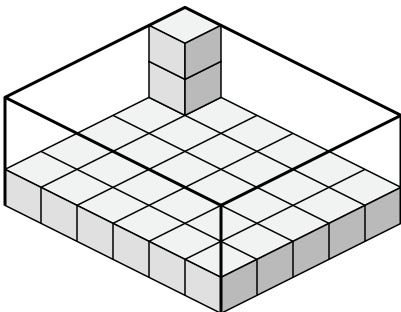
5)



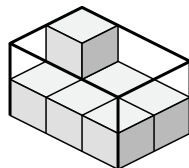
6)



7)



8)

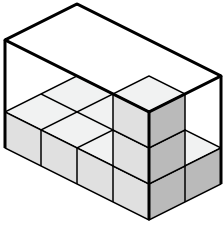
Ответы1. 4×3×32. 7×2×33. 7×2×24. 4×3×45. 5×2×46. 6×4×47. 6×5×38. 3×2×2



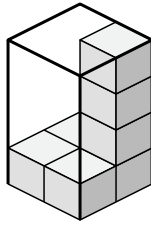
Создайте выражение для определения объема каждой коробки.

Ответы

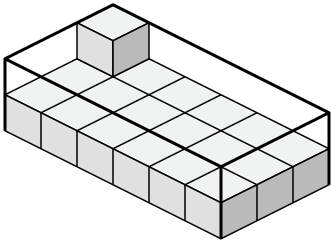
1)



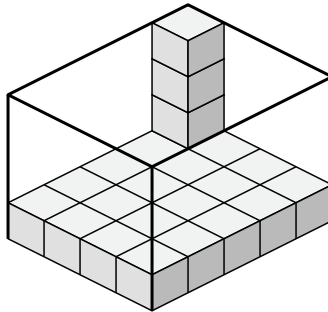
2)



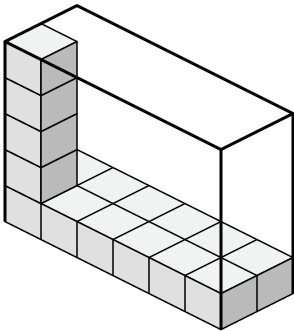
3)



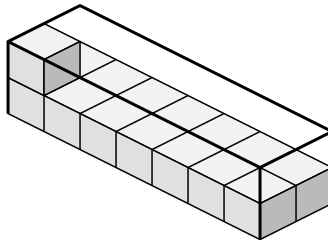
4)



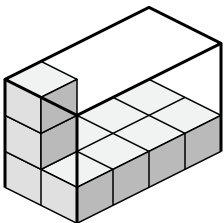
5)



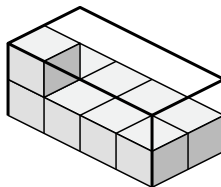
6)



7)



8)

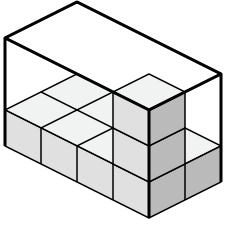


- 1. _____
- 2. _____
- 3. _____
- 4. _____
- 5. _____
- 6. _____
- 7. _____
- 8. _____

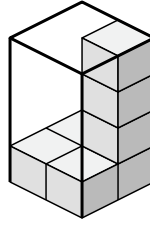


Создайте выражение для определения объема каждой коробки.

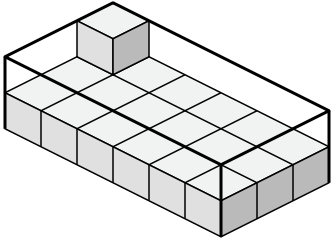
1)



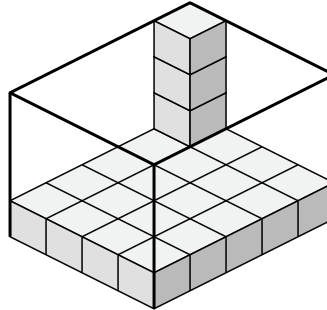
2)



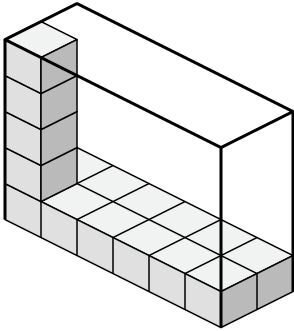
3)



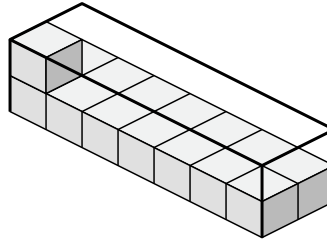
4)



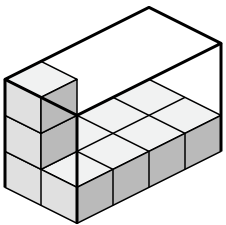
5)



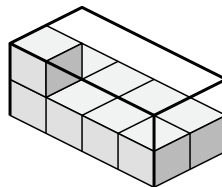
6)



7)



8)

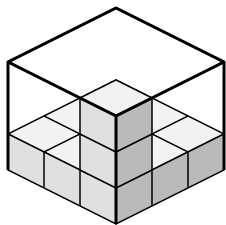
**Ответы**1. 4×2×32. 2×2×43. 6×3×24. 4×5×45. 6×2×56. 7×2×27. 2×4×38. 4×2×2



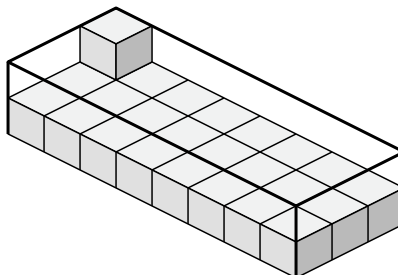
Создайте выражение для определения объема каждой коробки.

Ответы

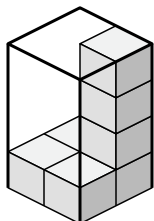
1)



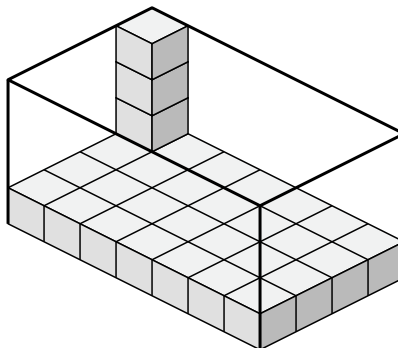
2)



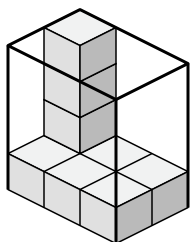
3)



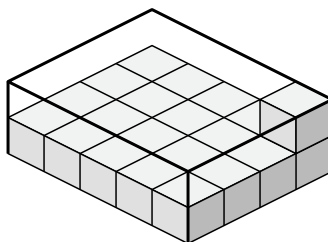
4)



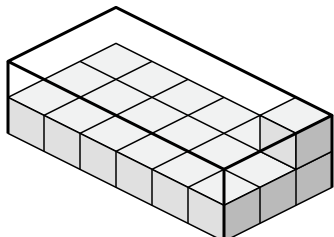
5)



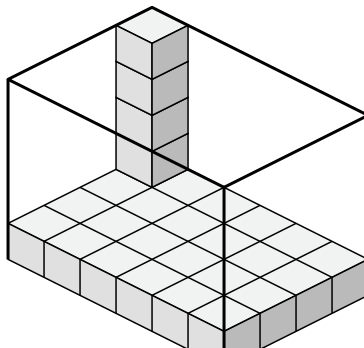
6)



7)



8)

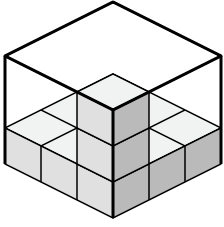


- 1. _____
- 2. _____
- 3. _____
- 4. _____
- 5. _____
- 6. _____
- 7. _____
- 8. _____

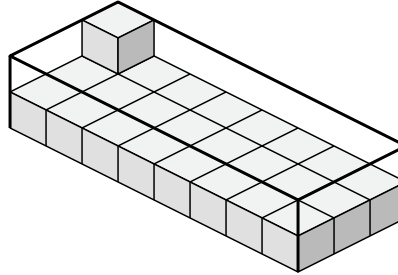


Создайте выражение для определения объема каждой коробки.

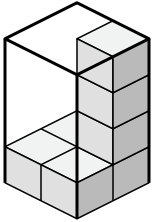
1)



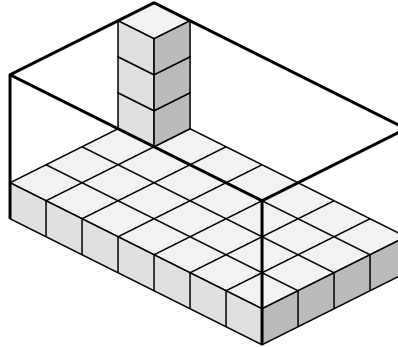
2)



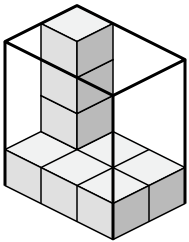
3)



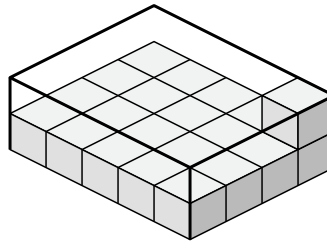
4)



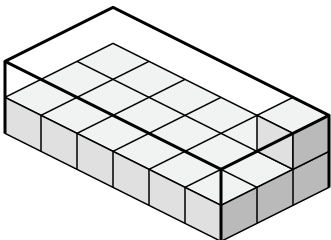
5)



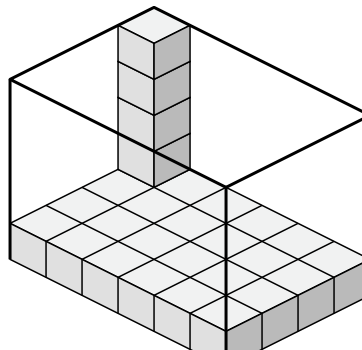
6)



7)



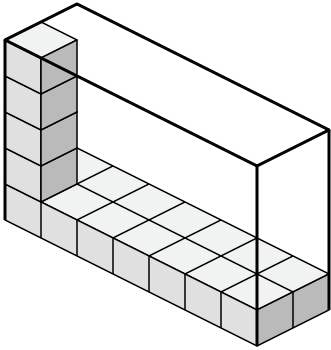
8)

**Ответы**1. 3×3×32. 8×3×23. 2×2×44. 7×4×45. 3×2×46. 5×4×27. 6×3×28. 6×4×5

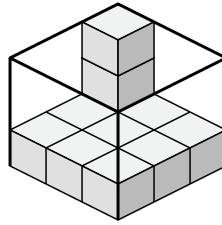


Создайте выражение для определения объема каждой коробки.

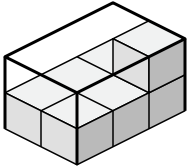
1)



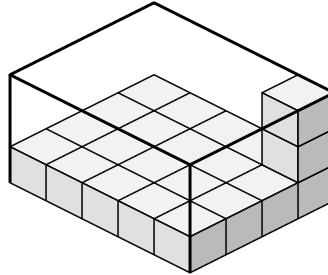
2)



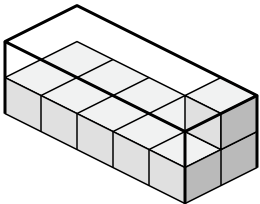
3)



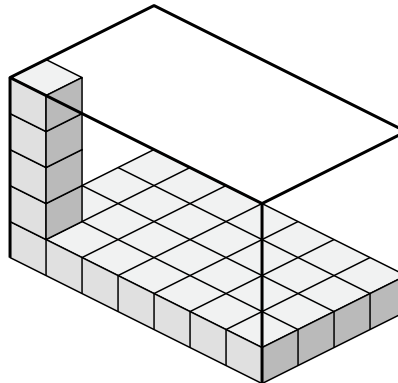
4)



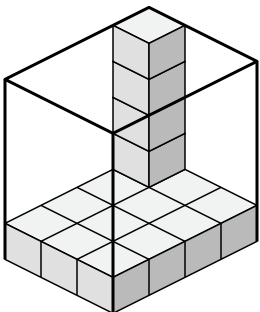
5)



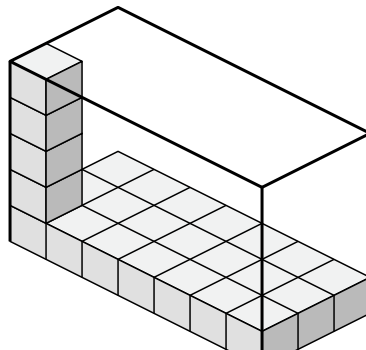
6)



7)



8)



Ответы

1. _____

2. _____

3. _____

4. _____

5. _____

6. _____

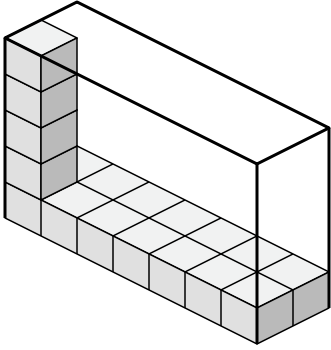
7. _____

8. _____

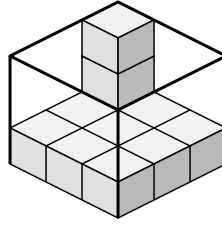


Создайте выражение для определения объема каждой коробки.

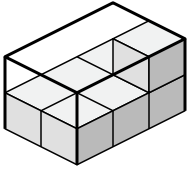
1)



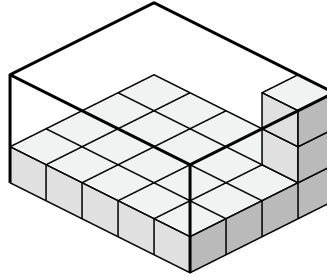
2)



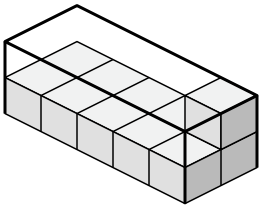
3)



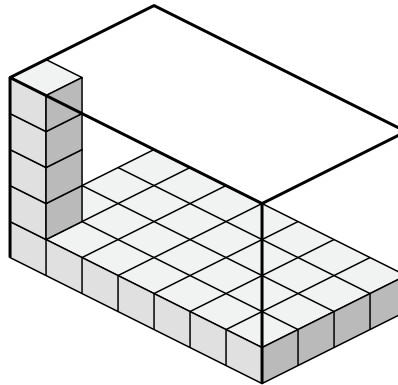
4)



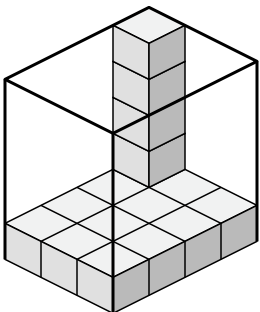
5)



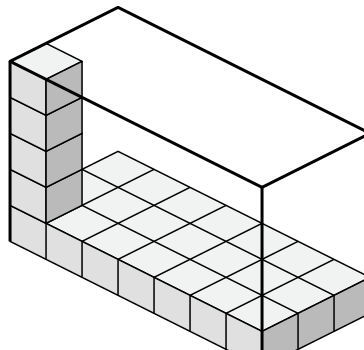
6)



7)



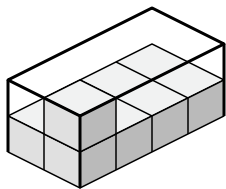
8)

**Ответы**1. 7×2×52. 3×3×33. 2×3×24. 5×4×35. 5×2×26. 7×4×57. 3×4×58. 7×3×5

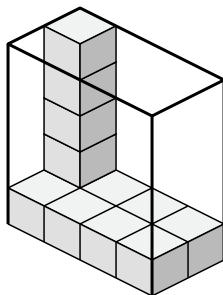


Создайте выражение для определения объема каждой коробки.

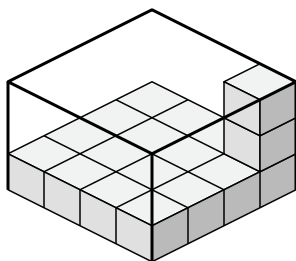
1)



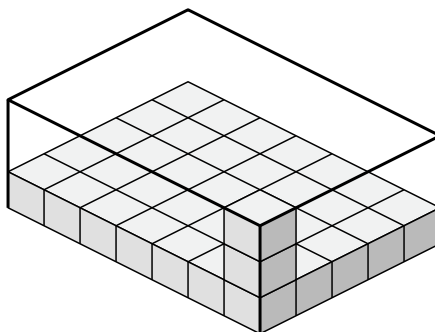
2)



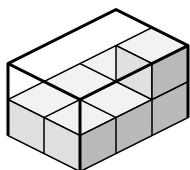
3)



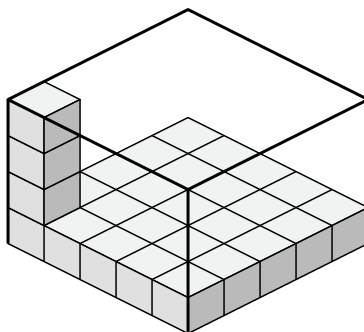
4)



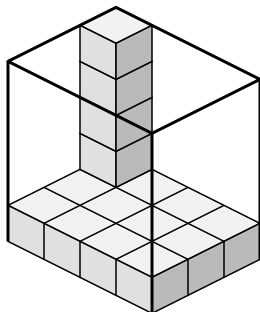
5)



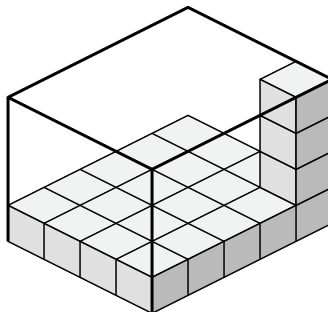
6)



7)



8)



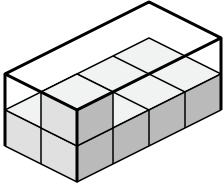
Ответы

- 1. _____
- 2. _____
- 3. _____
- 4. _____
- 5. _____
- 6. _____
- 7. _____
- 8. _____

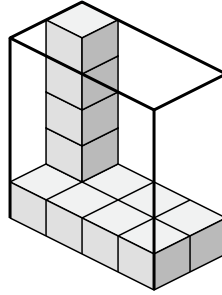


Создайте выражение для определения объема каждой коробки.

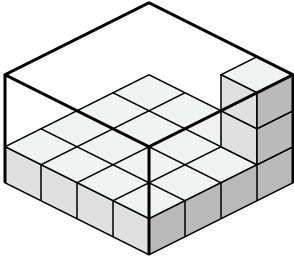
1)



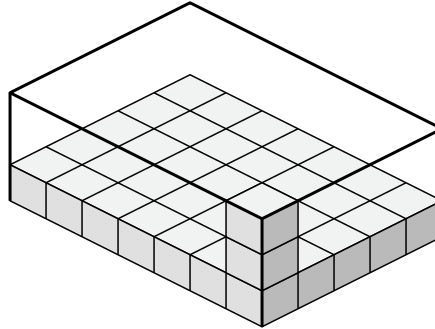
2)



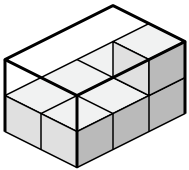
3)



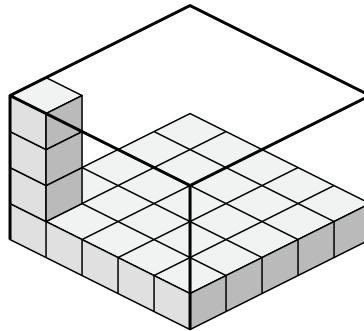
4)



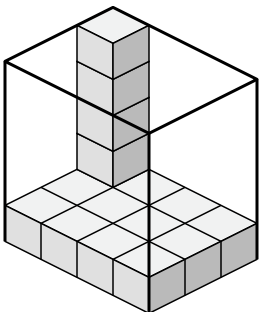
5)



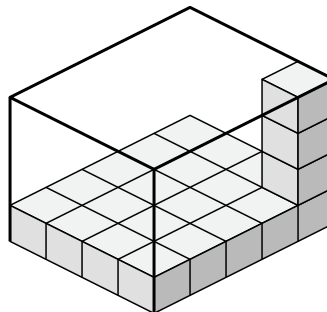
6)



7)



8)

Ответы

1. $2 \times 4 \times 2$

2. $4 \times 2 \times 5$

3. $4 \times 4 \times 3$

4. $7 \times 5 \times 3$

5. $2 \times 3 \times 2$

6. $5 \times 5 \times 4$

7. $4 \times 3 \times 5$

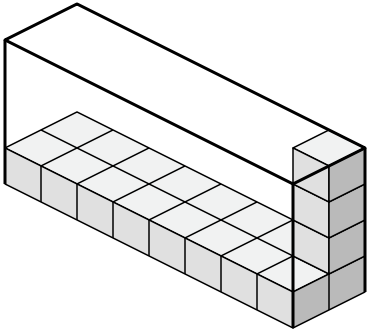
8. $4 \times 5 \times 4$



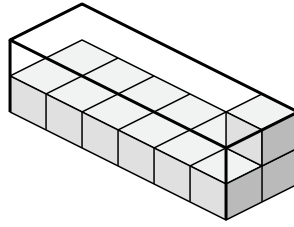
Создайте выражение для определения объема каждой коробки.

Отвeты

1)



2)



1. _____

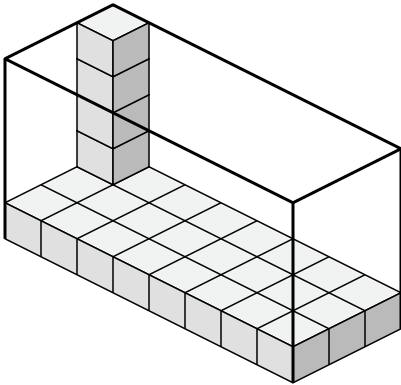
2. _____

3. _____

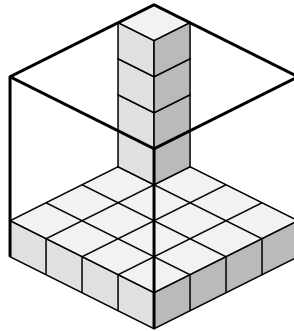
4. _____

5. _____

3)



4)

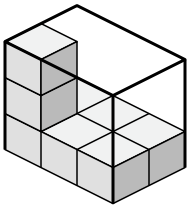


6. _____

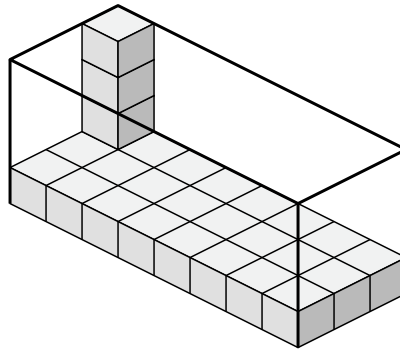
7. _____

8. _____

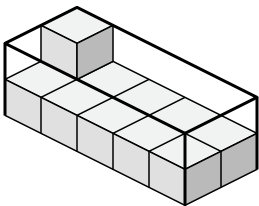
5)



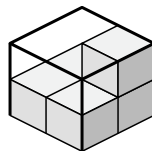
6)



7)



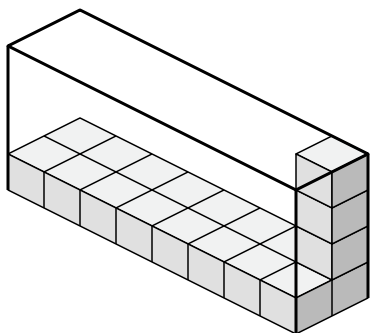
8)



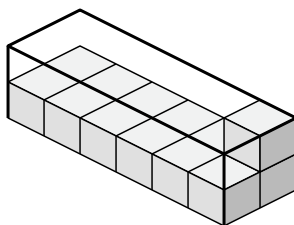


Создайте выражение для определения объема каждой коробки.

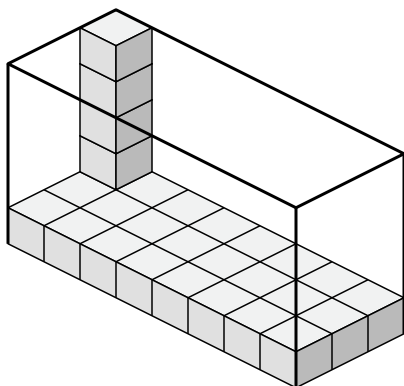
1)



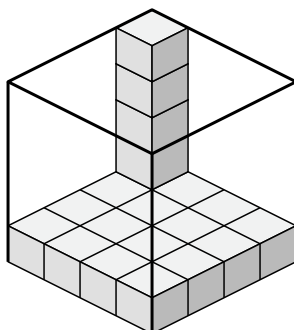
2)



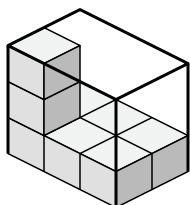
3)



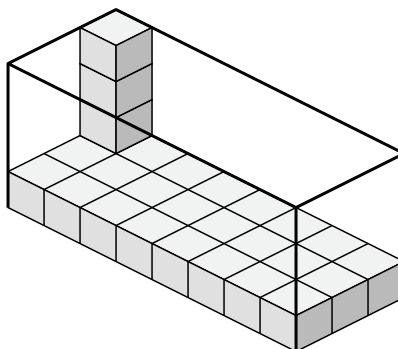
4)



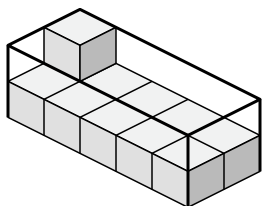
5)



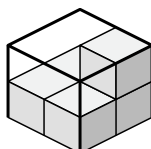
6)



7)



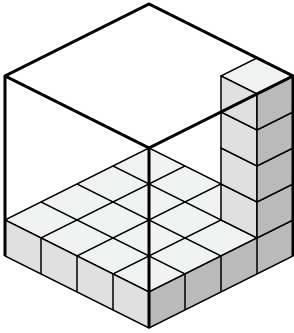
8)

Ответы1. 8×2×42. 6×2×23. 8×3×54. 4×4×55. 3×2×36. 8×3×47. 5×2×28. 2×2×2

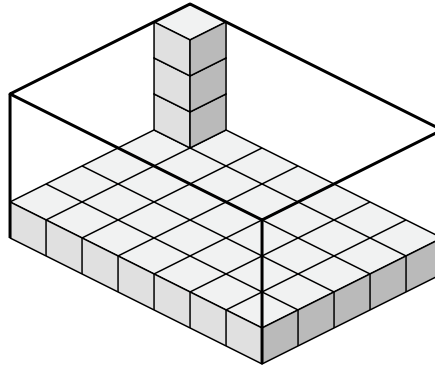


Создайте выражение для определения объема каждой коробки.

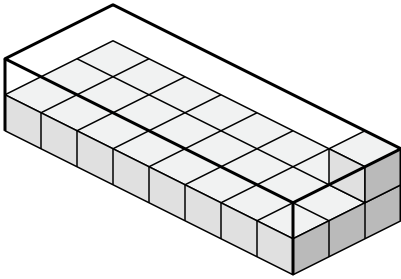
1)



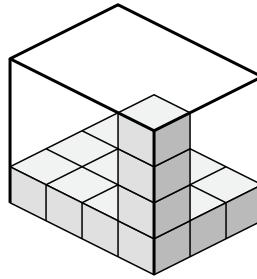
2)



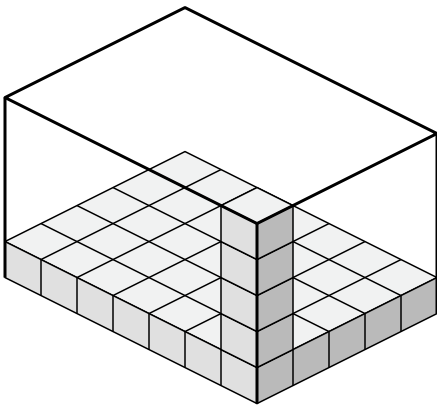
3)



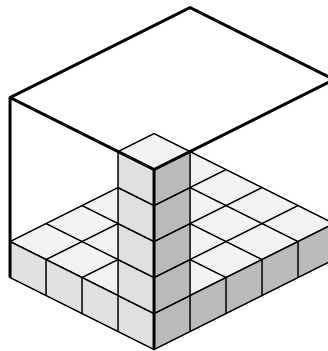
4)



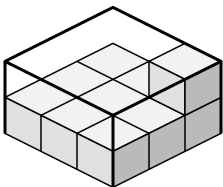
5)



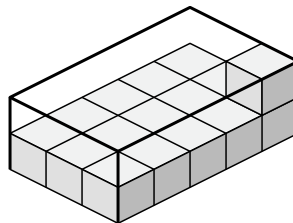
6)



7)



8)



Отвeты

1. _____

2. _____

3. _____

4. _____

5. _____

6. _____

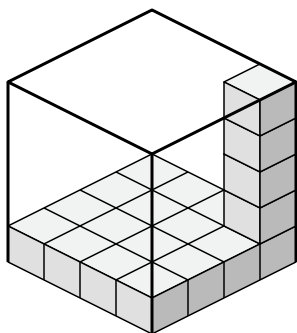
7. _____

8. _____

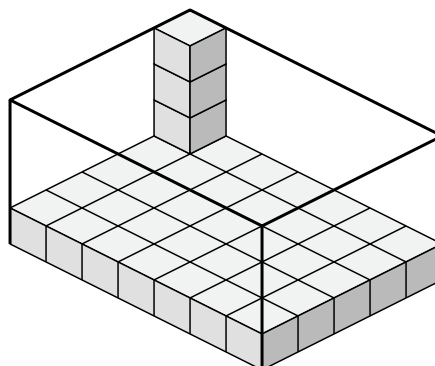


Создайте выражение для определения объема каждой коробки.

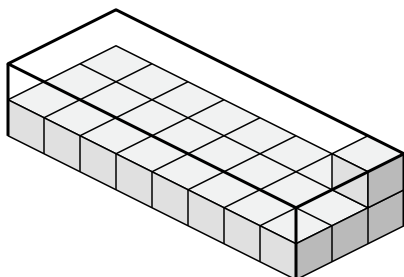
1)



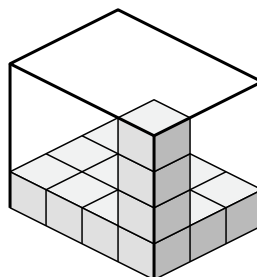
2)



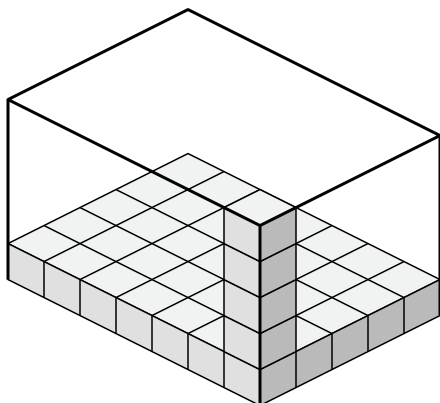
3)



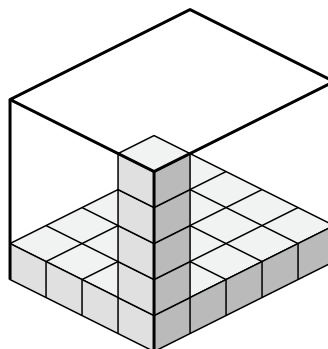
4)



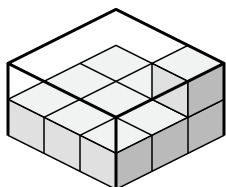
5)



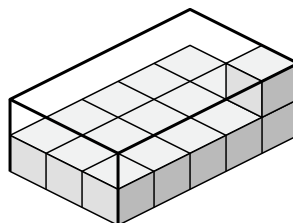
6)



7)



8)

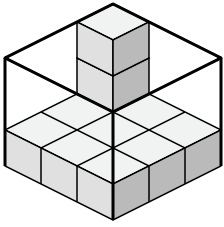
**Ответы**1. 4×4×52. 7×5×43. 8×3×24. 4×3×45. 7×5×56. 4×5×57. 3×3×28. 3×5×2



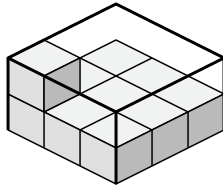
Создайте выражение для определения объема каждой коробки.

Ответы

1)



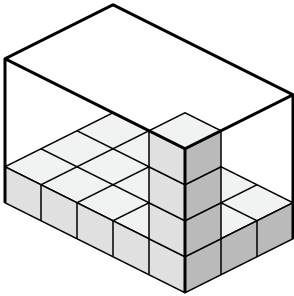
2)



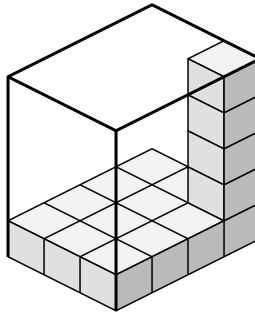
1. _____

2. _____

3)



4)

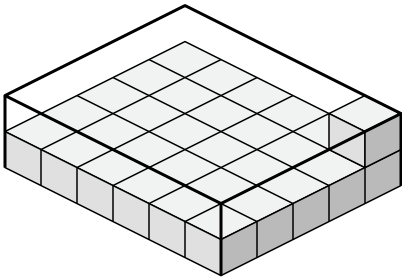


3. _____

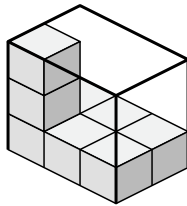
4. _____

5. _____

5)



6)

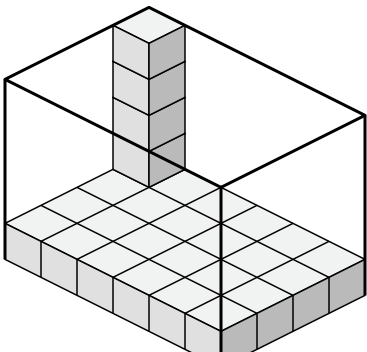


6. _____

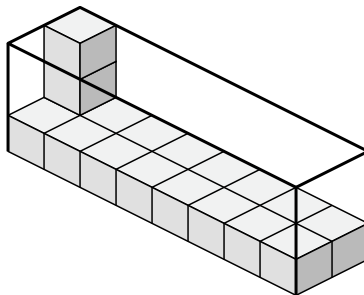
7. _____

8. _____

7)



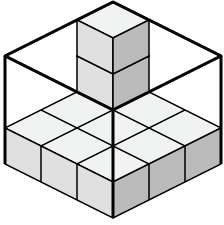
8)



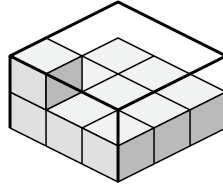


Создайте выражение для определения объема каждой коробки.

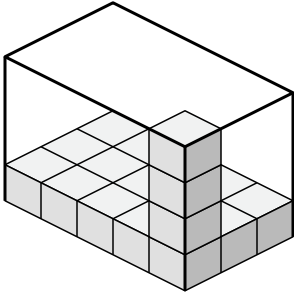
1)



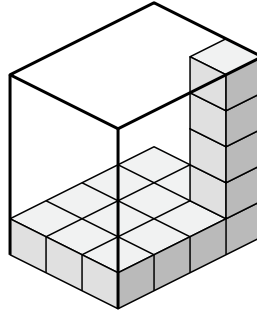
2)



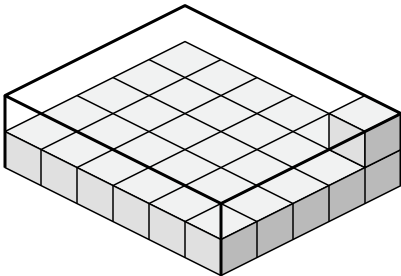
3)



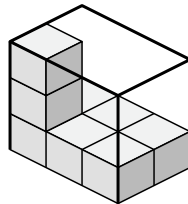
4)



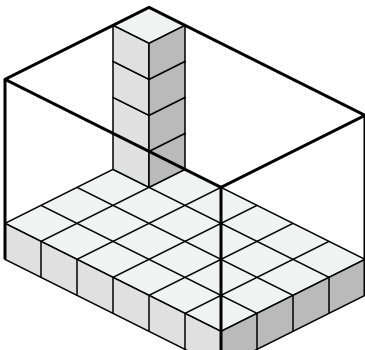
5)



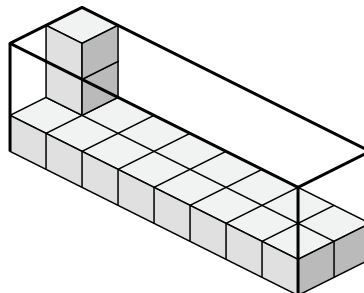
6)



7)



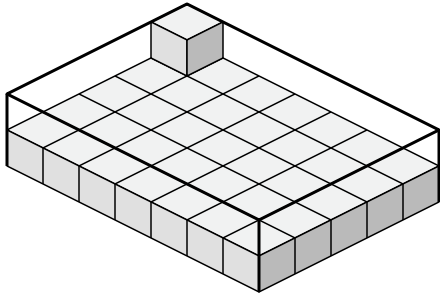
8)

**Ответы**1. 3×3×32. 3×3×23. 5×3×44. 3×4×55. 6×5×26. 3×2×37. 6×4×58. 8×2×3

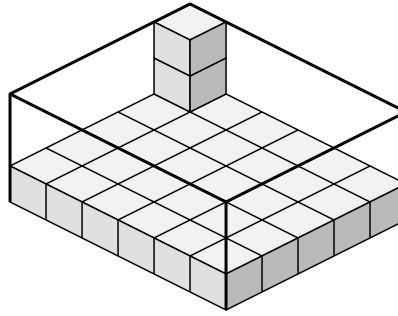


Создайте выражение для определения объема каждой коробки.

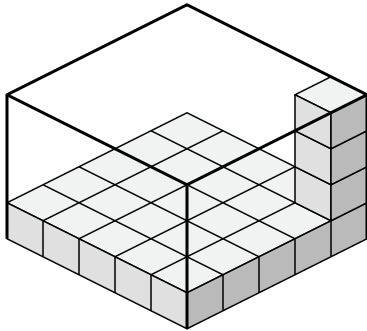
1)



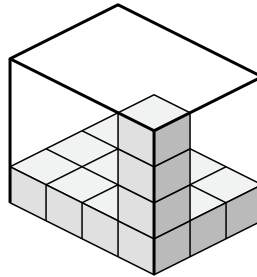
2)



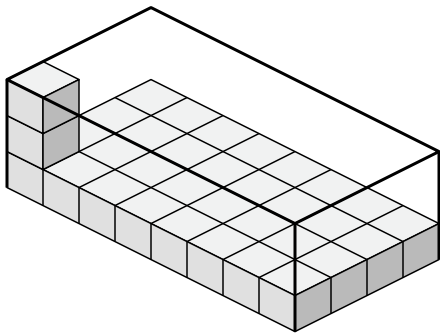
3)



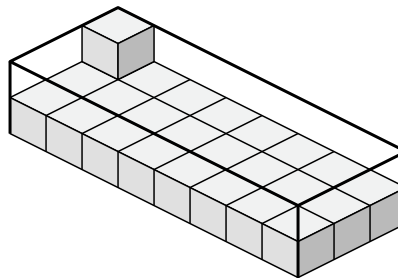
4)



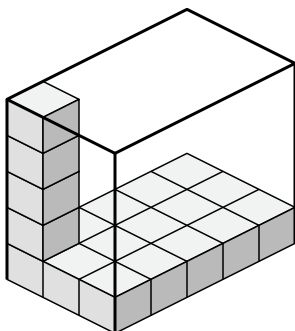
5)



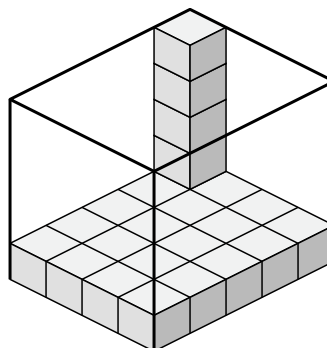
6)



7)



8)



Ответы

1. _____

2. _____

3. _____

4. _____

5. _____

6. _____

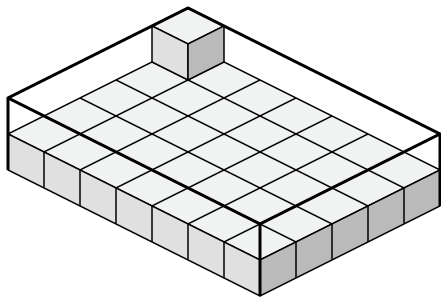
7. _____

8. _____

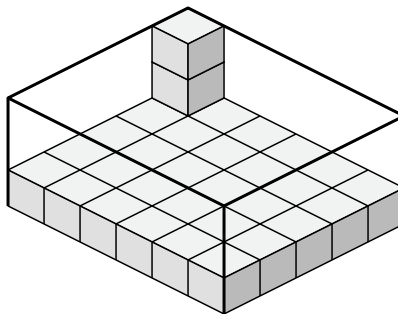


Создайте выражение для определения объема каждой коробки.

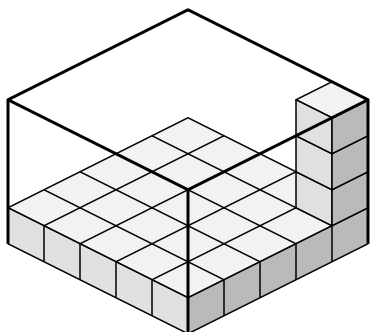
1)



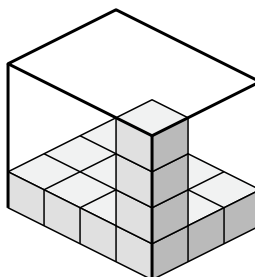
2)



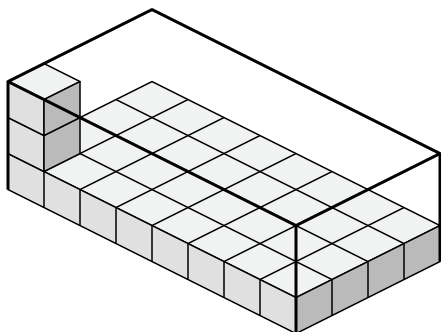
3)



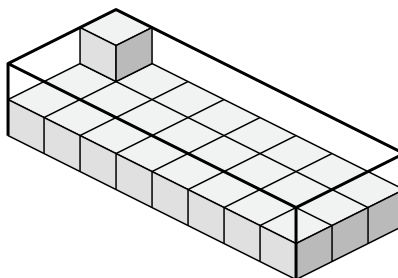
4)



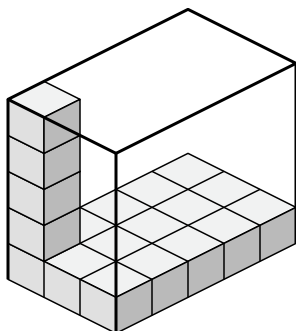
5)



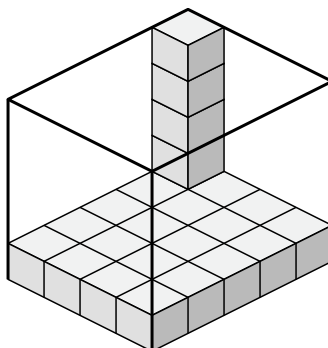
6)



7)



8)

**Ответы**1. 7×5×22. 6×5×33. 5×5×44. 4×3×45. 8×4×36. 8×3×27. 3×5×58. 4×5×5