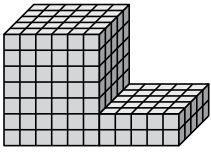




Найдите общий объем каждой фигуры. Размеры указаны в сантиметрах (без учета масштаба).

ОТВЕТЫ

1)



1. _____

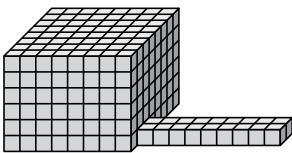
2. _____

3. _____

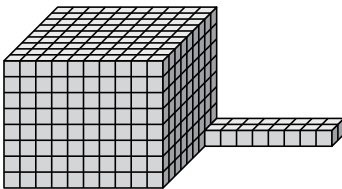
4. _____

5. _____

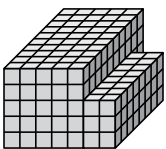
2)



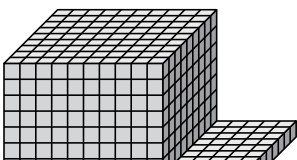
3)



4)

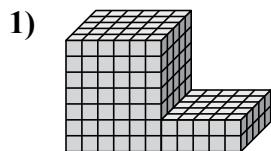


5)





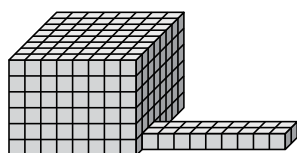
Найдите общий объем каждой фигуры. Размеры указаны в сантиметрах (без учета масштаба).

ОТВЕТЫ

$$6 \times 5 \times 7 = 210$$

$$5 \times 5 \times 2 = 50$$

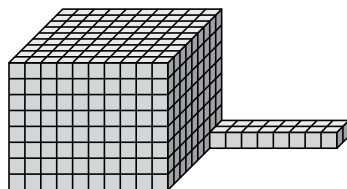
1. 260 cm³



$$8 \times 8 \times 6 = 384$$

$$9 \times 2 \times 1 = 18$$

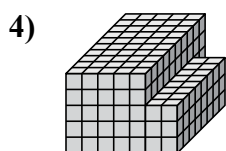
2. 402 cm³



$$10 \times 9 \times 8 = 720$$

$$8 \times 2 \times 1 = 16$$

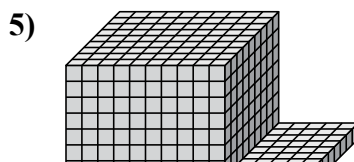
3. 736 cm³



$$5 \times 10 \times 5 = 250$$

$$2 \times 8 \times 3 = 48$$

4. 298 cm³



$$10 \times 9 \times 8 = 720$$

$$5 \times 9 \times 1 = 45$$

5. 765 cm³