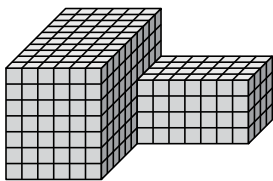




Найдите общий объем каждой фигуры. Размеры указаны в сантиметрах (без учета масштаба).

ОТВЕТЫ

1)



1. \_\_\_\_\_

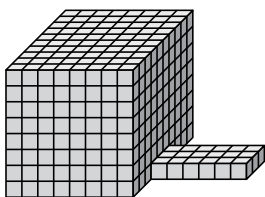
2. \_\_\_\_\_

3. \_\_\_\_\_

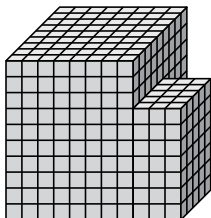
4. \_\_\_\_\_

5. \_\_\_\_\_

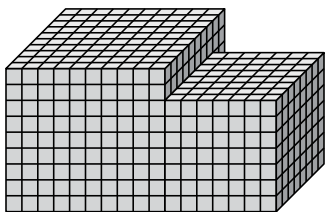
2)



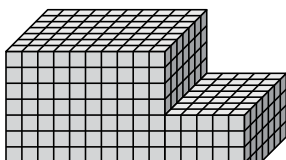
3)



4)

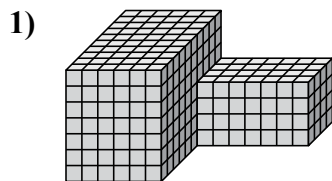


5)



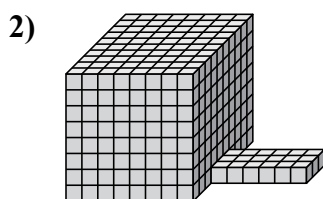


Найдите общий объем каждой фигуры. Размеры указаны в сантиметрах (без учета масштаба).



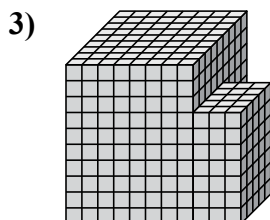
$$6 \times 10 \times 7 = 420$$

$$7 \times 4 \times 4 = 112$$



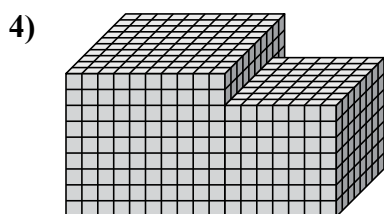
$$8 \times 10 \times 8 = 640$$

$$6 \times 3 \times 1 = 18$$



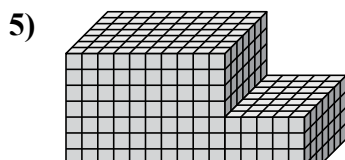
$$8 \times 9 \times 10 = 720$$

$$3 \times 5 \times 7 = 105$$



$$10 \times 10 \times 9 = 900$$

$$7 \times 8 \times 7 = 392$$



$$10 \times 7 \times 8 = 560$$

$$5 \times 7 \times 4 = 140$$

### ОТВЕТЫ

1. 532 cm<sup>3</sup>

2. 658 cm<sup>3</sup>

3. 825 cm<sup>3</sup>

4. 1292 cm<sup>3</sup>

5. 700 cm<sup>3</sup>