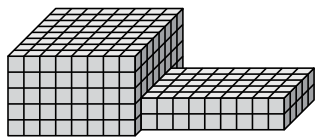




Найдите общий объем каждой фигуры. Размеры указаны в сантиметрах (без учета масштаба).

ОТВЕТЫ

1)



1. \_\_\_\_\_

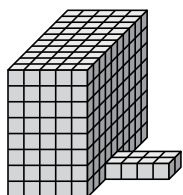
2. \_\_\_\_\_

3. \_\_\_\_\_


4. \_\_\_\_\_

5. \_\_\_\_\_

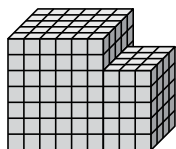
2)



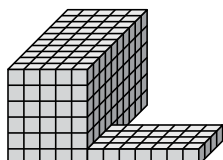
3)



4)

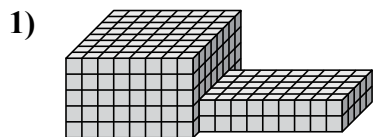


5)



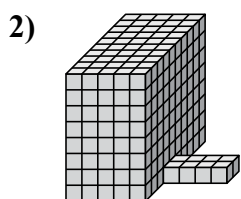


Найдите общий объем каждой фигуры. Размеры указаны в сантиметрах (без учета масштаба).



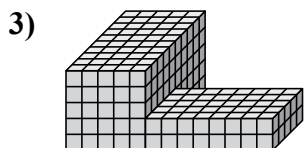
$$8 \times 8 \times 5 = 320$$

$$9 \times 5 \times 2 = 90$$



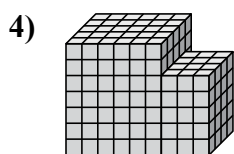
$$5 \times 10 \times 8 = 400$$

$$4 \times 2 \times 1 = 8$$



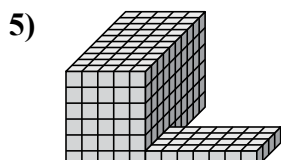
$$5 \times 10 \times 5 = 250$$

$$8 \times 5 \times 2 = 80$$



$$6 \times 5 \times 7 = 210$$

$$3 \times 4 \times 5 = 60$$



$$5 \times 10 \times 6 = 300$$

$$7 \times 4 \times 1 = 28$$

**ОТВЕТЫ**

1. 410 cm<sup>3</sup>

2. 408 cm<sup>3</sup>

3. 330 cm<sup>3</sup>

4. 270 cm<sup>3</sup>

5. 328 cm<sup>3</sup>