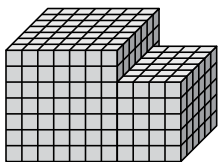




Найдите общий объем каждой фигуры. Размеры указаны в сантиметрах (без учета масштаба).

ОТВЕТЫ

1)



1. _____

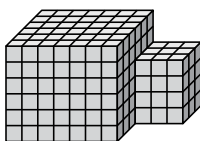
2. _____

3. _____

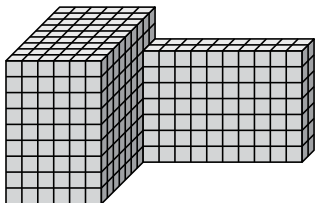
4. _____

5. _____

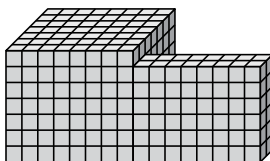
2)



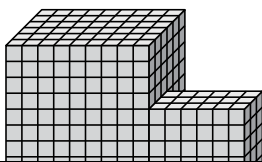
3)



4)

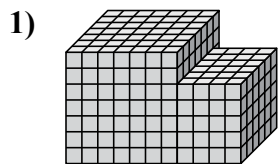


5)

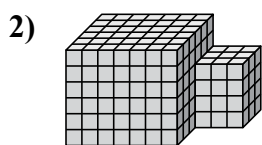




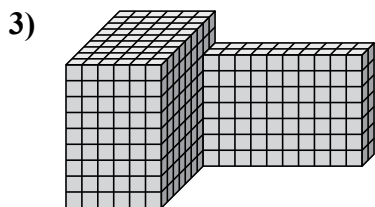
Найдите общий объем каждой фигуры. Размеры указаны в сантиметрах (без учета масштаба).



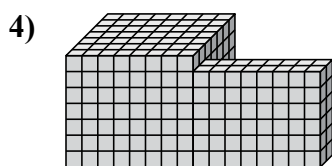
$$7 \times 7 \times 7 = 343$$
$$4 \times 6 \times 5 = 120$$



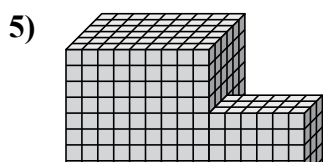
$$7 \times 6 \times 6 = 252$$
$$3 \times 3 \times 4 = 36$$



$$6 \times 9 \times 9 = 486$$
$$10 \times 2 \times 7 = 140$$



$$8 \times 7 \times 7 = 392$$
$$8 \times 2 \times 6 = 96$$



$$9 \times 6 \times 9 = 486$$
$$6 \times 3 \times 5 = 90$$

Ответы

1. 463 cm³

2. 288 cm³

3. 626 cm³

4. 488 cm³

5. 576 cm³