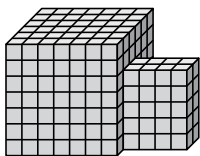




Найдите общий объем каждой фигуры. Размеры указаны в сантиметрах (без учета масштаба).

ОТВЕТЫ

1)



1. \_\_\_\_\_

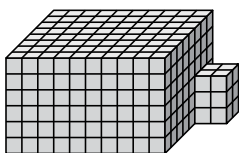
2. \_\_\_\_\_

3. \_\_\_\_\_

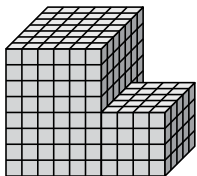
4. \_\_\_\_\_

5. \_\_\_\_\_

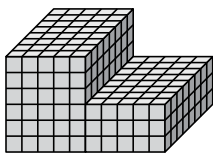
2)



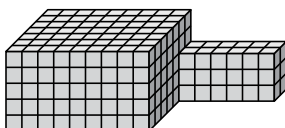
3)



4)

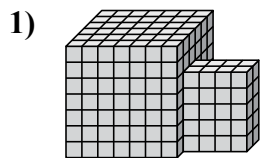


5)



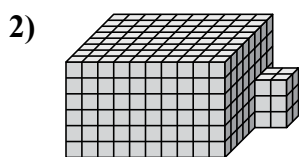


Найдите общий объем каждой фигуры. Размеры указаны в сантиметрах (без учета масштаба).



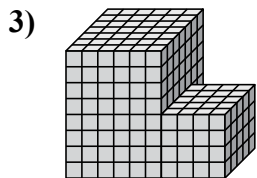
$$7 \times 6 \times 7 = 294$$

$$4 \times 2 \times 5 = 40$$



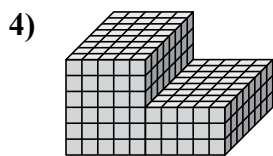
$$10 \times 8 \times 6 = 480$$

$$2 \times 2 \times 3 = 12$$



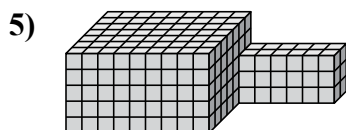
$$6 \times 7 \times 8 = 336$$

$$4 \times 5 \times 4 = 80$$



$$5 \times 8 \times 6 = 240$$

$$5 \times 8 \times 3 = 120$$



$$9 \times 7 \times 5 = 315$$

$$6 \times 2 \times 3 = 36$$

**ОТВЕТЫ**

1. 334 cm<sup>3</sup>

2. 492 cm<sup>3</sup>

3. 416 cm<sup>3</sup>

4. 360 cm<sup>3</sup>

5. 351 cm<sup>3</sup>