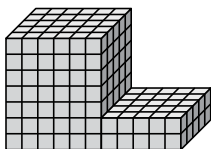




Найдите общий объем каждой фигуры. Размеры указаны в сантиметрах (без учета масштаба).

ОТВЕТЫ

1)



1. _____

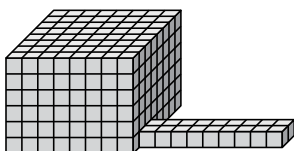
2. _____

3. _____

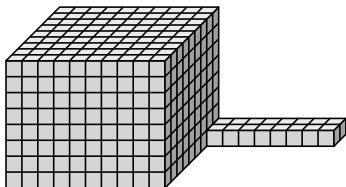
4. _____

5. _____

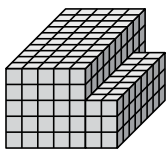
2)



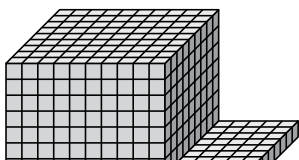
3)



4)



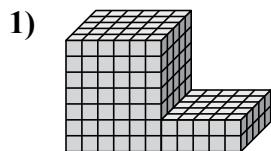
5)





Найдите общий объем каждой фигуры. Размеры указаны в сантиметрах (без учета масштаба).

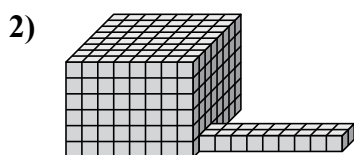
ОТВЕТЫ



$$6 \times 5 \times 7 = 210$$

$$5 \times 5 \times 2 = 50$$

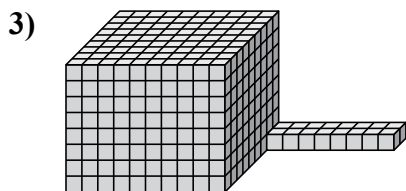
1. 260 cm³



$$8 \times 8 \times 6 = 384$$

$$9 \times 2 \times 1 = 18$$

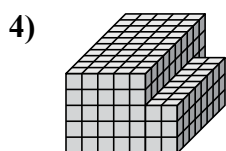
2. 402 cm³



$$10 \times 9 \times 8 = 720$$

$$8 \times 2 \times 1 = 16$$

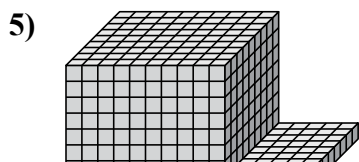
3. 736 cm³



$$5 \times 10 \times 5 = 250$$

$$2 \times 8 \times 3 = 48$$

4. 298 cm³



$$10 \times 9 \times 8 = 720$$

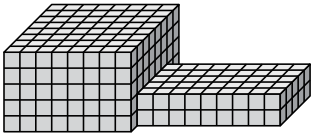
$$5 \times 9 \times 1 = 45$$

5. 765 cm³

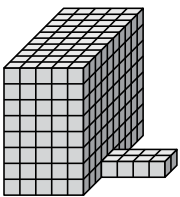


Найдите общий объем каждой фигуры. Размеры указаны в сантиметрах (без учета масштаба).

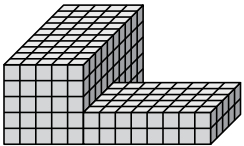
1)



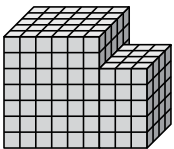
2)



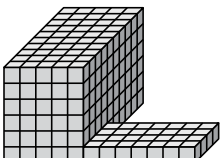
3)



4)



5)



ОТВЕТЫ

1. _____

2. _____

3. _____

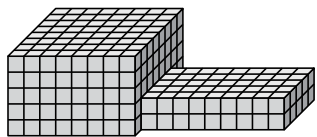
4. _____

5. _____



Найдите общий объем каждой фигуры. Размеры указаны в сантиметрах (без учета масштаба).

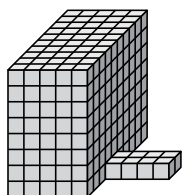
1)



$$8 \times 8 \times 5 = 320$$

$$9 \times 5 \times 2 = 90$$


2)



$$5 \times 10 \times 8 = 400$$

$$4 \times 2 \times 1 = 8$$

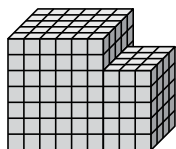
3)



$$5 \times 10 \times 5 = 250$$

$$8 \times 5 \times 2 = 80$$

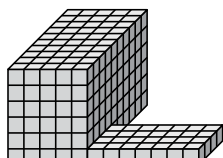
4)



$$6 \times 5 \times 7 = 210$$

$$3 \times 4 \times 5 = 60$$

5)



$$5 \times 10 \times 6 = 300$$

$$7 \times 4 \times 1 = 28$$

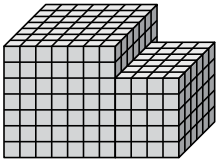
ОТВЕТЫ1. 410 cm³2. 408 cm³3. 330 cm³4. 270 cm³5. 328 cm³



Найдите общий объем каждой фигуры. Размеры указаны в сантиметрах (без учета масштаба).

ОТВЕТЫ

1)



1. _____

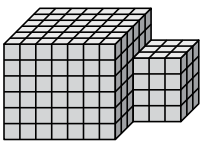
2. _____

3. _____

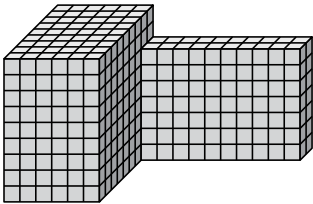
4. _____

5. _____

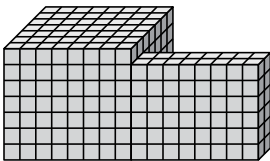
2)



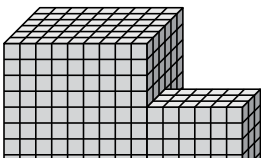
3)



4)

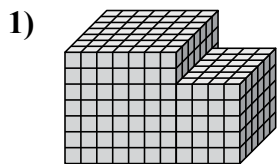


5)

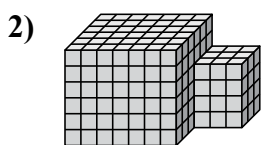




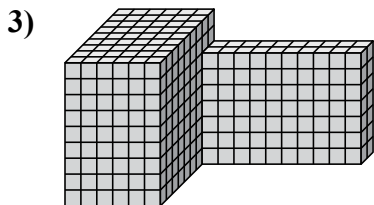
Найдите общий объем каждой фигуры. Размеры указаны в сантиметрах (без учета масштаба).



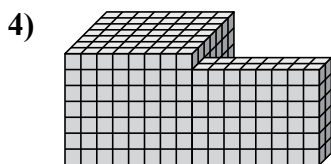
$$7 \times 7 \times 7 = 343$$
$$4 \times 6 \times 5 = 120$$



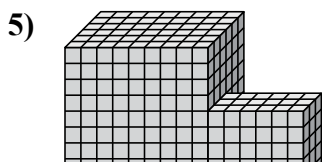
$$7 \times 6 \times 6 = 252$$
$$3 \times 3 \times 4 = 36$$



$$6 \times 9 \times 9 = 486$$
$$10 \times 2 \times 7 = 140$$



$$8 \times 7 \times 7 = 392$$
$$8 \times 2 \times 6 = 96$$



$$9 \times 6 \times 9 = 486$$
$$6 \times 3 \times 5 = 90$$

ОТВЕТЫ

1. 463 cm³

2. 288 cm³

3. 626 cm³

4. 488 cm³

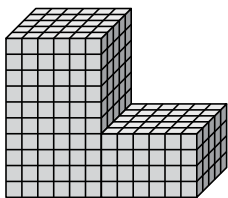
5. 576 cm³



Найдите общий объем каждой фигуры. Размеры указаны в сантиметрах (без учета масштаба).

ОТВЕТЫ

1)



1. _____

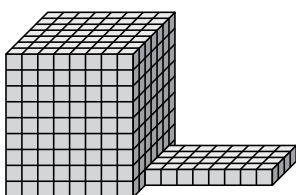
2. _____

3. _____

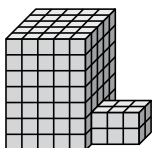
4. _____

5. _____

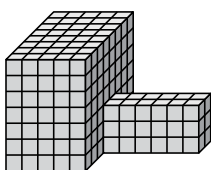
2)



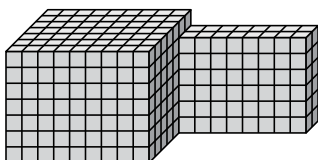
3)



4)

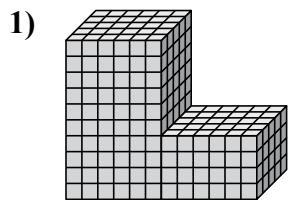


5)



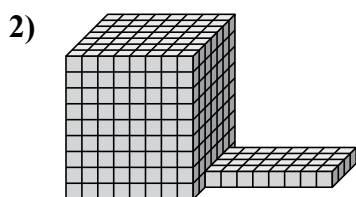


Найдите общий объем каждой фигуры. Размеры указаны в сантиметрах (без учета масштаба).



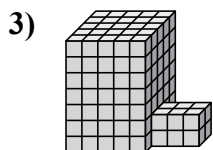
$$6 \times 5 \times 10 = 300$$

$$6 \times 5 \times 4 = 120$$



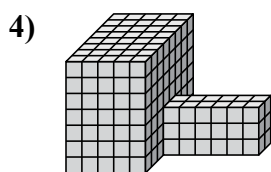
$$8 \times 7 \times 9 = 504$$

$$8 \times 4 \times 1 = 32$$



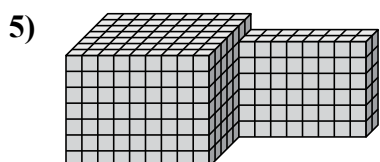
$$5 \times 5 \times 7 = 175$$

$$3 \times 2 \times 2 = 12$$



$$5 \times 8 \times 7 = 280$$

$$6 \times 2 \times 3 = 36$$



$$9 \times 7 \times 7 = 441$$

$$8 \times 2 \times 6 = 96$$

ОТВЕТЫ

1. 420 cm³

2. 536 cm³

3. 187 cm³

4. 316 cm³

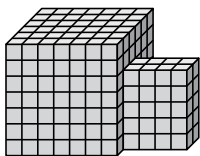
5. 537 cm³



Найдите общий объем каждой фигуры. Размеры указаны в сантиметрах (без учета масштаба).

ОТВЕТЫ

1)



1. _____

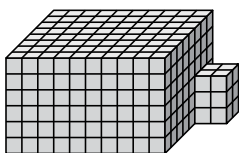
2. _____

3. _____

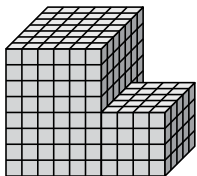
4. _____

5. _____

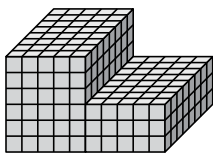
2)



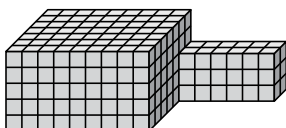
3)



4)

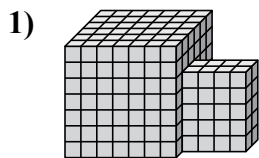


5)

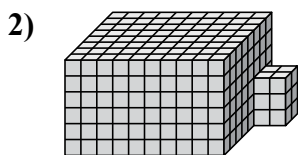




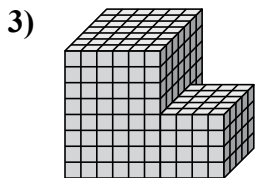
Найдите общий объем каждой фигуры. Размеры указаны в сантиметрах (без учета масштаба).



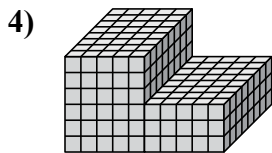
$$7 \times 6 \times 7 = 294$$
$$4 \times 2 \times 5 = 40$$



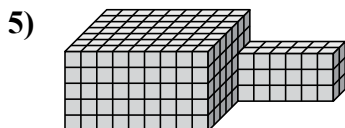
$$10 \times 8 \times 6 = 480$$
$$2 \times 2 \times 3 = 12$$



$$6 \times 7 \times 8 = 336$$
$$4 \times 5 \times 4 = 80$$



$$5 \times 8 \times 6 = 240$$
$$5 \times 8 \times 3 = 120$$



$$9 \times 7 \times 5 = 315$$
$$6 \times 2 \times 3 = 36$$

ОТВЕТЫ

1. 334 cm³

2. 492 cm³

3. 416 cm³

4. 360 cm³

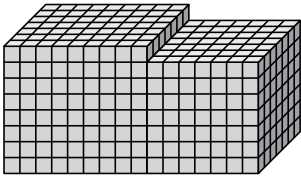
5. 351 cm³



Найдите общий объем каждой фигуры. Размеры указаны в сантиметрах (без учета масштаба).

ОТВЕТЫ

1)



1. _____

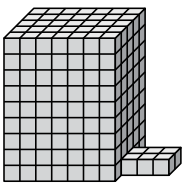
2. _____

3. _____

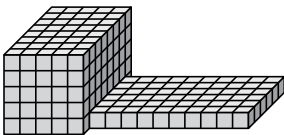
4. _____

5. _____

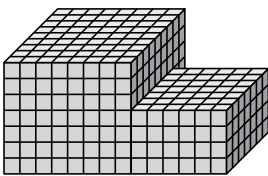
2)



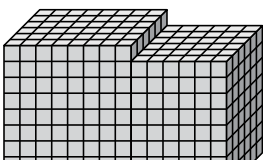
3)



4)

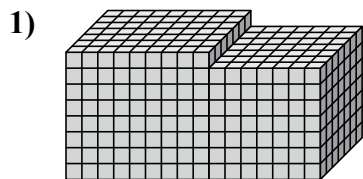


5)



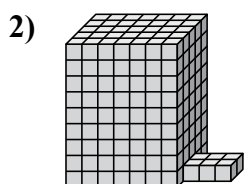


Найдите общий объем каждой фигуры. Размеры указаны в сантиметрах (без учета масштаба).




$$9 \times 7 \times 8 = 504$$

$$7 \times 7 \times 7 = 343$$



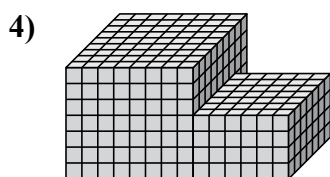
$$7 \times 5 \times 9 = 315$$

$$3 \times 2 \times 1 = 6$$



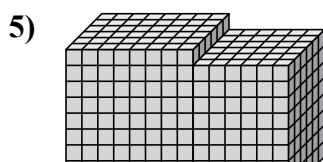
$$5 \times 8 \times 5 = 200$$

$$10 \times 6 \times 1 = 60$$



$$8 \times 9 \times 7 = 504$$

$$6 \times 7 \times 4 = 168$$



$$8 \times 6 \times 9 = 432$$

$$6 \times 6 \times 8 = 288$$

Ответы

1. 847 cm³

2. 321 cm³

3. 260 cm³

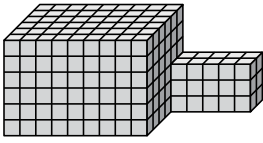
4. 672 cm³

5. 720 cm³




Найдите общий объем каждой фигуры. Размеры указаны в сантиметрах (без учета масштаба).

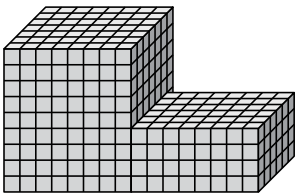
1)



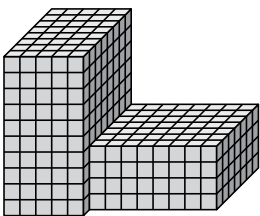
2)



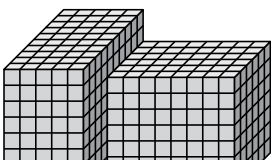
3)



4)



5)



Ответы

1. _____

2. _____

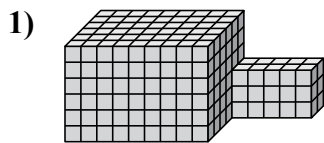
3. _____

4. _____

5. _____

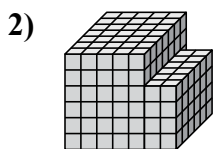


Найдите общий объем каждой фигуры. Размеры указаны в сантиметрах (без учета масштаба).



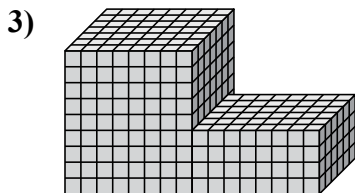
$$9 \times 6 \times 6 = 324$$

$$5 \times 2 \times 3 = 30$$



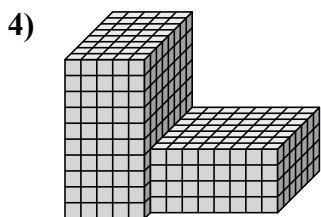
$$5 \times 7 \times 6 = 210$$

$$2 \times 6 \times 4 = 48$$



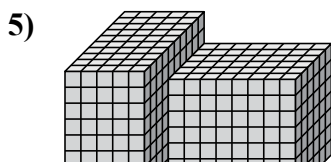
$$8 \times 7 \times 9 = 504$$

$$8 \times 6 \times 4 = 192$$



$$5 \times 8 \times 10 = 400$$

$$8 \times 7 \times 4 = 224$$



$$5 \times 10 \times 9 = 450$$

$$8 \times 6 \times 7 = 336$$

ОТВЕТЫ

1. 354 cm³

2. 258 cm³

3. 696 cm³

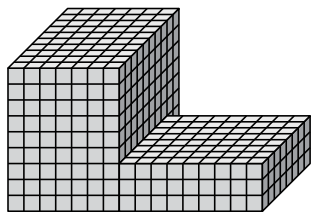
4. 624 cm³

5. 786 cm³

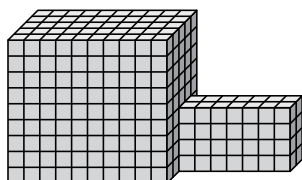


Найдите общий объем каждой фигуры. Размеры указаны в сантиметрах (без учета масштаба).

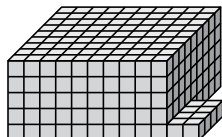
1)



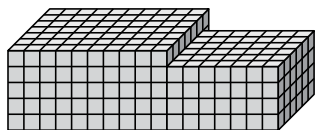
2)



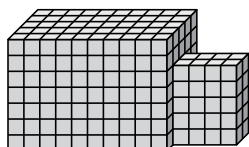
3)



4)



5)



ОТВЕТЫ

1. _____

2. _____

3. _____

4. _____

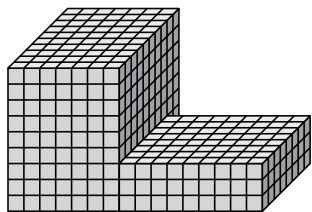
5. _____



Найдите общий объем каждой фигуры. Размеры указаны в сантиметрах (без учета масштаба).

Ответы

1)

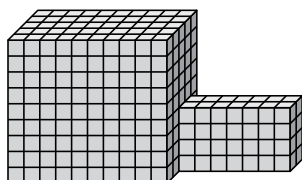


$$7 \times 10 \times 9 = 630$$

$$9 \times 8 \times 3 = 216$$

1. 846 cm³

2)

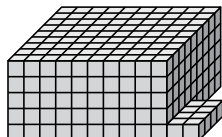


$$10 \times 5 \times 9 = 450$$

$$7 \times 2 \times 4 = 56$$

2. 506 cm³

3)

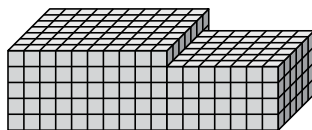


$$10 \times 9 \times 5 = 450$$

$$2 \times 4 \times 1 = 8$$

3. 458 cm³

4)

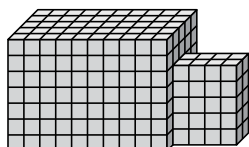


$$10 \times 7 \times 5 = 350$$

$$7 \times 6 \times 4 = 168$$

4. 518 cm³

5)



$$10 \times 5 \times 7 = 350$$

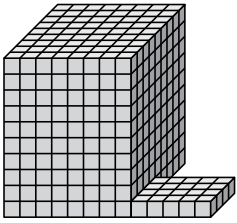
$$4 \times 2 \times 5 = 40$$

5. 390 cm³

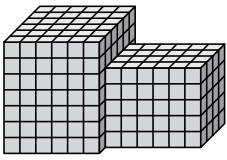


Найдите общий объем каждой фигуры. Размеры указаны в сантиметрах (без учета масштаба).

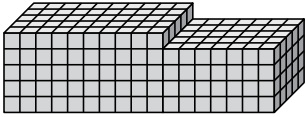
1)



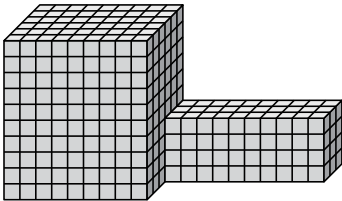
2)



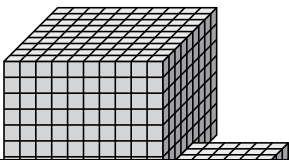
3)



4)



5)



ОТВЕТЫ

1. _____

2. _____

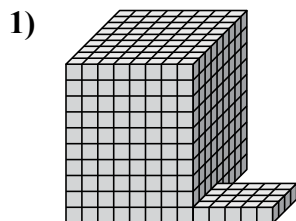
3. _____

4. _____

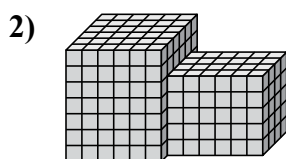
5. _____



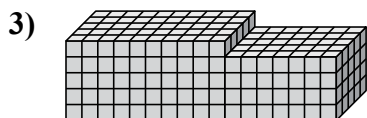
Найдите общий объем каждой фигуры. Размеры указаны в сантиметрах (без учета масштаба).



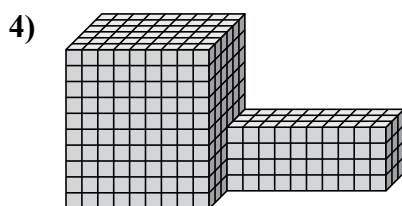
$$8 \times 9 \times 10 = 720$$
$$5 \times 4 \times 1 = 20$$



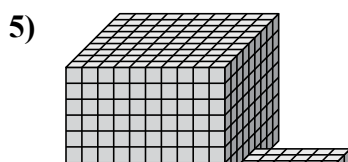
$$6 \times 6 \times 7 = 252$$
$$6 \times 4 \times 5 = 120$$



$$10 \times 5 \times 5 = 250$$
$$7 \times 5 \times 4 = 140$$



$$9 \times 6 \times 10 = 540$$
$$10 \times 3 \times 4 = 120$$



$$10 \times 9 \times 8 = 720$$
$$6 \times 5 \times 1 = 30$$

ОТВЕТЫ

1. 740 cm³

2. 372 cm³

3. 390 cm³

4. 660 cm³

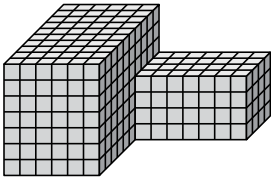
5. 750 cm³



Найдите общий объем каждой фигуры. Размеры указаны в сантиметрах (без учета масштаба).

ОТВЕТЫ

1)



1. _____

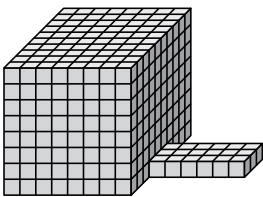
2. _____

3. _____

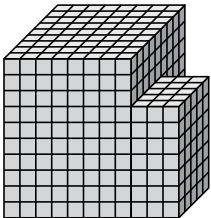
4. _____

5. _____

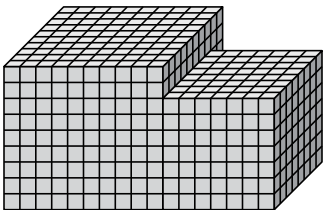
2)



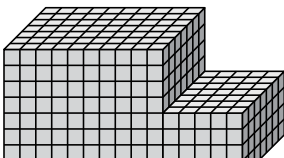
3)



4)

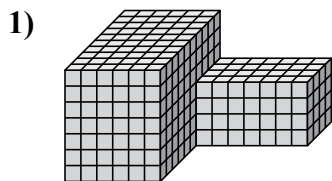


5)



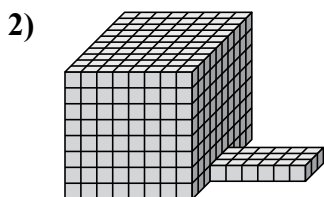


Найдите общий объем каждой фигуры. Размеры указаны в сантиметрах (без учета масштаба).



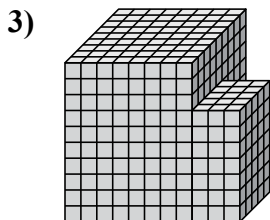
$$6 \times 10 \times 7 = 420$$

$$7 \times 4 \times 4 = 112$$



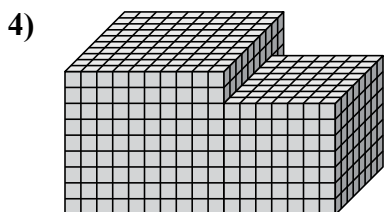
$$8 \times 10 \times 8 = 640$$

$$6 \times 3 \times 1 = 18$$



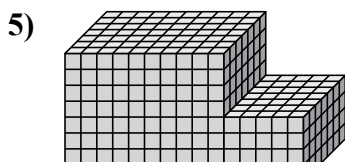
$$8 \times 9 \times 10 = 720$$

$$3 \times 5 \times 7 = 105$$



$$10 \times 10 \times 9 = 900$$

$$7 \times 8 \times 7 = 392$$



$$10 \times 7 \times 8 = 560$$

$$5 \times 7 \times 4 = 140$$

ОТВЕТЫ

1. 532 cm³

2. 658 cm³

3. 825 cm³

4. 1292 cm³

5. 700 cm³