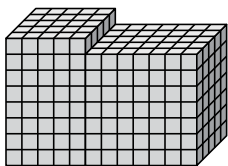




Найдите общий объем каждой фигуры. Размеры указаны в сантиметрах (без учета масштаба).

ОТВЕТЫ

1)



1. _____

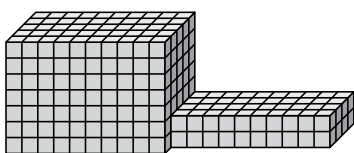
2. _____

3. _____

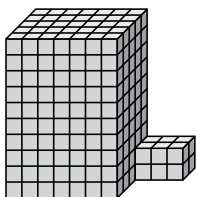
4. _____

5. _____

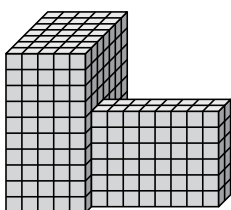
2)



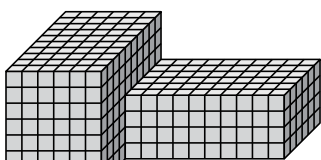
3)



4)

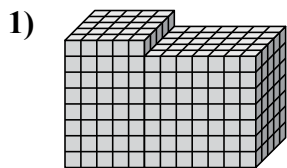


5)



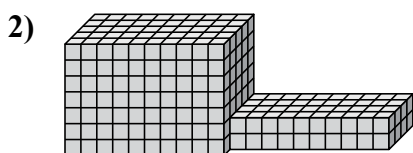


Найдите общий объем каждой фигуры. Размеры указаны в сантиметрах (без учета масштаба).



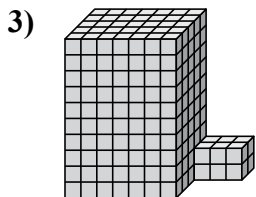
$$5 \times 5 \times 8 = 200$$

$$7 \times 5 \times 7 = 245$$



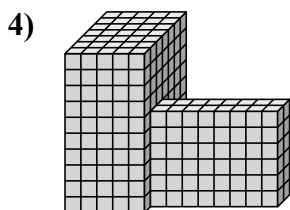
$$10 \times 5 \times 7 = 350$$

$$10 \times 4 \times 2 = 80$$



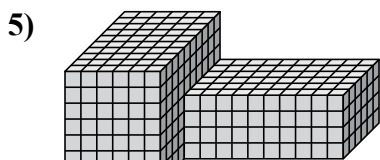
$$7 \times 5 \times 10 = 350$$

$$3 \times 2 \times 2 = 12$$



$$5 \times 7 \times 10 = 350$$

$$8 \times 2 \times 6 = 96$$



$$6 \times 10 \times 7 = 420$$

$$10 \times 6 \times 4 = 240$$

ОТВЕТЫ

1. 445 cm³

2. 430 cm³

3. 362 cm³

4. 446 cm³

5. 660 cm³