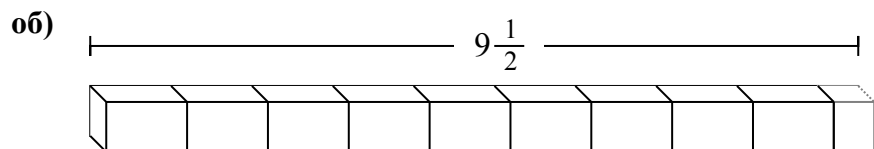


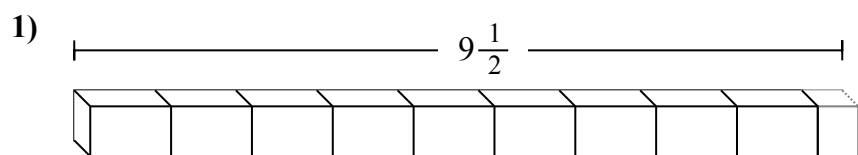


Определите количество малых единиц в задачах.

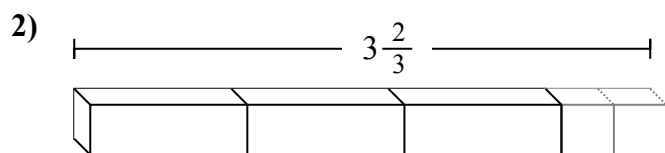
Ответы



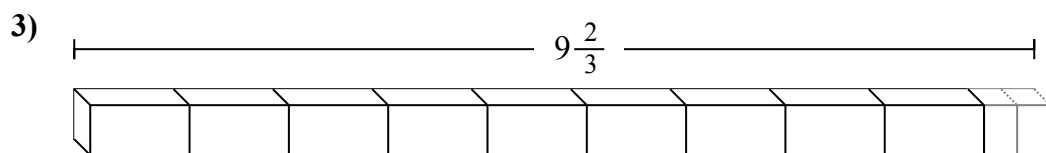
об. **19**



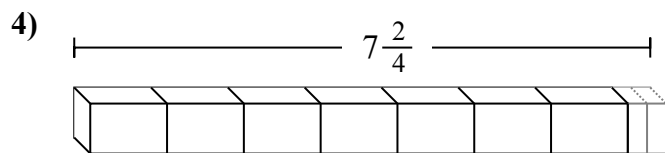
1. _____



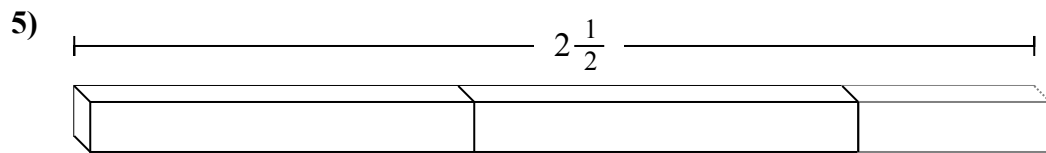
2. _____



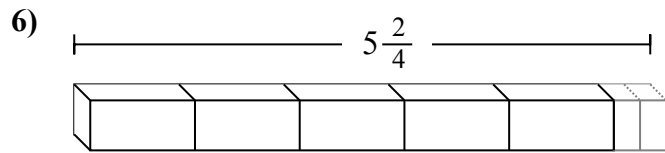
3. _____



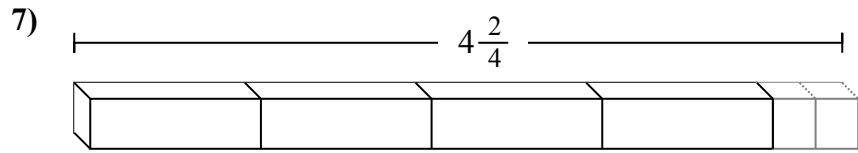
4. _____



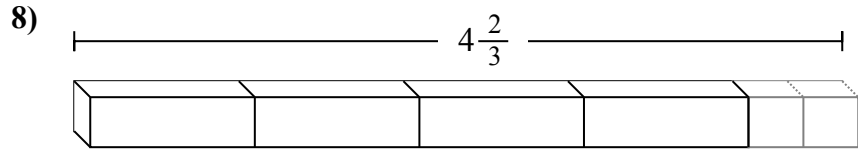
5. _____



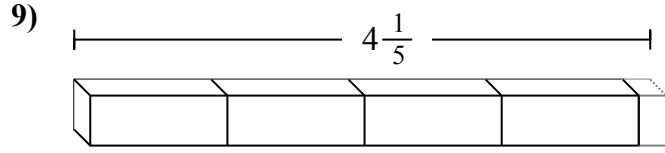
6. _____



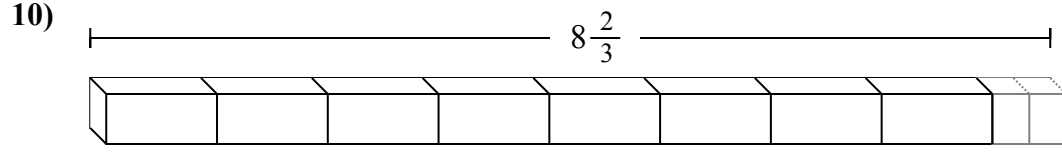
7. _____



8. _____



9. _____



10. _____



Определите количество малых единиц в задачах.

об) $9\frac{1}{2}$

1) $9\frac{1}{2}$

2) $3\frac{2}{3}$

3) $9\frac{2}{3}$

4) $7\frac{2}{4}$

5) $2\frac{1}{2}$

6) $5\frac{2}{4}$

7) $4\frac{2}{4}$

8) $4\frac{2}{3}$

9) $4\frac{1}{5}$

10) $8\frac{2}{3}$

ОТВЕТЫ

- об. 19
- 1. 19
- 2. 11
- 3. 29
- 4. 30
- 5. 5
- 6. 22
- 7. 18
- 8. 14
- 9. 21
- 10. 26