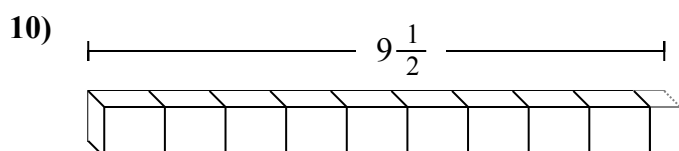
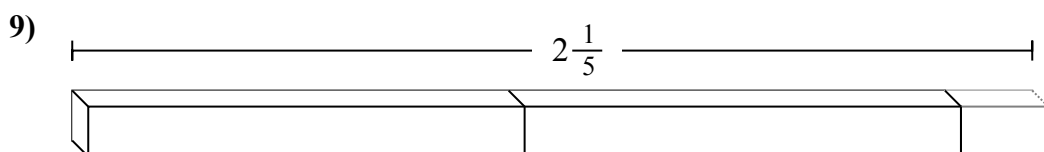
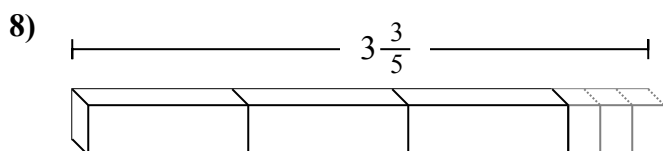
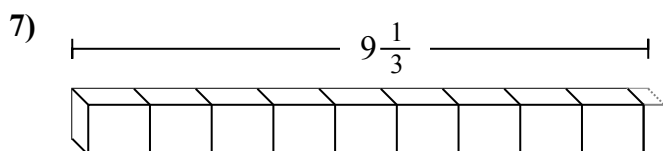
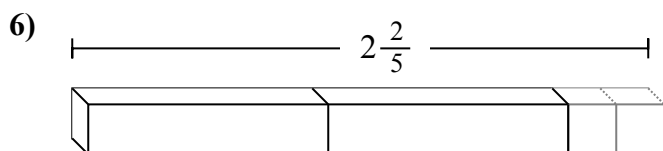
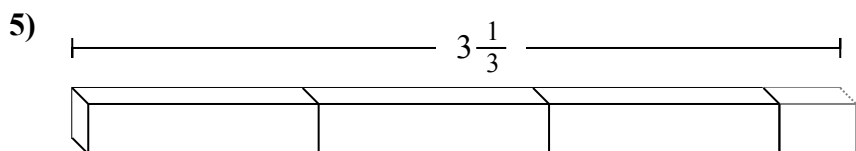
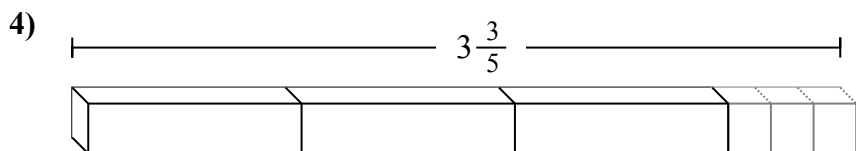
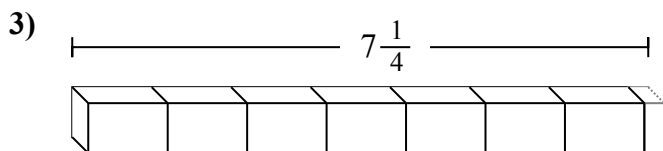
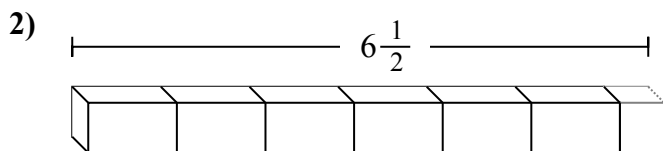
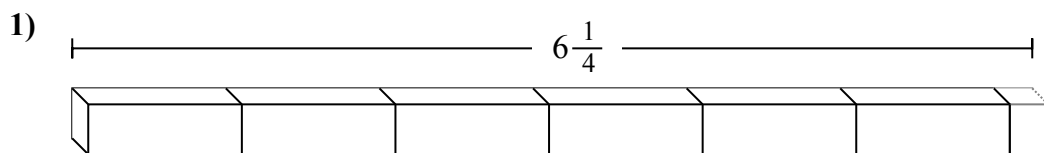
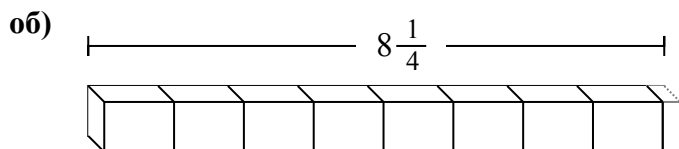




Определите количество малых единиц в задачах.

Ответы



- об. **33**
1. _____
2. _____
3. _____
4. _____
5. _____
6. _____
7. _____
8. _____
9. _____
10. _____



Определите количество малых единиц в задачах.

об) $8\frac{1}{4}$

1) $6\frac{1}{4}$

2) $6\frac{1}{2}$

3) $7\frac{1}{4}$

4) $3\frac{3}{5}$

5) $3\frac{1}{3}$

6) $2\frac{2}{5}$

7) $9\frac{1}{3}$

8) $3\frac{3}{5}$

9) $2\frac{1}{5}$

10) $9\frac{1}{2}$

ОТВЕТЫ

- об. 33
- 1. 25
- 2. 13
- 3. 29
- 4. 18
- 5. 10
- 6. 12
- 7. 28
- 8. 18
- 9. 11
- 10. 19