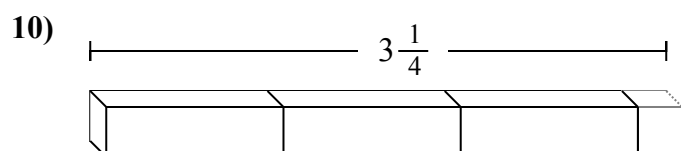
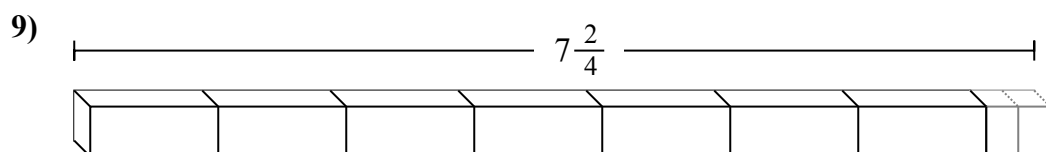
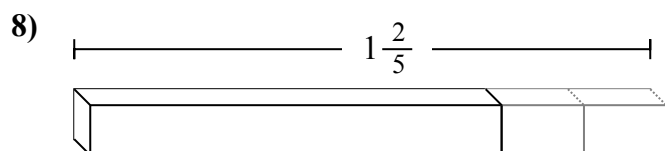
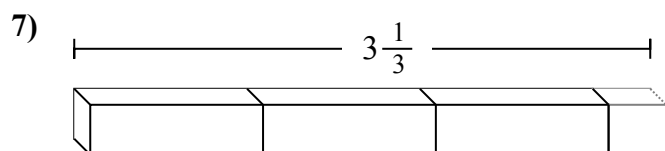
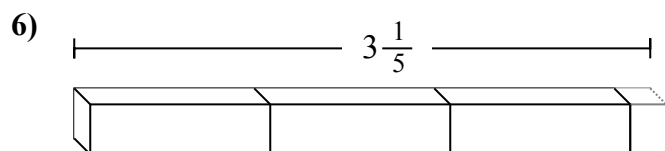
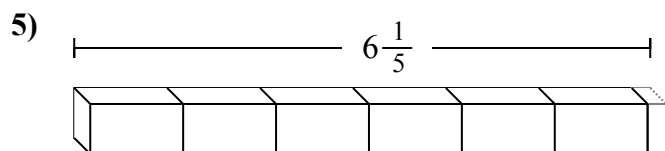
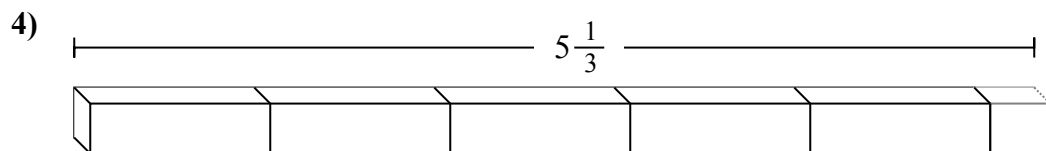
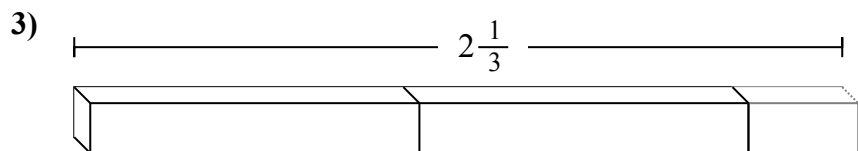
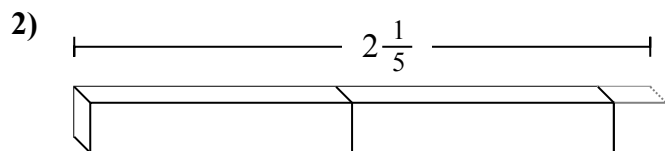
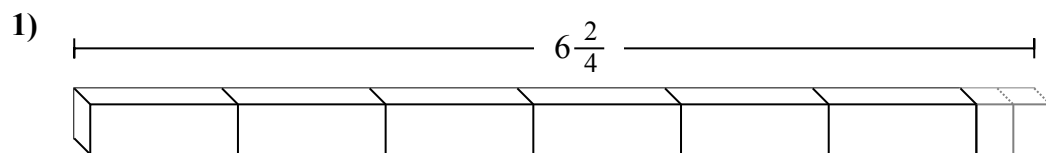
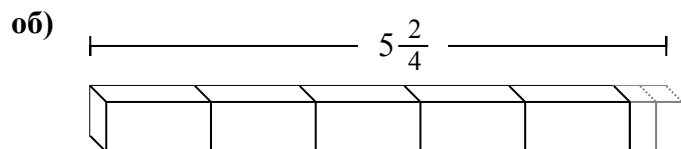




Определите количество малых единиц в задачах.

Отвeты



об. **22**

1. _____

2. _____

3. _____

4. _____

5. _____

6. _____

7. _____

8. _____

9. _____

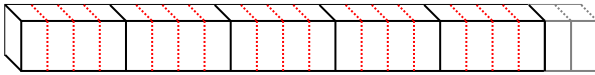
10. _____



Определите количество малых единиц в задачах.

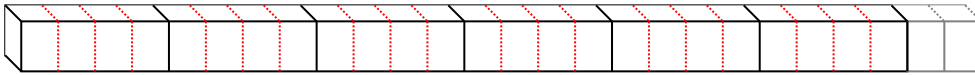
об)

$$5 \frac{2}{4}$$



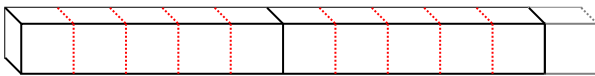
1)

$$6 \frac{2}{4}$$




2)

$$2 \frac{1}{5}$$



3)

$$2 \frac{1}{3}$$



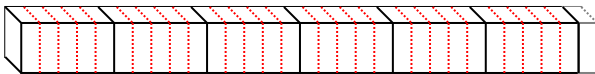
4)

$$5 \frac{1}{3}$$



5)

$$6 \frac{1}{5}$$



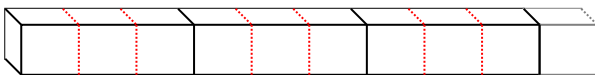
6)

$$3 \frac{1}{5}$$



7)

$$3 \frac{1}{3}$$



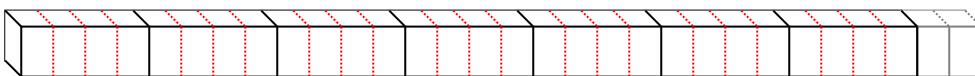
8)

$$1 \frac{2}{5}$$



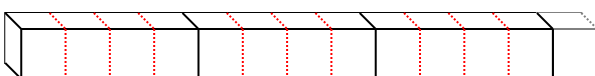
9)

$$7 \frac{2}{4}$$



10)

$$3 \frac{1}{4}$$



ОТВЕТЫ

об. 22

1. 26

2. 11

3. 7

4. 16

5. 31

6. 16

7. 10

8. 7

9. 30

10. 13