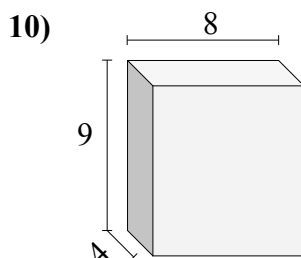
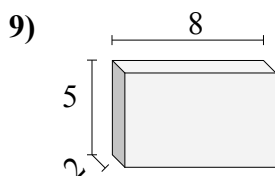
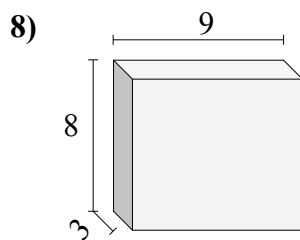
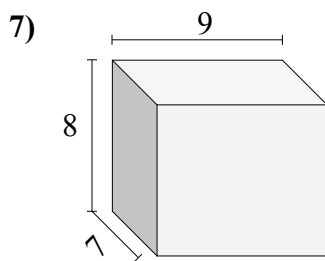
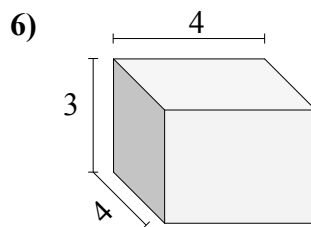
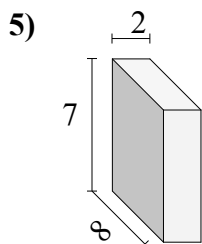
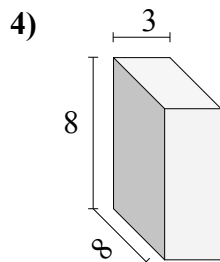
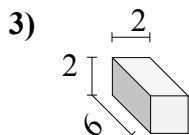
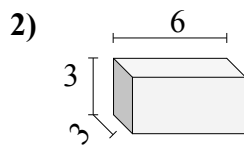
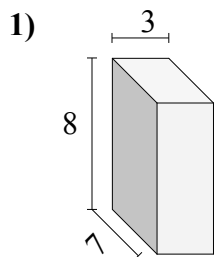




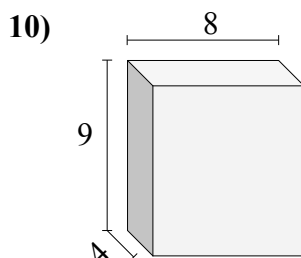
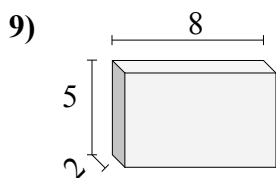
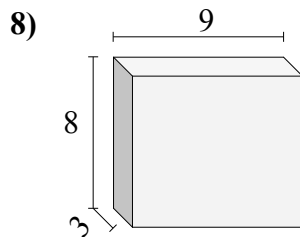
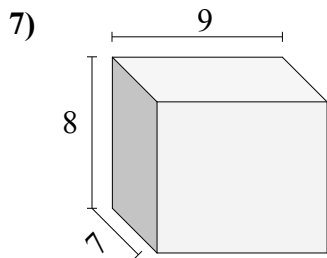
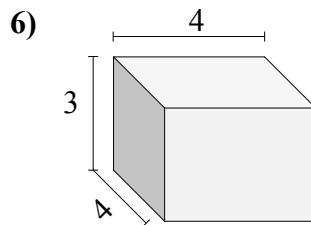
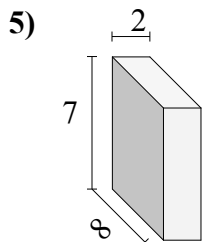
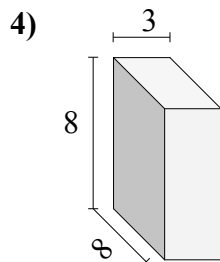
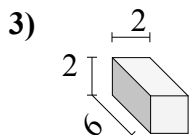
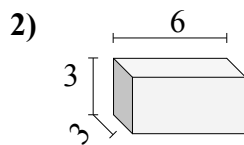
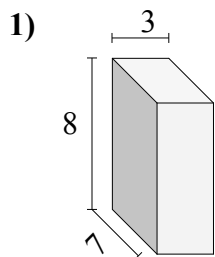
Найдите объем каждого прямоугольного параллелепипеда.

**Ответы**

1. \_\_\_\_\_
2. \_\_\_\_\_
3. \_\_\_\_\_
4. \_\_\_\_\_
5. \_\_\_\_\_
6. \_\_\_\_\_
7. \_\_\_\_\_
8. \_\_\_\_\_
9. \_\_\_\_\_
10. \_\_\_\_\_



Найдите объем каждого прямоугольного параллелепипеда.

**Ответы**

1. 168
2. 54
3. 24
4. 192
5. 112
6. 48
7. 504
8. 216
9. 80
10. 288