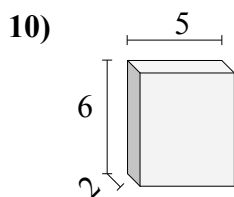
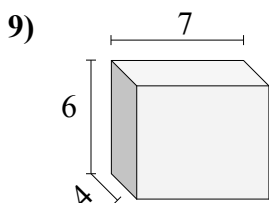
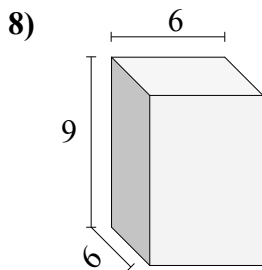
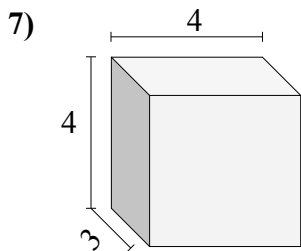
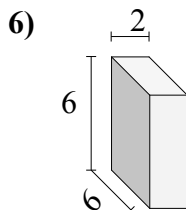
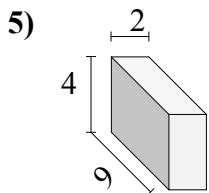
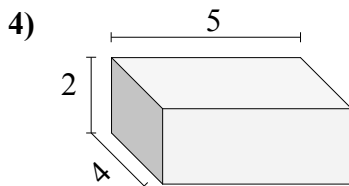
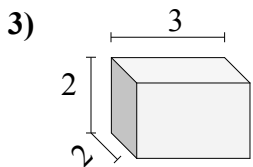
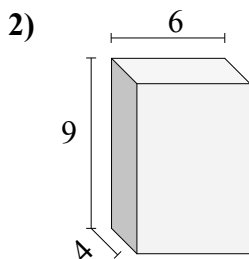
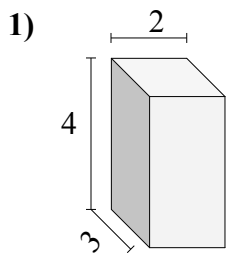




Найдите объем каждого прямоугольного параллелепипеда.

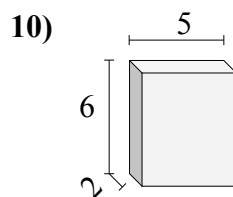
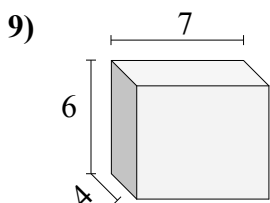
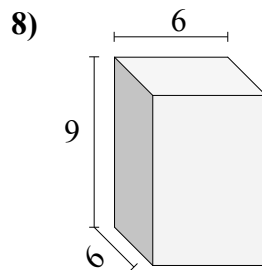
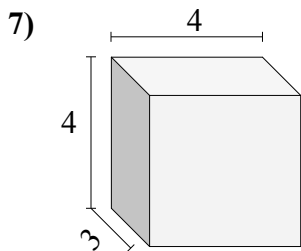
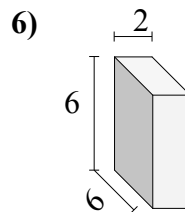
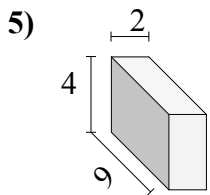
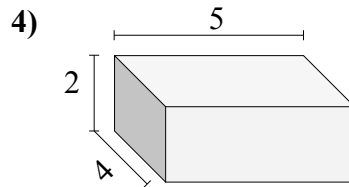
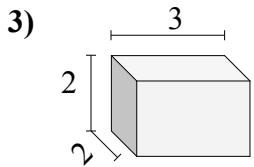
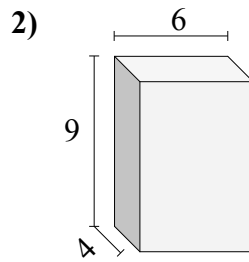
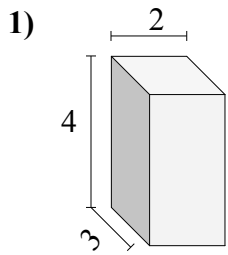


Ответы

- 1. _____
- 2. _____
- 3. _____
- 4. _____
- 5. _____
- 6. _____
- 7. _____
- 8. _____
- 9. _____
- 10. _____



Найдите объем каждого прямоугольного параллелепипеда.



ОТВЕТЫ

- 1. 24
- 2. 216
- 3. 12
- 4. 40
- 5. 72
- 6. 72
- 7. 48
- 8. 324
- 9. 168
- 10. 60