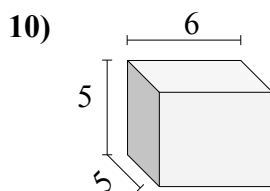
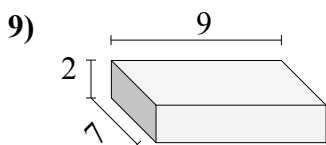
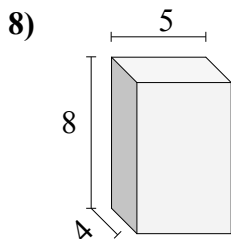
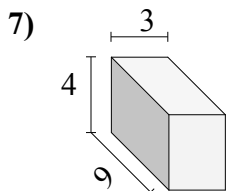
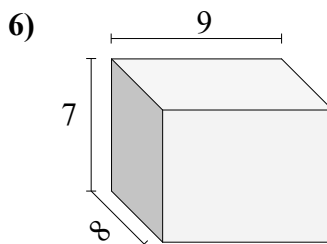
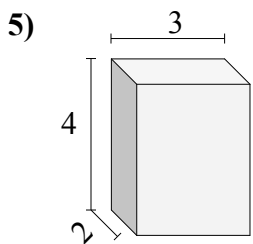
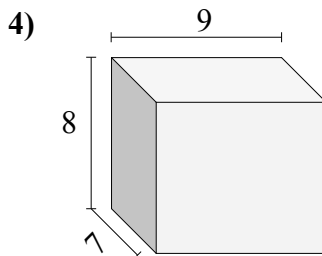
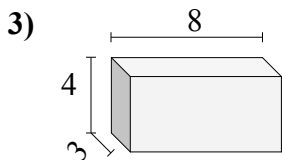
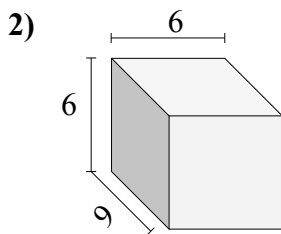
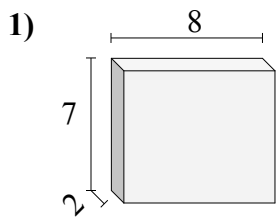




Найдите объем каждого прямоугольного параллелепипеда.

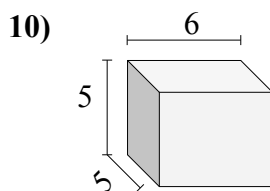
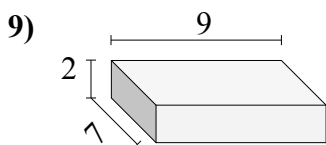
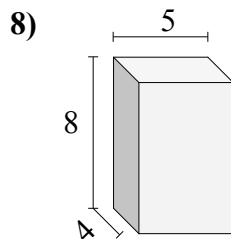
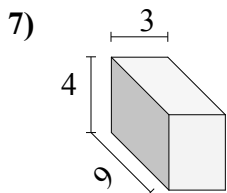
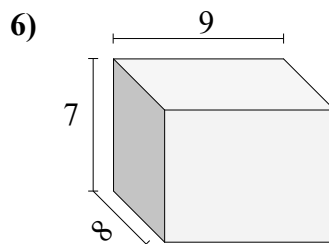
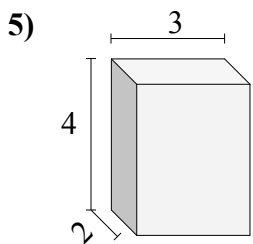
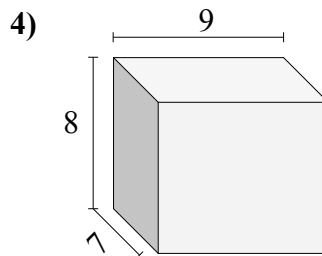
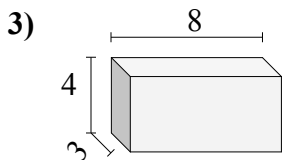
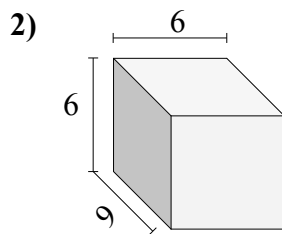
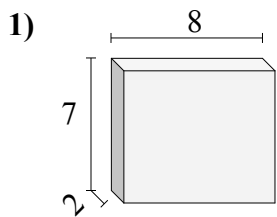


**Ответы**

- 1. \_\_\_\_\_
- 2. \_\_\_\_\_
- 3. \_\_\_\_\_
- 4. \_\_\_\_\_
- 5. \_\_\_\_\_
- 6. \_\_\_\_\_
- 7. \_\_\_\_\_
- 8. \_\_\_\_\_
- 9. \_\_\_\_\_
- 10. \_\_\_\_\_



Найдите объем каждого прямоугольного параллелепипеда.

**Ответы**1. 1122. 3243. 964. 5045. 246. 5047. 1088. 1609. 12610. 150