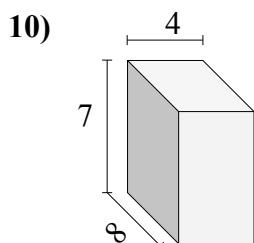
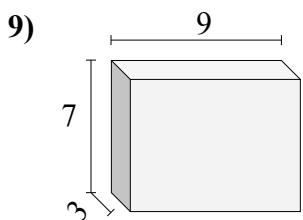
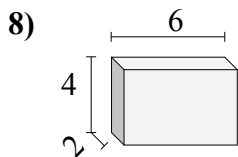
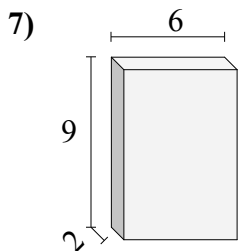
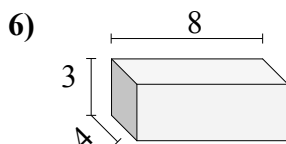
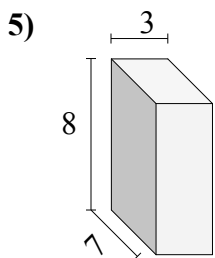
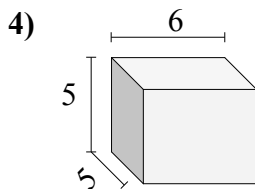
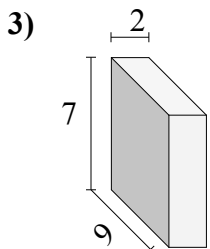
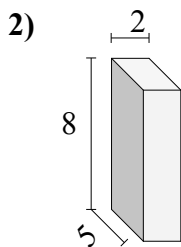
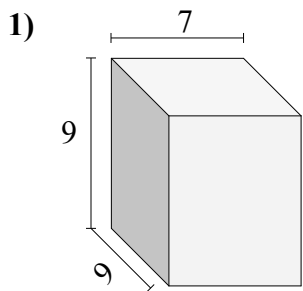




Найдите объем каждого прямоугольного параллелепипеда.

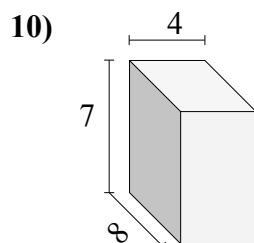
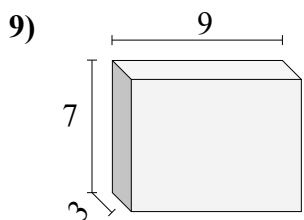
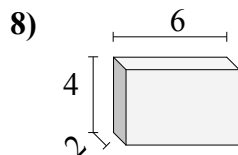
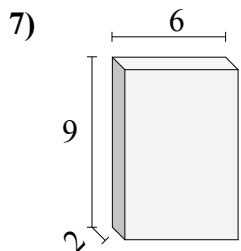
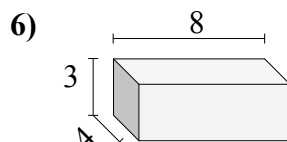
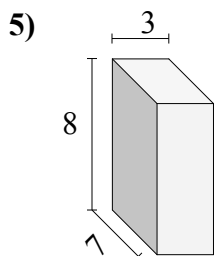
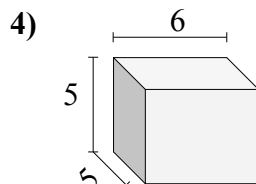
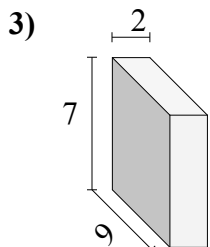
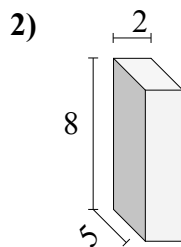
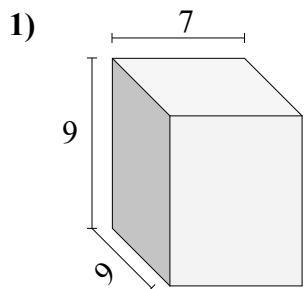


Ответы

- 1. _____
- 2. _____
- 3. _____
- 4. _____
- 5. _____
- 6. _____
- 7. _____
- 8. _____
- 9. _____
- 10. _____



Найдите объем каждого прямоугольного параллелепипеда.

**Ответы**1. 5672. 803. 1264. 1505. 1686. 967. 1088. 489. 18910. 224