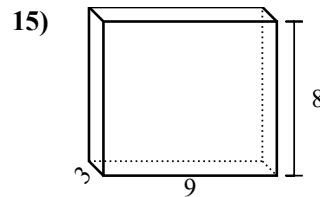
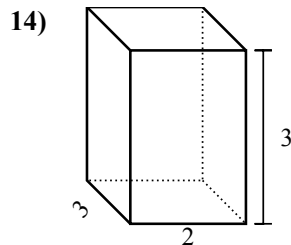
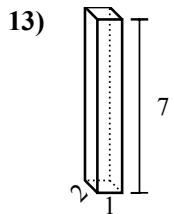
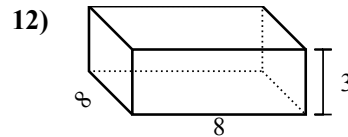
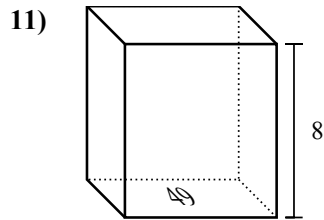
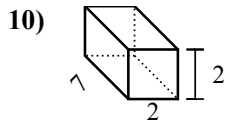
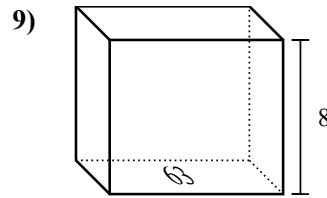
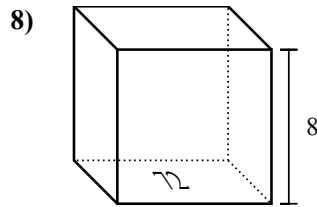
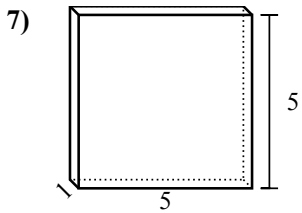
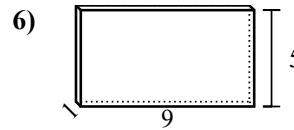
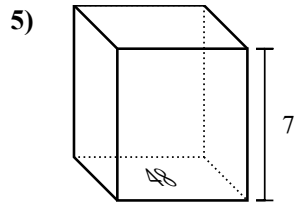
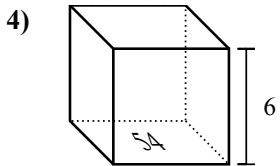
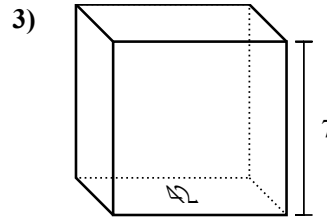
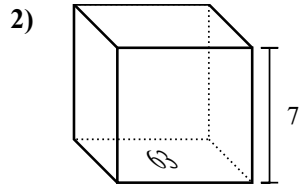
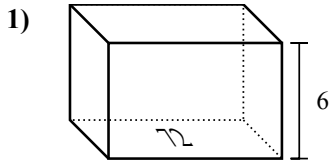


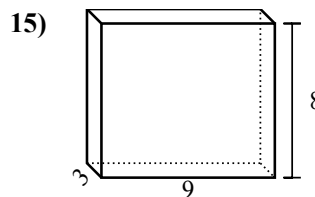
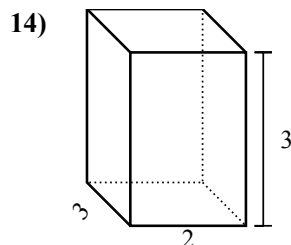
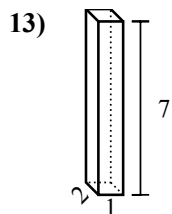
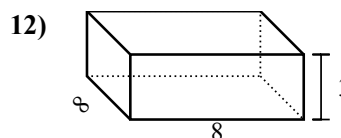
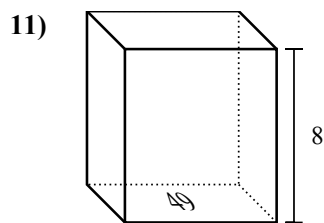
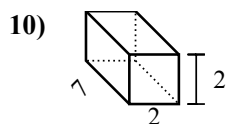
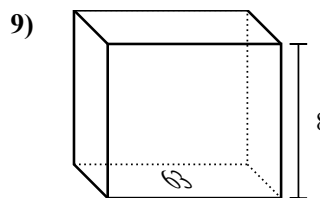
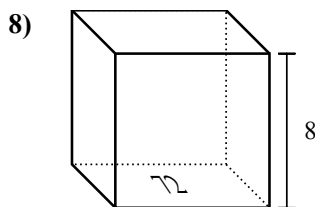
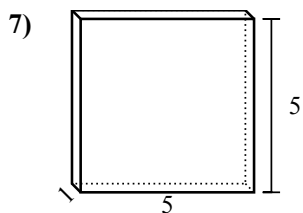
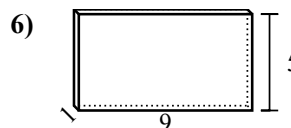
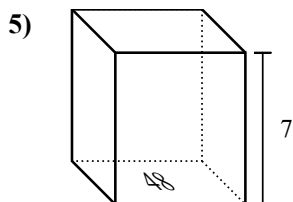
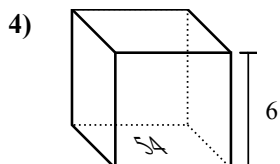
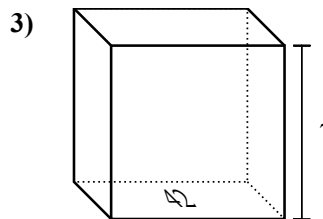
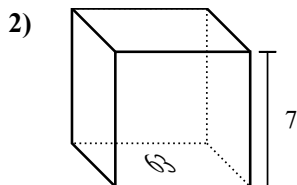
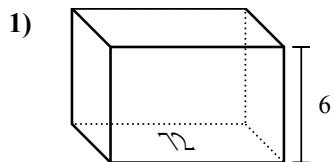


Найдите объем каждой фигуры. Помните, что  $V=BH$  и  $V=L \times W \times H$

**Ответы**



1. \_\_\_\_\_
2. \_\_\_\_\_
3. \_\_\_\_\_
4. \_\_\_\_\_
5. \_\_\_\_\_
6. \_\_\_\_\_
7. \_\_\_\_\_
8. \_\_\_\_\_
9. \_\_\_\_\_
10. \_\_\_\_\_
11. \_\_\_\_\_
12. \_\_\_\_\_
13. \_\_\_\_\_
14. \_\_\_\_\_
15. \_\_\_\_\_

Найдите объем каждой фигуры. Помните, что  $V=BH$  и  $V=L \times W \times H$ **ОТВЕТЫ**1. 432 cm<sup>3</sup>2. 441 cm<sup>3</sup>3. 294 cm<sup>3</sup>4. 324 cm<sup>3</sup>5. 336 cm<sup>3</sup>6. 45 cm<sup>3</sup>7. 25 cm<sup>3</sup>8. 576 cm<sup>3</sup>9. 504 cm<sup>3</sup>10. 28 cm<sup>3</sup>11. 392 cm<sup>3</sup>12. 192 cm<sup>3</sup>13. 14 cm<sup>3</sup>14. 18 cm<sup>3</sup>15. 216 cm<sup>3</sup>