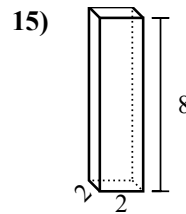
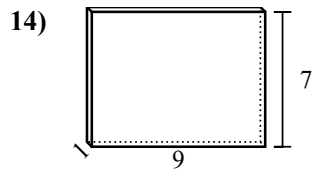
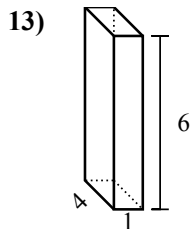
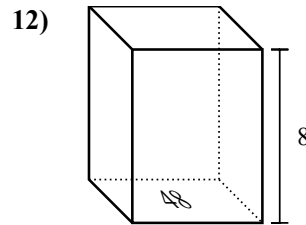
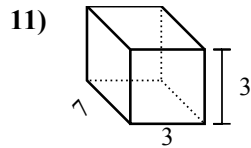
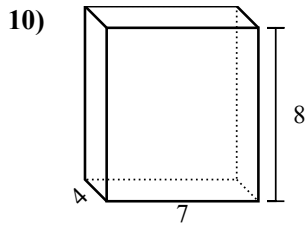
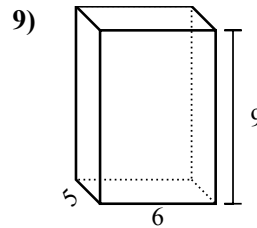
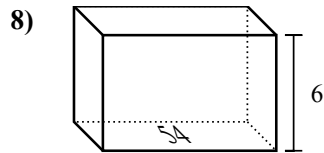
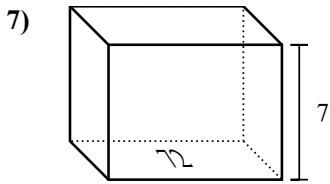
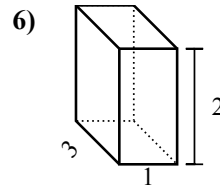
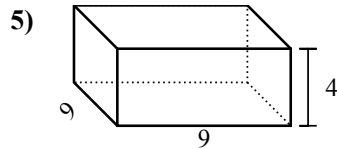
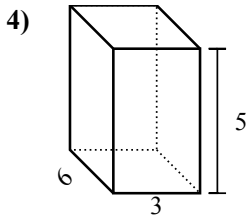
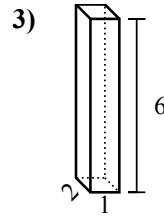
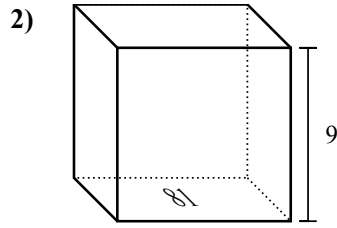
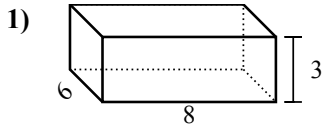




Найдите объем каждой фигуры. Помните, что $V=BH$ и $V=L \times W \times H$

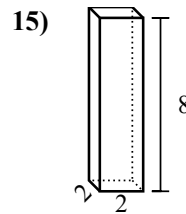
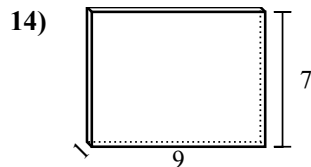
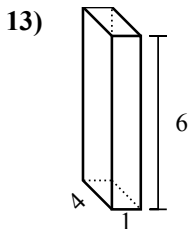
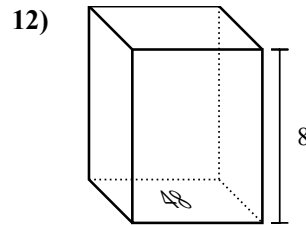
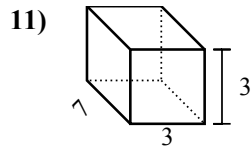
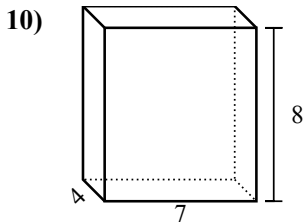
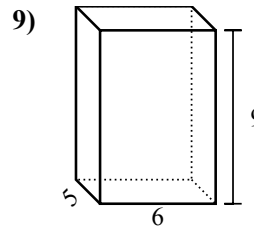
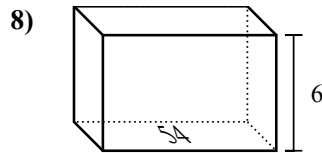
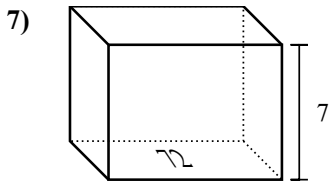
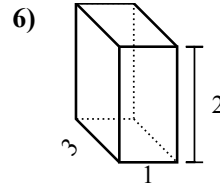
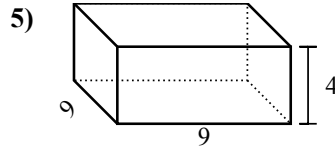
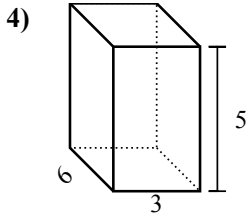
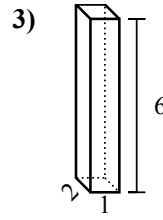
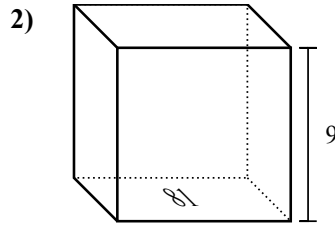
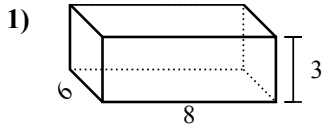
Ответы



1. _____
2. _____
3. _____
4. _____
5. _____
6. _____
7. _____
8. _____
9. _____
10. _____
11. _____
12. _____
13. _____
14. _____
15. _____



Найдите объем каждой фигуры. Помните, что $V=BH$ и $V=L \times W \times H$



ОТВЕТЫ

1. 144 cm³

2. 729 cm³

3. 12 cm³

4. 90 cm³

5. 324 cm³

6. 6 cm³

7. 504 cm³

8. 324 cm³

9. 270 cm³

10. 224 cm³

11. 63 cm³

12. 384 cm³

13. 24 cm³

14. 63 cm³

15. 32 cm³