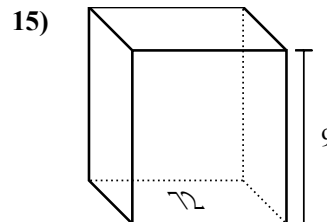
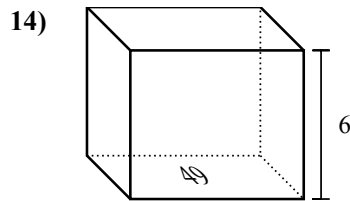
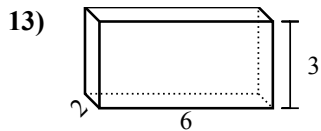
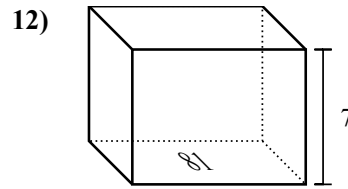
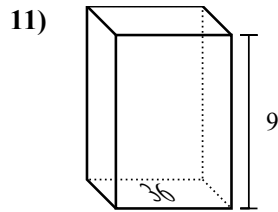
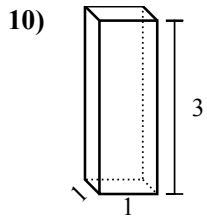
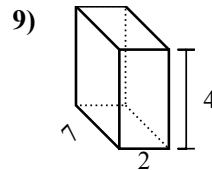
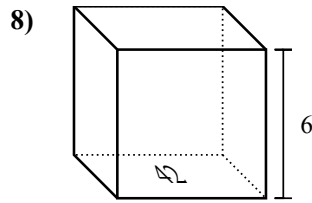
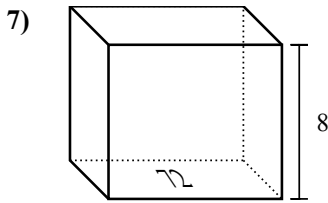
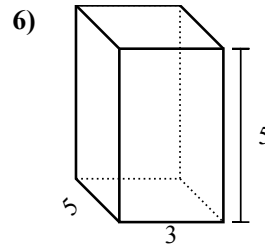
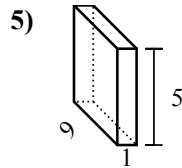
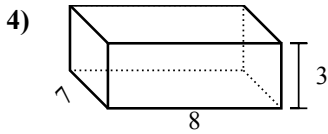
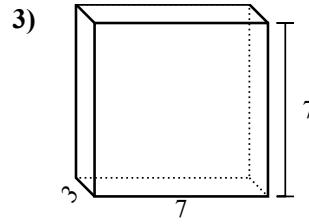
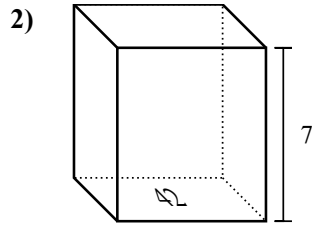
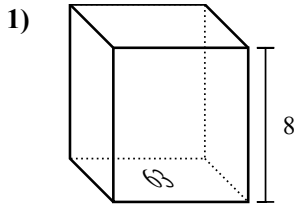


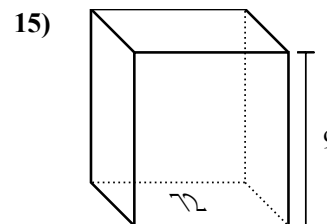
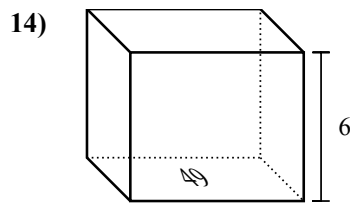
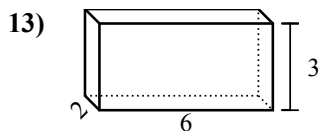
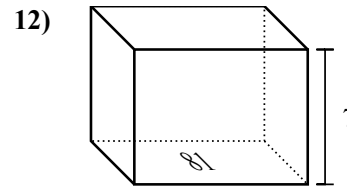
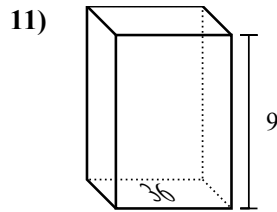
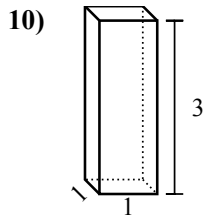
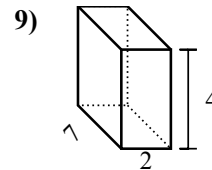
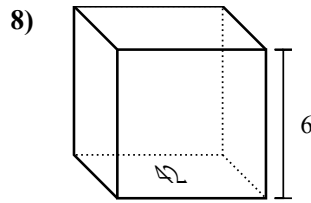
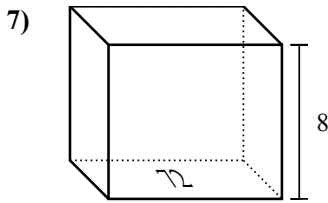
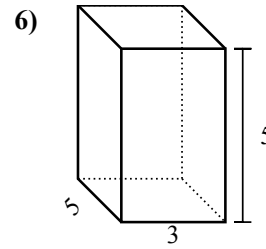
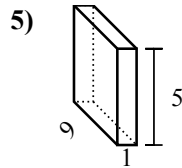
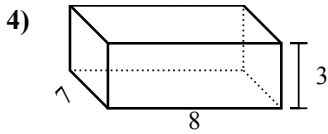
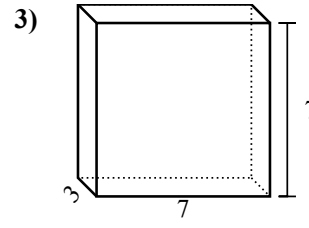
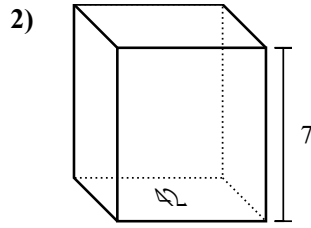
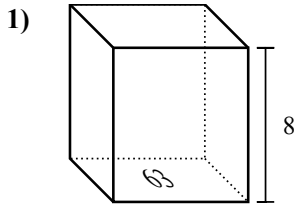


Найдите объем каждой фигуры. Помните, что  $V=BH$  и  $V=L \times W \times H$

**Отвeты**



1. \_\_\_\_\_
2. \_\_\_\_\_
3. \_\_\_\_\_
4. \_\_\_\_\_
5. \_\_\_\_\_
6. \_\_\_\_\_
7. \_\_\_\_\_
8. \_\_\_\_\_
9. \_\_\_\_\_
10. \_\_\_\_\_
11. \_\_\_\_\_
12. \_\_\_\_\_
13. \_\_\_\_\_
14. \_\_\_\_\_
15. \_\_\_\_\_

Найдите объем каждой фигуры. Помните, что  $V=BH$  и  $V=L \times W \times H$ **ОТВЕТЫ**1. **504 cm<sup>3</sup>**2. **294 cm<sup>3</sup>**3. **147 cm<sup>3</sup>**4. **168 cm<sup>3</sup>**5. **45 cm<sup>3</sup>**6. **75 cm<sup>3</sup>**7. **576 cm<sup>3</sup>**8. **252 cm<sup>3</sup>**9. **56 cm<sup>3</sup>**10. **3 cm<sup>3</sup>**11. **324 cm<sup>3</sup>**12. **567 cm<sup>3</sup>**13. **36 cm<sup>3</sup>**14. **294 cm<sup>3</sup>**15. **648 cm<sup>3</sup>**