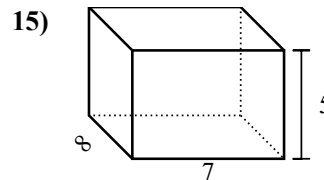
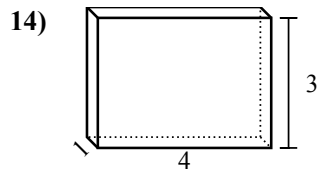
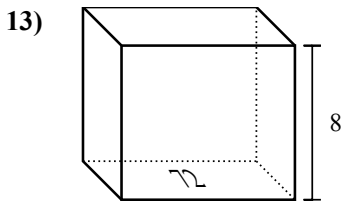
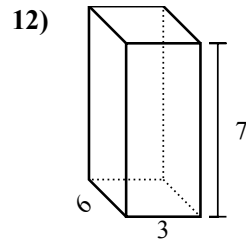
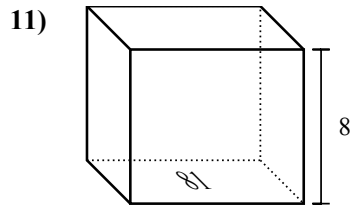
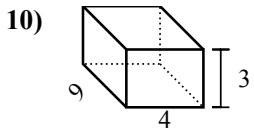
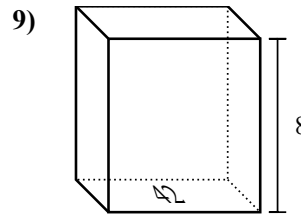
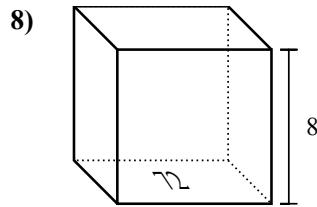
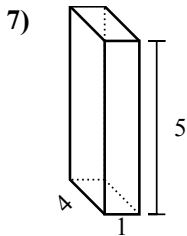
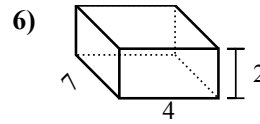
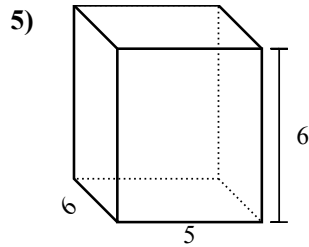
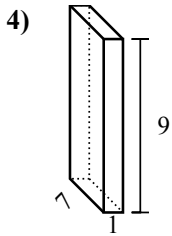
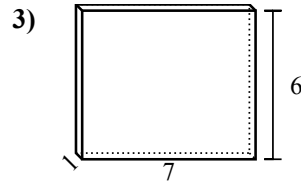
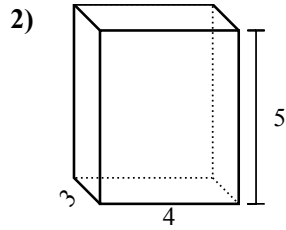
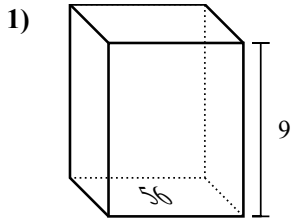


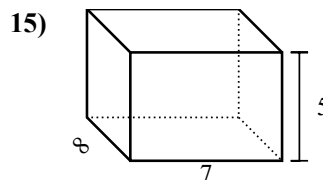
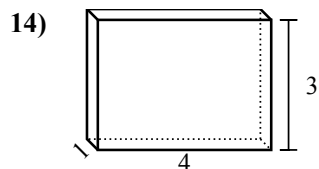
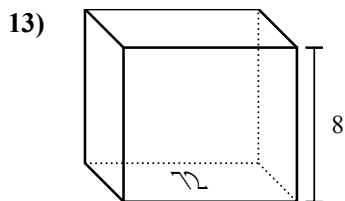
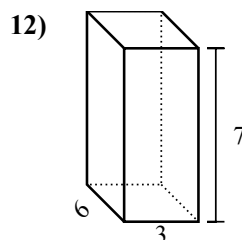
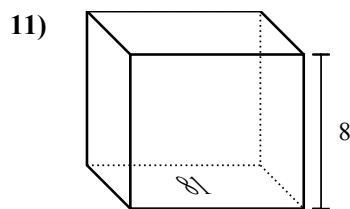
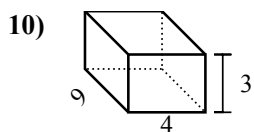
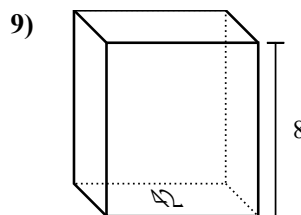
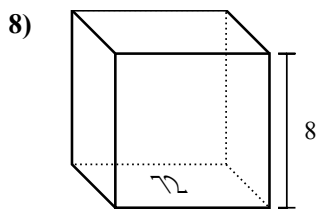
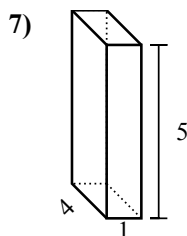
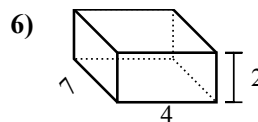
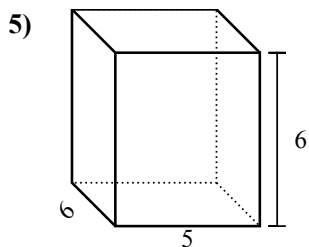
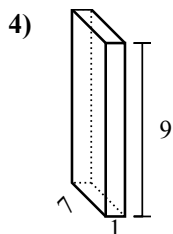
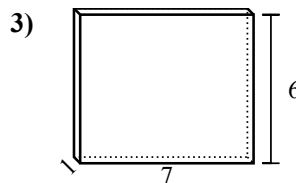
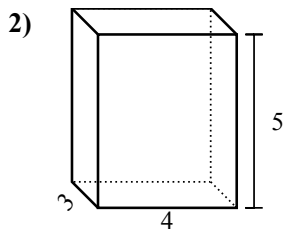
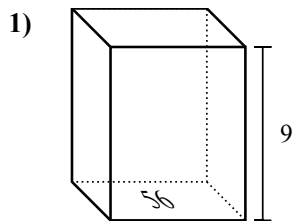


Найдите объем каждой фигуры. Помните, что $V=BH$ и $V=L \times W \times H$

Ответы



1. _____
2. _____
3. _____
4. _____
5. _____
6. _____
7. _____
8. _____
9. _____
10. _____
11. _____
12. _____
13. _____
14. _____
15. _____

Найдите объем каждой фигуры. Помните, что $V=BH$ и $V=L \times W \times H$ **ОТВЕТЫ**1. 504 cm³2. 60 cm³3. 42 cm³4. 63 cm³5. 180 cm³6. 56 cm³7. 20 cm³8. 576 cm³9. 336 cm³10. 108 cm³11. 648 cm³12. 126 cm³13. 576 cm³14. 12 cm³15. 280 cm³