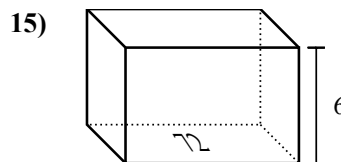
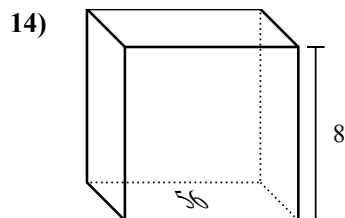
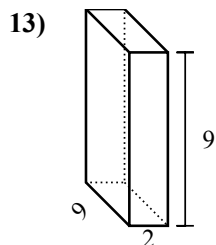
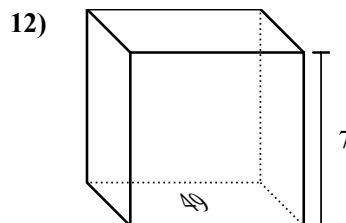
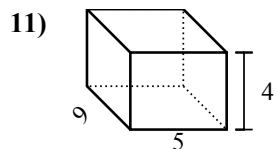
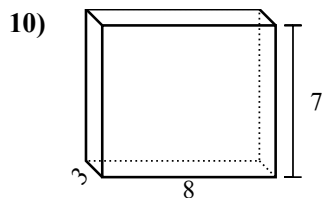
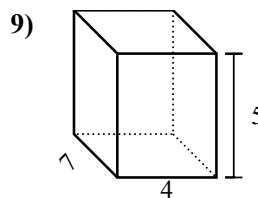
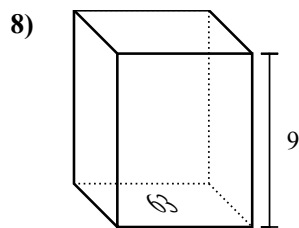
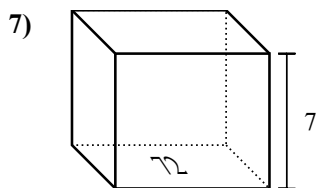
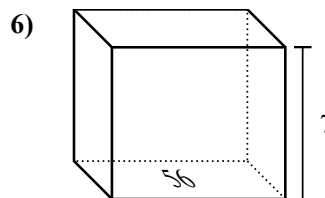
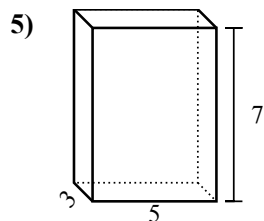
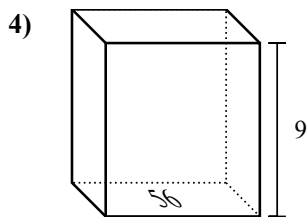
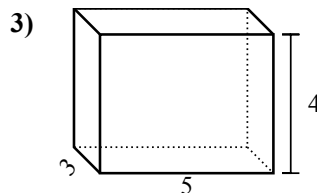
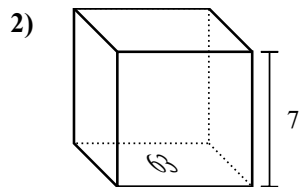
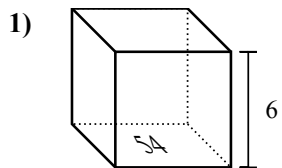




Найдите объем каждой фигуры. Помните, что  $V=BH$  и  $V=L \times W \times H$

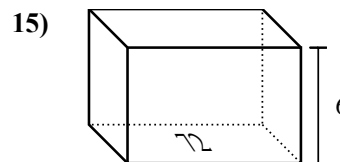
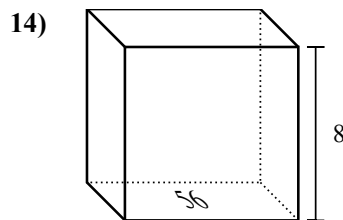
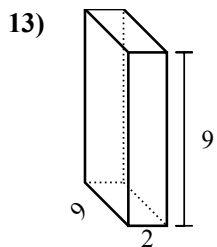
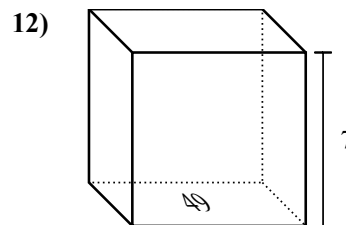
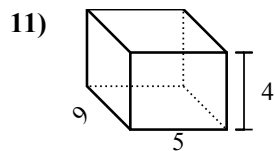
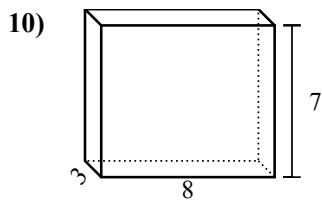
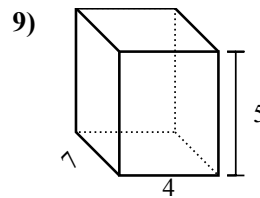
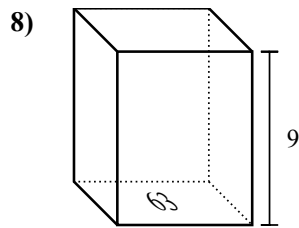
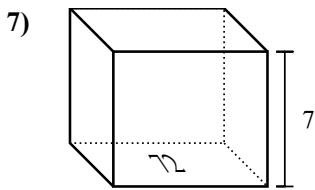
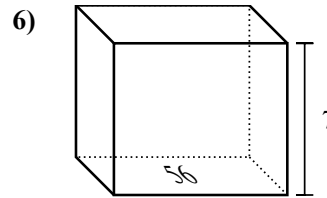
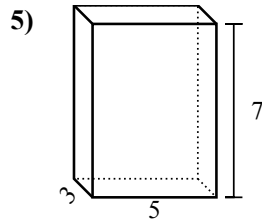
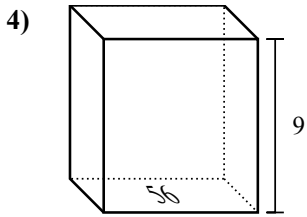
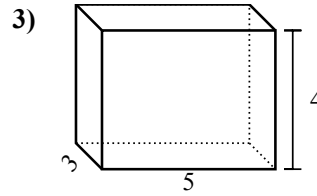
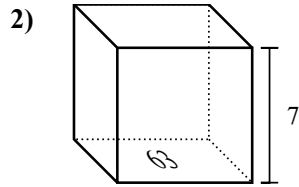
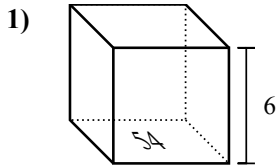


**Ответы**

1. \_\_\_\_\_
2. \_\_\_\_\_
3. \_\_\_\_\_
4. \_\_\_\_\_
5. \_\_\_\_\_
6. \_\_\_\_\_
7. \_\_\_\_\_
8. \_\_\_\_\_
9. \_\_\_\_\_
10. \_\_\_\_\_
11. \_\_\_\_\_
12. \_\_\_\_\_
13. \_\_\_\_\_
14. \_\_\_\_\_
15. \_\_\_\_\_



Найдите объем каждой фигуры. Помните, что  $V=BH$  и  $V=L \times W \times H$



**ОТВЕТЫ**

1. 324 cm<sup>3</sup>
2. 441 cm<sup>3</sup>
3. 60 cm<sup>3</sup>
4. 504 cm<sup>3</sup>
5. 105 cm<sup>3</sup>
6. 392 cm<sup>3</sup>
7. 504 cm<sup>3</sup>
8. 567 cm<sup>3</sup>
9. 140 cm<sup>3</sup>
10. 168 cm<sup>3</sup>
11. 180 cm<sup>3</sup>
12. 343 cm<sup>3</sup>
13. 162 cm<sup>3</sup>
14. 448 cm<sup>3</sup>
15. 432 cm<sup>3</sup>