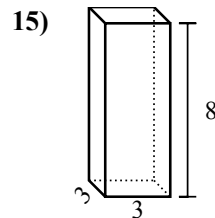
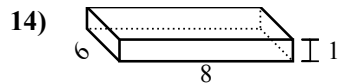
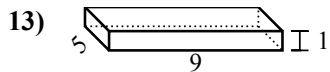
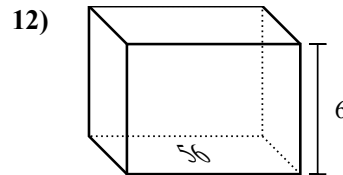
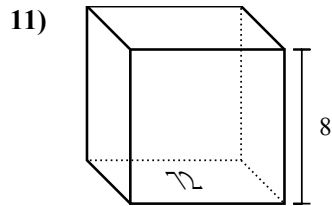
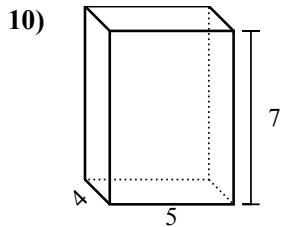
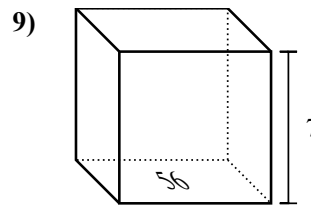
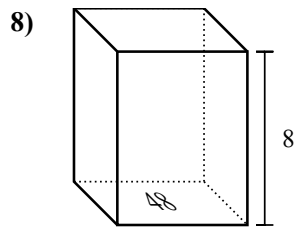
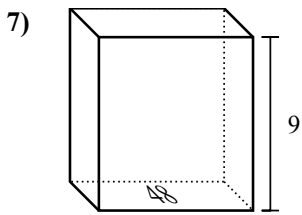
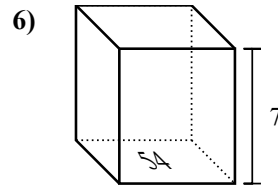
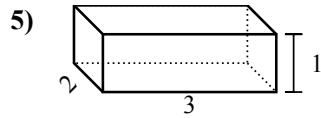
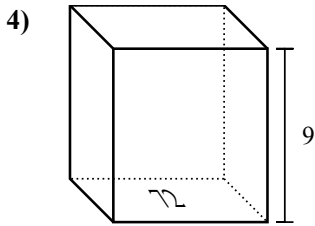
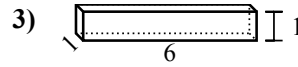
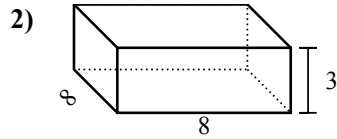
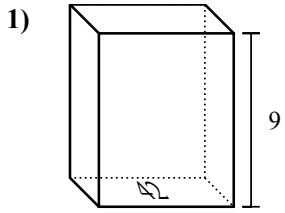




Найдите объем каждой фигуры. Помните, что $V=BH$ и $V=L \times W \times H$

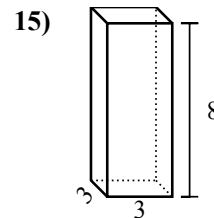
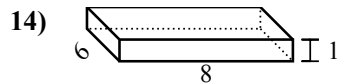
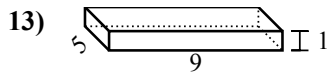
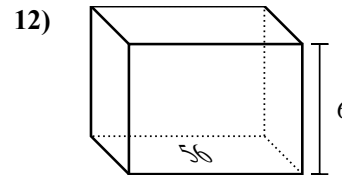
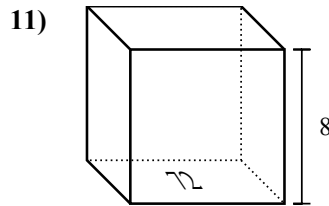
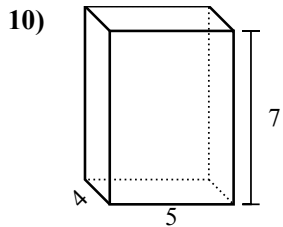
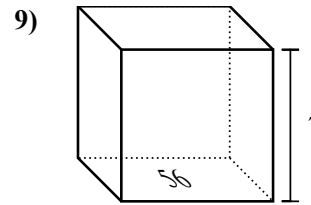
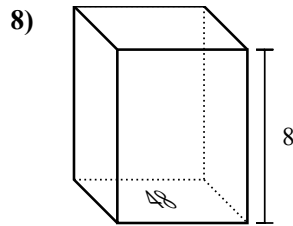
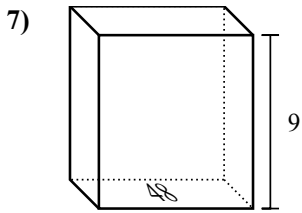
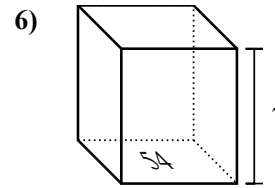
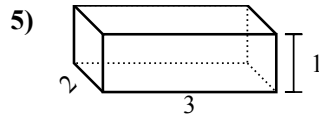
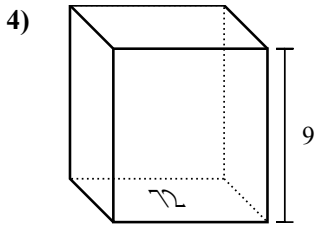
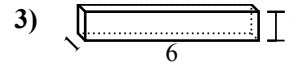
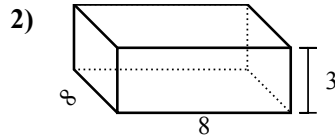
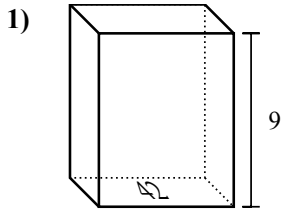
Ответы



1. _____
2. _____
3. _____
4. _____
5. _____
6. _____
7. _____
8. _____
9. _____
10. _____
11. _____
12. _____
13. _____
14. _____
15. _____



Найдите объем каждой фигуры. Помните, что $V=BH$ и $V=L \times W \times H$



ОТВЕТЫ

1. **378 cm³**

2. **192 cm³**

3. **6 cm³**

4. **648 cm³**

5. **6 cm³**

6. **378 cm³**

7. **432 cm³**

8. **384 cm³**

9. **392 cm³**

10. **140 cm³**

11. **576 cm³**

12. **336 cm³**

13. **45 cm³**

14. **48 cm³**

15. **72 cm³**