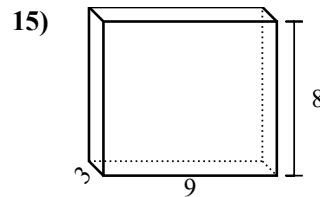
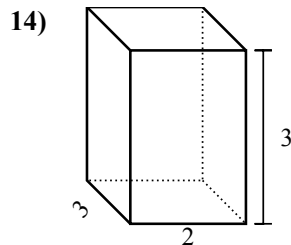
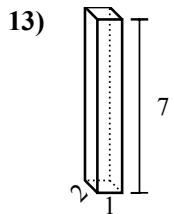
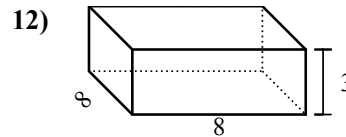
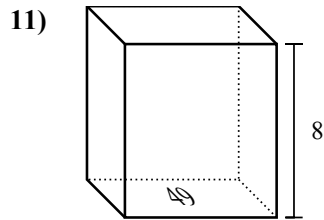
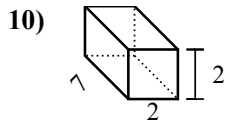
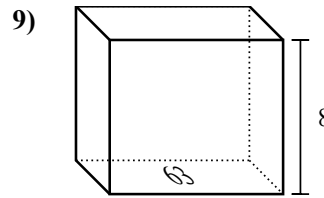
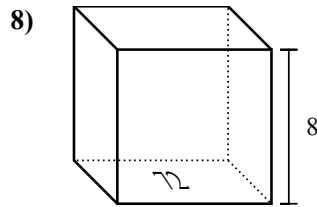
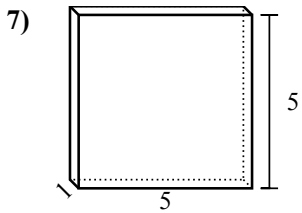
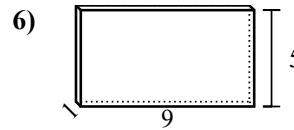
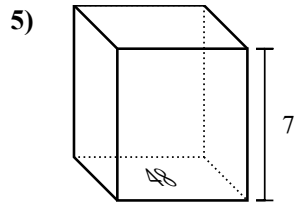
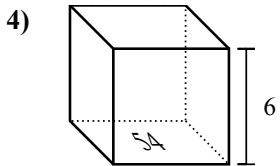
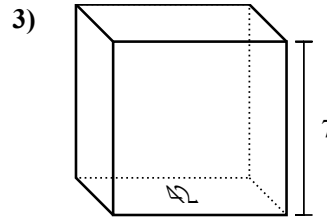
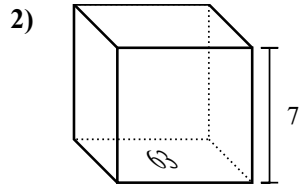
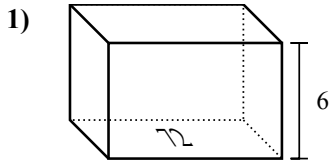


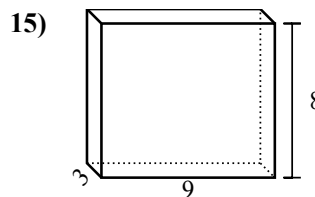
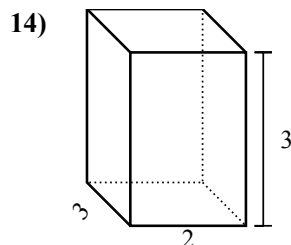
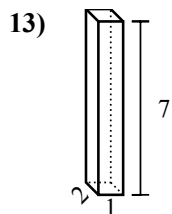
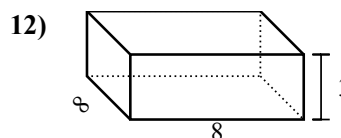
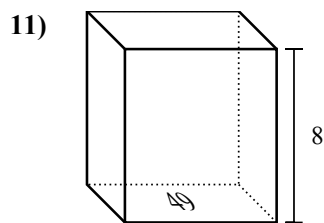
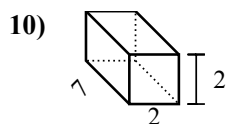
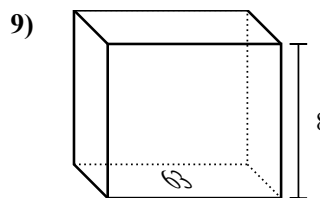
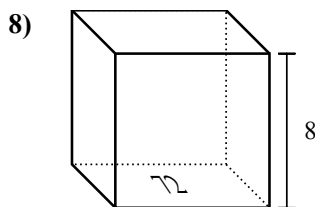
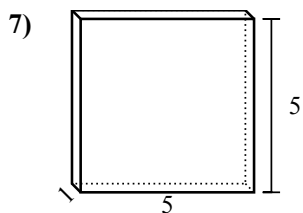
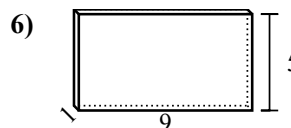
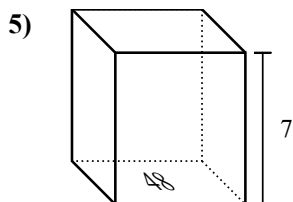
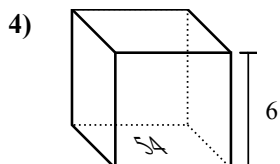
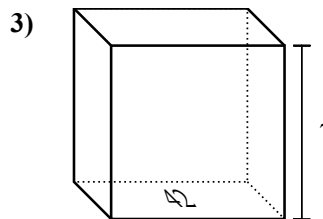
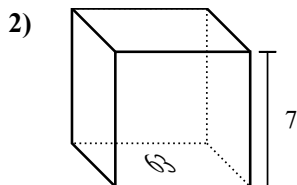
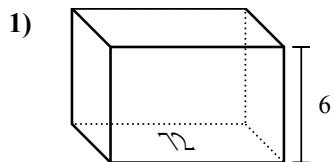


Найдите объем каждой фигуры. Помните, что  $V=BH$  и  $V=L \times W \times H$

Ответы



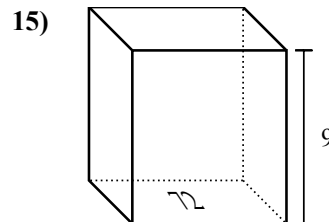
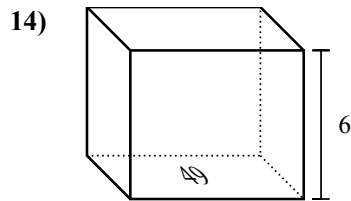
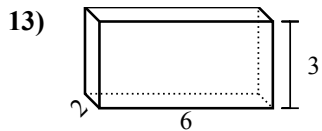
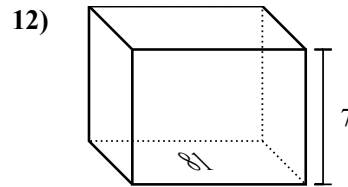
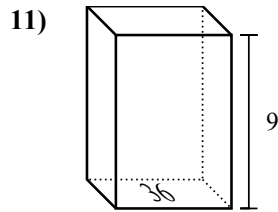
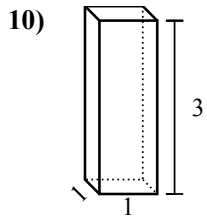
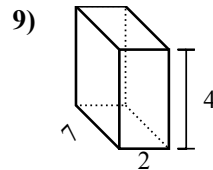
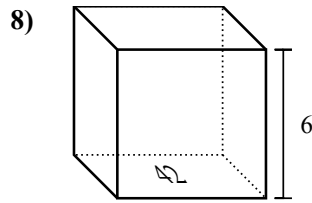
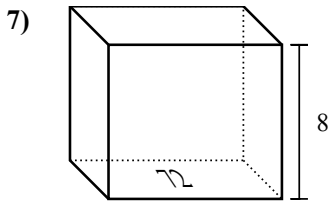
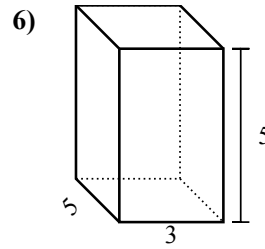
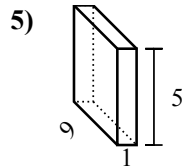
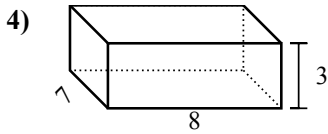
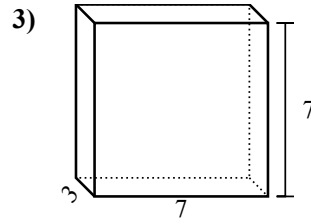
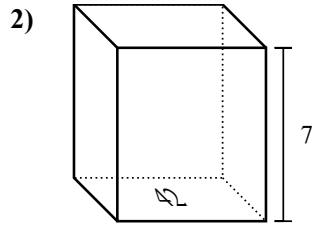
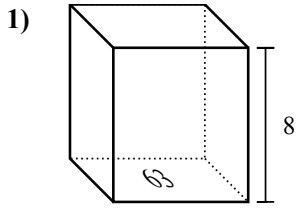
1. \_\_\_\_\_
2. \_\_\_\_\_
3. \_\_\_\_\_
4. \_\_\_\_\_
5. \_\_\_\_\_
6. \_\_\_\_\_
7. \_\_\_\_\_
8. \_\_\_\_\_
9. \_\_\_\_\_
10. \_\_\_\_\_
11. \_\_\_\_\_
12. \_\_\_\_\_
13. \_\_\_\_\_
14. \_\_\_\_\_
15. \_\_\_\_\_

Найдите объем каждой фигуры. Помните, что  $V=BH$  и  $V=L \times W \times H$ **ОТВЕТЫ**1. 432 cm<sup>3</sup>2. 441 cm<sup>3</sup>3. 294 cm<sup>3</sup>4. 324 cm<sup>3</sup>5. 336 cm<sup>3</sup>6. 45 cm<sup>3</sup>7. 25 cm<sup>3</sup>8. 576 cm<sup>3</sup>9. 504 cm<sup>3</sup>10. 28 cm<sup>3</sup>11. 392 cm<sup>3</sup>12. 192 cm<sup>3</sup>13. 14 cm<sup>3</sup>14. 18 cm<sup>3</sup>15. 216 cm<sup>3</sup>

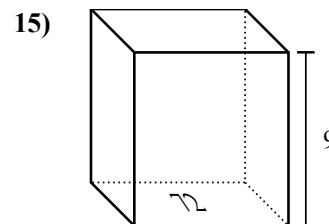
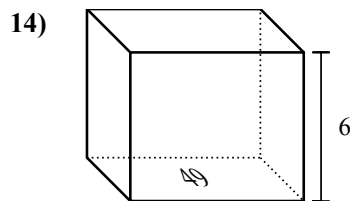
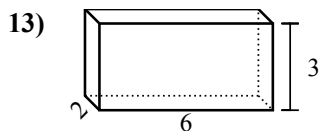
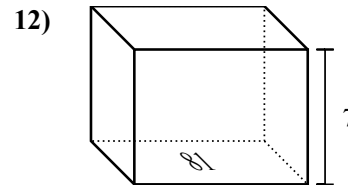
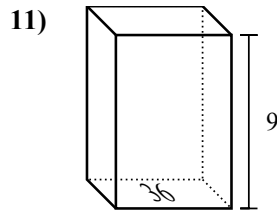
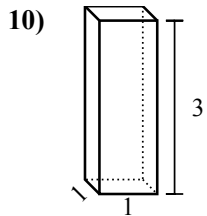
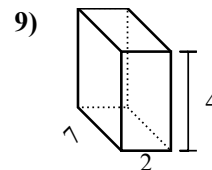
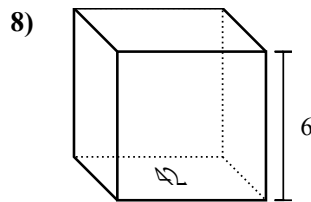
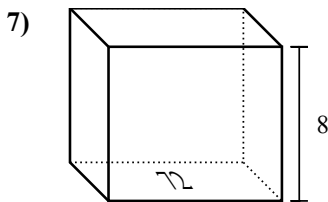
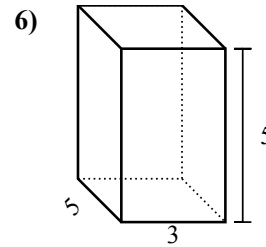
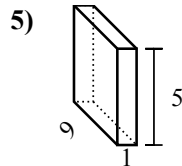
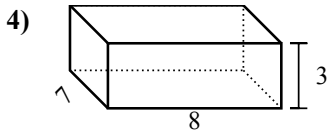
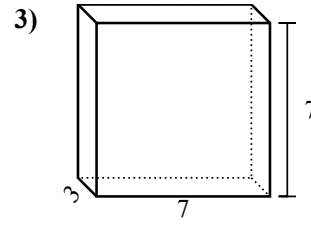
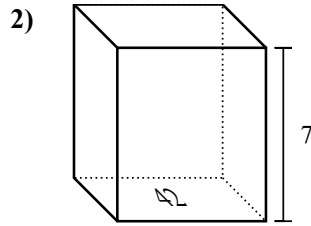
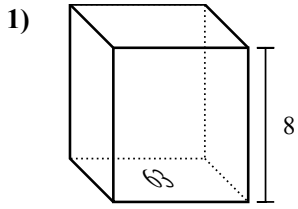


Найдите объем каждой фигуры. Помните, что  $V=BH$  и  $V=L \times W \times H$

Ответы



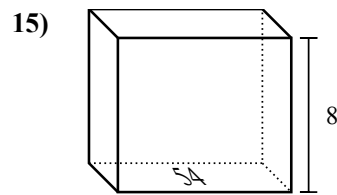
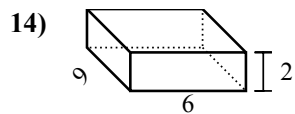
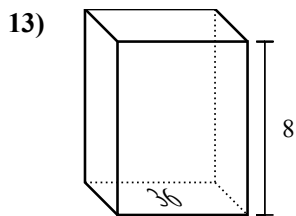
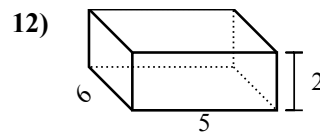
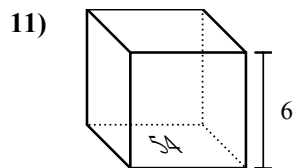
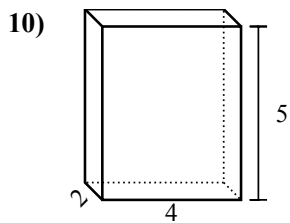
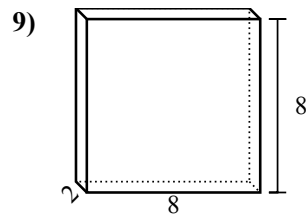
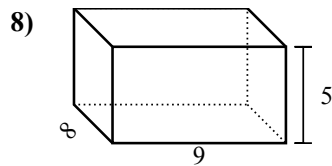
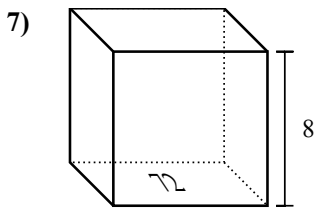
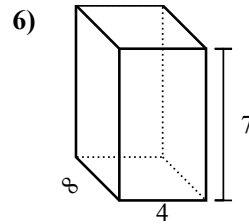
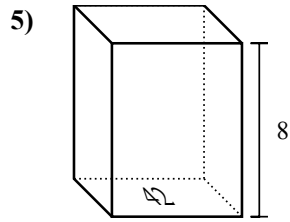
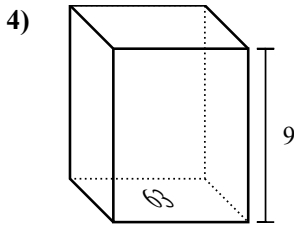
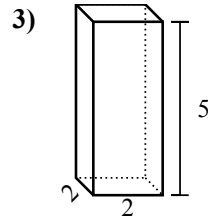
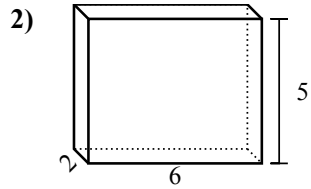
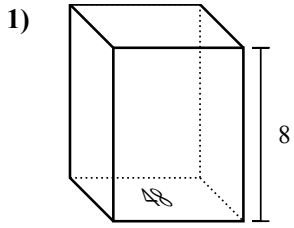
1. \_\_\_\_\_
2. \_\_\_\_\_
3. \_\_\_\_\_
4. \_\_\_\_\_
5. \_\_\_\_\_
6. \_\_\_\_\_
7. \_\_\_\_\_
8. \_\_\_\_\_
9. \_\_\_\_\_
10. \_\_\_\_\_
11. \_\_\_\_\_
12. \_\_\_\_\_
13. \_\_\_\_\_
14. \_\_\_\_\_
15. \_\_\_\_\_

Найдите объем каждой фигуры. Помните, что  $V=BH$  и  $V=L \times W \times H$ **ОТВЕТЫ**1. **504 cm<sup>3</sup>**2. **294 cm<sup>3</sup>**3. **147 cm<sup>3</sup>**4. **168 cm<sup>3</sup>**5. **45 cm<sup>3</sup>**6. **75 cm<sup>3</sup>**7. **576 cm<sup>3</sup>**8. **252 cm<sup>3</sup>**9. **56 cm<sup>3</sup>**10. **3 cm<sup>3</sup>**11. **324 cm<sup>3</sup>**12. **567 cm<sup>3</sup>**13. **36 cm<sup>3</sup>**14. **294 cm<sup>3</sup>**15. **648 cm<sup>3</sup>**

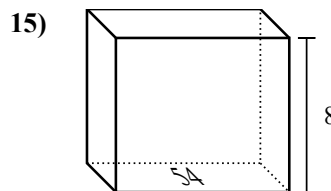
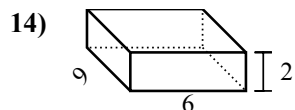
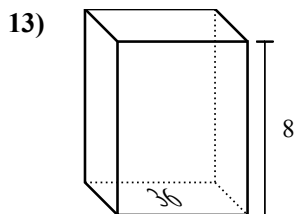
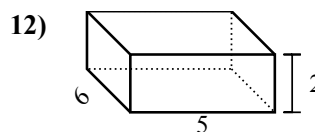
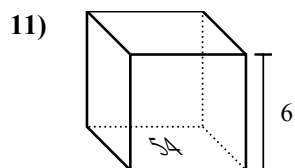
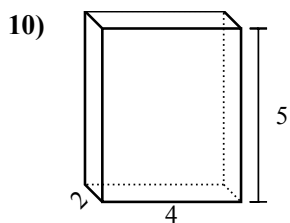
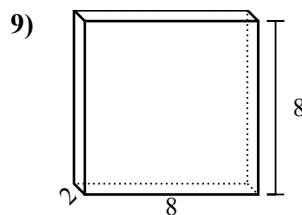
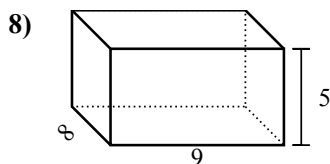
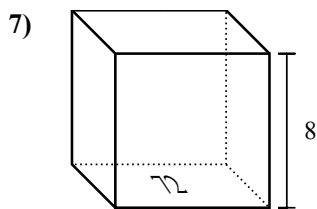
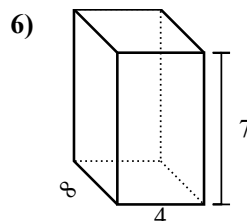
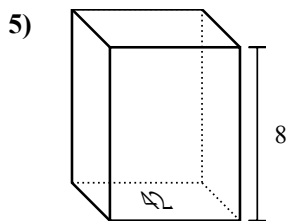
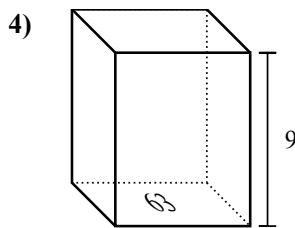
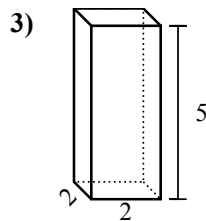
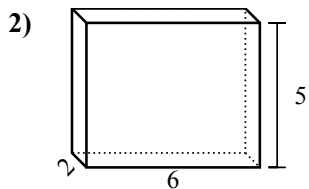
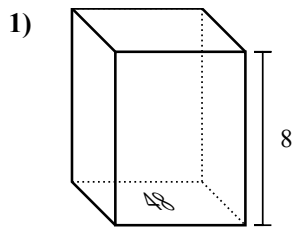


Найдите объем каждой фигуры. Помните, что  $V=BH$  и  $V=L \times W \times H$

ОТВЕТЫ



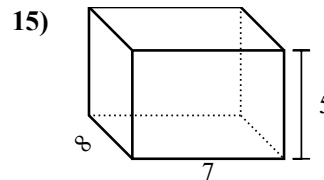
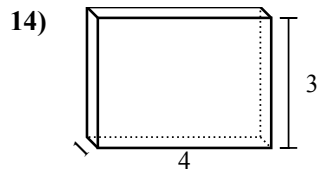
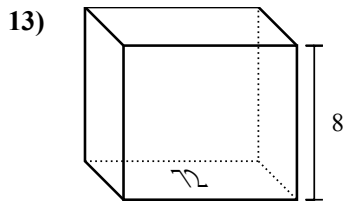
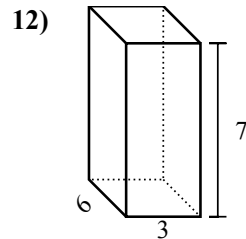
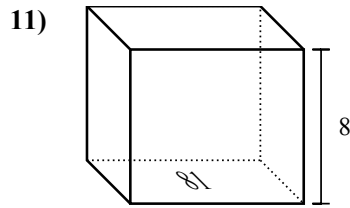
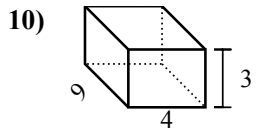
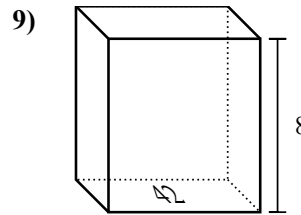
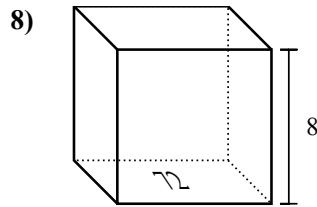
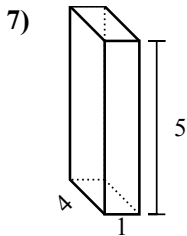
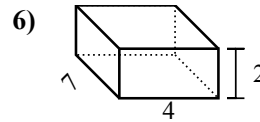
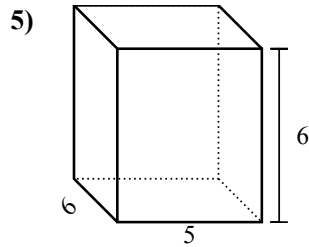
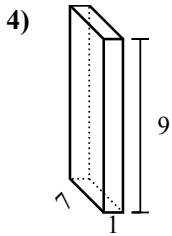
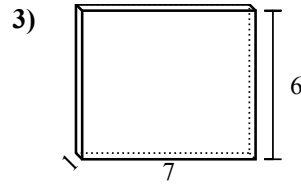
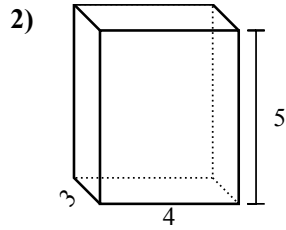
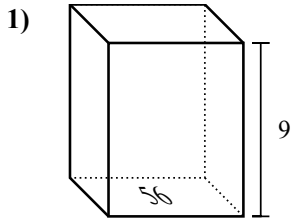
1. \_\_\_\_\_
2. \_\_\_\_\_
3. \_\_\_\_\_
4. \_\_\_\_\_
5. \_\_\_\_\_
6. \_\_\_\_\_
7. \_\_\_\_\_
8. \_\_\_\_\_
9. \_\_\_\_\_
10. \_\_\_\_\_
11. \_\_\_\_\_
12. \_\_\_\_\_
13. \_\_\_\_\_
14. \_\_\_\_\_
15. \_\_\_\_\_

Найдите объем каждой фигуры. Помните, что  $V=BH$  и  $V=L \times W \times H$ **ОТВЕТЫ**1. 384 cm<sup>3</sup>2. 60 cm<sup>3</sup>3. 20 cm<sup>3</sup>4. 567 cm<sup>3</sup>5. 336 cm<sup>3</sup>6. 224 cm<sup>3</sup>7. 576 cm<sup>3</sup>8. 360 cm<sup>3</sup>9. 128 cm<sup>3</sup>10. 40 cm<sup>3</sup>11. 324 cm<sup>3</sup>12. 60 cm<sup>3</sup>13. 288 cm<sup>3</sup>14. 108 cm<sup>3</sup>15. 432 cm<sup>3</sup>

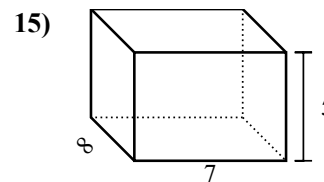
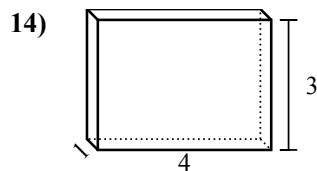
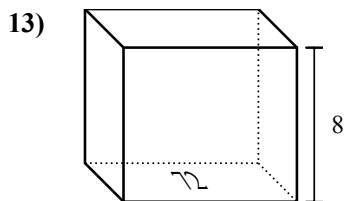
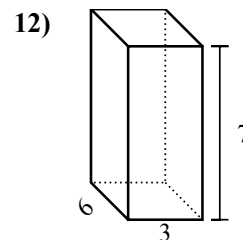
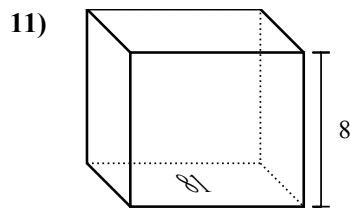
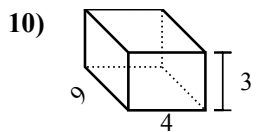
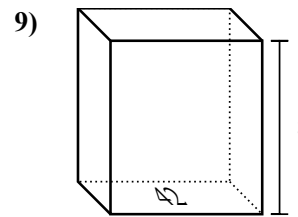
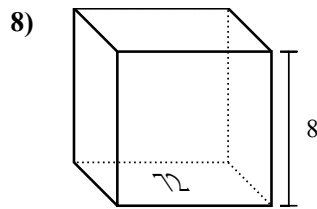
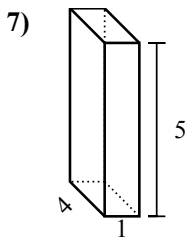
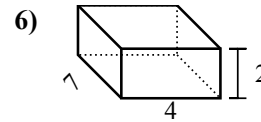
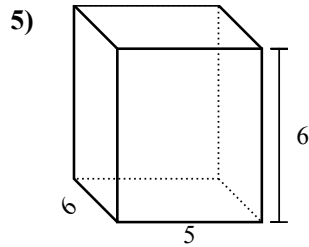
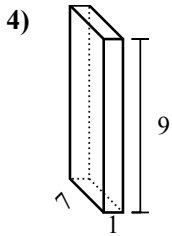
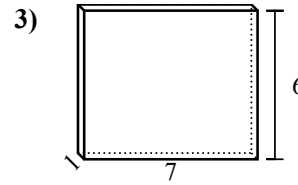
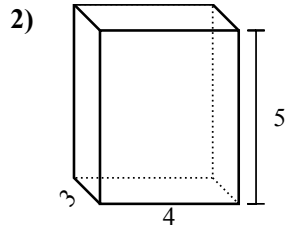
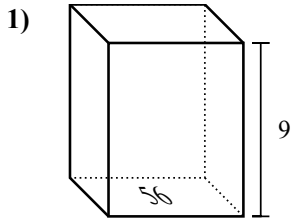


Найдите объем каждой фигуры. Помните, что  $V=BH$  и  $V=L \times W \times H$

**Ответы**



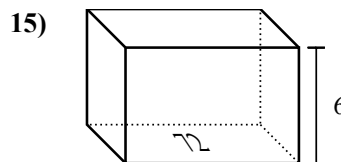
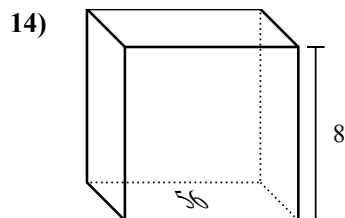
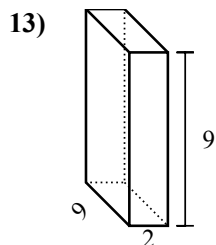
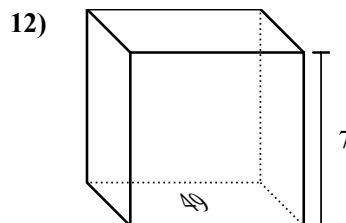
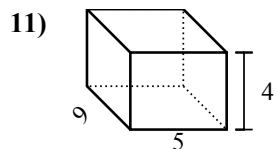
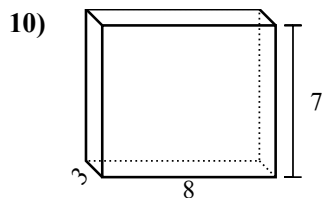
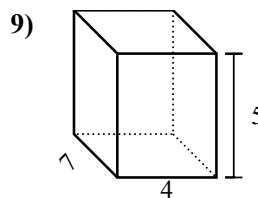
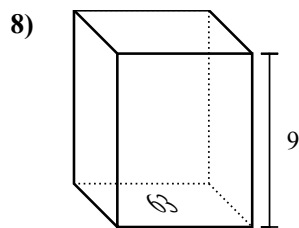
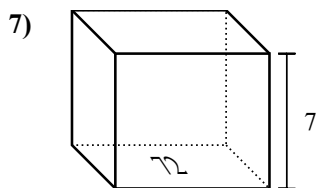
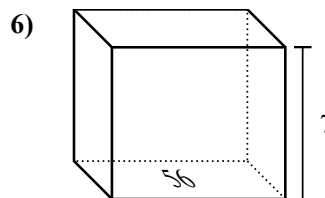
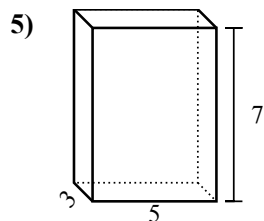
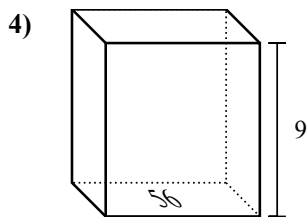
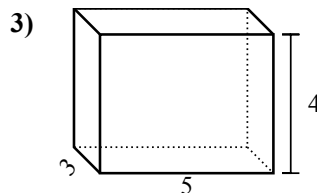
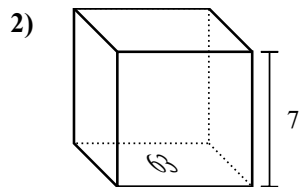
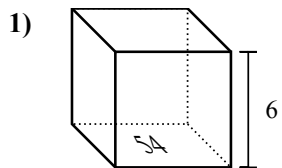
1. \_\_\_\_\_
2. \_\_\_\_\_
3. \_\_\_\_\_
4. \_\_\_\_\_
5. \_\_\_\_\_
6. \_\_\_\_\_
7. \_\_\_\_\_
8. \_\_\_\_\_
9. \_\_\_\_\_
10. \_\_\_\_\_
11. \_\_\_\_\_
12. \_\_\_\_\_
13. \_\_\_\_\_
14. \_\_\_\_\_
15. \_\_\_\_\_

Найдите объем каждой фигуры. Помните, что  $V=BH$  и  $V=L \times W \times H$ **ОТВЕТЫ**1. **504 cm<sup>3</sup>**2. **60 cm<sup>3</sup>**3. **42 cm<sup>3</sup>**4. **63 cm<sup>3</sup>**5. **180 cm<sup>3</sup>**6. **56 cm<sup>3</sup>**7. **20 cm<sup>3</sup>**8. **576 cm<sup>3</sup>**9. **336 cm<sup>3</sup>**10. **108 cm<sup>3</sup>**11. **648 cm<sup>3</sup>**12. **126 cm<sup>3</sup>**13. **576 cm<sup>3</sup>**14. **12 cm<sup>3</sup>**15. **280 cm<sup>3</sup>**





Найдите объем каждой фигуры. Помните, что  $V=BH$  и  $V=L \times W \times H$

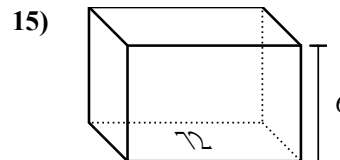
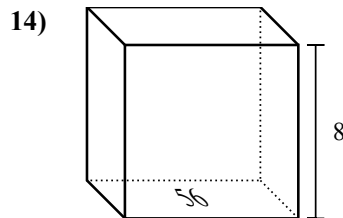
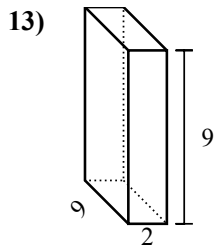
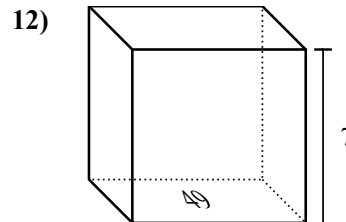
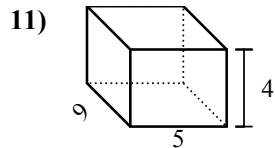
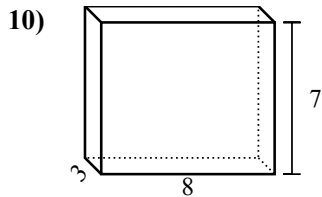
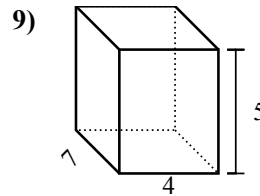
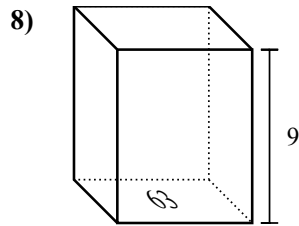
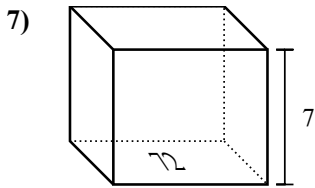
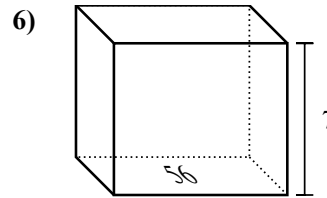
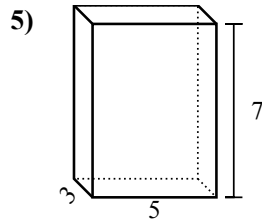
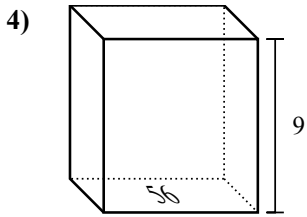
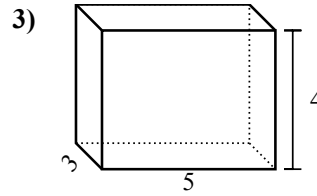
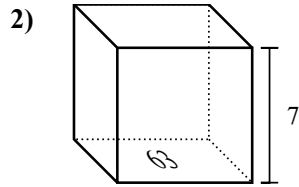
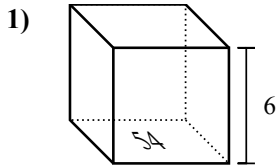


Ответы

1. \_\_\_\_\_
2. \_\_\_\_\_
3. \_\_\_\_\_
4. \_\_\_\_\_
5. \_\_\_\_\_
6. \_\_\_\_\_
7. \_\_\_\_\_
8. \_\_\_\_\_
9. \_\_\_\_\_
10. \_\_\_\_\_
11. \_\_\_\_\_
12. \_\_\_\_\_
13. \_\_\_\_\_
14. \_\_\_\_\_
15. \_\_\_\_\_



Найдите объем каждой фигуры. Помните, что  $V=BH$  и  $V=L \times W \times H$



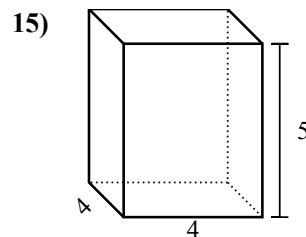
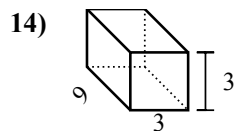
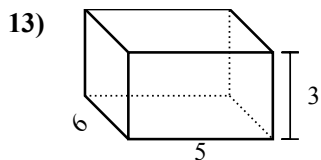
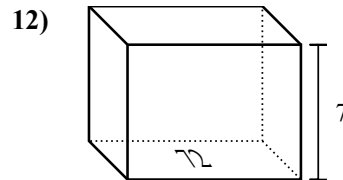
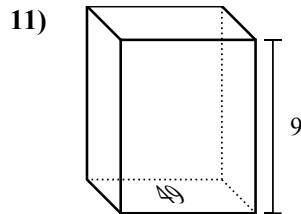
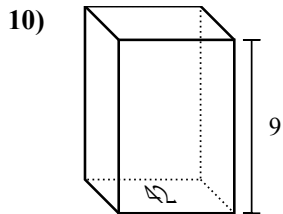
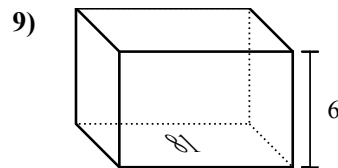
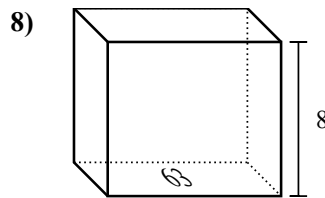
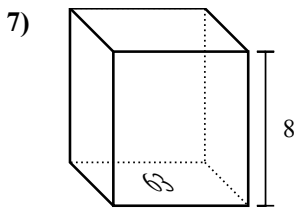
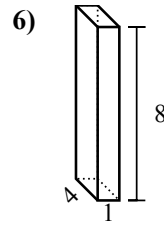
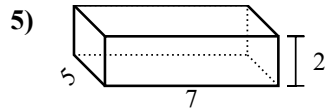
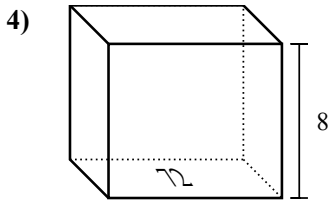
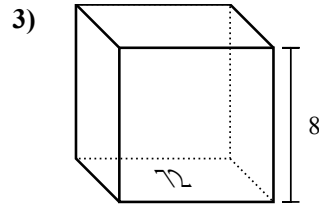
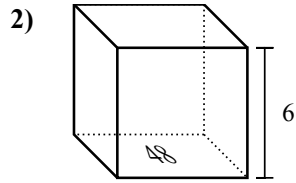
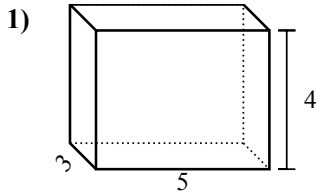
**ОТВЕТЫ**

1. 324 cm<sup>3</sup>
2. 441 cm<sup>3</sup>
3. 60 cm<sup>3</sup>
4. 504 cm<sup>3</sup>
5. 105 cm<sup>3</sup>
6. 392 cm<sup>3</sup>
7. 504 cm<sup>3</sup>
8. 567 cm<sup>3</sup>
9. 140 cm<sup>3</sup>
10. 168 cm<sup>3</sup>
11. 180 cm<sup>3</sup>
12. 343 cm<sup>3</sup>
13. 162 cm<sup>3</sup>
14. 448 cm<sup>3</sup>
15. 432 cm<sup>3</sup>



Найдите объем каждой фигуры. Помните, что  $V=BH$  и  $V=L \times W \times H$

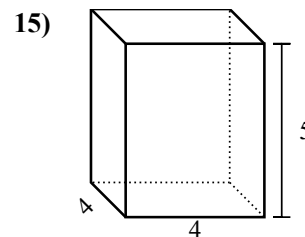
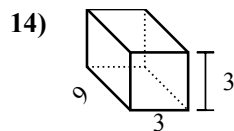
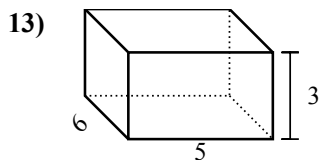
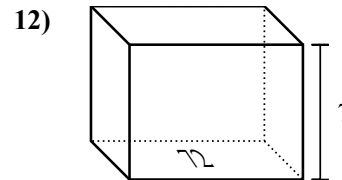
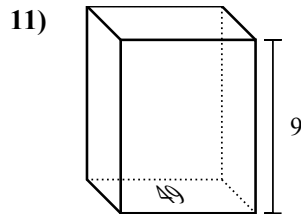
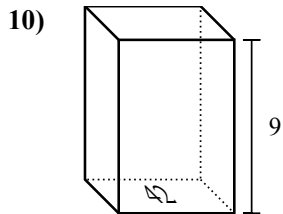
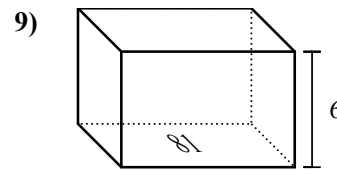
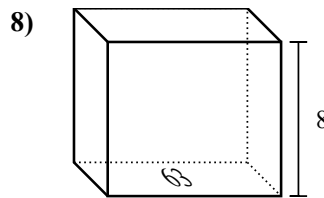
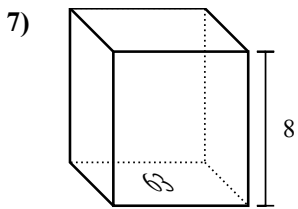
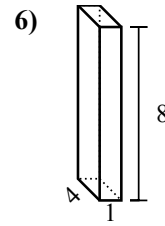
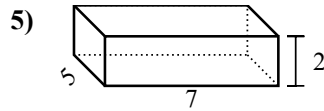
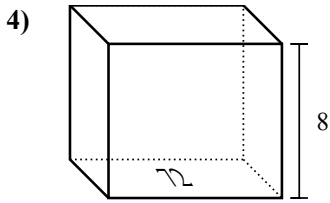
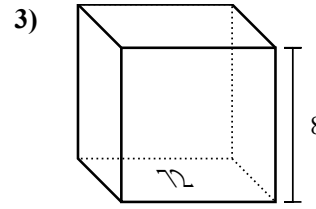
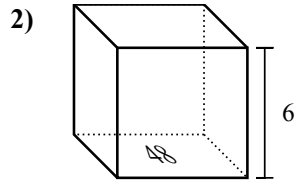
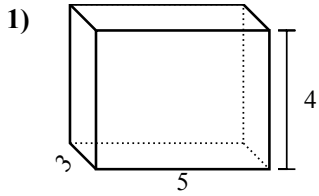
Ответы



1. \_\_\_\_\_
2. \_\_\_\_\_
3. \_\_\_\_\_
4. \_\_\_\_\_
5. \_\_\_\_\_
6. \_\_\_\_\_
7. \_\_\_\_\_
8. \_\_\_\_\_
9. \_\_\_\_\_
10. \_\_\_\_\_
11. \_\_\_\_\_
12. \_\_\_\_\_
13. \_\_\_\_\_
14. \_\_\_\_\_
15. \_\_\_\_\_



Найдите объем каждой фигуры. Помните, что  $V=BH$  и  $V=L \times W \times H$

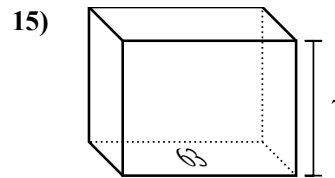
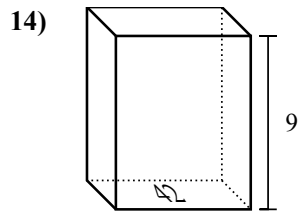
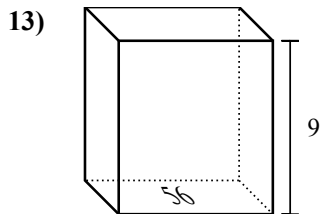
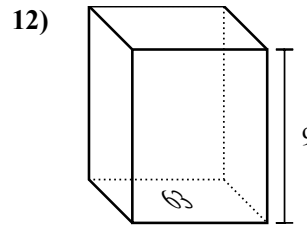
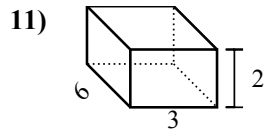
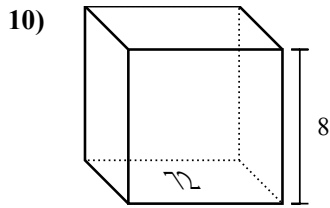
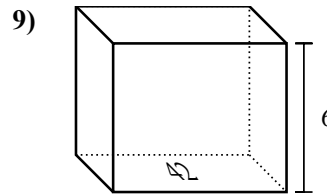
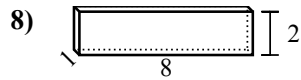
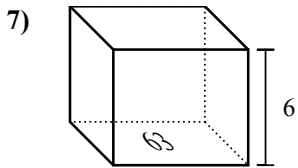
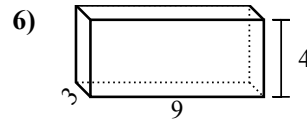
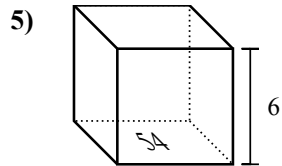
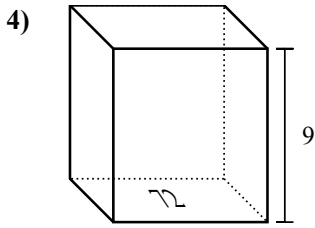
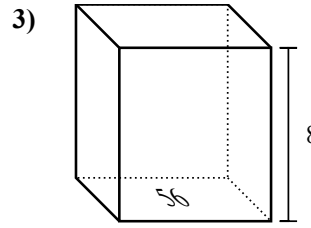
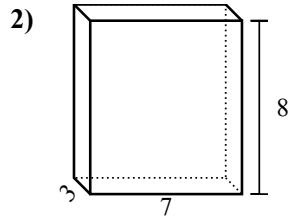
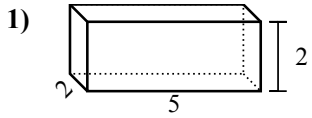


**ОТВЕТЫ**

1. 60 cm<sup>3</sup>
2. 288 cm<sup>3</sup>
3. 576 cm<sup>3</sup>
4. 576 cm<sup>3</sup>
5. 70 cm<sup>3</sup>
6. 32 cm<sup>3</sup>
7. 504 cm<sup>3</sup>
8. 504 cm<sup>3</sup>
9. 486 cm<sup>3</sup>
10. 378 cm<sup>3</sup>
11. 441 cm<sup>3</sup>
12. 504 cm<sup>3</sup>
13. 90 cm<sup>3</sup>
14. 81 cm<sup>3</sup>
15. 80 cm<sup>3</sup>

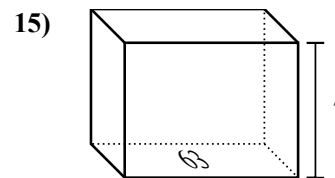
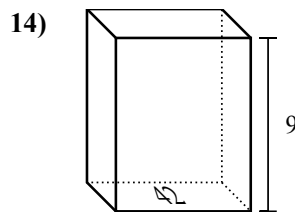
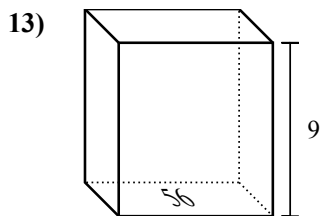
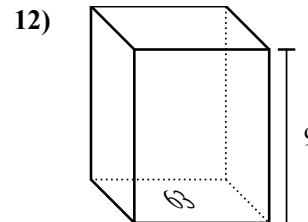
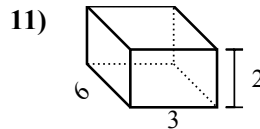
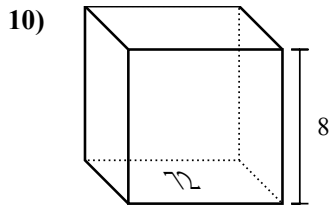
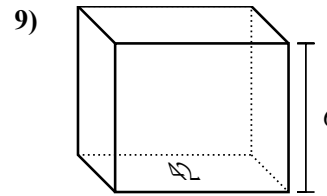
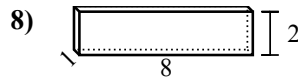
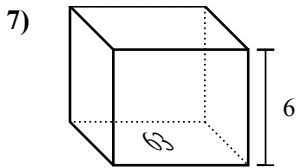
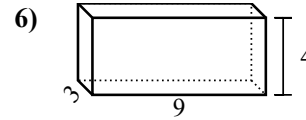
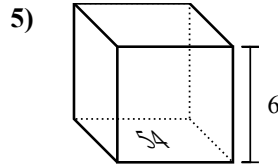
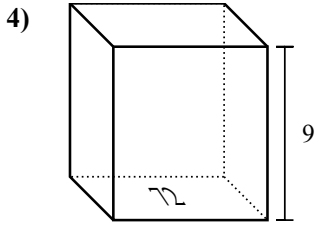
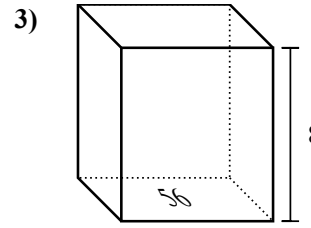
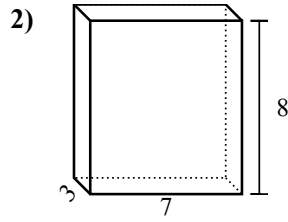
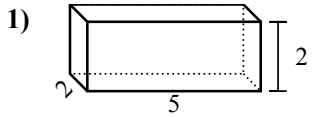


Найдите объем каждой фигуры. Помните, что  $V=BH$  и  $V=L \times W \times H$



**ОТВЕТЫ**

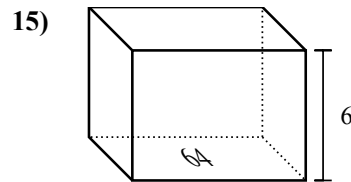
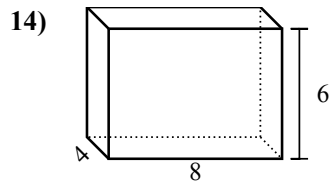
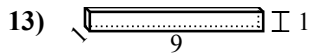
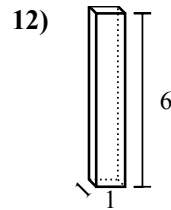
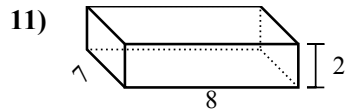
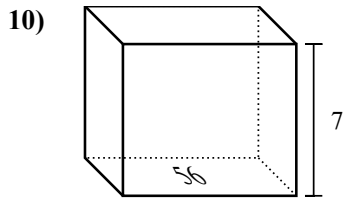
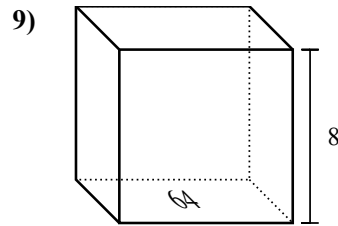
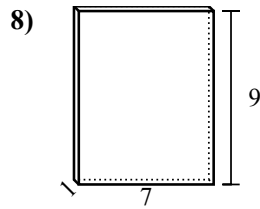
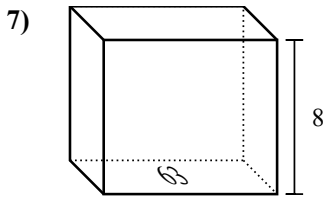
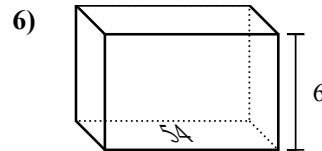
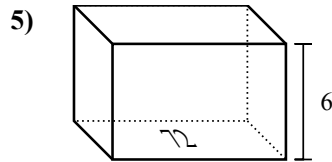
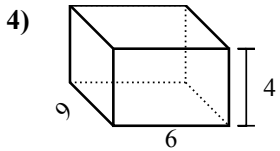
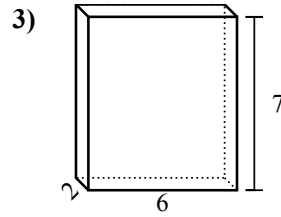
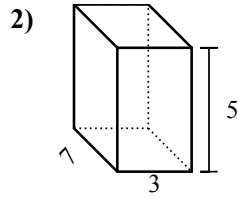
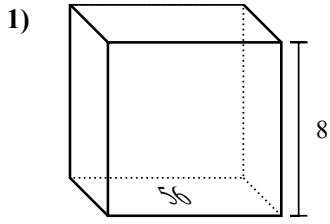
1. \_\_\_\_\_
2. \_\_\_\_\_
3. \_\_\_\_\_
4. \_\_\_\_\_
5. \_\_\_\_\_
6. \_\_\_\_\_
7. \_\_\_\_\_
8. \_\_\_\_\_
9. \_\_\_\_\_
10. \_\_\_\_\_
11. \_\_\_\_\_
12. \_\_\_\_\_
13. \_\_\_\_\_
14. \_\_\_\_\_
15. \_\_\_\_\_

Найдите объем каждой фигуры. Помните, что  $V=BH$  и  $V=L \times W \times H$ **ОТВЕТЫ**1. 20 cm<sup>3</sup>2. 168 cm<sup>3</sup>3. 448 cm<sup>3</sup>4. 648 cm<sup>3</sup>5. 324 cm<sup>3</sup>6. 108 cm<sup>3</sup>7. 378 cm<sup>3</sup>8. 16 cm<sup>3</sup>9. 252 cm<sup>3</sup>10. 576 cm<sup>3</sup>11. 36 cm<sup>3</sup>12. 567 cm<sup>3</sup>13. 504 cm<sup>3</sup>14. 378 cm<sup>3</sup>15. 441 cm<sup>3</sup>



Найдите объем каждой фигуры. Помните, что  $V=BH$  и  $V=L \times W \times H$

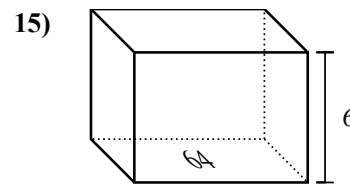
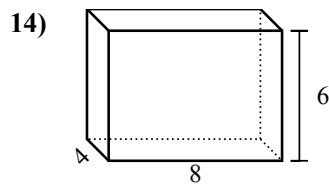
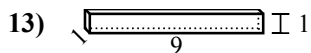
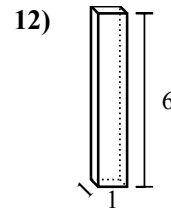
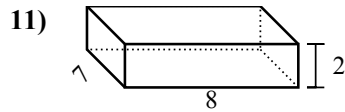
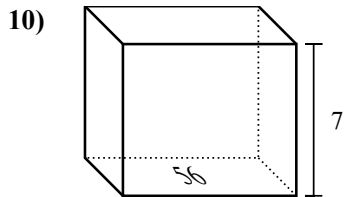
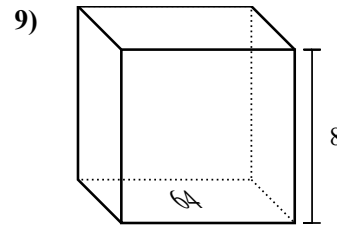
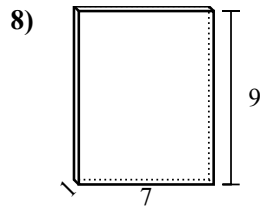
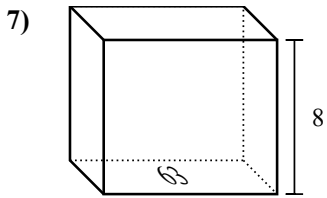
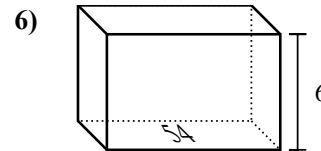
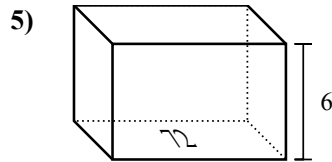
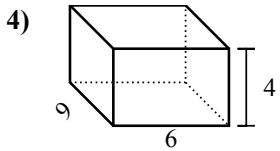
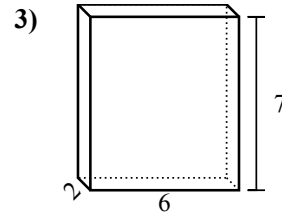
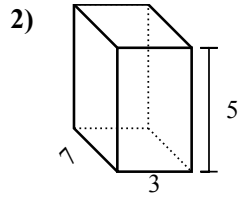
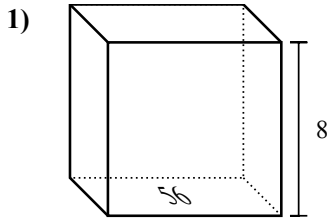
ОТВЕТЫ



1. \_\_\_\_\_
2. \_\_\_\_\_
3. \_\_\_\_\_
4. \_\_\_\_\_
5. \_\_\_\_\_
6. \_\_\_\_\_
7. \_\_\_\_\_
8. \_\_\_\_\_
9. \_\_\_\_\_
10. \_\_\_\_\_
11. \_\_\_\_\_
12. \_\_\_\_\_
13. \_\_\_\_\_
14. \_\_\_\_\_
15. \_\_\_\_\_



Найдите объем каждой фигуры. Помните, что  $V=BH$  и  $V=L \times W \times H$



**ОТВЕТЫ**

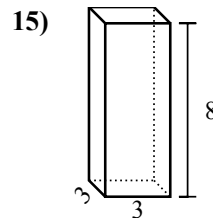
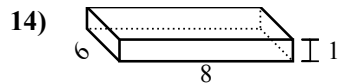
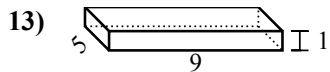
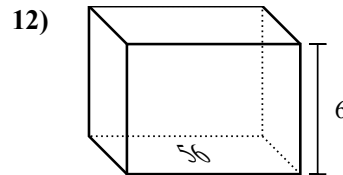
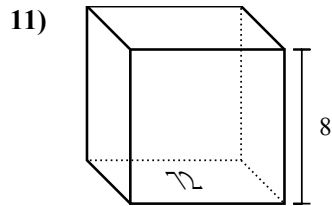
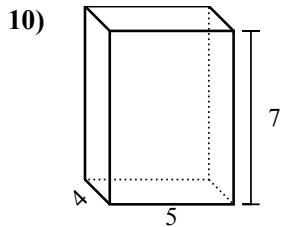
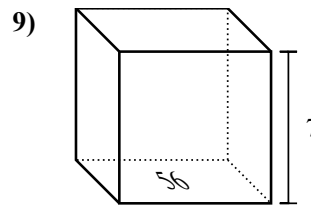
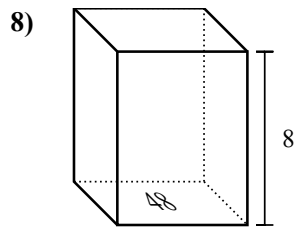
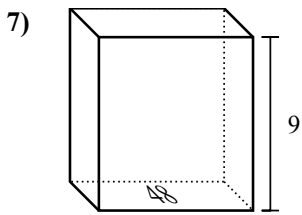
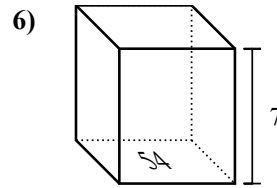
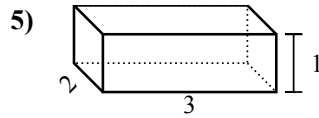
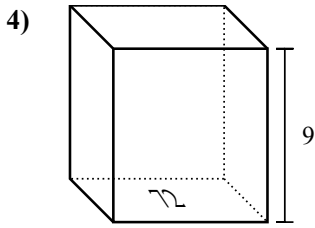
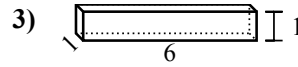
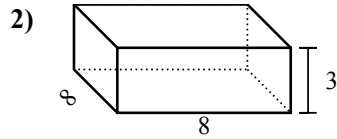
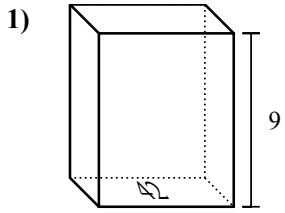
1. 448 cm<sup>3</sup>
2. 105 cm<sup>3</sup>
3. 84 cm<sup>3</sup>
4. 216 cm<sup>3</sup>
5. 432 cm<sup>3</sup>
6. 324 cm<sup>3</sup>
7. 504 cm<sup>3</sup>
8. 63 cm<sup>3</sup>
9. 512 cm<sup>3</sup>
10. 392 cm<sup>3</sup>
11. 112 cm<sup>3</sup>
12. 6 cm<sup>3</sup>
13. 9 cm<sup>3</sup>
14. 192 cm<sup>3</sup>
15. 384 cm<sup>3</sup>





Найдите объем каждой фигуры. Помните, что  $V=BH$  и  $V=L \times W \times H$

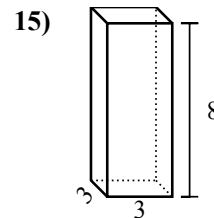
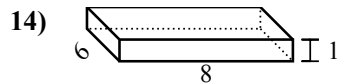
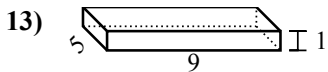
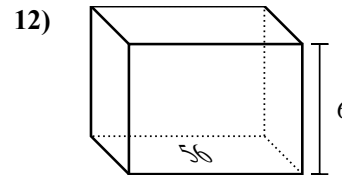
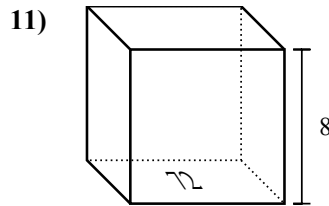
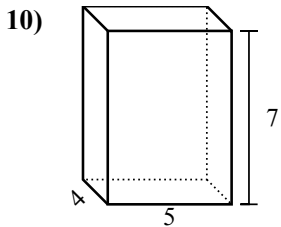
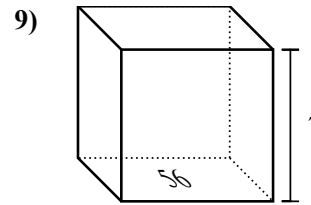
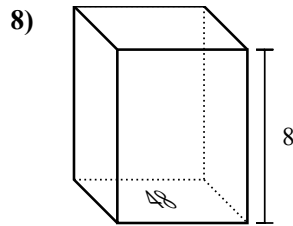
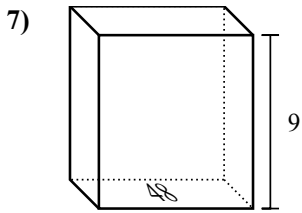
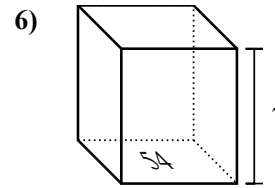
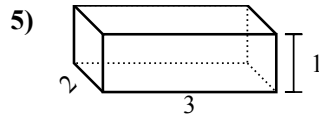
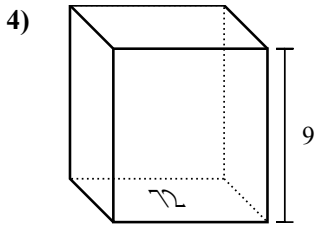
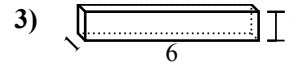
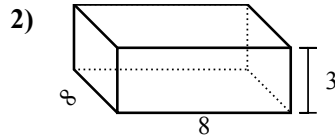
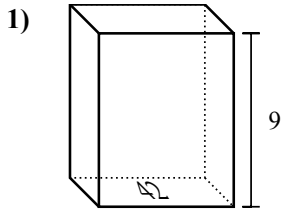
**Ответы**



1. \_\_\_\_\_
2. \_\_\_\_\_
3. \_\_\_\_\_
4. \_\_\_\_\_
5. \_\_\_\_\_
6. \_\_\_\_\_
7. \_\_\_\_\_
8. \_\_\_\_\_
9. \_\_\_\_\_
10. \_\_\_\_\_
11. \_\_\_\_\_
12. \_\_\_\_\_
13. \_\_\_\_\_
14. \_\_\_\_\_
15. \_\_\_\_\_



Найдите объем каждой фигуры. Помните, что  $V=BH$  и  $V=L \times W \times H$



**ОТВЕТЫ**

1. **378 cm<sup>3</sup>**

2. **192 cm<sup>3</sup>**

3. **6 cm<sup>3</sup>**

4. **648 cm<sup>3</sup>**

5. **6 cm<sup>3</sup>**

6. **378 cm<sup>3</sup>**

7. **432 cm<sup>3</sup>**

8. **384 cm<sup>3</sup>**

9. **392 cm<sup>3</sup>**

10. **140 cm<sup>3</sup>**

11. **576 cm<sup>3</sup>**

12. **336 cm<sup>3</sup>**

13. **45 cm<sup>3</sup>**

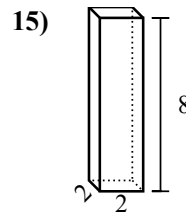
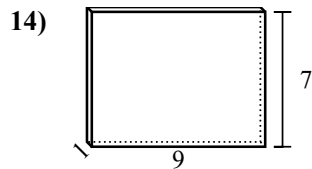
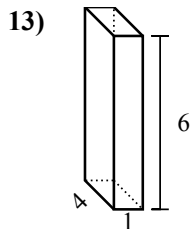
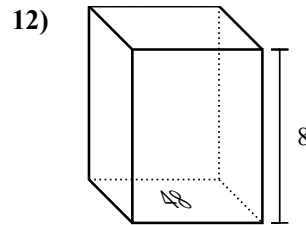
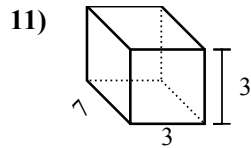
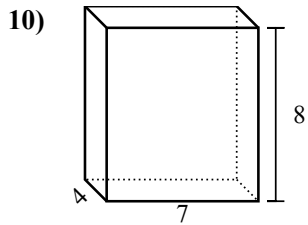
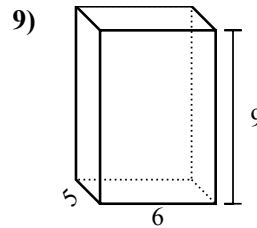
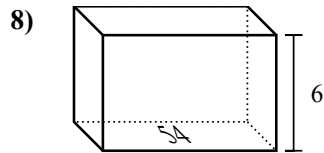
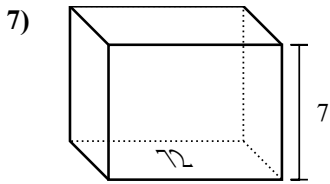
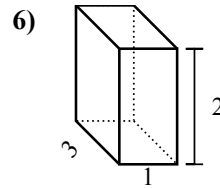
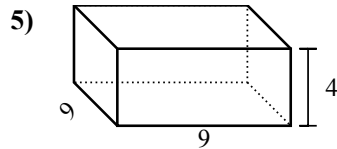
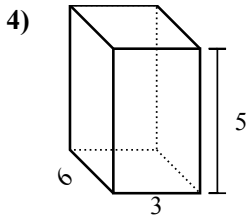
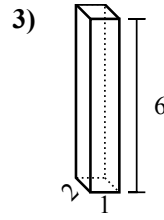
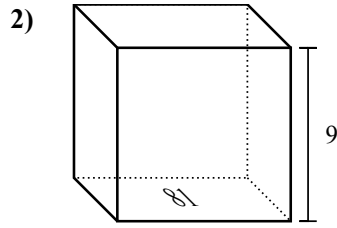
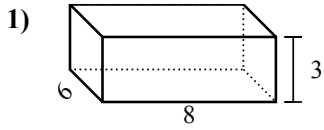
14. **48 cm<sup>3</sup>**

15. **72 cm<sup>3</sup>**



Найдите объем каждой фигуры. Помните, что  $V=BH$  и  $V=L \times W \times H$

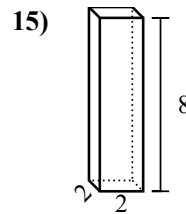
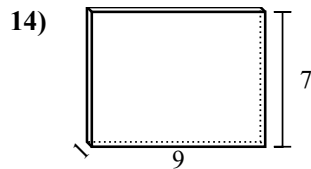
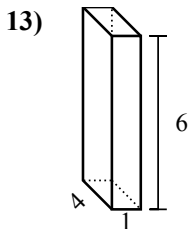
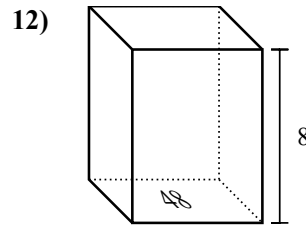
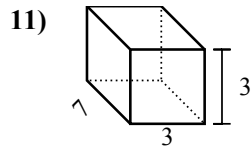
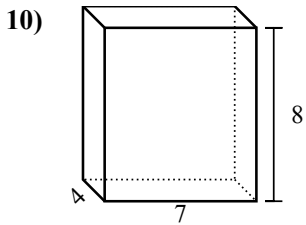
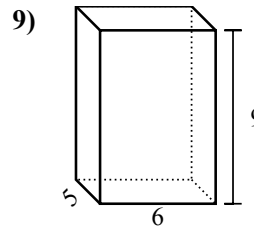
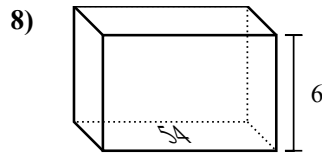
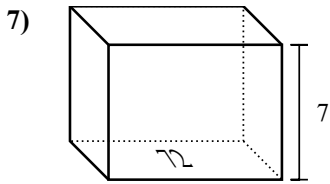
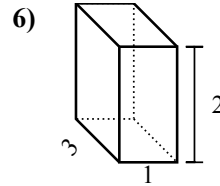
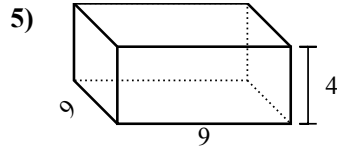
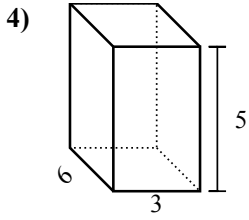
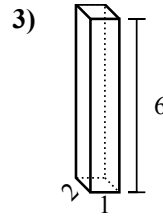
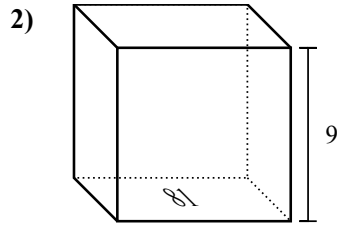
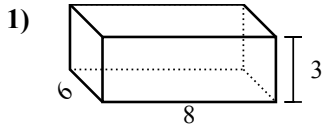
**Ответы**



1. \_\_\_\_\_
2. \_\_\_\_\_
3. \_\_\_\_\_
4. \_\_\_\_\_
5. \_\_\_\_\_
6. \_\_\_\_\_
7. \_\_\_\_\_
8. \_\_\_\_\_
9. \_\_\_\_\_
10. \_\_\_\_\_
11. \_\_\_\_\_
12. \_\_\_\_\_
13. \_\_\_\_\_
14. \_\_\_\_\_
15. \_\_\_\_\_



Найдите объем каждой фигуры. Помните, что  $V=BH$  и  $V=L \times W \times H$



**ОТВЕТЫ**

1. 144 cm<sup>3</sup>
2. 729 cm<sup>3</sup>
3. 12 cm<sup>3</sup>
4. 90 cm<sup>3</sup>
5. 324 cm<sup>3</sup>
6. 6 cm<sup>3</sup>
7. 504 cm<sup>3</sup>
8. 324 cm<sup>3</sup>
9. 270 cm<sup>3</sup>
10. 224 cm<sup>3</sup>
11. 63 cm<sup>3</sup>
12. 384 cm<sup>3</sup>
13. 24 cm<sup>3</sup>
14. 63 cm<sup>3</sup>
15. 32 cm<sup>3</sup>