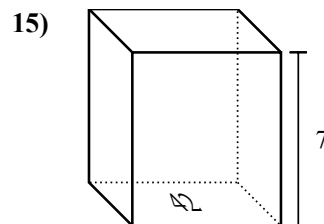
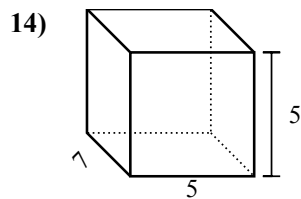
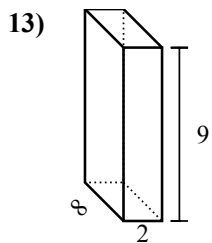
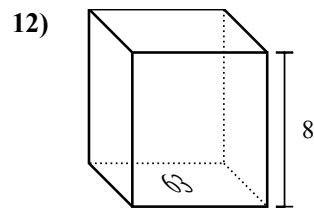
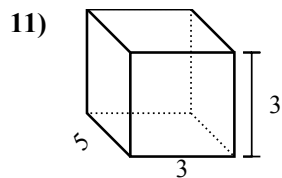
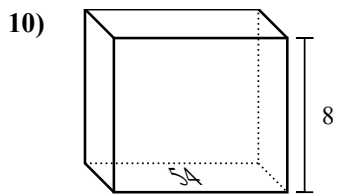
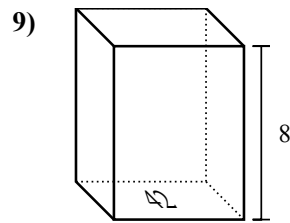
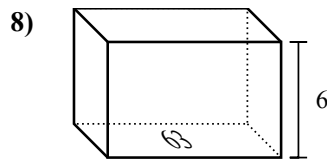
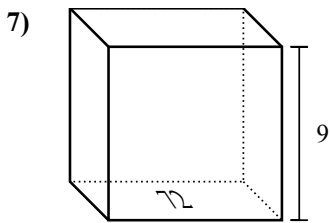
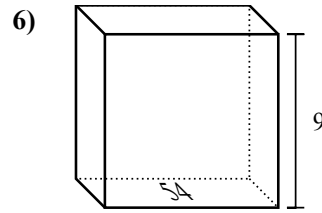
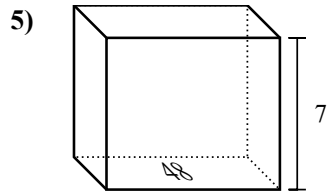
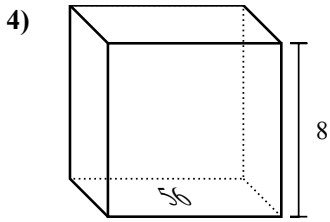
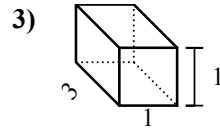
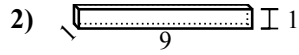
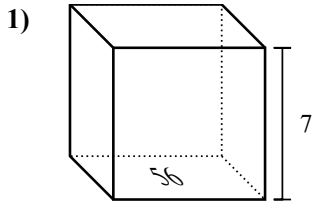


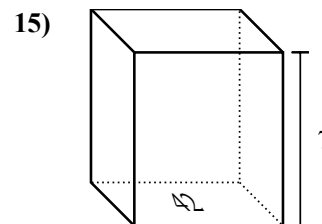
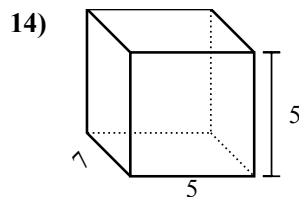
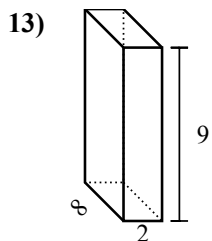
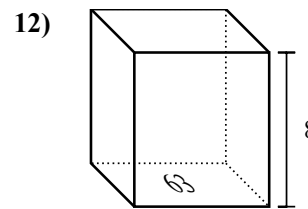
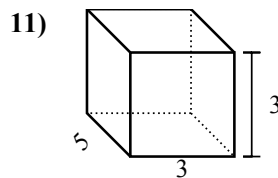
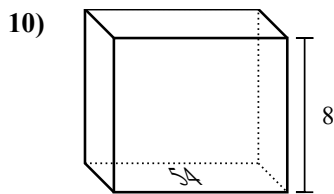
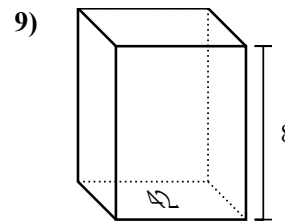
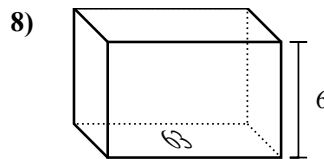
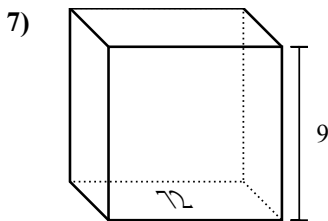
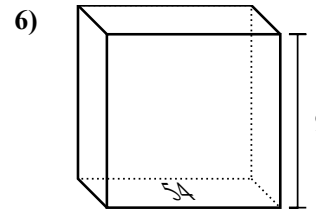
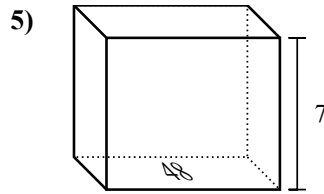
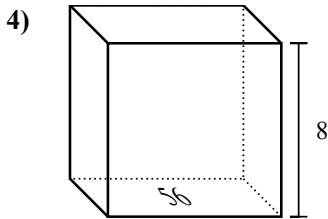
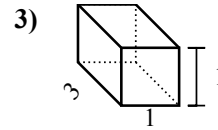
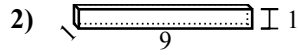
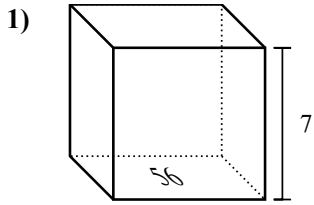


Найдите объем каждой фигуры. Помните, что $V=BH$ и $V=L \times W \times H$

ОТВЕТЫ



1. _____
2. _____
3. _____
4. _____
5. _____
6. _____
7. _____
8. _____
9. _____
10. _____
11. _____
12. _____
13. _____
14. _____
15. _____

Найдите объем каждой фигуры. Помните, что $V=BH$ и $V=L \times W \times H$ **ОТВЕТЫ**1. 392 cm³2. 9 cm³3. 3 cm³4. 448 cm³5. 336 cm³6. 486 cm³7. 648 cm³8. 378 cm³9. 336 cm³10. 432 cm³11. 45 cm³12. 504 cm³13. 144 cm³14. 175 cm³15. 294 cm³