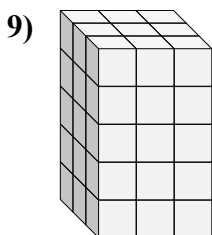
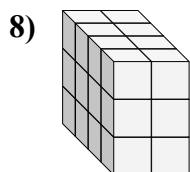
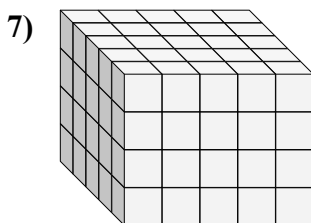
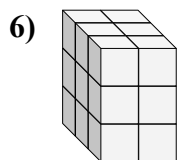
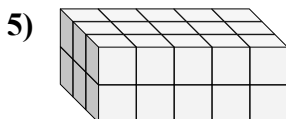
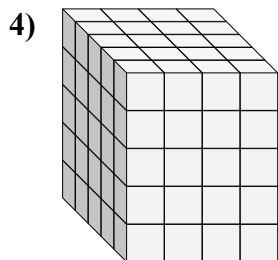
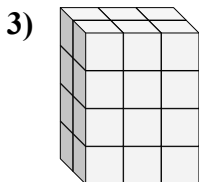
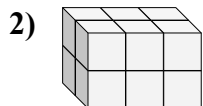
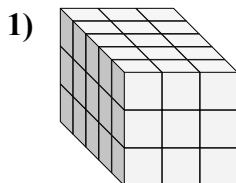
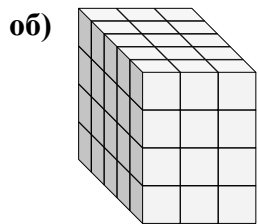




Определите все при измерения параллелепипеда. Затем найдите объем.



**ОТВЕТЫ**

об. 5 3 4 60

1. \_\_\_\_\_

2. \_\_\_\_\_

3. \_\_\_\_\_

4. \_\_\_\_\_

5. \_\_\_\_\_

6. \_\_\_\_\_

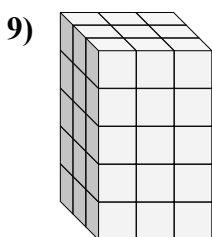
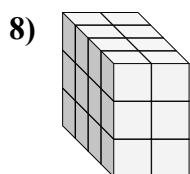
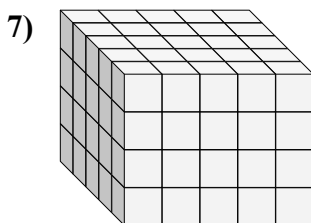
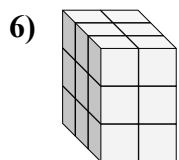
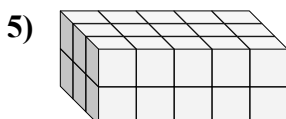
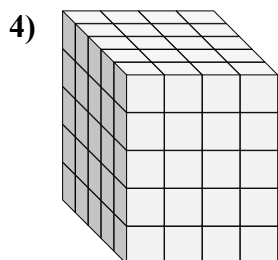
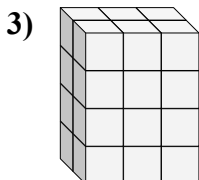
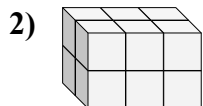
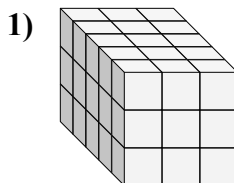
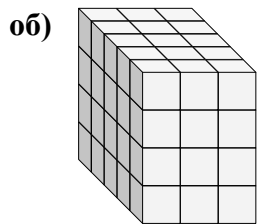
7. \_\_\_\_\_

8. \_\_\_\_\_

9. \_\_\_\_\_



Определите все при измерения параллелепипеда. Затем найдите объем.

**ОТВЕТЫ**

об.	<u>5</u>	<u>3</u>	<u>4</u>	<u>60</u>
1.	<u>5</u>	<u>3</u>	<u>3</u>	<u>45</u>
2.	<u>2</u>	<u>3</u>	<u>2</u>	<u>12</u>
3.	<u>2</u>	<u>3</u>	<u>4</u>	<u>24</u>
4.	<u>5</u>	<u>4</u>	<u>5</u>	<u>100</u>
5.	<u>3</u>	<u>5</u>	<u>2</u>	<u>30</u>
6.	<u>3</u>	<u>2</u>	<u>3</u>	<u>18</u>
7.	<u>5</u>	<u>5</u>	<u>4</u>	<u>100</u>
8.	<u>4</u>	<u>2</u>	<u>3</u>	<u>24</u>
9.	<u>3</u>	<u>3</u>	<u>5</u>	<u>45</u>