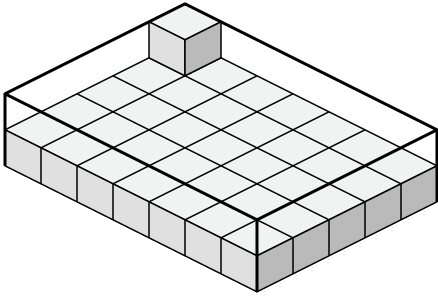




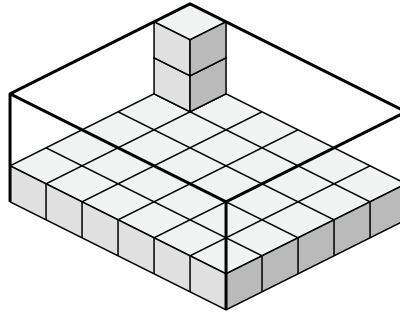
Определите объем каждой коробки. Каждый блок равен 1 кубической единице (и 3).

ОТВЕТЫ

1)



2)



1. \_\_\_\_\_

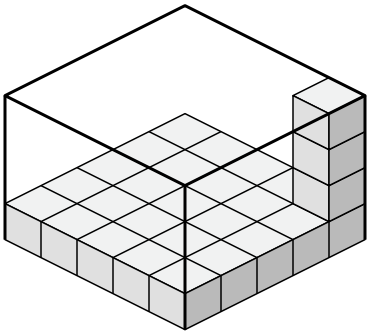
2. \_\_\_\_\_

3. \_\_\_\_\_

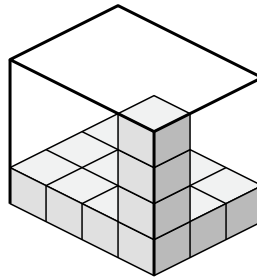
4. \_\_\_\_\_

5. \_\_\_\_\_

3)



4)

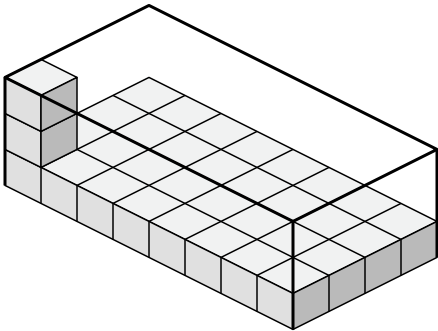


6. \_\_\_\_\_

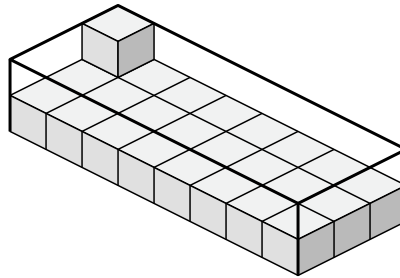
7. \_\_\_\_\_

8. \_\_\_\_\_

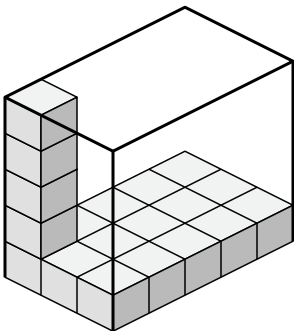
5)



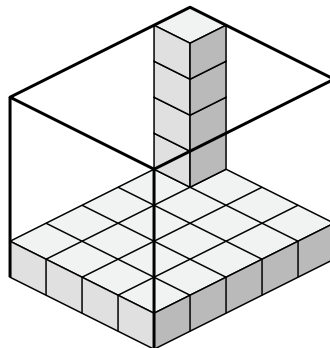
6)



7)



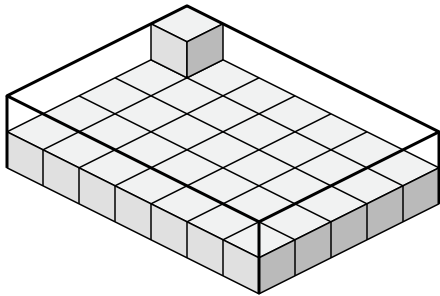
8)



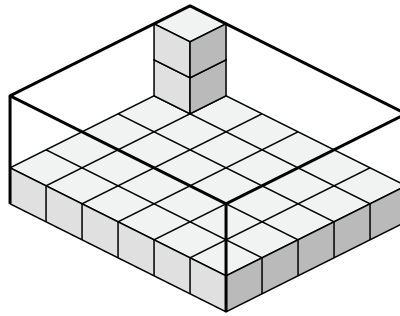


Определите объем каждой коробки. Каждый блок равен 1 кубической единице (u<sup>3</sup>).

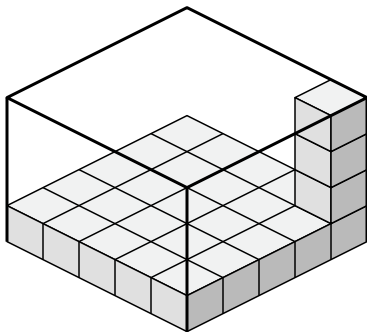
1)



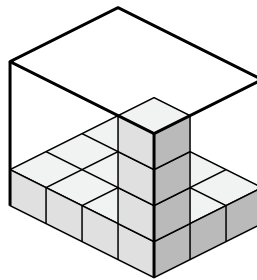
2)



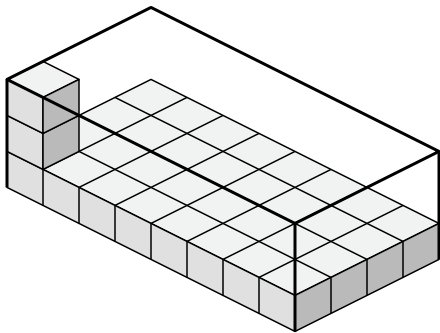
3)



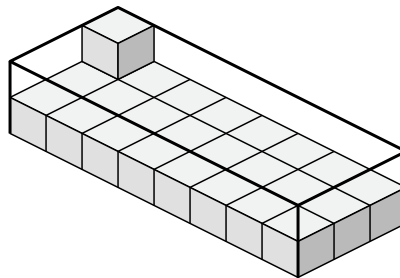
4)



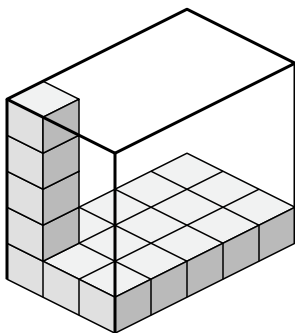
5)



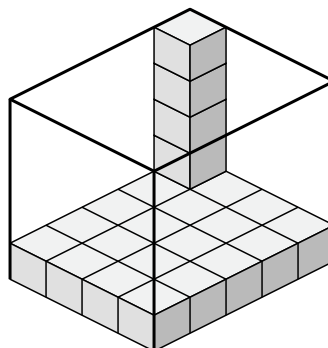
6)



7)



8)



**ОТВЕТЫ**

1. 70 u<sup>3</sup>

2. 90 u<sup>3</sup>

3. 100 u<sup>3</sup>

4. 48 u<sup>3</sup>

5. 96 u<sup>3</sup>

6. 48 u<sup>3</sup>

7. 75 u<sup>3</sup>

8. 100 u<sup>3</sup>