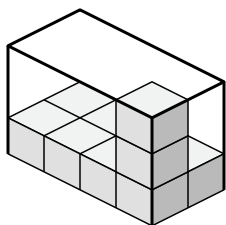




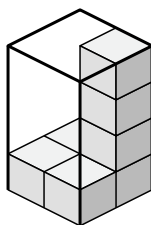
Определите объем каждой коробки. Каждый блок равен 1 кубической единице (и 3).

ОТВЕТЫ

1)



2)



1. \_\_\_\_\_

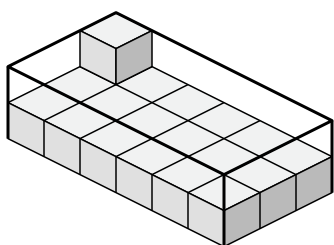
2. \_\_\_\_\_

3. \_\_\_\_\_

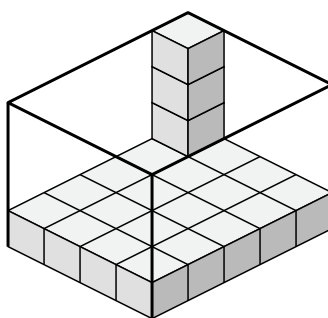
4. \_\_\_\_\_

5. \_\_\_\_\_

3)



4)

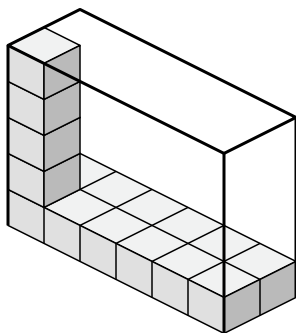


6. \_\_\_\_\_

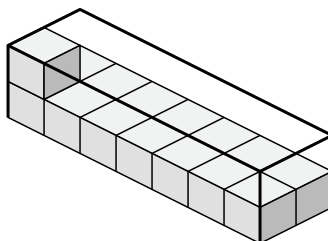
7. \_\_\_\_\_

8. \_\_\_\_\_

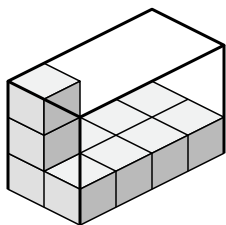
5)



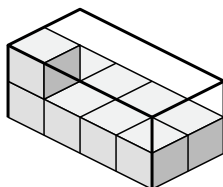
6)



7)

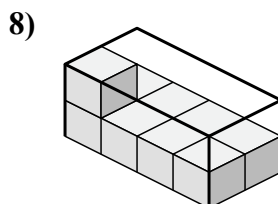
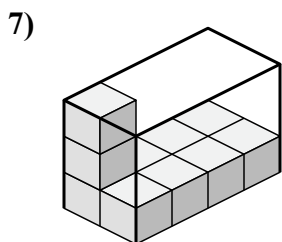
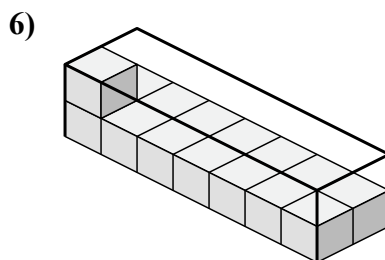
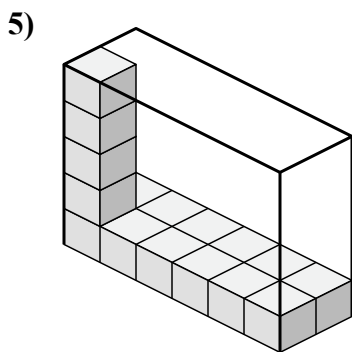
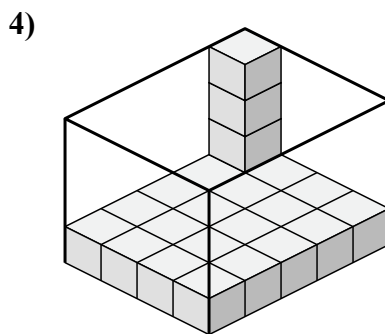
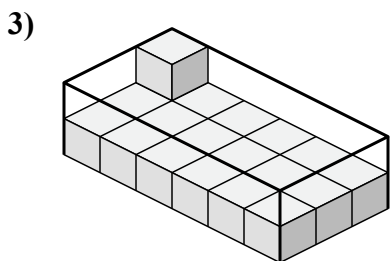
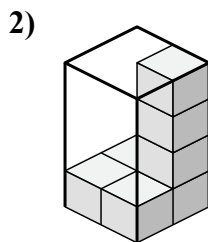
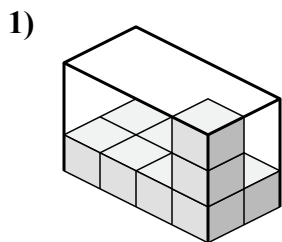


8)





Определите объем каждой коробки. Каждый блок равен 1 кубической единице (u<sup>3</sup>).



**ОТВЕТЫ**

1. 24 u<sup>3</sup>

2. 16 u<sup>3</sup>

3. 36 u<sup>3</sup>

4. 80 u<sup>3</sup>

5. 60 u<sup>3</sup>

6. 28 u<sup>3</sup>

7. 24 u<sup>3</sup>

8. 16 u<sup>3</sup>