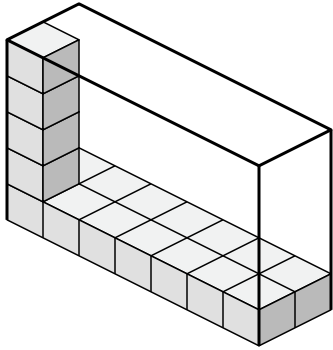




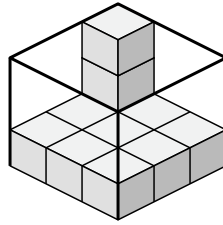
Определите объем каждой коробки. Каждый блок равен 1 кубической единице (и 3).

ОТВЕТЫ

1)



2)



1. \_\_\_\_\_

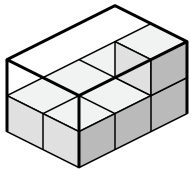
2. \_\_\_\_\_

3. \_\_\_\_\_

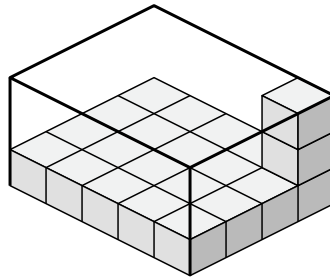
4. \_\_\_\_\_

5. \_\_\_\_\_

3)



4)

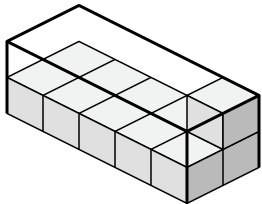


6. \_\_\_\_\_

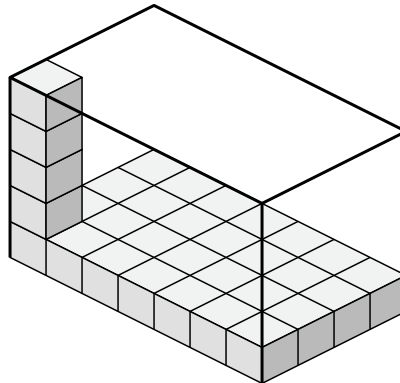
7. \_\_\_\_\_

8. \_\_\_\_\_

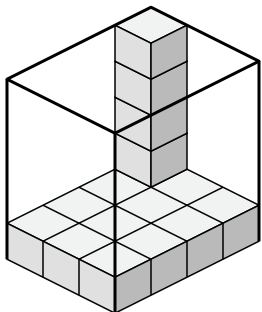
5)



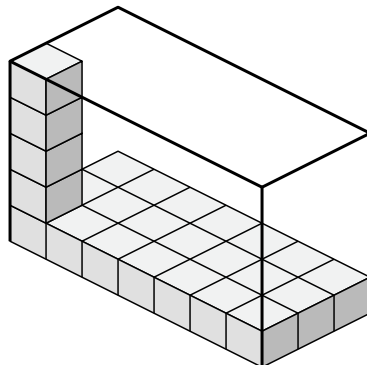
6)



7)

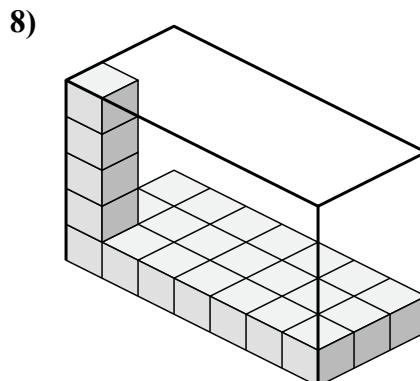
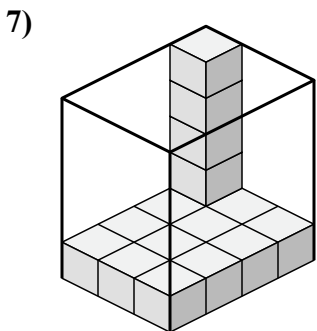
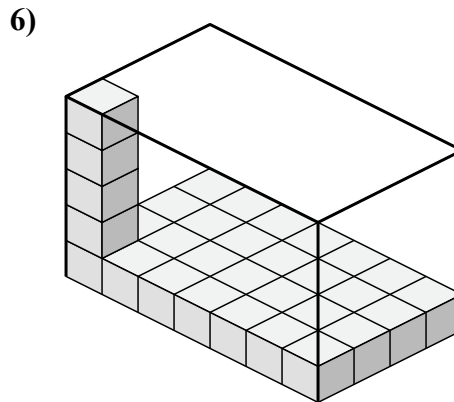
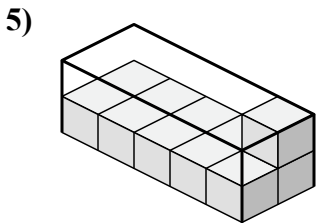
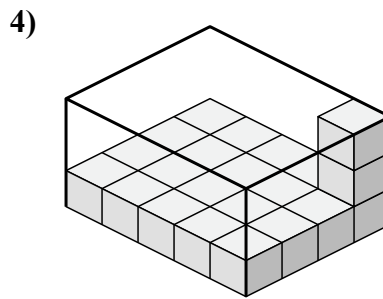
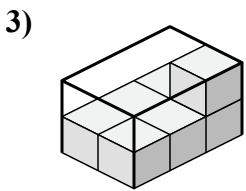
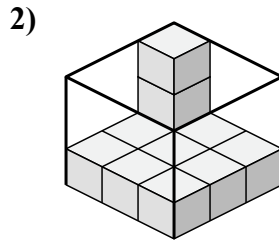
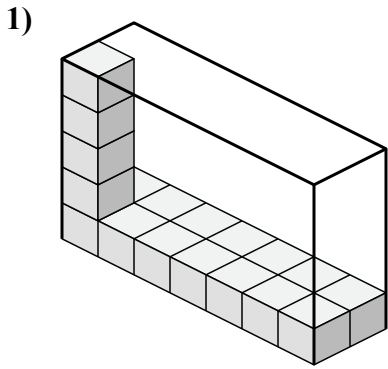


8)





Определите объем каждой коробки. Каждый блок равен 1 кубической единице (u<sup>3</sup>).



**ОТВЕТЫ**

- 1. 70 u<sup>3</sup>
- 2. 27 u<sup>3</sup>
- 3. 12 u<sup>3</sup>
- 4. 60 u<sup>3</sup>
- 5. 20 u<sup>3</sup>
- 6. 140 u<sup>3</sup>
- 7. 60 u<sup>3</sup>
- 8. 105 u<sup>3</sup>