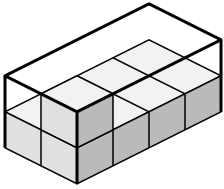




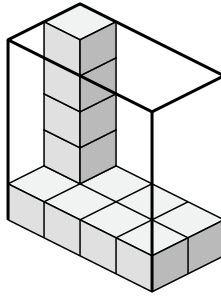
Определите объем каждой коробки. Каждый блок равен 1 кубической единице (и 3).

ОТВЕТЫ

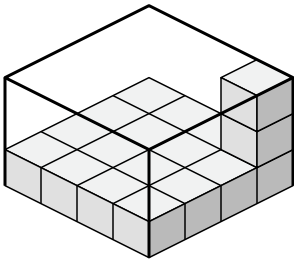
1)



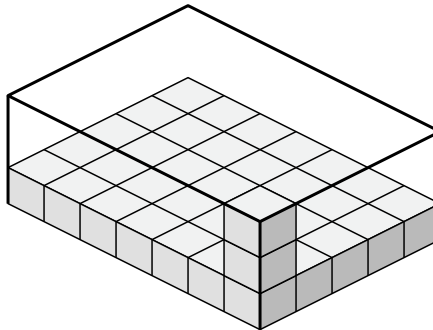
2)



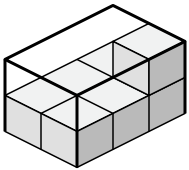
3)



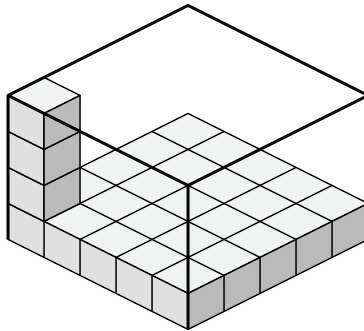
4)



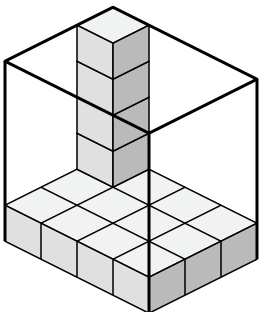
5)



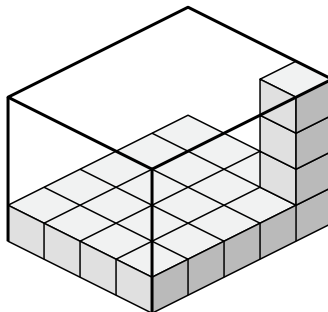
6)



7)



8)



1. \_\_\_\_\_

2. \_\_\_\_\_

3. \_\_\_\_\_

4. \_\_\_\_\_

5. \_\_\_\_\_

6. \_\_\_\_\_

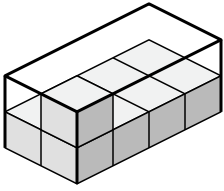
7. \_\_\_\_\_

8. \_\_\_\_\_

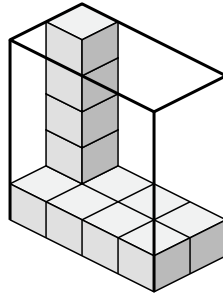


Определите объем каждой коробки. Каждый блок равен 1 кубической единице (u<sup>3</sup>).

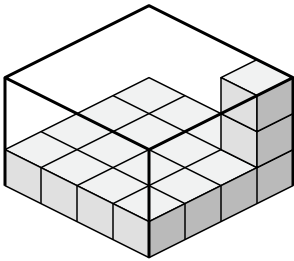
1)



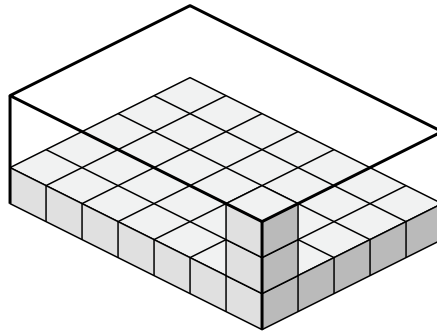
2)



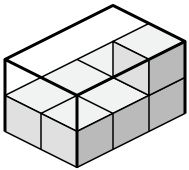
3)



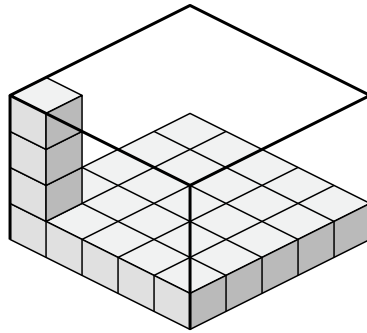
4)



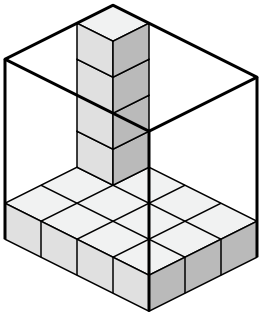
5)



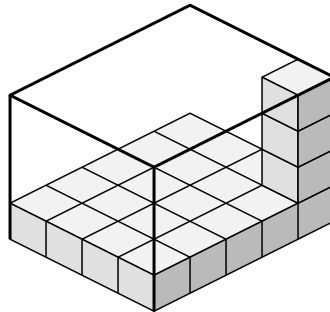
6)



7)



8)



**ОТВЕТЫ**

1. 16 u<sup>3</sup>

2. 40 u<sup>3</sup>

3. 48 u<sup>3</sup>

4. 105 u<sup>3</sup>

5. 12 u<sup>3</sup>

6. 100 u<sup>3</sup>

7. 60 u<sup>3</sup>

8. 80 u<sup>3</sup>