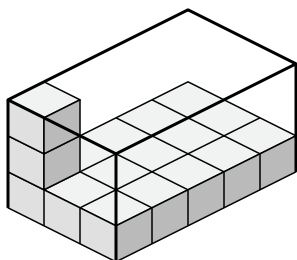




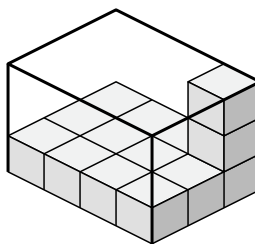
Определите объем каждой коробки. Каждый блок равен 1 кубической единице (и 3).

ОТВЕТЫ

1)



2)



1. \_\_\_\_\_

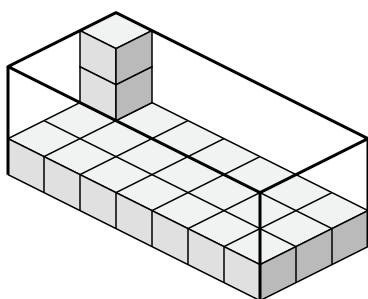
2. \_\_\_\_\_

3. \_\_\_\_\_

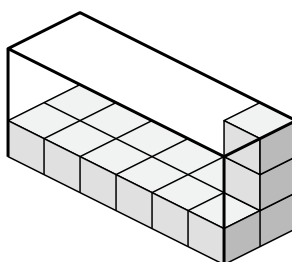
4. \_\_\_\_\_

5. \_\_\_\_\_

3)



4)

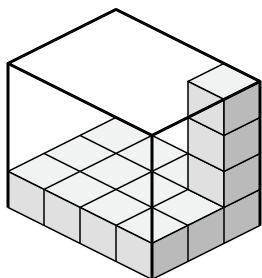


6. \_\_\_\_\_

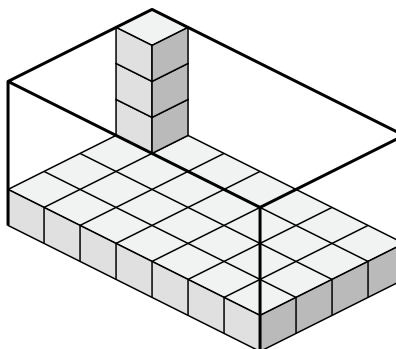
7. \_\_\_\_\_

8. \_\_\_\_\_

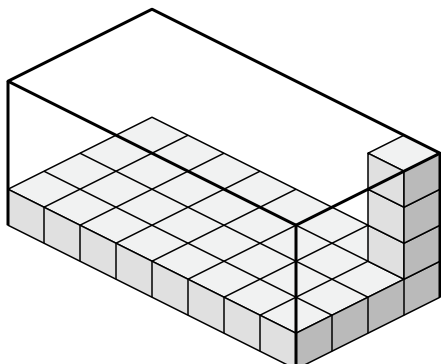
5)



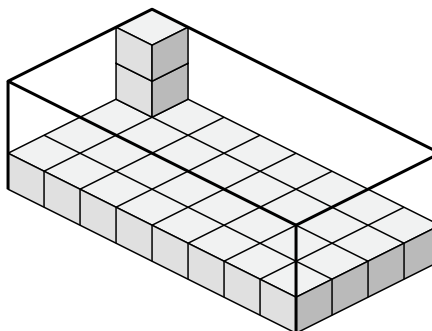
6)



7)



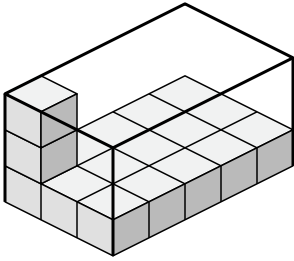
8)



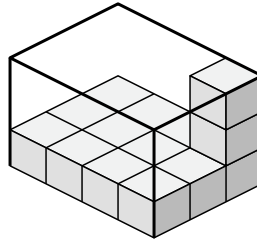


Определите объем каждой коробки. Каждый блок равен 1 кубической единице (u<sup>3</sup>).

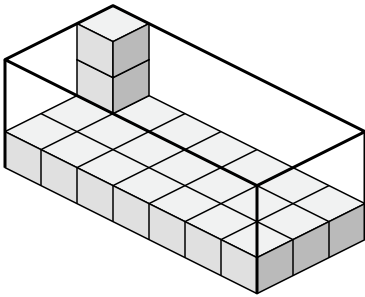
1)



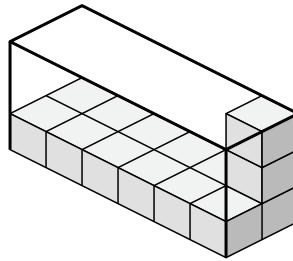
2)



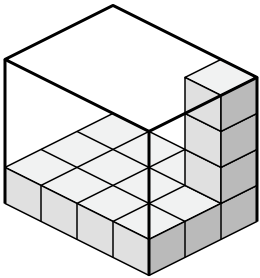
3)



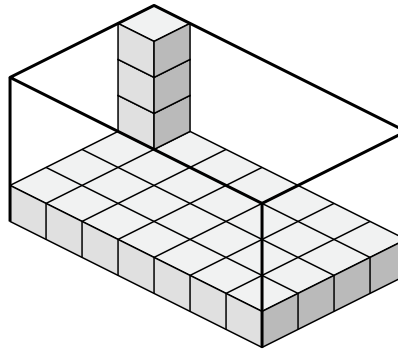
4)



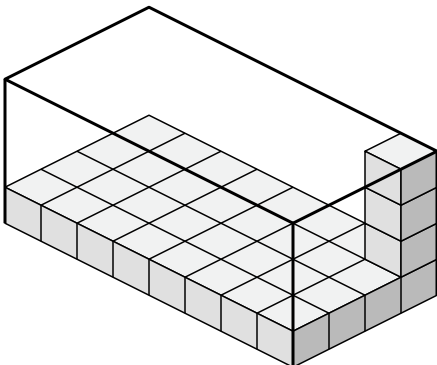
5)



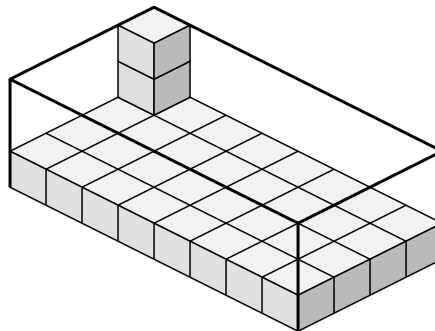
6)



7)



8)



**ОТВЕТЫ**

1. 45 u<sup>3</sup>

2. 36 u<sup>3</sup>

3. 63 u<sup>3</sup>

4. 36 u<sup>3</sup>

5. 48 u<sup>3</sup>

6. 112 u<sup>3</sup>

7. 128 u<sup>3</sup>

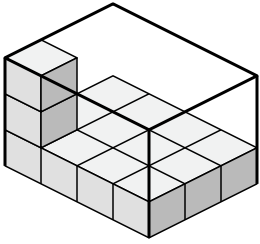
8. 96 u<sup>3</sup>



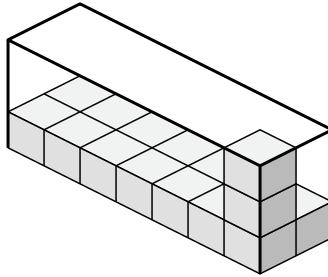
Определите объем каждой коробки. Каждый блок равен 1 кубической единице (и 3).

**ОТВЕТЫ**

1)



2)



1. \_\_\_\_\_

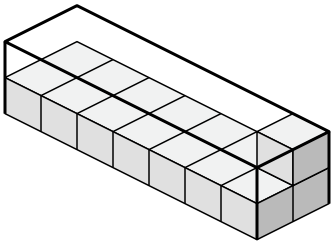
2. \_\_\_\_\_

3. \_\_\_\_\_

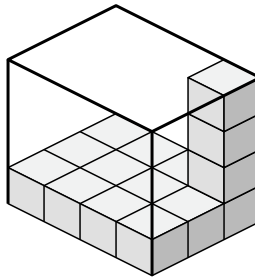
4. \_\_\_\_\_

5. \_\_\_\_\_

3)



4)

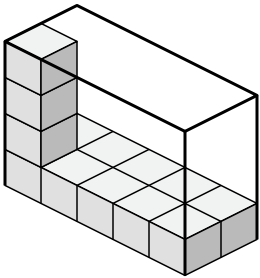


6. \_\_\_\_\_

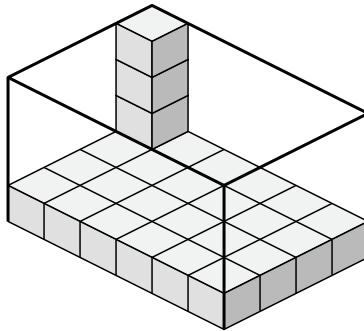
7. \_\_\_\_\_

8. \_\_\_\_\_

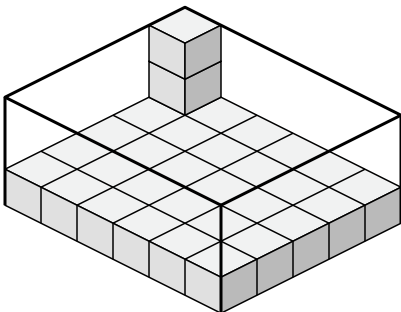
5)



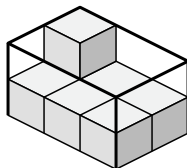
6)



7)



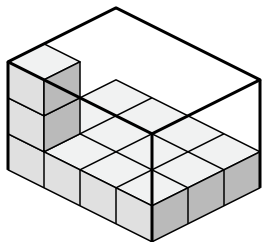
8)



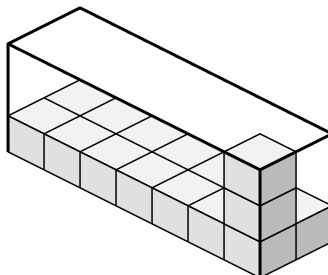


Определите объем каждой коробки. Каждый блок равен 1 кубической единице (u<sup>3</sup>).

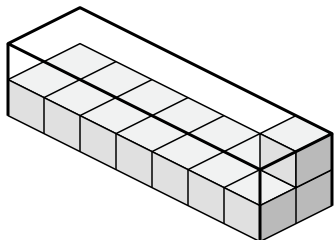
1)



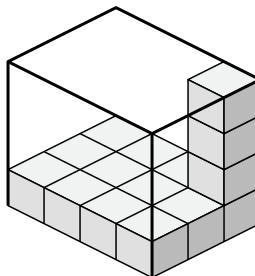
2)



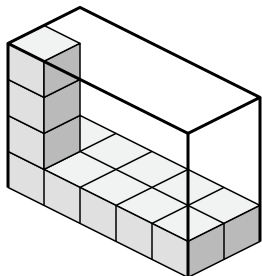
3)



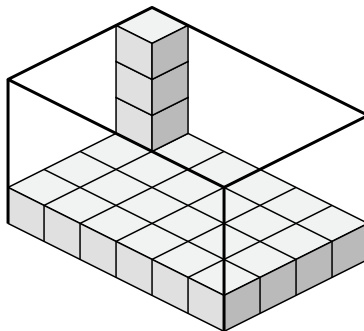
4)



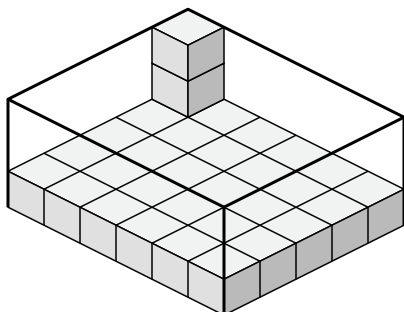
5)



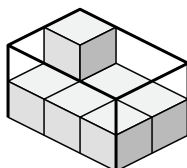
6)



7)



8)



**ОТВЕТЫ**

1. 36 u<sup>3</sup>

2. 42 u<sup>3</sup>

3. 28 u<sup>3</sup>

4. 48 u<sup>3</sup>

5. 40 u<sup>3</sup>

6. 96 u<sup>3</sup>

7. 90 u<sup>3</sup>

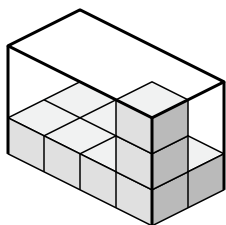
8. 12 u<sup>3</sup>



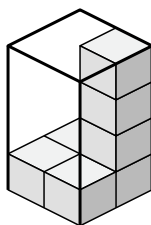
Определите объем каждой коробки. Каждый блок равен 1 кубической единице (и 3).

ОТВЕТЫ

1)



2)



1. \_\_\_\_\_

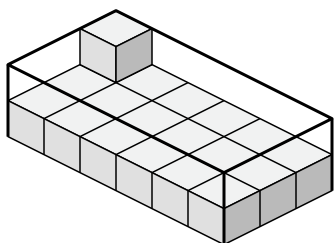
2. \_\_\_\_\_

3. \_\_\_\_\_

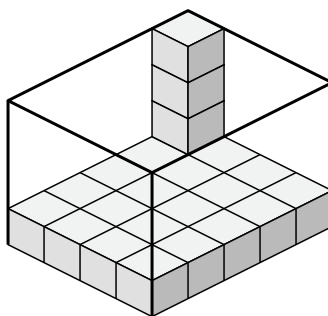
4. \_\_\_\_\_

5. \_\_\_\_\_

3)



4)

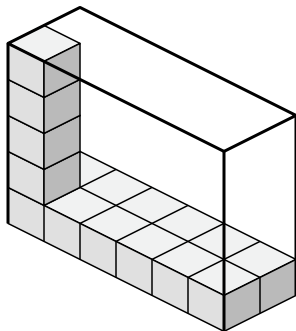


6. \_\_\_\_\_

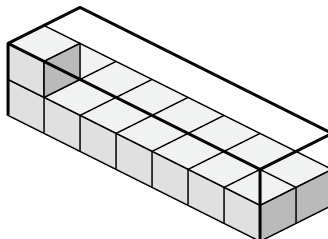
7. \_\_\_\_\_

8. \_\_\_\_\_

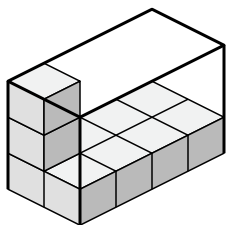
5)



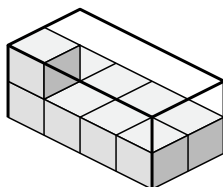
6)



7)

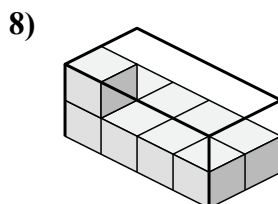
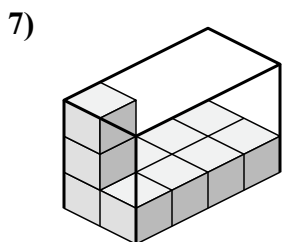
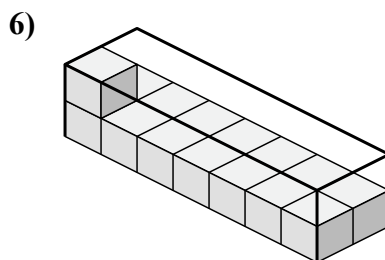
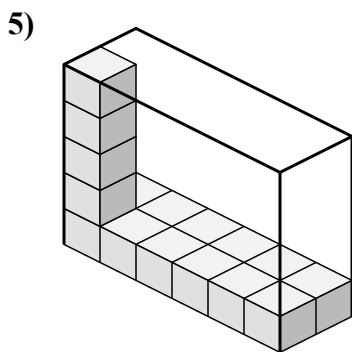
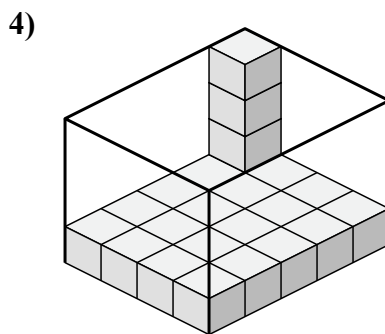
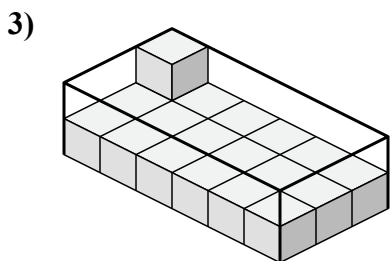
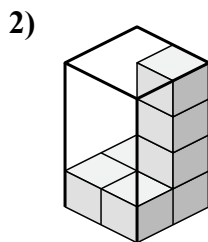
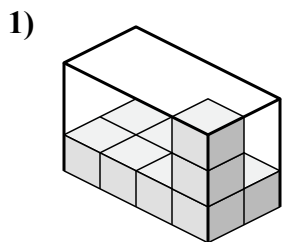


8)





Определите объем каждой коробки. Каждый блок равен 1 кубической единице (u<sup>3</sup>).



**ОТВЕТЫ**

1. 24 u<sup>3</sup>

2. 16 u<sup>3</sup>

3. 36 u<sup>3</sup>

4. 80 u<sup>3</sup>

5. 60 u<sup>3</sup>

6. 28 u<sup>3</sup>

7. 24 u<sup>3</sup>

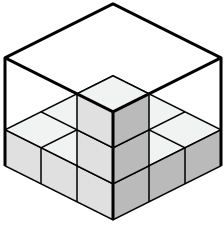
8. 16 u<sup>3</sup>



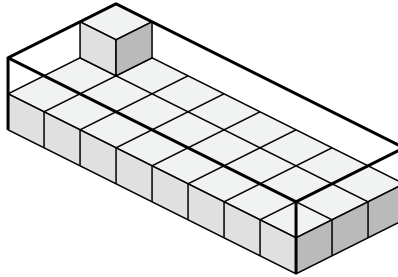
Определите объем каждой коробки. Каждый блок равен 1 кубической единице (и 3).

ОТВЕТЫ

1)



2)



1. \_\_\_\_\_

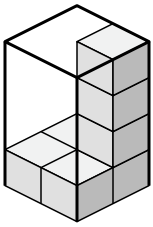
2. \_\_\_\_\_

3. \_\_\_\_\_

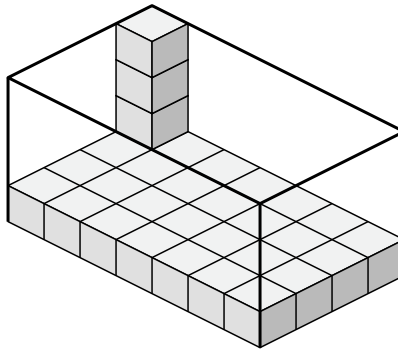
4. \_\_\_\_\_

5. \_\_\_\_\_

3)



4)

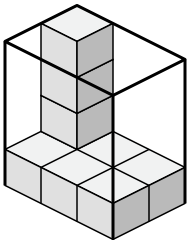


6. \_\_\_\_\_

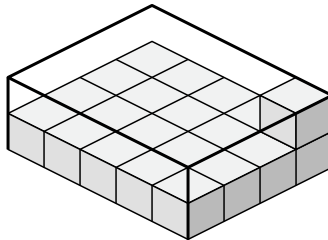
7. \_\_\_\_\_

8. \_\_\_\_\_

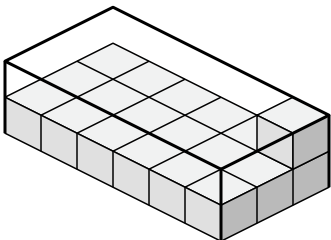
5)



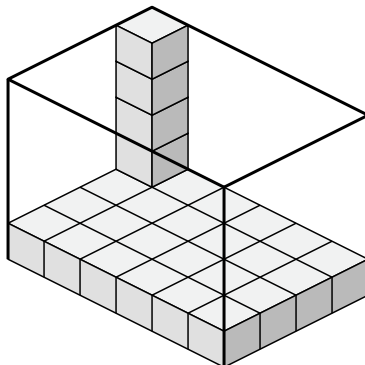
6)



7)



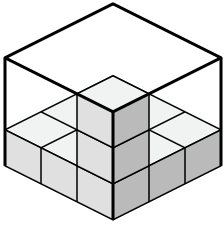
8)



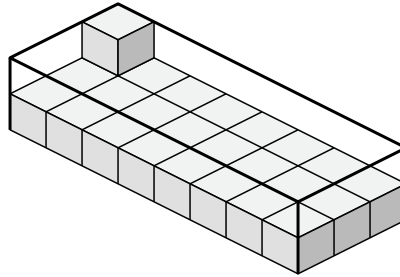


Определите объем каждой коробки. Каждый блок равен 1 кубической единице (u<sup>3</sup>).

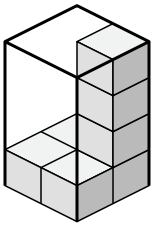
1)



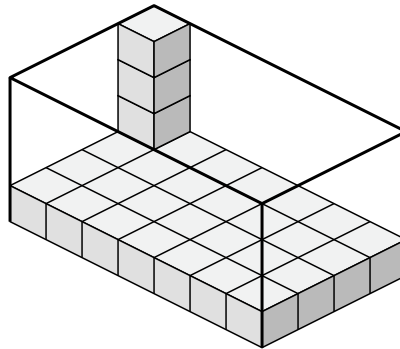
2)



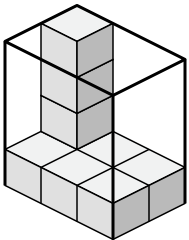
3)



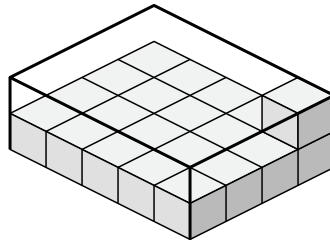
4)



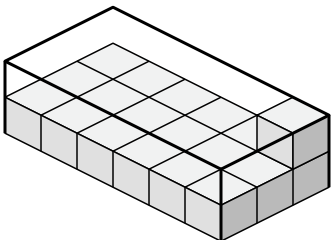
5)



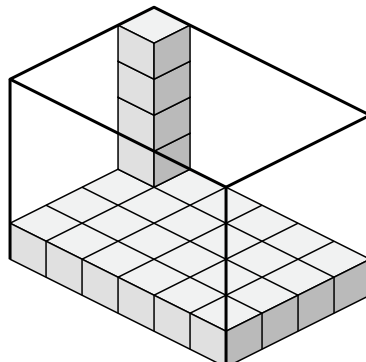
6)



7)



8)



**ОТВЕТЫ**

1. 27 u<sup>3</sup>

2. 48 u<sup>3</sup>

3. 16 u<sup>3</sup>

4. 112 u<sup>3</sup>

5. 24 u<sup>3</sup>

6. 40 u<sup>3</sup>

7. 36 u<sup>3</sup>

8. 120 u<sup>3</sup>

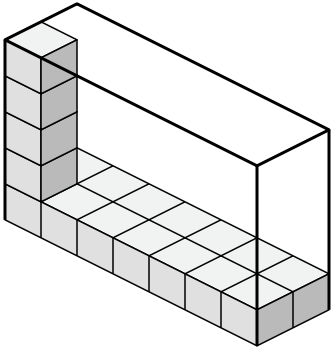




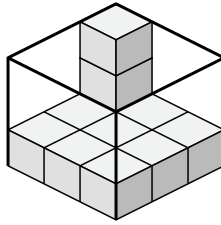
Определите объем каждой коробки. Каждый блок равен 1 кубической единице (и 3).

ОТВЕТЫ

1)



2)



1. \_\_\_\_\_

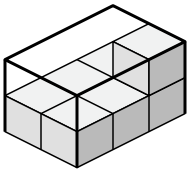
2. \_\_\_\_\_

3. \_\_\_\_\_

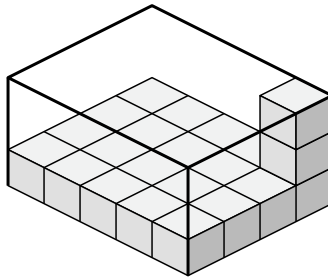
4. \_\_\_\_\_

5. \_\_\_\_\_

3)



4)

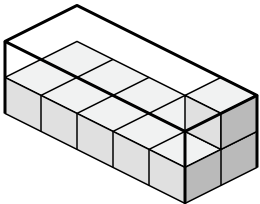


6. \_\_\_\_\_

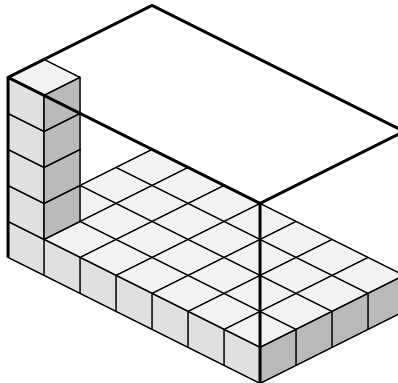
7. \_\_\_\_\_

8. \_\_\_\_\_

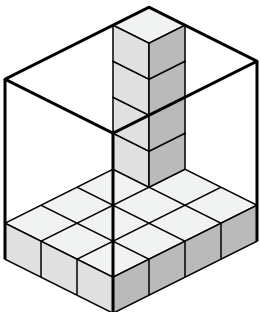
5)



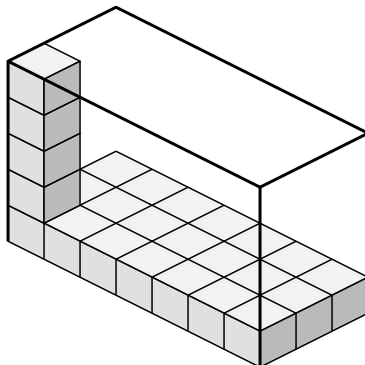
6)



7)

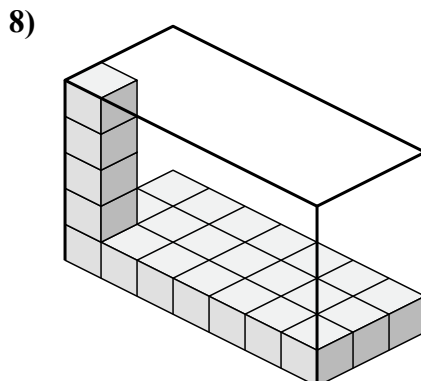
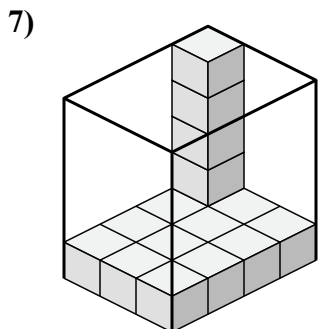
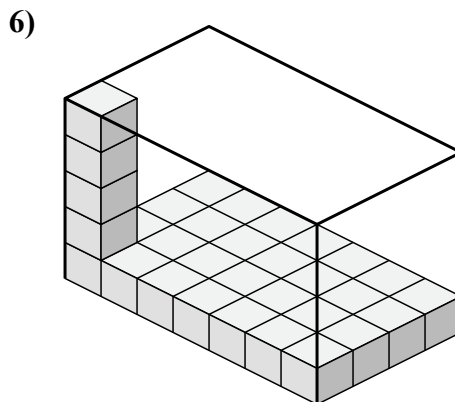
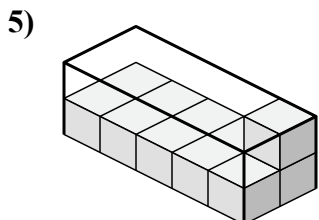
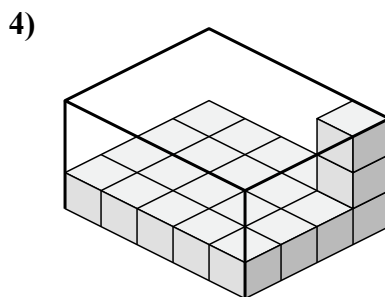
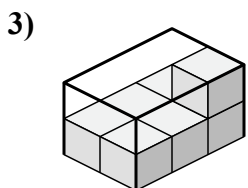
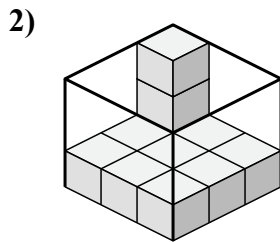
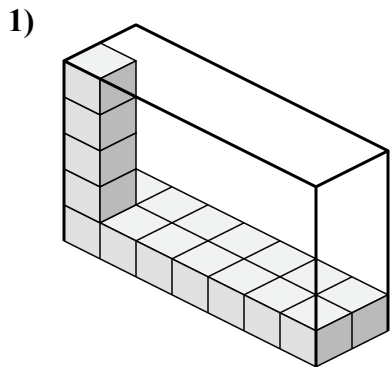


8)





Определите объем каждой коробки. Каждый блок равен 1 кубической единице (u<sup>3</sup>).



**ОТВЕТЫ**

1. 70 u<sup>3</sup>

2. 27 u<sup>3</sup>

3. 12 u<sup>3</sup>

4. 60 u<sup>3</sup>

5. 20 u<sup>3</sup>

6. 140 u<sup>3</sup>

7. 60 u<sup>3</sup>

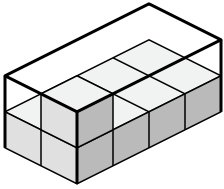
8. 105 u<sup>3</sup>



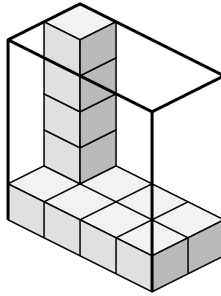
Определите объем каждой коробки. Каждый блок равен 1 кубической единице (и 3).

ОТВЕТЫ

1)



2)



1. \_\_\_\_\_

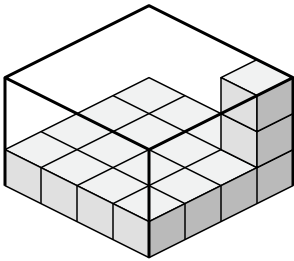
2. \_\_\_\_\_

3. \_\_\_\_\_

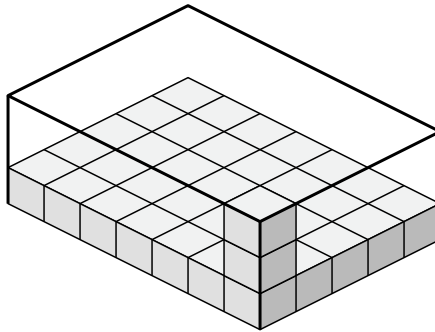
4. \_\_\_\_\_

5. \_\_\_\_\_

3)



4)

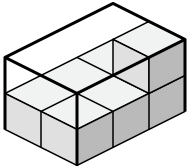


6. \_\_\_\_\_

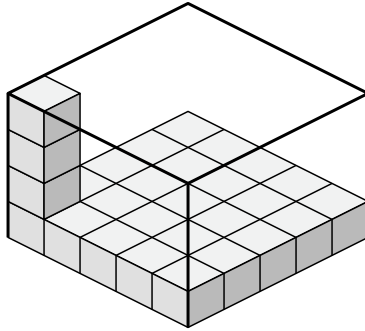
7. \_\_\_\_\_

8. \_\_\_\_\_

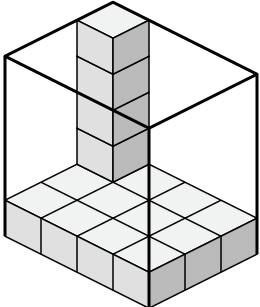
5)



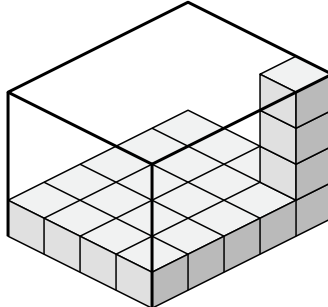
6)



7)



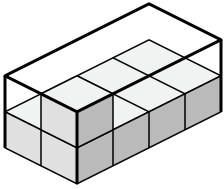
8)



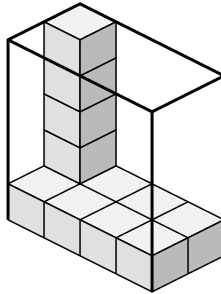


Определите объем каждой коробки. Каждый блок равен 1 кубической единице (u<sup>3</sup>).

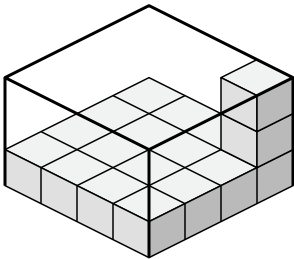
1)



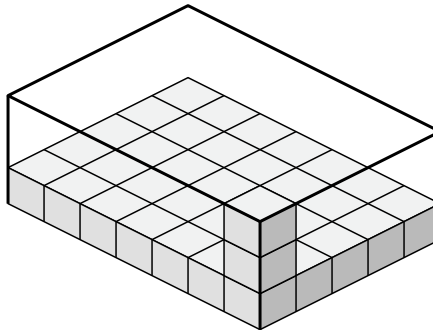
2)



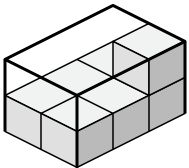
3)



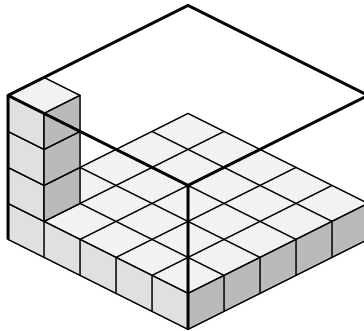
4)



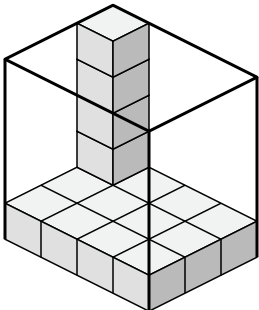
5)



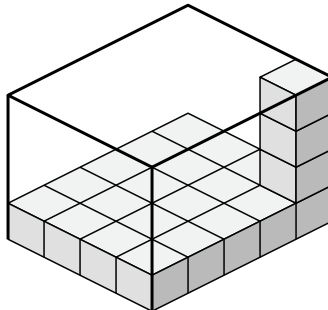
6)



7)



8)



**ОТВЕТЫ**

1. 16 u<sup>3</sup>

2. 40 u<sup>3</sup>

3. 48 u<sup>3</sup>

4. 105 u<sup>3</sup>

5. 12 u<sup>3</sup>

6. 100 u<sup>3</sup>

7. 60 u<sup>3</sup>

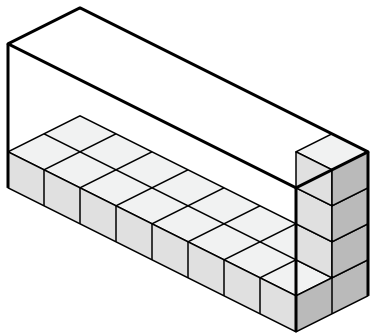
8. 80 u<sup>3</sup>



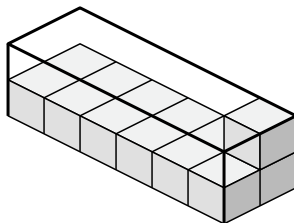
Определите объем каждой коробки. Каждый блок равен 1 кубической единице (и 3).

ОТВЕТЫ

1)



2)



1. \_\_\_\_\_

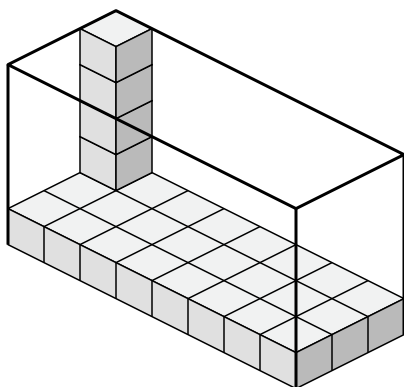
2. \_\_\_\_\_

3. \_\_\_\_\_

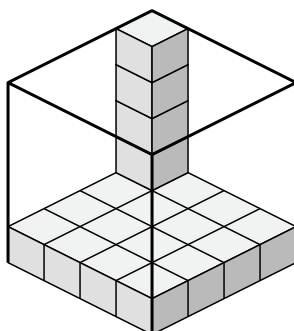
4. \_\_\_\_\_

5. \_\_\_\_\_

3)



4)

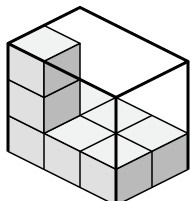


6. \_\_\_\_\_

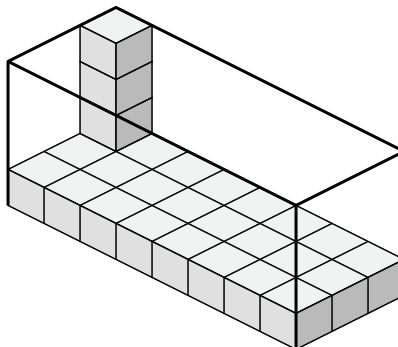
7. \_\_\_\_\_

8. \_\_\_\_\_

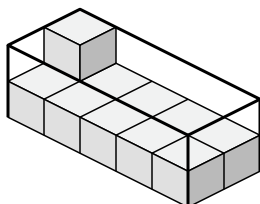
5)



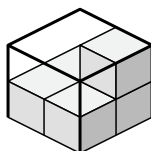
6)



7)



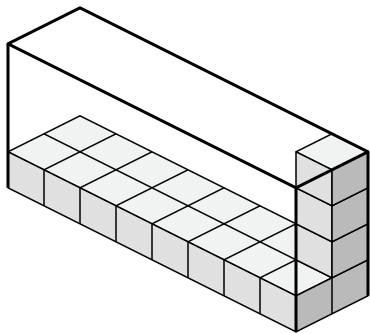
8)



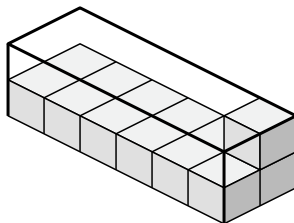


Определите объем каждой коробки. Каждый блок равен 1 кубической единице (u<sup>3</sup>).

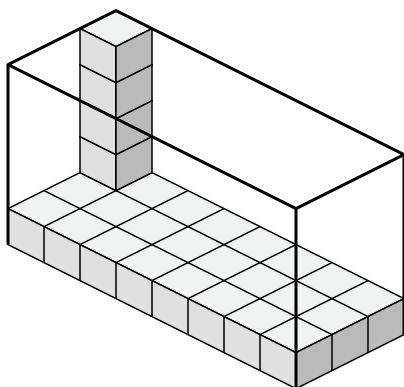
1)



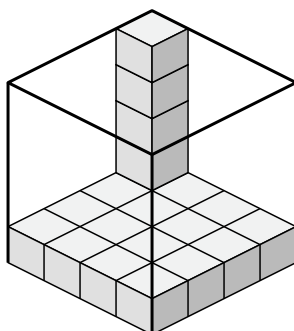
2)



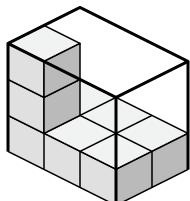
3)



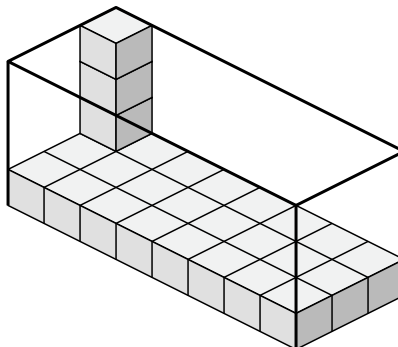
4)



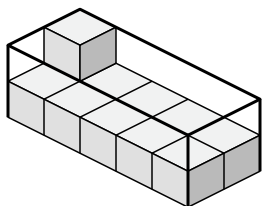
5)



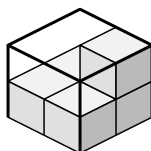
6)



7)



8)



**ОТВЕТЫ**

1. 64 u<sup>3</sup>

2. 24 u<sup>3</sup>

3. 120 u<sup>3</sup>

4. 80 u<sup>3</sup>

5. 18 u<sup>3</sup>

6. 96 u<sup>3</sup>

7. 20 u<sup>3</sup>

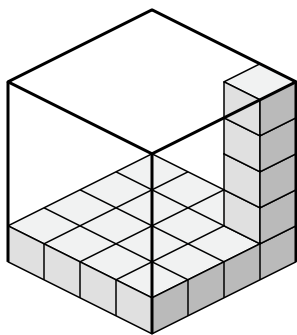
8. 8 u<sup>3</sup>



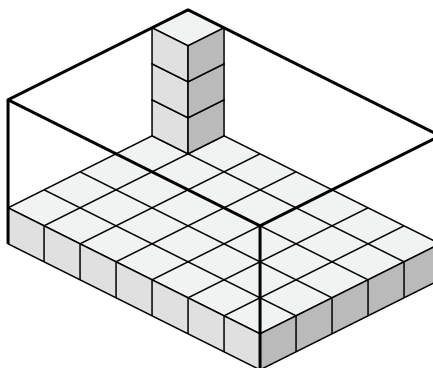
Определите объем каждой коробки. Каждый блок равен 1 кубической единице (и 3).

ОТВЕТЫ

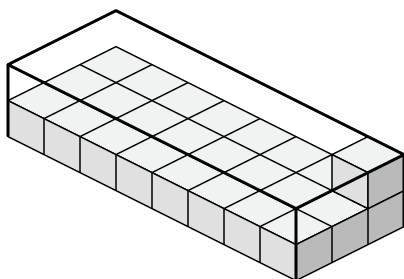
1)



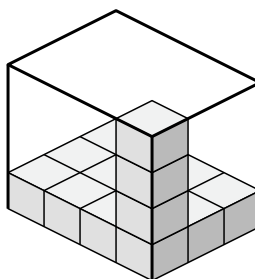
2)



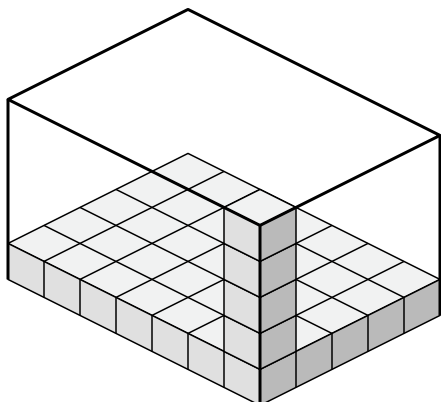
3)



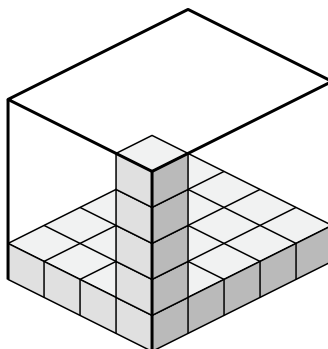
4)



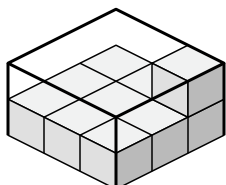
5)



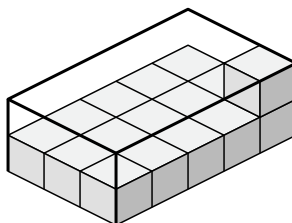
6)



7)



8)

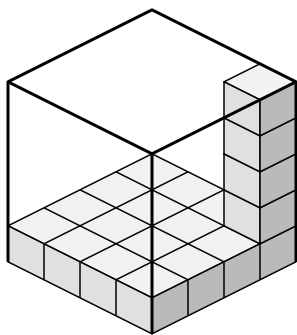


- 1. \_\_\_\_\_
- 2. \_\_\_\_\_
- 3. \_\_\_\_\_
- 4. \_\_\_\_\_
- 5. \_\_\_\_\_
- 6. \_\_\_\_\_
- 7. \_\_\_\_\_
- 8. \_\_\_\_\_

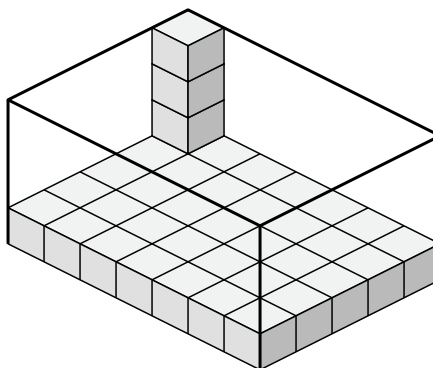


Определите объем каждой коробки. Каждый блок равен 1 кубической единице (u<sup>3</sup>).

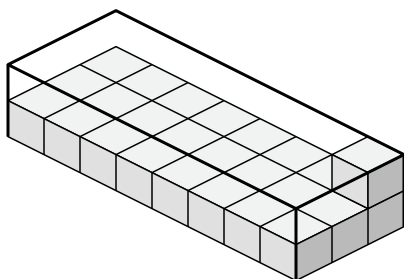
1)



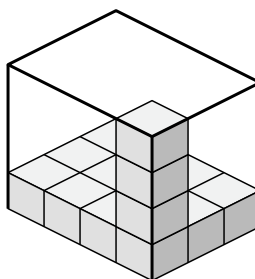
2)



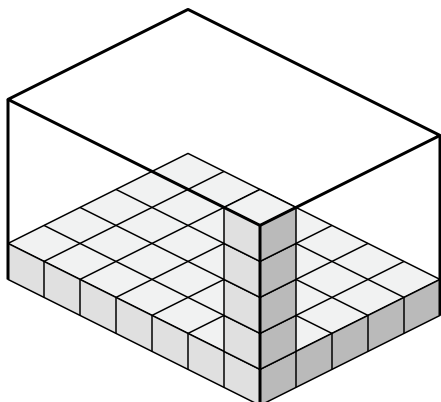
3)



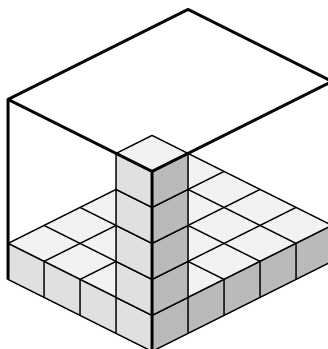
4)



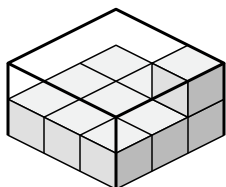
5)



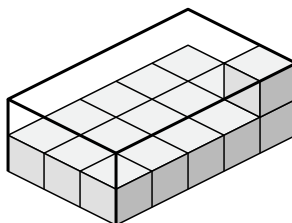
6)



7)



8)



**ОТВЕТЫ**

1. 80 u<sup>3</sup>

2. 140 u<sup>3</sup>

3. 48 u<sup>3</sup>

4. 48 u<sup>3</sup>

5. 175 u<sup>3</sup>

6. 100 u<sup>3</sup>

7. 18 u<sup>3</sup>

8. 30 u<sup>3</sup>

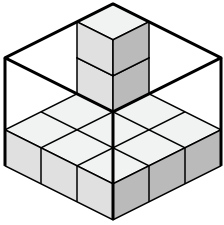




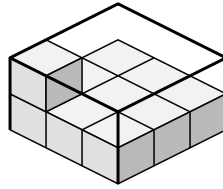
Определите объем каждой коробки. Каждый блок равен 1 кубической единице (и 3).

ОТВЕТЫ

1)



2)



1. \_\_\_\_\_

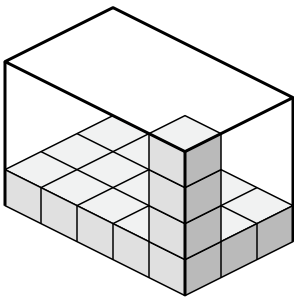
2. \_\_\_\_\_

3. \_\_\_\_\_

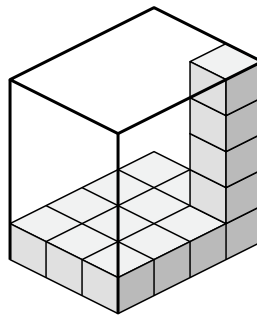
4. \_\_\_\_\_

5. \_\_\_\_\_

3)



4)

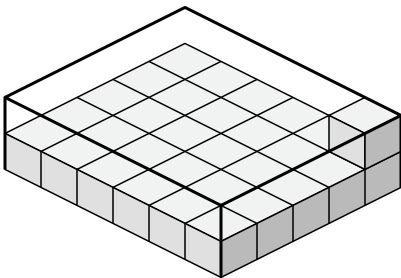


6. \_\_\_\_\_

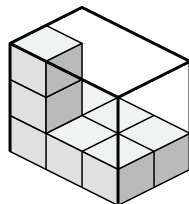
7. \_\_\_\_\_

8. \_\_\_\_\_

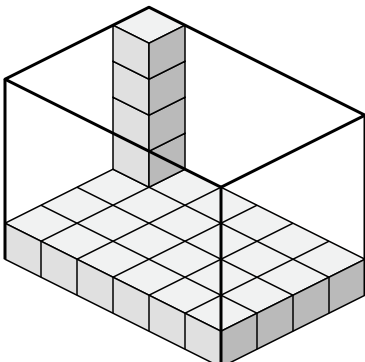
5)



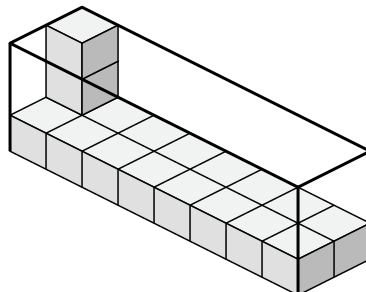
6)



7)



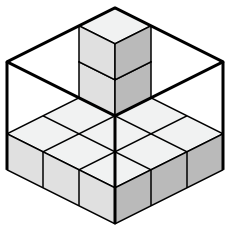
8)



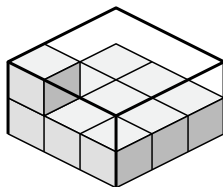


Определите объем каждой коробки. Каждый блок равен 1 кубической единице (u<sup>3</sup>).

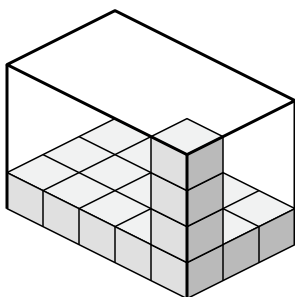
1)



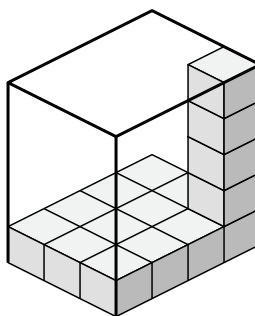
2)



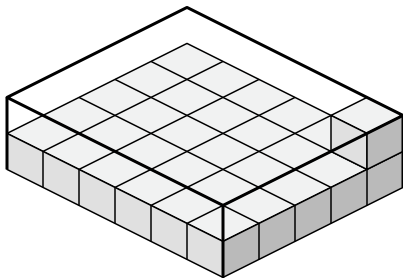
3)



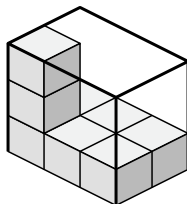
4)



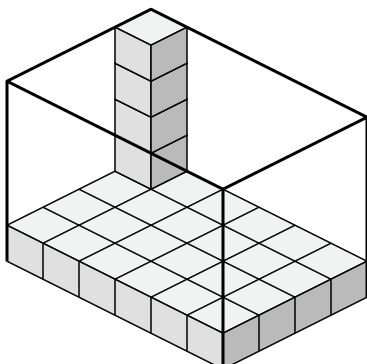
5)



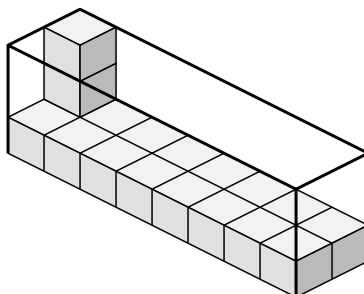
6)



7)



8)



**ОТВЕТЫ**

1. 27 u<sup>3</sup>

2. 18 u<sup>3</sup>

3. 60 u<sup>3</sup>

4. 60 u<sup>3</sup>

5. 60 u<sup>3</sup>

6. 18 u<sup>3</sup>

7. 120 u<sup>3</sup>

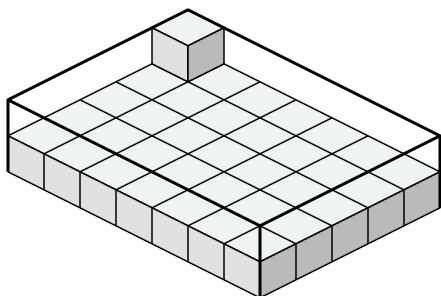
8. 48 u<sup>3</sup>



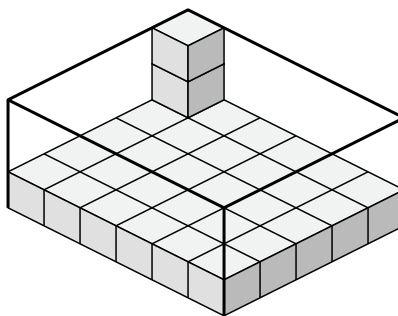
Определите объем каждой коробки. Каждый блок равен 1 кубической единице (и 3).

ОТВЕТЫ

1)



2)



1. \_\_\_\_\_

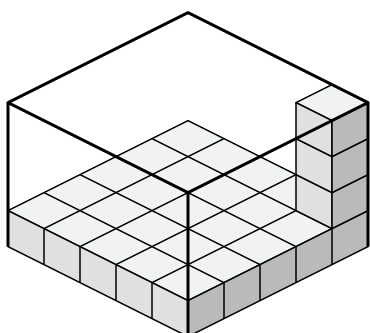
2. \_\_\_\_\_

3. \_\_\_\_\_

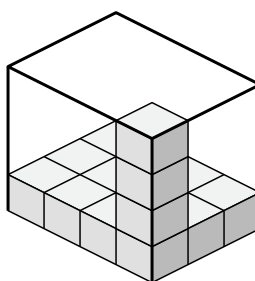
4. \_\_\_\_\_

5. \_\_\_\_\_

3)



4)

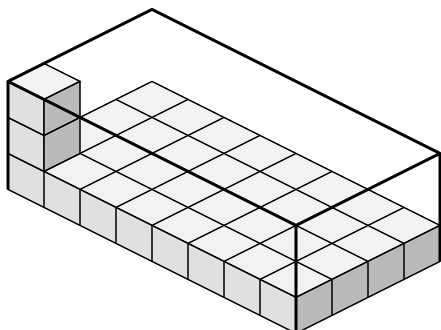


6. \_\_\_\_\_

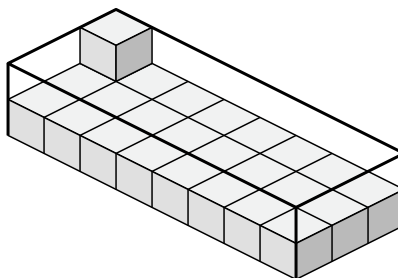
7. \_\_\_\_\_

8. \_\_\_\_\_

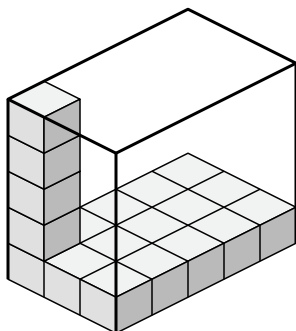
5)



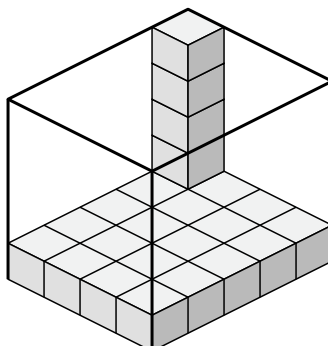
6)



7)



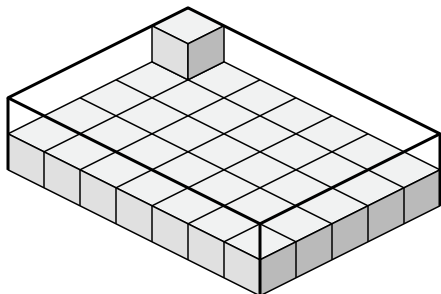
8)



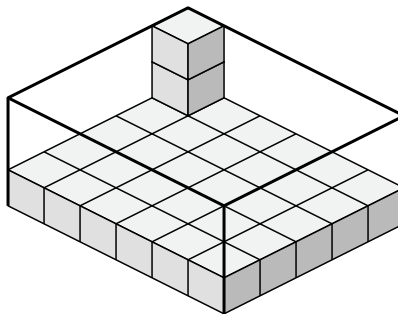


Определите объем каждой коробки. Каждый блок равен 1 кубической единице (u<sup>3</sup>).

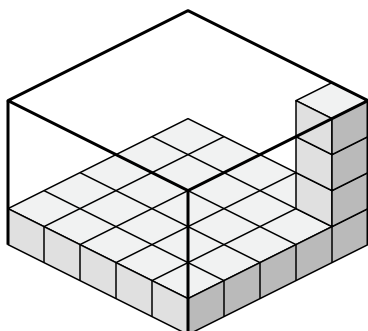
1)



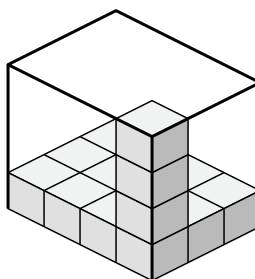
2)



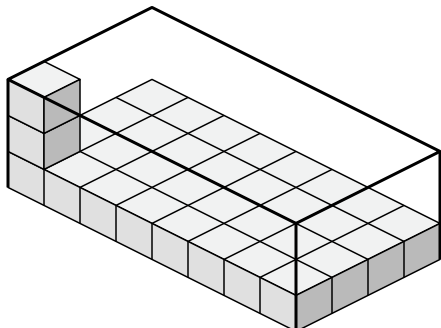
3)



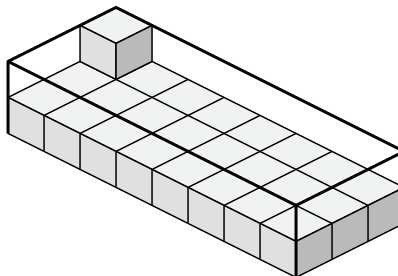
4)



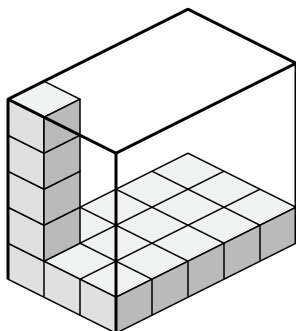
5)



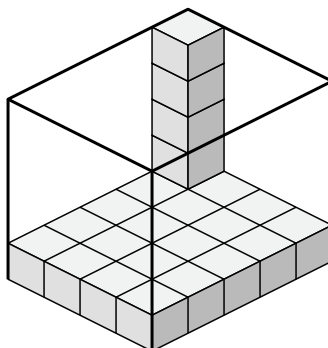
6)



7)



8)



**ОТВЕТЫ**

1. 70 u<sup>3</sup>

2. 90 u<sup>3</sup>

3. 100 u<sup>3</sup>

4. 48 u<sup>3</sup>

5. 96 u<sup>3</sup>

6. 48 u<sup>3</sup>

7. 75 u<sup>3</sup>

8. 100 u<sup>3</sup>