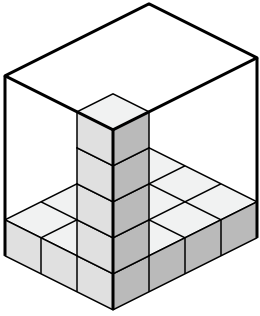




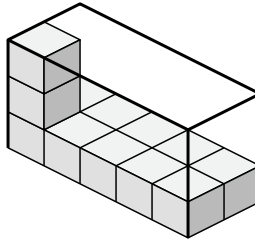
Определите объем каждой коробки. Каждый блок равен 1 кубической единице (и 3).

ОТВЕТЫ

1)



2)



1. _____

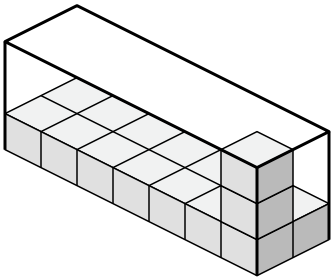
2. _____

3. _____

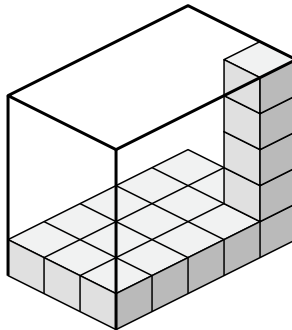
4. _____

5. _____

3)



4)

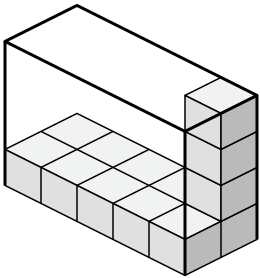


6. _____

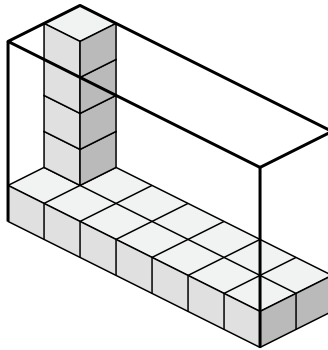
7. _____

8. _____

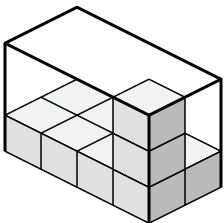
5)



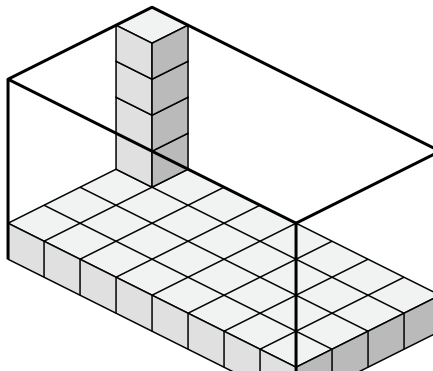
6)



7)



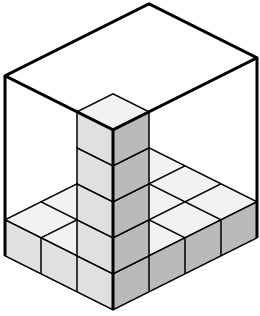
8)



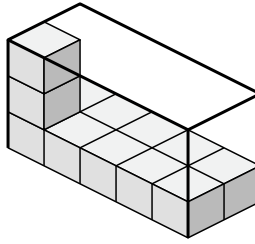


Определите объем каждой коробки. Каждый блок равен 1 кубической единице (u³).

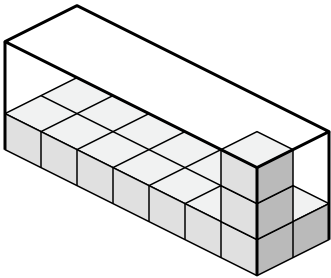
1)



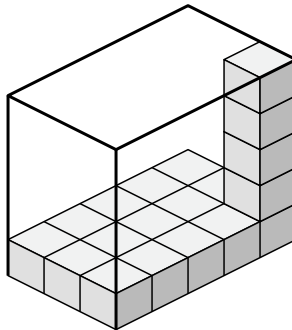
2)



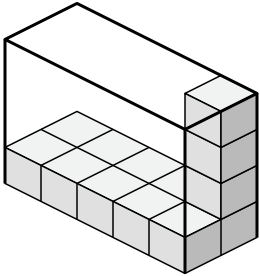
3)



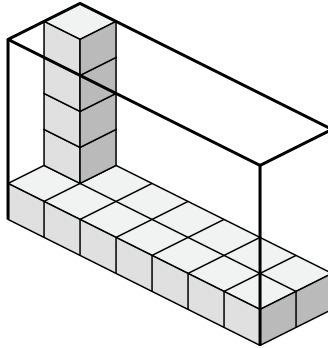
4)



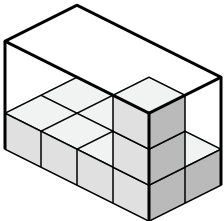
5)



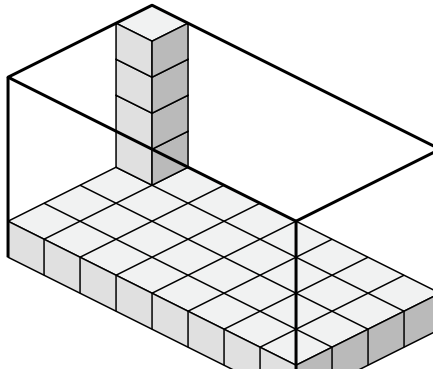
6)



7)



8)



ОТВЕТЫ

1. 60 u³

2. 30 u³

3. 42 u³

4. 75 u³

5. 40 u³

6. 70 u³

7. 24 u³

8. 160 u³