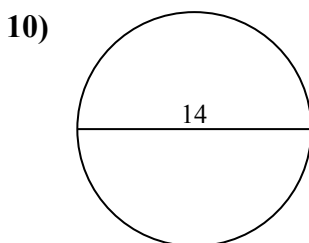
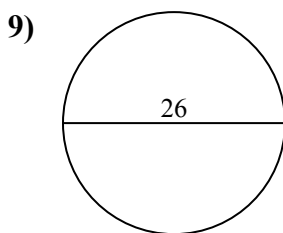
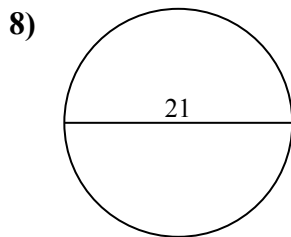
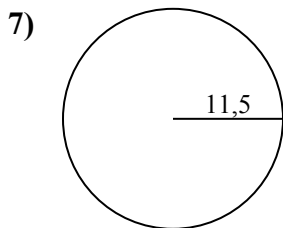
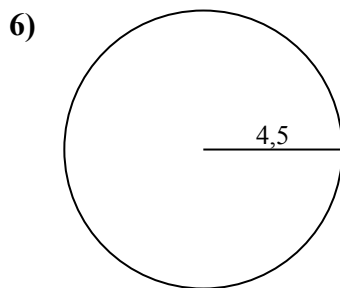
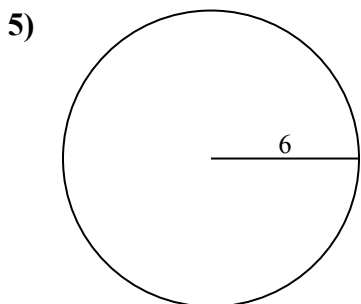
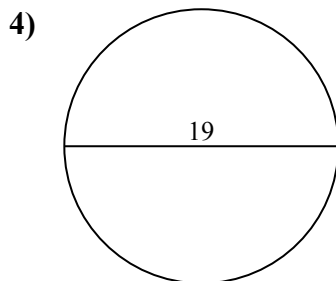
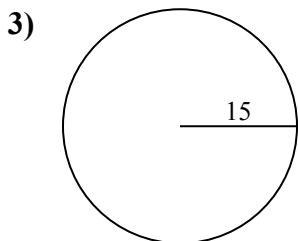
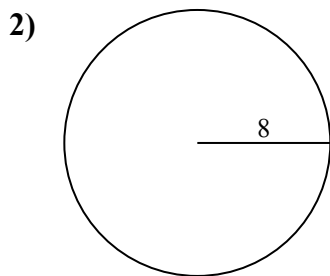
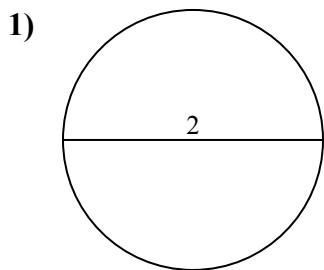




Определите окружность и площадь каждого круга. Круги не являются шкалой.

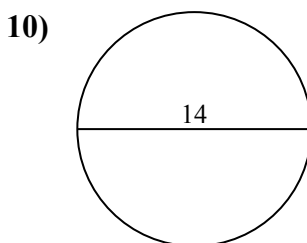
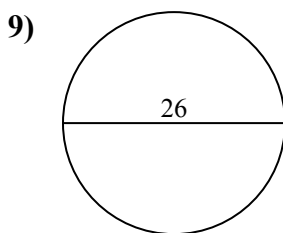
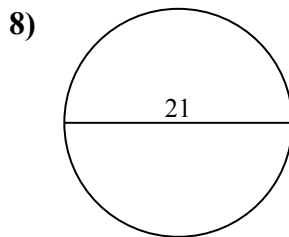
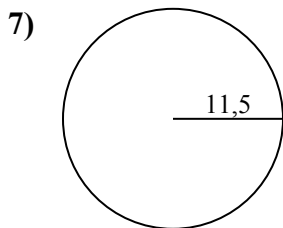
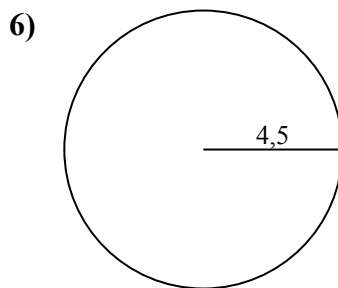
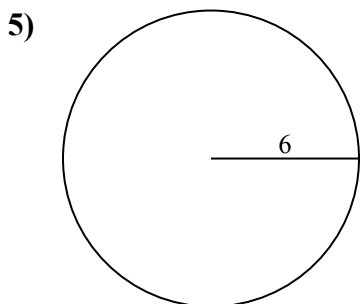
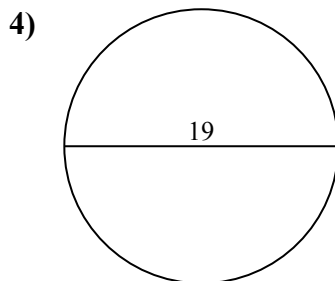
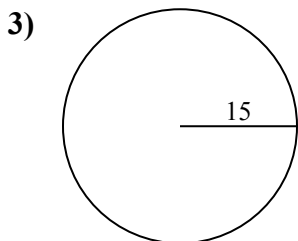
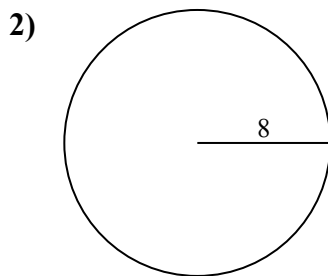
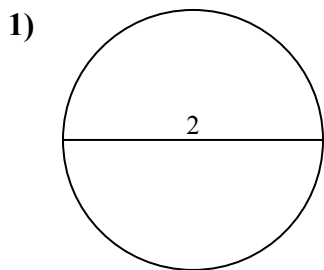


**ОТВЕТЫ**

- 1. \_\_\_\_\_
- 2. \_\_\_\_\_
- 3. \_\_\_\_\_
- 4. \_\_\_\_\_
- 5. \_\_\_\_\_
- 6. \_\_\_\_\_
- 7. \_\_\_\_\_
- 8. \_\_\_\_\_
- 9. \_\_\_\_\_
- 10. \_\_\_\_\_



Определите окружность и площадь каждого круга. Круги не являются шкалой.

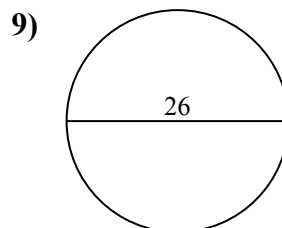
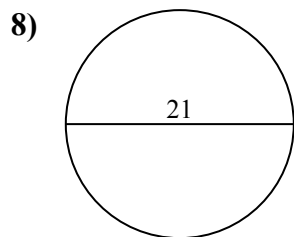
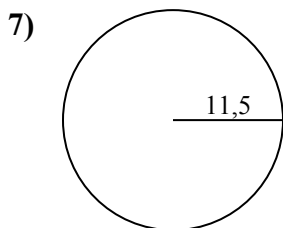
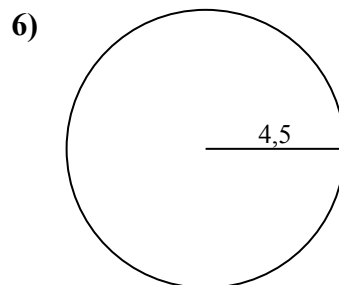
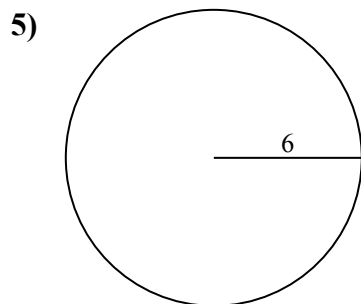
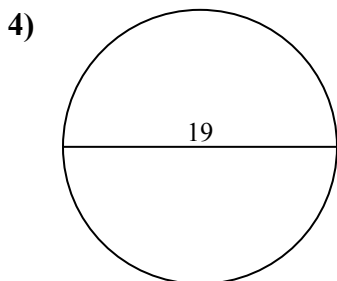
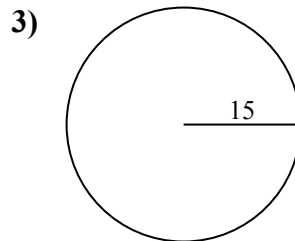
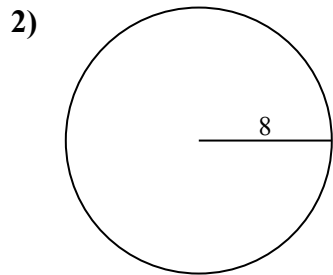
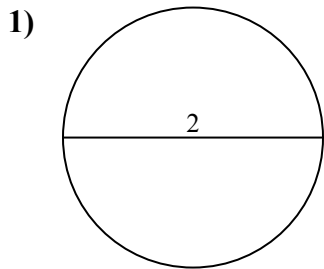
**ОТВЕТЫ**

1.	<u>3,1</u>	<u>6,3</u>
2.	<u>201,1</u>	<u>50,3</u>
3.	<u>706,9</u>	<u>94,2</u>
4.	<u>283,5</u>	<u>59,7</u>
5.	<u>113,1</u>	<u>37,7</u>
6.	<u>63,6</u>	<u>28,3</u>
7.	<u>415,5</u>	<u>72,3</u>
8.	<u>346,4</u>	<u>66</u>
9.	<u>530,9</u>	<u>81,7</u>
10.	<u>153,9</u>	<u>44</u>



Определите окружность и площадь каждого круга. Круги не являются шкалой.

81,7	72,3	706,9	346,4	94,2
6,3	530,9	415,5	37,7	66
3,1	28,3	63,6	50,3	201,1
113,1	59,7	283,5		



**ОТВЕТЫ**

1. \_\_\_\_\_
2. \_\_\_\_\_
3. \_\_\_\_\_
4. \_\_\_\_\_
5. \_\_\_\_\_
6. \_\_\_\_\_
7. \_\_\_\_\_
8. \_\_\_\_\_
9. \_\_\_\_\_