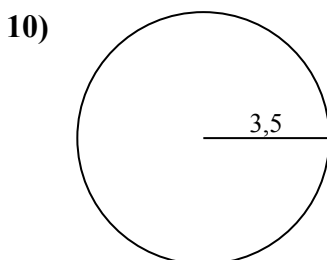
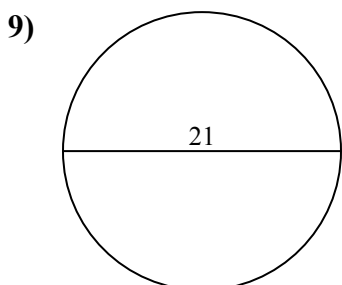
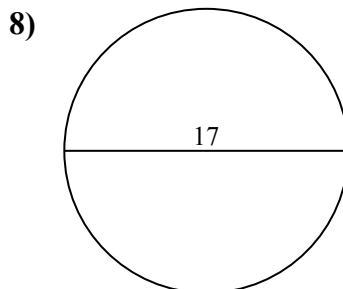
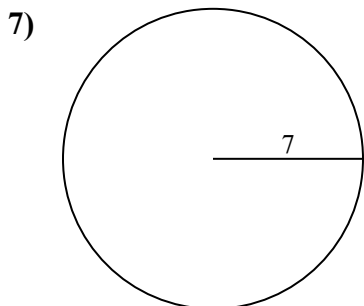
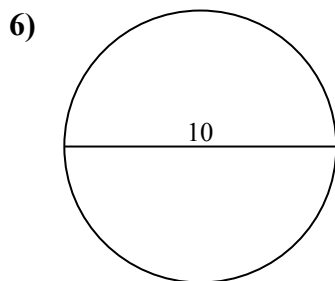
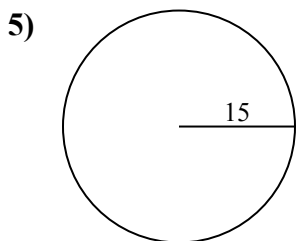
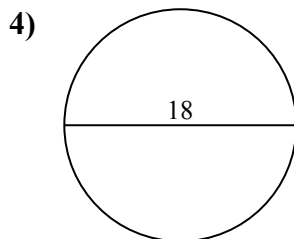
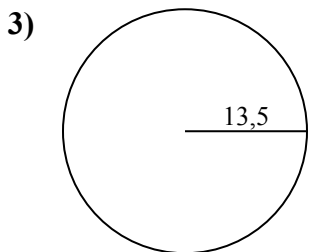
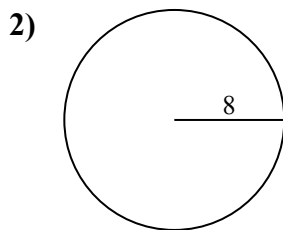
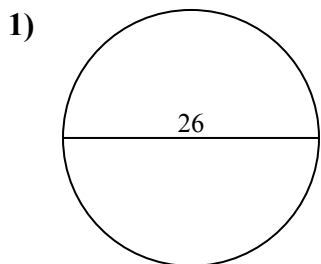




Определите окружность и площадь каждого круга. Круги не являются шкалой.

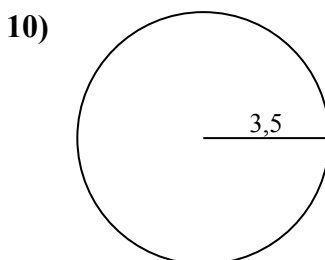
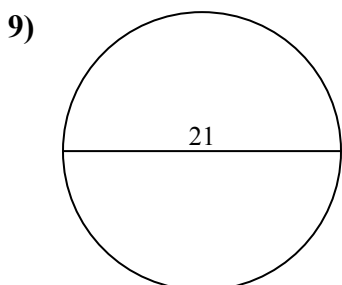
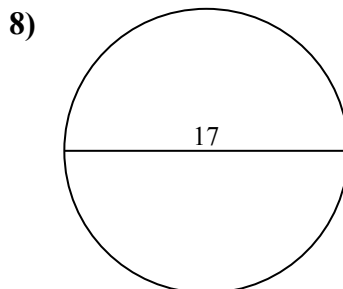
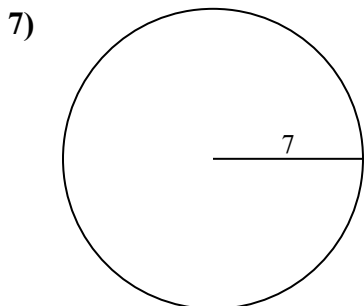
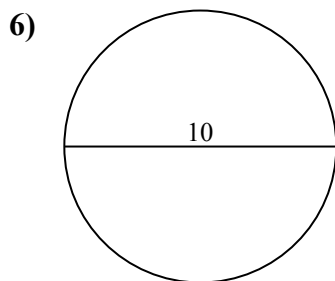
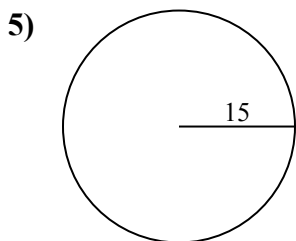
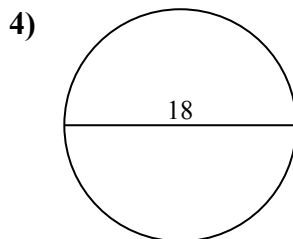
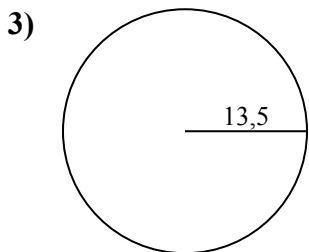
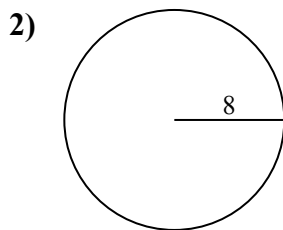
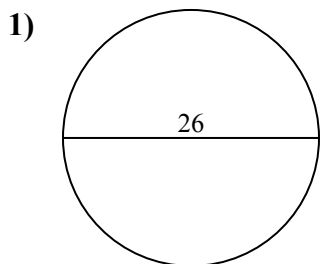
**ОТВЕТЫ**



- 1. \_\_\_\_\_
- 2. \_\_\_\_\_
- 3. \_\_\_\_\_
- 4. \_\_\_\_\_
- 5. \_\_\_\_\_
- 6. \_\_\_\_\_
- 7. \_\_\_\_\_
- 8. \_\_\_\_\_
- 9. \_\_\_\_\_
- 10. \_\_\_\_\_



Определите окружность и площадь каждого круга. Круги не являются шкалой.

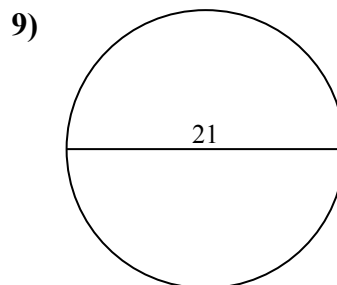
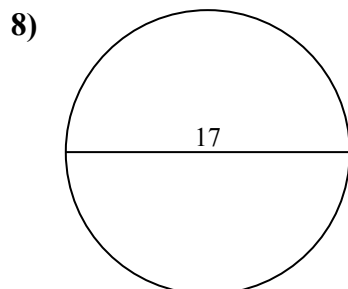
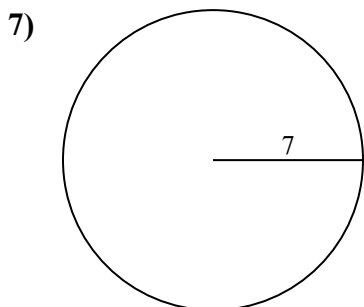
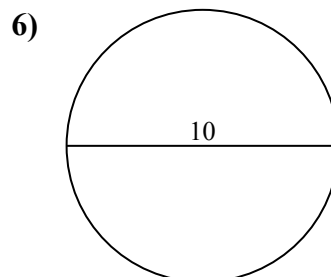
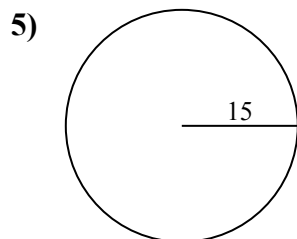
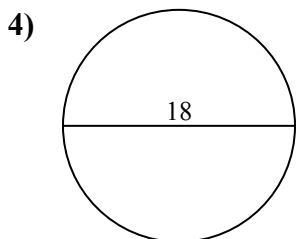
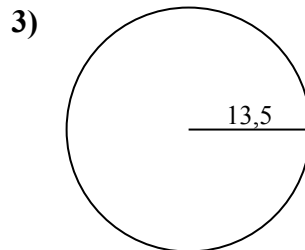
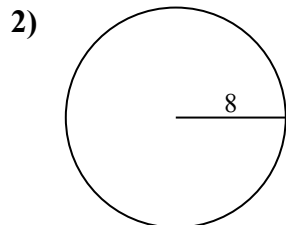
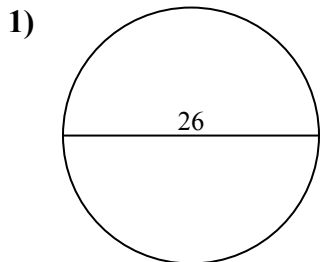
**ОТВЕТЫ**

1.	<u>530,9</u>	<u>81,7</u>
2.	<u>201,1</u>	<u>50,3</u>
3.	<u>572,6</u>	<u>84,8</u>
4.	<u>254,5</u>	<u>56,5</u>
5.	<u>706,9</u>	<u>94,2</u>
6.	<u>78,5</u>	<u>31,4</u>
7.	<u>153,9</u>	<u>44</u>
8.	<u>227</u>	<u>53,4</u>
9.	<u>346,4</u>	<u>66</u>
10.	<u>38,5</u>	<u>22</u>



Определите окружность и площадь каждого круга. Круги не являются шкалой.

227	346,4	530,9	201,1	706,9
84,8	31,4	78,5	153,9	53,4
44	94,2	66	254,5	56,5
572,6	81,7	50,3		



**ОТВЕТЫ**

1. \_\_\_\_\_
2. \_\_\_\_\_
3. \_\_\_\_\_
4. \_\_\_\_\_
5. \_\_\_\_\_
6. \_\_\_\_\_
7. \_\_\_\_\_
8. \_\_\_\_\_
9. \_\_\_\_\_