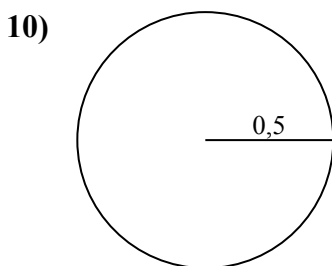
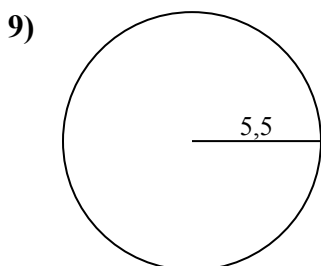
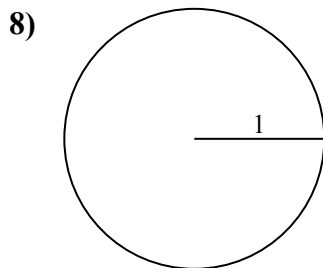
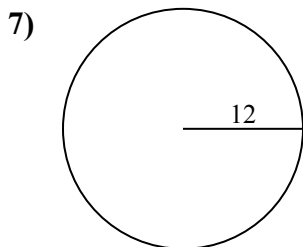
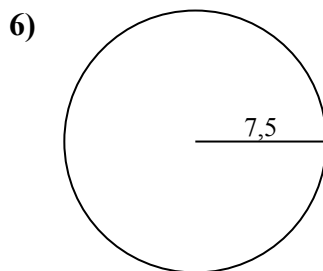
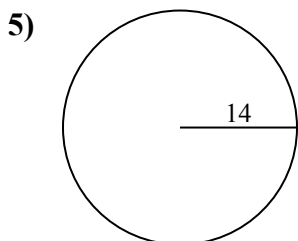
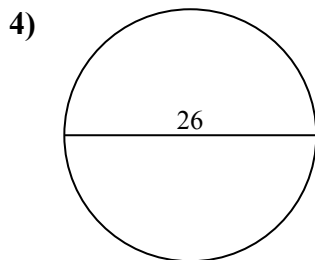
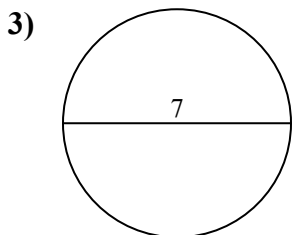
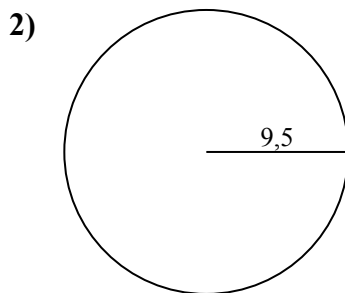
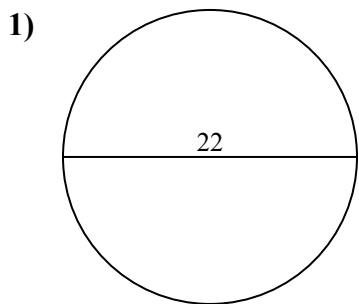




Определите окружность и площадь каждого круга. Круги не являются шкалой.

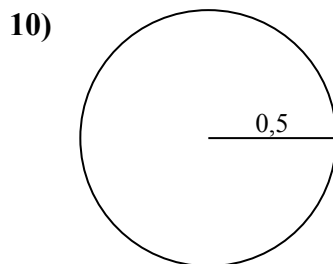
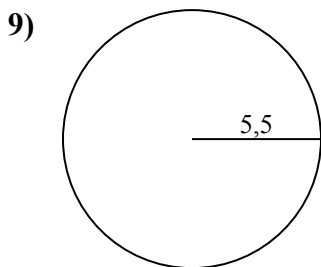
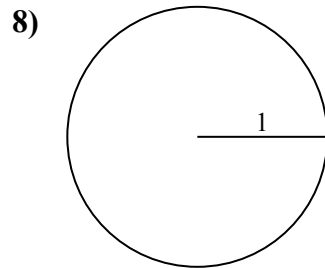
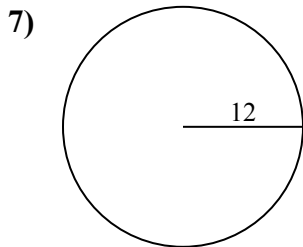
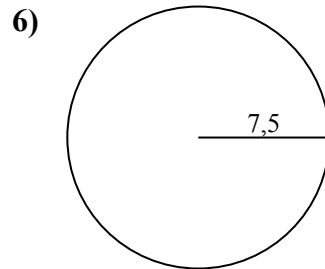
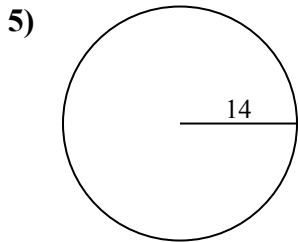
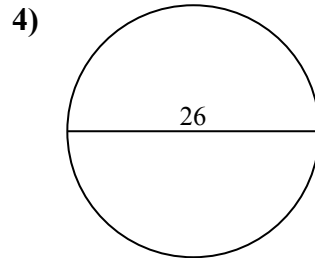
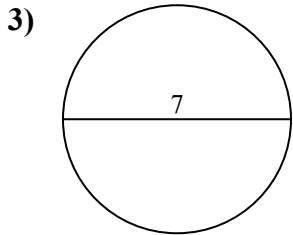
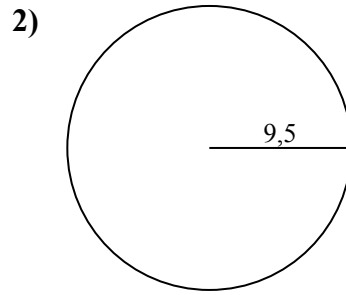
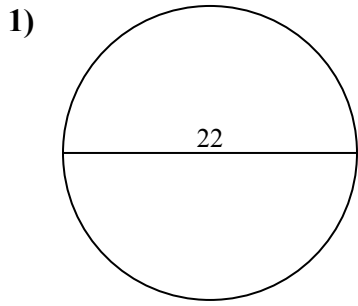


ОТВЕТЫ

1. _____
2. _____
3. _____
4. _____
5. _____
6. _____
7. _____
8. _____
9. _____
10. _____



Определите окружность и площадь каждого круга. Круги не являются шкалой.



ОТВЕТЫ

1.	<u>380,1</u>	<u>69,1</u>
2.	<u>283,5</u>	<u>59,7</u>
3.	<u>38,5</u>	<u>22</u>
4.	<u>530,9</u>	<u>81,7</u>
5.	<u>615,8</u>	<u>88</u>
6.	<u>176,7</u>	<u>47,1</u>
7.	<u>452,4</u>	<u>75,4</u>
8.	<u>3,1</u>	<u>6,3</u>
9.	<u>95</u>	<u>34,6</u>
10.	<u>0,8</u>	<u>3,1</u>

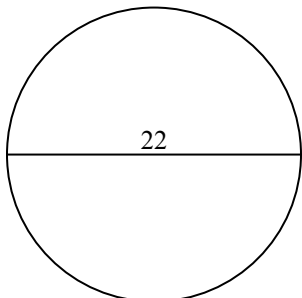


Определите окружность и площадь каждого круга. Круги не являются шкалой.

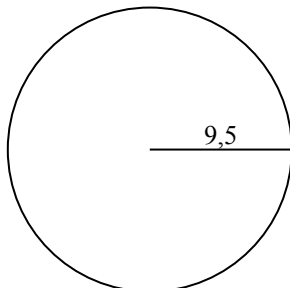
ОТВЕТЫ

95	34,6	283,5	380,1	530,9
75,4	59,7	615,8	452,4	6,3
81,7	3,1	47,1	22	176,7
69,1	38,5	88		

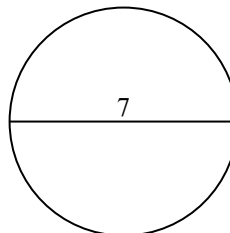
1)



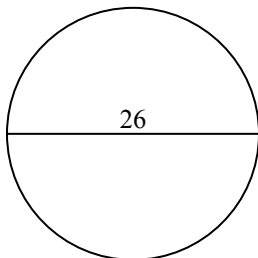
2)



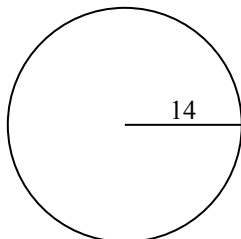
3)



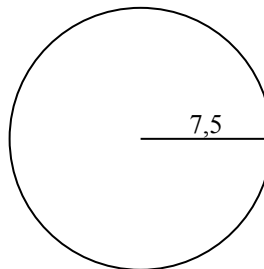
4)



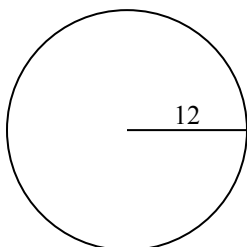
5)



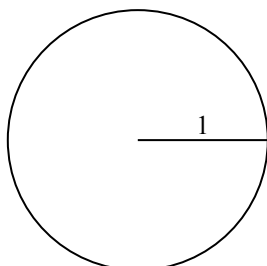
6)



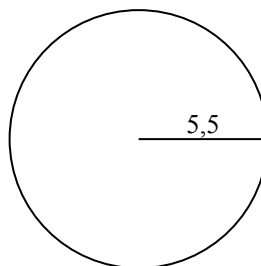
7)



8)



9)



1. _____

2. _____

3. _____

4. _____

5. _____

6. _____

7. _____

8. _____

9. _____